

**GOVERNMENT OF TAMILNADU  
DIRECTORATE OF TECHNICAL EDUCATION  
CHENNAI – 600 025**

STATE PROJECT COORDINATION UNIT

**Diploma in Civil Engineering**

Course Code: 31041

M – Scheme

e-TEXTBOOK

on

**THEORY OF STRUCTURES**

for

IV Semester DCE

**Convener for CIVIL Discipline:**

**Mr.N. Muralikrishniah, M.E.,**  
Principal / IPT &  
Principal (Addl. Charge)  
Central Polytechnic College,  
Taramani, Chennai – 600 113  
Email : muralinapa@gmail.com

**Team Members for Theory of Structures**

1. **Mr.S.Loganathan, M.E.,**  
HoD /CIVIL,  
Thiagarajar Polytechnic College,  
Salem – 636 005
2. **Mr.V.Amalraj, M.E.,**  
Lecturer (Sel.Gr.) / CIVIL,  
Government Polytechnic College for Women,  
Coimbatore – 641 044
3. **Mr.T.Thangamani, M.E.,**  
Lecturer (Sel.Gr.) / CIVIL,  
Srinivasa Subbaraya Polytechnic College,  
Puttur, Sirkali – 609 108

**Validated by**

**Dr.V.Karthikeyan, M.E., Ph.D., MCMI(UK)., FIE.,**  
Principal,  
Thiagarajar Polytechnic College,  
Salem – 636 005.

## **DETAILED SYLLABUS**

### **UNIT-I**

#### **1.1 SLOPE AND DEFLECTION OF BEAMS**

Deflected shapes / Elastic curves of beams with different support conditions –Definition of Slope and Deflection- Flexural rigidity and Stiffness of beams- Mohr's Theorems – Area Moment method for slope and deflection of beams – Derivation of expressions for maximum slope and maximum deflection of standard cases by area moment method for cantilever and simply supported beams subjected to symmetrical UDL & point loads – Numerical problems on determination of slopes and deflections at salient points of Cantilevers and Simply supported beams from first principles and by using formulae

#### **1.2 PROPPED CANTILEVERS**

Statically determinate and indeterminate Structures- Stable and Unstable Structures- Examples- Degree of Indeterminacy-Concept of Analysis of Indeterminate beams - Definition of Prop –Types of Props- Prop reaction from deflection consideration – Drawing SF and BM diagrams by area moment method for UDL throughout the span, central and non-central concentrated loads – Propped cantilever with overhang – Point of Contra flexure.

### **UNIT-II**

#### **2.1 FIXED BEAMS – AREA MOMENT METHOD**

Introduction to fixed beam - Advantages –Degree of indeterminacy of fixed beam- Sagging and Hogging bending moments – Determination of fixing end(support) moments(FEM) by Area Moment method – Derivation of Expressions for Standard cases – Fixed beams subjected to symmetrical and unsymmetrical concentrated loads and UDL – Drawing SF and BM diagrams for Fixed beams with supports at the same level (sinking of supports or supports at different levels are not included) – Points of Contra flexure – Problems- Determination of Slope and Deflection of fixed beams subjected to only symmetrical loads by area moment method – Problems.

#### **2.2 CONTINUOUS BEAMS – THEOREM OF THREE MOMENTS METHOD**

Introduction to continuous beams – Degree of indeterminacy of continuous beams with respect to number of spans and types of supports –Simple/Partially fixed / Fixed supports of beams- General methods of analysis of Indeterminate structures – Clapeyron's theorem of three moments – Application of Clapeyron's theorem of three moments for the following cases – Two span beams with both ends simply supported or fixed – Two span beams with one end fixed and the other end simply supported – Two span beams with one end simply supported or fixed and other end overhanging –Determination of Reactions at Supports- Application of Three moment equations to Three span Continuous Beams and Propped cantilevers –Problems- Sketching of SFD and BMD for all the above cases.

### **UNIT-III**

#### **3.1 CONTINUOUS BEAMS – MOMENT DISTRIBUTION METHOD**

Introduction to Carry over factor, Stiffness factor and Distribution factor –Stiffness Ratio or Relative Stiffness- Concept of distribution of un balanced moments at joints - Sign conventions – Application of M-D method to Continuous beams of two / three spans and to Propped cantilever (Maximum of three cycles of distribution sufficient) –Finding Support Reactions- Problems - Sketching SFD and BMD for two / three span beams.

### **3.2 PORTAL FRAMES – MOMENT DISTRIBUTION METHOD**

Definition of Frames – Types – Bays and Storey - Sketches of Single/Multi Storey Frames, Single/Multi Bay Frames- Portal Frame – Sway and Non- sway Frames- Analysis of Non sway (Symmetrical) Portal Frames for Joint moments by Moment Distribution Method and drawing BMD only– Deflected shapes of Portal frames under different loading / support conditions.

## **UNIT-IV**

### **4.1 COLUMNS AND STRUTS**

Columns and Struts – Definition – Short and Long columns – End conditions – Equivalent length / Effective length– Slenderness ratio – Axially loaded short column - Axially loaded long column – Euler's theory of long columns – Derivation of expression for Critical load of Columns with hinged ends – Expressions for other standard cases of end conditions (separate derivations not required) – Problems – Derivation of Rankine's formula for Crippling load of Columns– Factor of Safety- Safe load on Columns- Simple problems.

### **4.2 COMBINED BENDING AND DIRECT STRESSES**

Direct and Indirect stresses – Combination of stresses – Eccentric loads on Columns – Effects of Eccentric loads / Moments on Short columns – Combined direct and bending stresses – Maximum and Minimum stresses in Sections– Problems – Conditions for no tension – Limit of eccentricity – Middle third rule – Core or Kern for square, rectangular and circular sections – Chimneys subjected to uniform wind pressure –Combined stresses in Chimneys due to Self weight and Wind load- Chimneys of Hollow square and Hollow circular cross sections only – Problem

## **UNIT-V**

### **5.1 MASONRY DAMS**

Gravity Dams – Derivation of Expression for maximum and minimum stresses at Base – Stress distribution diagrams – Problems – Factors affecting Stability of masonry dams – Factor of safety- Problems on Stability of Dams– Minimum base width and maximum height of dam for no tension at base – Elementary profile of a dam – Minimum base width of elementary profile for no tension.

### **5.2 EARTH PRESSURE AND RETAINING WALLS**

Definition – Angle of repose /Angle of Internal friction of soil– State of equilibrium of soil – Active and Passive earth pressures – Rankine's theory of earth pressure – Assumptions – Lateral earth pressure with level back fill / level surcharge (Angular Surcharge not required)– Earth pressure due to Submerged soils – (Soil retained on vertical back of wall only) – Maximum and minimum stresses at base of Trapezoidal Gravity walls – Stress distribution diagrams – Problems – Stability of earth retaining walls – Problems to check the stability of walls- Minimum base width for no tension.

## **UNIT – I**

### **1.1 SLOPE AND DEFLECTION OF BEAMS**

---

#### **1.1 SLOPE AND DEFLECTION OF BEAMS**

Deflected shapes / Elastic curves of beams with different support conditions –Definition of Slope and Deflection- Flexural rigidity and Stiffness of beams- Mohr's Theorems – Area Moment method for slope and deflection of beams – Derivation of expressions for maximum slope and maximum deflection of standard cases by area moment method for cantilever and simply supported beams subjected to symmetrical UDL & point loads – Numerical problems on determination of slopes and deflections at salient points of Cantilevers and Simply supported beams from first principles and by using formulae.

---

### **CHAPTER 1**

#### **1.1 INTRODUCTION**

##### **1. Beam**

A structural member which is acted upon by a system of external loads at right angles to its axis is known as beam. Generally, a beam is a horizontal member to support floor slabs, secondary beams, walls, stairs etc.

##### **2. Classification of structure**

**In general, the following are two types of structures**

###### **a) According to static equilibrium equation**

- i) Statically determinate structures
- ii) Statically indeterminate structures

Further, the above structures are classified according to support conditions as presented below

###### **b) According to support conditions**

- 1. Cantilever beam
- 2. Simply supported beam
- 3. Propped cantilever beam
- 4. Overhanging beam
- 5. Fixed beam
- 6. Continuous beam

##### **3. Shear force (S.F)**

The Shear Force at any section of a beam is the algebraic sum of all the forces acting either left or right of that section. It is denoted by  $F$  (or)  $SF$ . The symbol of  $SF$  is  $F$ (or) $V$ (or) $SF$ .



#### 4. Bending moment (B.M)

The bending moment at any section of a beam is the algebraic sum of all the moments of the forces acting either left (or) right of that section. It is denoted by B.M(or) M.

##### 1.1.1 Deflected shapes of beam / Elastic line (or) elastic curve of beam

When a beam is subjected to transverse loads it develops shear force and bending moment at every cross section. Due to transverse load the beam gets deflected. The deflected configuration of the beam is known as deflected shape.

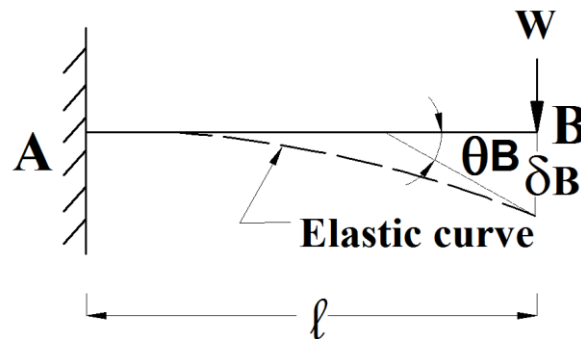


Fig 1.1 Elastic curve

Where,  $\theta_B$  = Slope at B

$\delta_B$  = Deflection of free end(B)

##### (a) Elastic line (or) elastic curve of beam

The configuration of the longitudinal axis of the beam after bending takes place due to loading is called elastic curve. (or)

The edge view of the deflected neutral surface of a beam is known as elastic curve.

The deflected shape of various types of beam is presented below

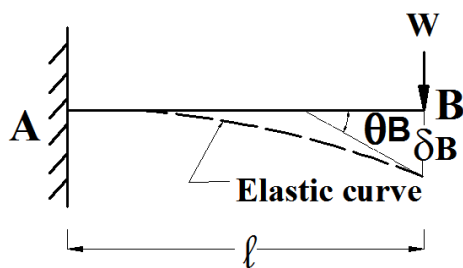


Fig 1.2 For a cantilever beam

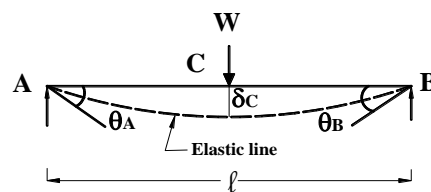


Fig 1.3 For a simply supported beam

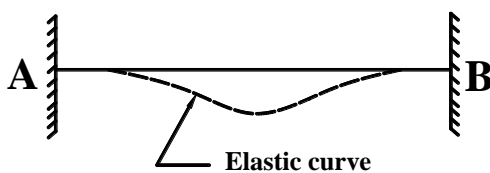


Fig 1.4 For a fixed beam

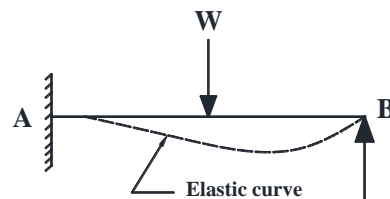


Fig 1.5 For a propped cantilever

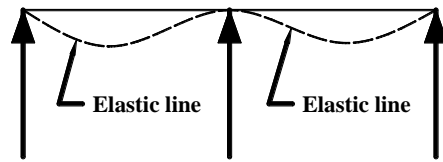


Fig 1.6 For a continuous beam

### 1.1.2 Slope and Deflection

#### (a) Slope ( $\theta$ or $i$ )

The angle made by the tangent at a point on the elastic curve with the horizontal is called the slope at the point. It is denoted by  $\theta$  (or)  $i$ .




Fig 1.7

#### (b) Deflection ( $\delta$ or $y$ )

The vertical distance between the original axis to the elastic curve of the beam after loading is called deflection. It is denoted by  $\delta$  (or)  $y$ .

### 1.1.3 Flexural rigidity and Stiffness of beams

#### (a) Flexural rigidity ( $EI$ )

The product of values of young's modulus and  $MI$  about Neutral axis is called flexural rigidity.

$$\begin{aligned} \text{ie. Flexural rigidity} &= \text{Young's modulus} \times M.I \\ &= E \times I = EI \end{aligned}$$

The product of  $EI$  is expressed in  $N.mm^2$  (or)  $kN.m^2$

#### (b) Stiffness

Stiffness of a beam is the property of resistance against rotation and deflection. The moment required to produce unit rotation of slope is called stiffness of the beam. It is depends upon the end conditions, flexural rigidity and span of the beam.

1. Stiffness factor,  $k = \frac{4EI}{l} \rightarrow$  for fixed ends
2. Stiffness factor,  $k = \frac{3EI}{l} \rightarrow$  for simply supported ends

### 1.1.3 Book Work - I

#### a) Differential Equation

Derive the differential equation of flexure (or) relation between slope deflection and radius of curvature.

ie 
$$M = EI \frac{d^2 y}{dx^2}$$

### Solution

Consider a small portion of PQ of length 'ds' of a beam as shown in fig.1.4

R = Radius of curvature

dθ = Angle bounded by the arc 'ds' at centre

We know,

Arc length ds = dx = R. dθ

$$\frac{1}{R} = \frac{d\theta}{dx} \rightarrow (1)$$

$$\tan \theta = \frac{dy}{dx} \quad \therefore \frac{dy}{dx} = \theta$$

Differentiate w.r.t. x

$$\frac{d^2 y}{dx^2} = \frac{d\theta}{dx} \rightarrow (2)$$

$$\frac{M}{I} = \frac{f}{y} = \frac{E}{R} \quad \frac{M}{I} = \frac{E}{R}$$

$$\frac{1}{R} = \frac{M}{EI} \rightarrow (4)$$

$$\therefore \frac{M}{EI} = \frac{d^2 y}{dx^2}$$

$$M = EI \frac{d^2 y}{dx^2}$$

$$M = EI \frac{d^2 y}{dx^2}$$

Differential equation of flexure.

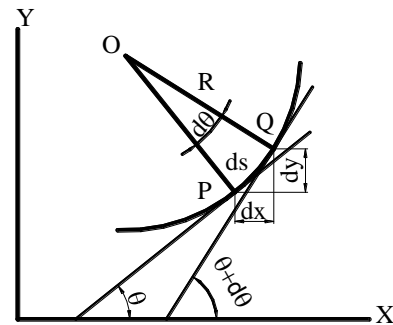


Fig 1.8

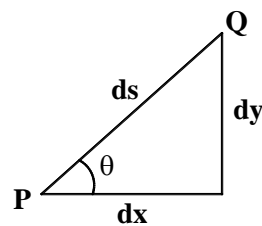


Fig 1.9

**Note:**

$$EI \frac{d^2 y}{dx^2} = M \rightarrow \text{Flexural differential equation.}$$

$$\int EI \frac{d^2 y}{dx^2} = \text{slope} = EI \left( \frac{dy}{dx} \right)$$

$$\iint EI \frac{d^2 y}{dx^2} = \text{deflection} = EI y$$

$$\frac{d(M)}{dx} = \frac{d}{dx} \left( \frac{EI d^2 y}{dx^2} \right) = F = \text{shear force.}$$

$$\frac{d}{dx} \left( \frac{EI d^3 y}{dx^3} \right) = w = \text{Rate of loading}$$

### 1.1.3 (b) Method of finding the slope and deflection

The following are the various methods for slope and deflection.

1. Mohr's area moment method
2. Double integration method

3. Macaulay's method
4. Strain energy method
5. Conjugate beam method

#### 1.1.4 Area moment method

It is a simple method, Mohr's Theorem I & II are used for the determination of slope and deflection of beams at any section with reference to the B.M.D., hence it is called as Mohr's area moment method.

##### 1.1.4 (a) Mohr's Theorem – I

It states that the change of slope between any two points on an elastic curve is equal to the area of BMD between the two points divided by flexural rigidity.

$$\text{Slope} = \theta = \frac{A}{EI}$$

##### (b) Mohr's Theorem – II

It states that the intercept taken on a vertical reference line of tangents at any two points on an elastic curve is equal to the moment area of BMD between these points about the reference line divided by flexural rigidity.

$$Y = \frac{A\bar{x}}{EI} = \text{deflection.}$$

Where,  $A$  = Net area of BMD  
 $A\bar{x}$  = Net moment area of BMD.  
 $EI$  = Flexural rigidity

#### Book Work – 2

#### State and prove Mohr's theorem for slope (Mohr's theorem – I)

##### 1.1.4 (b) Mohr's Theorem - I

It states that the change of slope between any two points on an elastic curve is equal to the area of BMD between the two points divided by flexural rigidity.

$$\theta = \frac{A}{EI} = \text{slope}$$

Where

$A$  = Net area of BMD  
 $EI$  = Flexural rigidity.

#### Proof

Consider a beam AB deflected as shown in fig.

Consider two points P & Q and draw tangents at P and Q.

$PQ = dx = \text{length of curve}$

$d\theta = \text{change of slope}$

We know

$$dx = R \cdot d\theta$$

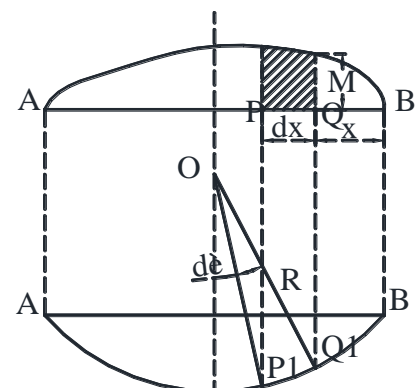


Fig 1.10

$$\frac{1}{R} = \frac{d\theta}{dx} \rightarrow (1)$$

But  $\frac{M}{I} = \frac{E}{R} \rightarrow (2)$

$$\therefore \frac{M}{EI} = \frac{d\theta}{dx}$$

$$d\theta = \frac{M}{EI} \times dx$$

$$\therefore \theta_B = \frac{\Sigma M dx}{EI} = \frac{A}{I}$$

$$\theta_B = \frac{A}{EI} \quad \text{Where } \Sigma M \cdot dx = A = \text{Net area of BMD}$$

### Book Work – 3

State and prove Mohr's Theorem – II for deflection.

#### 1.1.4 (c) Mohr's Theorem – II

It states that the intercept taken on a vertical reference line of tangents at any two points on an elastic curve is equal to the moment area of BMD between these points about the reference line divided by flexural rigidity.

ie  $y = \frac{A\bar{x}}{EI}$

Where  $A\bar{x}$  = Moment area of BMD  
EI = Flexural rigidity

#### Proof

Consider a BMD as shown in fig.

$$d\theta = \frac{M dx}{EI}$$

$$d\theta \bar{x} = \frac{M dx}{EI} \bar{x} \quad (A = \Sigma M dx)$$

$$\delta_{A/B} = \frac{\Sigma M dx}{EI} \bar{x} = \frac{A\bar{x}}{EI}$$

$$\delta_{A/B} = \frac{A\bar{x}}{EI} \quad \text{deflection}$$

Where  $M dx$  = area of BMD  
 $\bar{x}$  = centroid of BMD  
 $A\bar{x}$  = Moment area of BMD

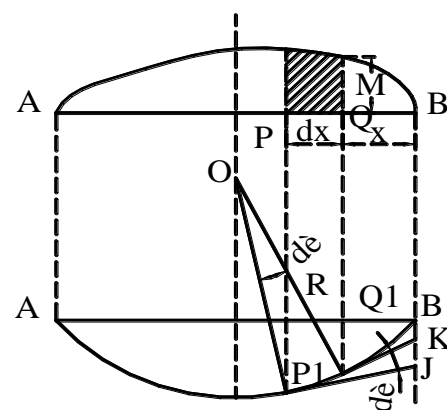


Fig 1.11

### 1.1.5 Slope and Deflection for standard cases

#### Book Work – 4

#### 1.1.5 (a) Cantilever beam with point load 'W' at free end.

Derive the max. slope and deflection for a cantilever beam with point load 'W' at free end.

#### **Solution**

Consider a cantilever beam loaded as shown in fig.

Draw BMD as shown in fig.

Draw tangents at A & B to the elastic curve.

#### **By Mohr's Theorem - I**

$$\theta = \frac{A}{EI}$$

A = Area of BMD

$$A = \frac{1}{2} \times b \times h$$

$$A = \frac{1}{2} \times \ell \times W\ell = \frac{W\ell^2}{2}$$

$$\theta_B = \frac{A}{EI} = \frac{1}{EI} \times \left( \frac{W\ell^2}{2} \right)$$

$$\theta_B = \frac{W\ell^2}{2EI}$$

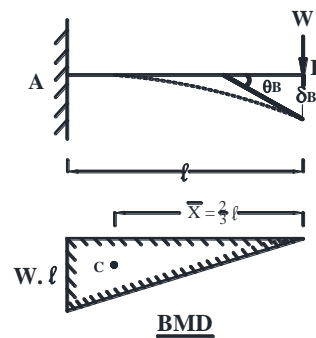


Fig 1.12

#### **By Mohr's Theorem – II**

$$\delta_B = \delta_{\max} = \frac{A\bar{x}}{EI} = \frac{1}{EI} \left[ \frac{W\ell^2}{2} \times \frac{2}{3}\ell \right]$$

$\bar{x}$  = Centroid of BMD from B

$$\bar{x} = \frac{2}{3}\ell$$

$$\delta_B = \delta_{\max} = \frac{W\ell^3}{3EI}$$

 deflection at B

## Book Work – 5

### 1.1.5 (a) Cantilever beam with udl ( $w/m$ )

Derive the max. slope and deflection for a cantilever beam with udl over entire span.

#### Solution

Consider a cantilever beam loaded as shown in fig.

Draw BMD

Let  $A$  = area of BMD between A & B

$$A = \frac{1}{3} \times b \times h$$

$$A = \frac{1}{3} \times \ell \times \frac{w\ell^2}{2} = \frac{w\ell^3}{6}$$

$\bar{x}$  = Centroid of BMD from B

$$\bar{x} = \frac{3}{4} \times \ell$$

#### By Mohr's Theorem – I

$$\theta_B = \frac{A}{EI}$$

$$\theta_B = \frac{1}{EI} \left( \frac{w\ell^3}{6} \right) = \frac{w\ell^3}{6EI}$$

$$\theta_B = \frac{w\ell^3}{6EI} \quad \text{slope at B}$$

#### By Mohr's Theorem – II;

$$\delta_B = \delta_{\max} = \frac{A\bar{x}}{EI}$$

$$\delta_B = \delta_{\max} = \frac{1}{EI} \left( \frac{w\ell^3}{6} \times \frac{3}{4} \ell \right)$$

Deflection at B =

$$\delta_B = \delta_{\max} = \left( \frac{w\ell^4}{8EI} \right)$$

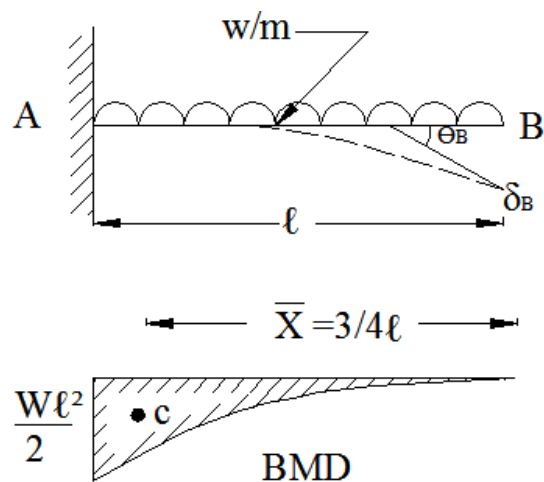


Fig 1.13

## Solved Problems

### Problem 1

A cantilever beam 2m span 200mm wide and 400mm deep. Carries a point load of 10 kN at free end. Find the max. slope and deflection by area moment method take

$E = 2.0 \times 10^5 \text{ N/mm}^2$ .

**Given data:**

**By area moment method**

Span  $\ell = 2\text{m} = 2000 \text{ mm}$   
 Wide  $b = 200\text{mm}$   
 Depth  $d = 400\text{mm}$   
 $E = 2.0 \times 10^5 \text{ N/mm}^2$



### Solution

#### (i) Moment of inertia (I)

$$\text{M.I. (I)} = \frac{bd^3}{12} = \frac{200 \times 400^3}{12} = 1.067 \times 10^9 \text{ mm}^4$$

#### (ii) Bending Moment

W.  $\ell = 10 \times 2 = 20 \text{ kN.m}$

Draw BMD as shown in fig.1.9

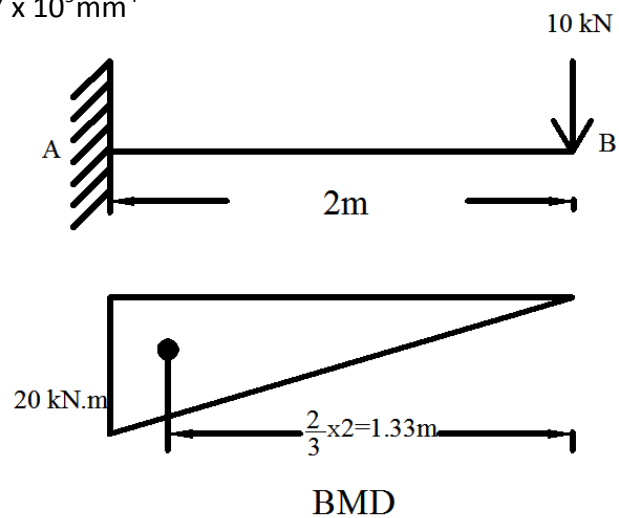
A = area of BMD

$$A = \frac{1}{2} \times b \times h$$

$$A = \frac{1}{2} \times 2 \times 20 = 20 \text{ kNm}^2 = 20 \times 10^9 \text{ Nmm}^2$$

$\bar{x}$  = Centroid of BMD draw B

$$\bar{x} = \frac{2}{3} \times 2 = 1.33\text{m} = 1.33 \times 10^3 \text{ mm}$$



#### (ii) Slope & Deflection

**By Mohr's Theorem – I**

$$\text{Slope } \theta_B = \frac{A}{EI} = \frac{20 \times 10^9}{(2.0 \times 10^5)(1.067 \times 10^9)} \text{ radians}$$

$$\text{Slope } \theta_B = 9.37 \times 10^{-5} \text{ radians}$$

#### (iii) Deflection ( $\delta_B$ )

**By Mohr's Theorem – II**

$$\text{Deflection } \delta_B = \frac{A\bar{x}}{EI}$$

$$\begin{aligned} \text{Deflection } \delta_{\max} &= \frac{1}{EI} (A\bar{x}) = \frac{1}{(2.0 \times 10^5)(1.067 \times 10^9)} (20 \times 1.33) \times 10^{12} \\ &= 1.24 \times 10^{-4} \text{ m} \end{aligned}$$

$$\delta_{\max} = 0.125 \text{ mm}$$



### Alternate method

$$(i) \text{Slope } \theta = \frac{W\ell^2}{2EI} = \frac{10 \times 10^3 \times (2000)^2}{2 \times [(2 \times 10^5)(1.067 \times 10^9)]} = 9.37 \times 10^{-5} \text{ radian}$$

### (ii) Deflection ( $\delta_B$ )

$$\delta_B = \frac{W\ell^3}{3EI} = \frac{10 \times 10^3 \times (2000)^3}{3[(2 \times 10^5)(1.067 \times 10^9)]} = 0.124 \text{ mm}$$
$$= 0.125 \text{ mm}$$

### Result

$$\theta_B = 9.37 \times 10^{-5} \text{ radians}$$

$$\delta_B = 0.125 \text{ mm}$$

---

### Problem 2

A cantilever beam 3m span carries a point load of 30 kN at 1m from free end. Find max. Slope and deflection. Take  $EI = 10 \times 10^4 \text{ kN.m}^2$

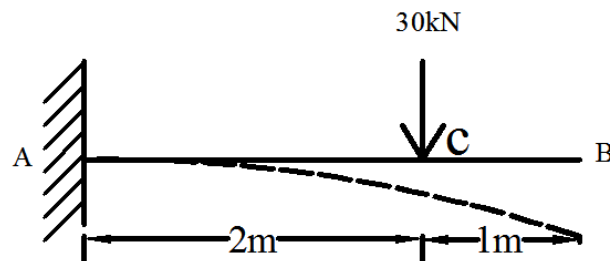
#### Given data:

$$\text{Span } \ell = 3 \text{ m}$$

$$W = 30 \text{ kN}$$

$$l_1 = 2 \text{ m}$$

$$EI = 10 \times 10^4 \text{ kN.m}^2$$



Draw BMD as shown in fig.1.10

#### Solution

##### Draw BMD

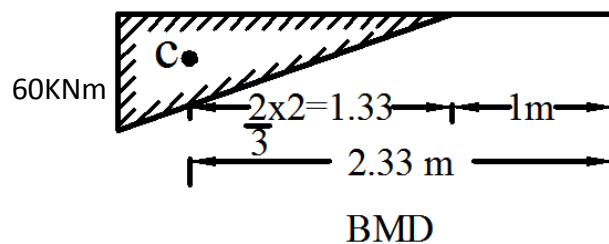
Let A = area of BMD

$$A = \frac{1}{2} \times b \times h$$

Bending Moment @ A =  $30 \times 2 = 60 \text{ kNm}$

$$A = \frac{1}{2} \times 2 \times 60 = 60 \text{ kNm}^2$$

$$\bar{x}_1 = \left(1 + \frac{2}{3} \times 2\right) = 2.33 \text{ m}$$



**(i) Slope**

**By Mohr's Theorem - I**

$$\theta_B = \frac{A}{EI} = \frac{60}{10 \times 10^4} \text{ radians}$$

$$\theta_B = 6 \times 10^{-4} \text{ radians}$$

**(ii) Deflection**

**By Mohr's Theorem – II**

$$\delta_{\max} = \frac{Ax_1}{EI}$$

$$\delta_B = \frac{Ax_1}{EI} = \frac{60 \times 2.33}{10 \times 10^4} = 1.398 \times 10^{-3} \text{ m} = 1.398 \text{ mm} = \text{Deflection at B}$$

---

**Problem 3**

A cantilever beam of span 4m is subjected to a udl of 20 kN/m over a entire length. Find the maximum slope and deflection. Take  $E = 2.1 \times 10^5 \text{ N/mm}^2$ ,  $I = 15 \times 10^8 \text{ mm}^4$

**Given data:**

Span  $\ell = 4\text{m}$

Udl  $w = 20 \text{ kN/m}$

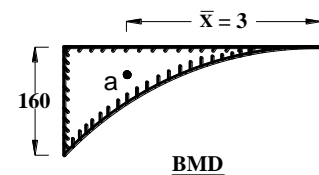
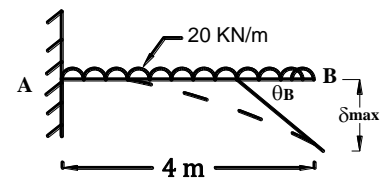
$E = 2.1 \times 10^5 \text{ N/mm}^2$

$I = 15 \times 10^8 \text{ mm}^4$

**Required**

Slope at  $\theta_B = ?$

Deflection at B  $\delta_B = ?$



**(i) Bending Moment**

$$\text{B.M @ A due to udl load} = \frac{w\ell^2}{2} = \frac{20 \times 4^2}{2} = 160 \text{ KN.m}$$

**Draw BMD**

A = area BMD

$$A = \frac{1}{2} \times b \times h$$

$$A = \frac{1}{2} \times 4 \times 160 = 213.33 \text{ kN.m}^2 = 213.33 \times 10^9 \text{ N.mm}^2$$

$\bar{x}$  = Centroid from free end

$$\bar{x} = \frac{3}{4} \times \ell = \left(\frac{3}{4} \times 4\right) = 3 \text{ m} = 3 \times 10^3 \text{ mm}$$

## (ii) Slope

By Mohr's Theorem - I

$$\theta_B = \frac{A}{EI} = \frac{213.34 \times 10^9}{(2.1 \times 10^5)(15 \times 10^8)} \text{ radians}$$

$$\theta_B = 6.772 \times 10^{-4} \text{ radians}$$

## (iii) Deflection

By Mohr's Theorem - II

$$\delta_{\max} = \frac{Ax}{EI} = \frac{(213.34 \times 3) \times 10^{12}}{(2.1 \times 10^5)(15 \times 10^8)} = 2.03 \text{ mm}$$

## Result

$$\theta_B = 6.772 \times 10^{-4} \text{ radians}$$

$$\delta_{\max} = 2.03 \text{ mm}$$

## Problem 4

A cantilever beam 3m span carries a point loads of 10 kN at free end and an udl of 2 kN/m over its entire span. Find the max. slope and deflection. Take  $EI = 2 \times 10^4 \text{ kN.m}^2$

Given data:

Span	$\ell$	= 3m
Point load	$W$	= 10 kN
udl	$w$	= 2 kN/m
	$EI$	= $2 \times 10^4 \text{ kN.m}^2$

Solution:

### (i) Bending Moment

Bending Moment @ A due to point load  
=  $Wl = 10 \times 3 = 30 \text{ kN.m}$

Bending Moment @ A due to udl

$$= \frac{wl^2}{2} = \frac{2 \times 3^2}{2} = 9 \text{ kN.m}$$

Draw BMD

$A_1$  = area of BMD for point load

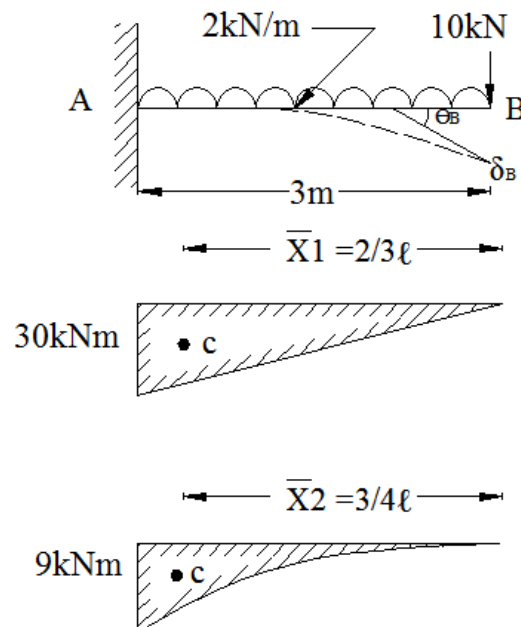
$A_2$  = area of BMD for udl

### Due to Point load

$$A_1 = \frac{1}{2} \times b \times h$$

$$A_1 = \frac{1}{2} \times 3 \times 30 = 45 \text{ kNm}^2$$

$$\bar{x}_1 = \frac{2}{3} \times 3 = 2 \text{ m}$$



### Due to Udl

$$A_2 = \frac{1}{3} \times b \times h$$

$$A_2 = \frac{1}{3} \times 3 \times 9 = 9 \text{ kNm}^2$$

$$\bar{x}_2 = \frac{3}{4} \times 3 = 2.25 \text{ m}$$

### (ii) Slope

#### By Mohr's Theorem - I

$$\theta_B = \frac{A}{EI} = \left( \frac{A_1 + A_2}{EI} \right) \text{ radian}$$

$$\theta_B = \frac{1}{2 \times 10^4} [45 + 9] = 2.7 \times 10^{-3} \text{ radians}$$

### (iii) Deflection

#### By Mohr's Theorem - II

$$\delta_{\max} = \delta_B = \frac{A\bar{x}}{EI} = \frac{1}{EI} (A_1 \bar{x}_1 + A_2 \bar{x}_2)$$

$$= \frac{1}{2 \times 10^4} ((45 \times 2) + (9 \times 2.25))$$

$$\delta_{\max} = 5.513 \times 10^{-3} \text{ m} = 5.513 \text{ mm}$$

### Result

$$\theta_B = 2.7 \times 10^{-3} \text{ radians}$$

$$\delta_B = 5.513 \text{ mm}$$

### Problem 5

A Cantilever beam of span 5m is carrying a point load of 16kN at 4m from fixed end. Calculate the slope and deflection at load point and at the free end by area moment theorem.

Take  $E = 1.5 \times 10^5 \text{ N/mm}^2$  and  $I = 4 \times 10^8 \text{ mm}^4$ .

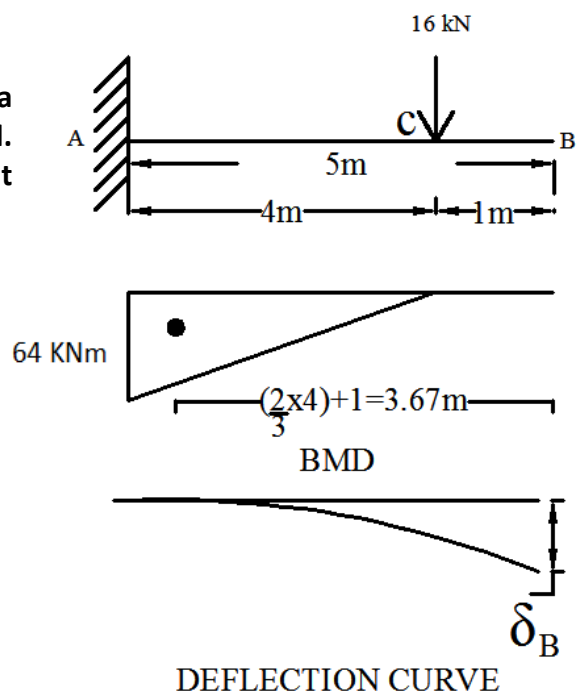
#### Given data:

Cantilever beam with point load  
Point load  $W = 16 \text{ kN}$   
Span  $\ell = 5 \text{ m}$   
 $E = 1.5 \times 10^5 \text{ N/mm}^2$   
 $I = 4 \times 10^8 \text{ mm}^4$

#### To Find:

Max slope =  $\theta = ?$

Max deflection =  $\delta = ?$



**Solution:**

$$\text{Area of BMD } A = \frac{1}{2} \times b \times h$$

$$\text{Bending moment} = WL$$

$$= 16 \times 4 = 64 \text{ kNm}$$

$$A = \frac{1}{2} \times b \times h$$

$$A = \frac{1}{2} \times 4 \times 64$$

$$A = 128 \text{ kN.m}^2$$

$$A = 128 \times 10^9 \text{ N.mm}^2$$

Centroid of BMD

$$\bar{x} = \left( \frac{2}{3} \times 4 \right) + 1$$

$$= 3.67 \text{ m} = 3.67 \times 10^3 \text{ mm}$$

**Applying Mohr 's theorem - I**

$$(i) \text{ Slope} = \theta_B = \theta_{\max} = \frac{A}{EI}$$

$$= \frac{128 \times 10^9}{(1.5 \times 10^5)(4 \times 10^8)}$$

$$\theta_B = \theta_{\max} = 2.13 \times 10^{-3} \text{ Radians}$$

**Applying Mohr 's theorem - II**

$$(ii) \text{ Deflection} = \delta_B = \delta_{\max} = \frac{A\bar{x}}{EI}$$

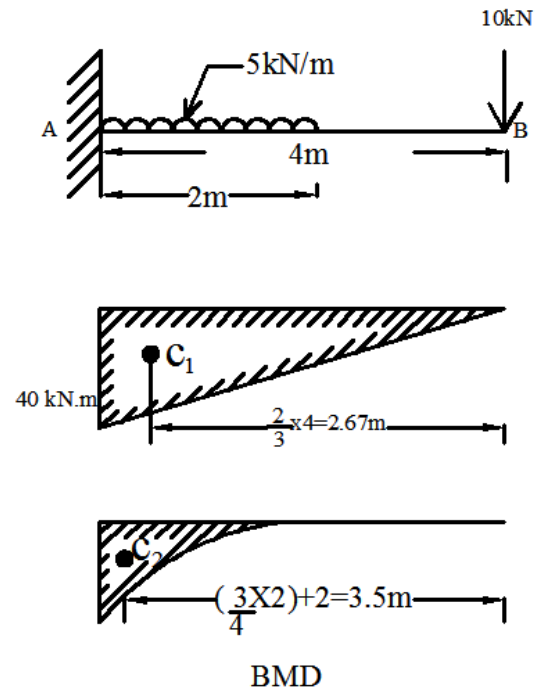
$$= \frac{(128 \times 3.67) \times 10^{12}}{(1.5 \times 10^5)(4 \times 10^8)}$$

$$\text{Deflection} = \delta_B = \delta_{\max} = 7.83 \text{ mm}$$

**Result:**

$$\text{Slope} = \theta_B = \theta_{\max} = 2.13 \times 10^{-3} \text{ Radians}$$

$$\text{Deflection} = \delta_B = \delta_{\max} = 7.83 \text{ mm}$$

**Problem 6**

A cantilever beam 4m span carries an udl of 5 kN/m over 2m from fixed end and a point load of 10 kN at free end. Find the max. slope and deflection. Take  $EI = 10 \times 10^4 \text{ kN.m}^2$ .

**Given Data:**

Span	$\ell$	= 4m
udl	$w$	= 5 kN/m
Point load	$W$	= 10 kN

$$EI = 10 \times 10^4 \text{ kN.m}^2$$

$$x = 2 \text{ m}$$

### Solution

#### (i) Bending Moment

$$\text{BM due to point load w. } \ell$$

$$= 10 \times 4 = 40 \text{ kN.m}$$

$$\text{BM due to udl at A} = \frac{wx^2}{2}$$

$$= 5 \times 2 \times \frac{2}{2} = 10 \text{ kN.m}$$

Draw BMD by parts as shown in fig.1.13

Due to point load,

$$A_1 = \frac{1}{2} \times b \times h$$

$$A_1 = \frac{1}{2} \times 4 \times 40 = 80 \text{ kNm}^2$$

$$\bar{x}_1 = \frac{2}{3} \times 4 = 2.67 \text{ m}$$

Due to UDL,

$$A_2 = \frac{1}{3} \times b \times h$$

$$A_2 = \frac{1}{3} \times 2 \times 10 = 6.67 \text{ kNm}^2$$

$$\bar{x}_2 = \left( 2 + \frac{3}{4} \times 2 \right) = 3.5 \text{ m}$$

#### (ii) Slope

By Mohr's Theorem - I

$$\theta_B = \frac{A}{EI} = \frac{(A_1 + A_2)}{EI} = \frac{80 + 6.67}{10 \times 10^4} = 8.67 \times 10^{-4} \text{ radians}$$

#### (iii) Deflection

By Mohr's Theorem – II

$$\delta_{\max} = \delta_B = \frac{A\bar{x}}{EI} = \frac{1}{EI} (A_1 \bar{x}_1 + A_2 \bar{x}_2) = \frac{1}{10 \times 10^4} (80 \times 2.67 + 6.67 \times 3.5)$$

$$\delta_{\max} = \delta_B = 2.37 \times 10^{-3} \text{ m} = 2.37 \text{ mm}$$

#### Result

$$\theta_B = 8.66 \times 10^{-4} \text{ radians}$$

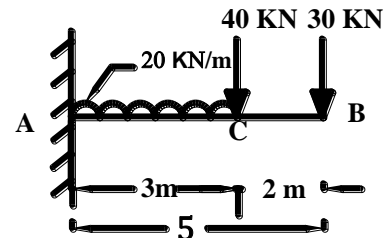
$$\delta_{\max} = 2.37 \text{ mm}$$

### Problem 7

A cantilever beam 5m span carries an udl of 20 kN/m over a length of 3 m from fixed end and two point loads of 40 kN and 30 kN at 3m and 5m from the fixed end respectively. Determine the maximum slope and deflection at the free end using Mohr's Theorem. Take  $EI = 47.05 \times 10^3 \text{ kN.m}^2$ .

#### Given data:

Span  $\ell = 5\text{ m}$   
 udl  $w = 20 \text{ kN/m}$   
 $x = 3 \text{ m}$   
 $W = 30 \text{ kN}$  at free end  
 $W_1 = 40 \text{ kN}$  at  $\ell_1 = 3 \text{ m}$   
 $EI = 47.05 \times 10^3 \text{ kN.m}^2$



#### Required

$\theta_B = ?$        $\delta_B = ?$

#### Solution:

##### (i) Bending Moment

Bending Moment at A due to udl

$$= \frac{wx^2}{2} = \frac{20 \times 3^2}{2} = 90 \text{ kN.m}$$

Bending Moment at A due to load W

$$W \times \ell = 30 \times 5 = 150 \text{ kN.m}$$

Bending Moment at A due to load  $W_1$

$$W \cdot X = 40 \times 3 = 120 \text{ kN.m}$$

Draw BMD

$$A_1 = \frac{1}{2} b x h$$

$$A_1 = \frac{1}{2} \times 5 \times 150 = 375 \text{ kN.m}^2$$

$$\bar{x}_1 = \frac{2}{3} x \ell = \frac{2}{3} \times 5 = 3.33 \text{ m}$$

$$A_2 = \frac{1}{2} b x h$$

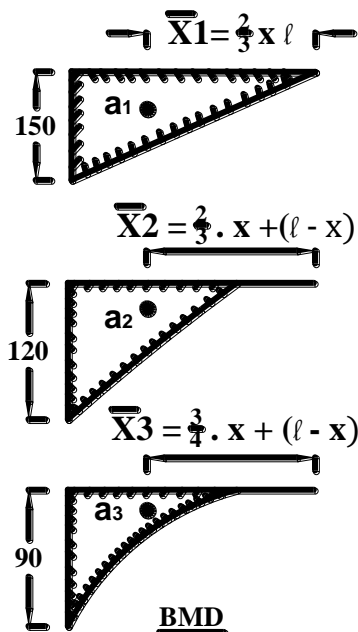
$$A_2 = \frac{1}{2} \times 3 \times 120 = 180 \text{ kN.m}^2$$

$$\bar{x}_2 = \frac{2}{3} x + (\ell - x) = \left(\frac{2}{3} \times 3\right) + 2 = 4 \text{ m}$$

$$A_3 = \frac{1}{3} b x h$$

$$A_3 = \frac{1}{3} \times 3 \times 90 = 90 \text{ kN.m}^2$$

$$\bar{x}_3 = \left(\frac{3}{4} x\right) + (\ell - x) = \left(\frac{3}{4} \times 3\right) + 2 = 4.25 \text{ m}$$



## (ii) Slope

By Mohr's Theorem - I

$$\theta_B = \frac{A}{EI} = \left( \frac{A_1 + A_2 + A_3}{EI} \right) \text{ radian}$$

$$\theta_B = \frac{1}{47.05 \times 10^3} (375 + 180 + 90) = 13.7088 \times 10^{-3} \text{ radians}$$

$$= 0.0137 \text{ radians}$$

## (iii) Deflection

By Mohr's Theorem - II

$$\begin{aligned} \delta_{\max} = \delta_B &= \frac{A\bar{x}}{EI} = \frac{1}{EI} (A_1 \bar{x}_1 + A_2 \bar{x}_2 + A_3 \bar{x}_3) \\ &= \frac{1}{47.05 \times 10^3} [(375 \times 3.33) + (180 \times 4) + (90 \times 4.25)] \end{aligned}$$

$$\delta_{\max} = 49.97 \times 10^{-3} \text{ m} = 49.97 \text{ mm}$$

## Result

$$\theta_B = 13.7088 \times 10^{-3} \text{ radians}$$

$$\delta_B = 49.97 \text{ mm}$$

## Problem 8

A cantilever 2m long carries a point load of 9 kN at free end and a udl of 8 kN/m. Over a length of 1m from the fixed end. Determine the deflection at the free end if  $E = 2 \times 10^5 \text{ N/mm}^2$ . Take  $I = 2250 \times 10^4 \text{ mm}^4$ .

Given data:

$$E = 2 \times 10^5 \text{ N/mm}^2$$

$$I = 2250 \times 10^4 \text{ mm}^4$$

$$\text{Span } \ell = 2 \text{ m}$$

$$\text{Point load } W = 9 \text{ kN};$$

$$\text{Udl } w = 8 \text{ kN/m}$$

**Solution**

**(i) Bending Moment**

$$\text{B.M. due to point load} = Wx$$

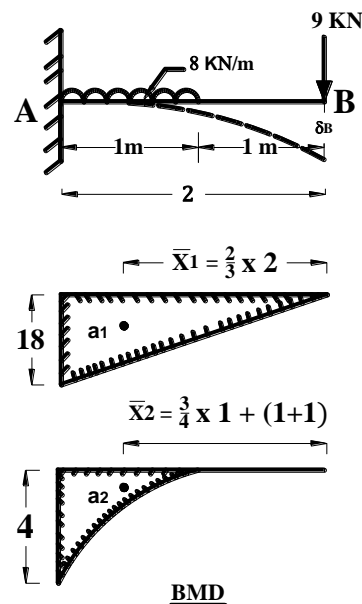
$$= 9 \times 2 = 18 \text{ KN.m}$$

$$\text{B.M. due to udl load} = \frac{wl^2}{2}$$

$$= 8 \times 1 \times \frac{1}{2} = 4 \text{ KN.m}$$

**Draw BMD**

$$A_1 = \frac{1}{2} \times b \times h$$





$$A_1 = \frac{1}{2} \times 2 \times 18 = 18 \text{ kNm}^2$$

$$= 18 \times 10^9 \text{ Nmm}^2$$

$$A_2 = \frac{1}{3} \times b \times h$$

$$A_2 = \frac{1}{3} \times 1 \times 4 = 1.33 \text{ kNm}^2$$

$$= 1.33 \times 10^9 \text{ Nmm}^2$$

$$\bar{x}_1 = \frac{2}{3} \times 2 = 1.33 \text{ m} = 1.33 \times 10^3 \text{ mm}$$

$$\bar{x}_2 = 1 + \left(\frac{3}{4} \times 1\right) = 1.75 \text{ m} = 1.75 \times 10^3 \text{ mm}$$

**By Mohr's Theorem - I**

**(ii) Slope**

$$\theta_B = \frac{A}{EI} = \frac{1}{EI} (A_1 + A_2) = \frac{1}{(2 \times 10^5)(2250 \times 10^4)} (18 + 1.33) \times 10^9$$

$$\theta_B = 4.30 \times 10^{-3} \text{ radians}$$

**By Mohr's Theorem - II**

**(iv) Deflection**

$$\delta_{\max} = \frac{Ax}{EI}$$

$$= \frac{1}{EI} (A_1 \bar{x}_1 + A_2 \bar{x}_2)$$

$$= \frac{1}{(2 \times 10^5)(2250 \times 10^4)} [(18 \times 1.33) + (1.33 \times 1.75)] \times 10^{12}$$

$$\delta_{\max} = 5.84 \text{ mm}$$

**Result**

$$\theta_B = 4.30 \times 10^{-3} \text{ radians}$$

$$\delta_{\max} = 5.84 \text{ mm}$$

### Problem 9

A cantilever beam of span 4m is subjected to a udl of 20 kN/m over a entire length and a point load of 15 kN acting at the centre. Find the maximum deflection for the beam. Given  $E = 2.1 \times 10^5 \text{ N/mm}^2$ ,  $I = 15 \times 10^8 \text{ mm}^4$

**Given data:**

Span	$\ell$	= 4m
Udl	w	= 20 kN/m
Point load	W	= 15 kN
	E	= $2.1 \times 10^5 \text{ N/mm}^2$
	I	= $15 \times 10^8 \text{ mm}^4$

### Solution

#### (i) Bending Moment

B.M. due to point load  $Wx \mid = 15 \times 2 = 30 \text{ kN.m}$

B.M. due to udl load  $\frac{wl^2}{2} = \frac{20 \times 4^2}{2} = 160 \text{ kN.m}$

#### Draw BMD

$$A_1 = \frac{1}{2} \times b \times h$$

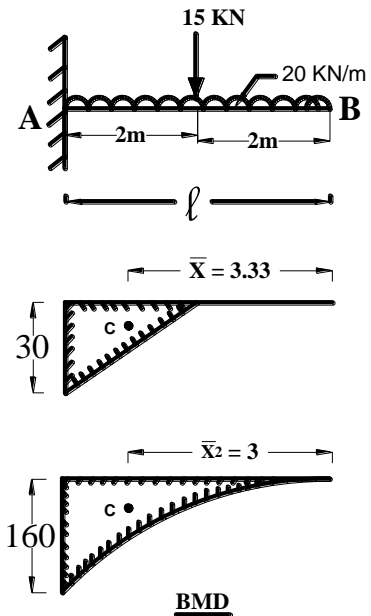
$$A_1 = \frac{1}{2} \times 2 \times 30 = 30 \text{ kNm}^2 \\ = 30 \times 10^9 \text{ Nmm}^2$$

$$\bar{x}_1 = \left(2 + \frac{2}{3} \times 2\right) = 3.33 \text{ m} = 3.3 \times 10^3 \text{ mm}$$

$$A_2 = \frac{1}{3} \times b \times h$$

$$A_2 = \frac{1}{3} \times 4 \times 160 = 213.33 \text{ kNm}^2 \\ = 213.33 \times 10^9 \text{ Nmm}^2$$

$$\bar{x}_2 = \frac{3}{4} \times 4 = 3 \text{ m} = 3 \times 10^3 \text{ mm}$$



#### By Mohr's Theorem – II

$$\delta_{\max} = \frac{Ax}{EI} = \frac{1}{EI} (A_1 \bar{x}_1 + A_2 \bar{x}_2) \\ = \frac{1}{(2.1 \times 10^5)(15 \times 10^8)} [(30 \times 3.3) + (213.34 \times 3)] \times 10^{12} \\ \delta_{\max} = 2.35 \text{ mm}$$

#### Result

$$\delta_{\max} = 2.35 \text{ mm}$$

---

### Problem 10

A cantilever beam 3m long carries an udl of  $w/m$  over its entire span. The size of beam is 75mm x 150mm. If the max. deflection is 2.5mm, determine the load  $w/m$ . Take  $E = 2 \times 10^5 \text{ N/mm}^2$ . Also find the max slope.

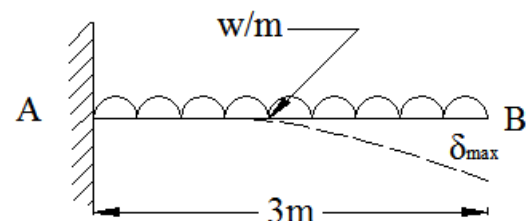
#### Given data:

$$b = 75 \text{ mm}$$

$$d = 150 \text{ mm}$$

$$\delta_B = 2.5 \text{ mm} = 2.5 \times 10^{-3} \text{ m}$$

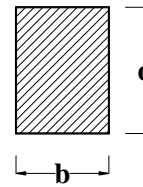
$$E = 2 \times 10^5 \text{ N/mm}^2$$



**Solution:**

**(i). Moment of inertia (I)**

$$I = \frac{bd^3}{12} = \frac{75 \times 150^3}{12} = 21.09 \times 10^6 \text{ mm}^4$$



**(ii). Total udl/m (w)**

$$\text{We know, } \delta_B = \frac{w\ell^4}{8EI} = 2.5 \text{ mm}$$

$$\frac{w\ell^4}{8EI} = \delta_B$$

$$W = \frac{\delta_B \times 8EI}{\ell^4} = \frac{2.5 \times 8 \times ((2 \times 10^5)(21.09 \times 10^6))}{3000^4}$$

$$w = 1.04 \text{ N/mm or kN/m}$$

**(iii) Slope ( $\theta$ )**

$$\text{Slope} = \frac{w\ell^3}{6EI} = \frac{1.04 \times 3000^3}{6 \times (2 \times 10^5)(21.09 \times 10^6)} \text{ radian} = 1.109 \times 10^{-3} \text{ radians}$$

**Result**

$$W = 1.04 \text{ kN/m}$$

$$\theta_B = 1.109 \times 10^{-3} \text{ radians}$$

### Problem 11

A cantilever beam of 1m long of rectangular section of width 40mm and depth 60mm. Calculate the maximum udl that can be allowed over the entire length of the beam without exceeding a deflection of 3.5 mm at the free end. Also calculate the maximum slope at the free end. Take  $E = 7 \times 10^4 \text{ N/mm}^2$ .

**Given data:**

Span	$\ell$	= 1m=1000mm
Width	b	= 40 mm
depth	d	= 60 mm
$\delta_{\max}$		= 3.5 mm
E		= $7 \times 10^4 \text{ N/mm}^2$

**Solution**

**(i) Moment of inertia (I)**

$$\text{M.I. (I)} = \frac{bd^3}{12} = \frac{40 \times 60^3}{12} = 720 \times 10^3 \text{ mm}^4$$

**(ii) Safe udl (w/m)**

$$\delta_{\max} = \delta_B = 3.5 \text{ mm}$$

$$\text{Cantilever beam with udl} = \delta_{\max} = \frac{w\ell^4}{8EI}$$

$$\frac{w\ell^4}{8EI} = \delta_{\max}$$

$$\frac{w \times 1000^4}{8 \times (7 \times 10^4)(720 \times 10^3)} = 3.5 \text{ mm}$$

$w = 1.4112 \text{ N/mm or KN/m}$   
 Safe udl ( $w$ ) = 1.4112 KN/m.

### iii) Maximum Slope

$\theta_B$  = Maximum slope at B

$$\theta_B = \frac{w\ell^3}{6EI} = \frac{1.4112 \times 1000^3}{6 \times (7 \times 10^4)(720 \times 10^3)} \text{ radians}$$

$$\theta_B = 4.67 \times 10^{-3} \text{ radian}$$

### Result

Safe udl ( $w$ ) = 1.4112 KN/m.

$$\theta_B = 4.67 \times 10^{-3} \text{ radians}$$

## 1.1.7 SIMPLY SUPPORTED BEAM WITH CENTRAL POINT LOAD(W)

### BOOK WORK – 6

### SLOPE and DEFLECTION FOR SIMPLY SUPPORTED BEAM WITH CENTRAL POINT LOAD

#### SOLUTION

Consider simply supported beam loaded as shown in fig.

$$A = \frac{1}{2} \times b \times h$$

$$A = \frac{1}{2} \times \frac{l}{2} \times \frac{W\ell}{4} = \frac{W\ell^2}{16}$$

$$\bar{x} = \frac{2}{3} \times \frac{l}{2} = \frac{l}{3} = \text{Centroid from A}$$

#### i) Slope

**By Mohr's Theorem - I**

$$\theta_{\max} = \frac{A}{EI} = \frac{1}{EI} \times A$$

$$\theta_{\max} = \frac{1}{EI} \left( \frac{W\ell^2}{16} \right) = \frac{W\ell^2}{16EI}$$

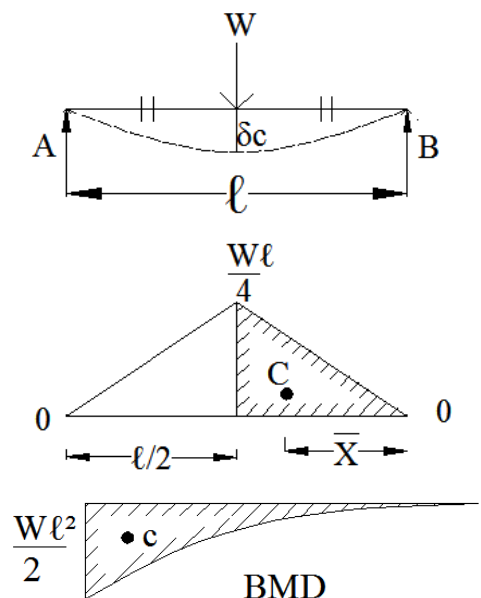
$$\boxed{\theta_{\max} = \frac{W\ell^2}{16EI}}$$

It is symmetrically loaded  $\theta_A = \theta_B = \theta_{\max} = \frac{W\ell^2}{16EI}$

**By Mohr's Theorem – II**

$$\delta_c = \frac{A\bar{x}}{EI} = \frac{1}{EI} \left( \frac{W\ell^2}{16} \times \frac{l}{3} \right) = \frac{W\ell^3}{48EI}$$

$$\boxed{\delta_c = \delta_{\max} = \frac{W\ell^3}{48EI}}$$



### 1.1.8 Book Work – 7

#### Slope and Deflection for simply supported beam with udl over the entire span

##### Solution

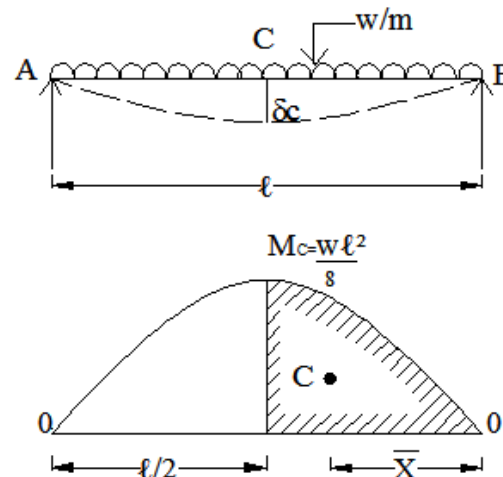
Consider simply supported beam loaded as shown in fig.

Draw BMD

Consider two points B & C

Draw tangents at B & C

$$\begin{aligned} \text{Let } A &= \frac{2}{3} \times b \times h \\ A &= \frac{2}{3} \times \frac{l}{2} \times \frac{w\ell^2}{8} = \frac{w\ell^3}{24} \\ \bar{x} &= \frac{5}{8} \times \frac{l}{2} = \frac{5\ell}{16} \end{aligned}$$



##### (i) Slope

By Mohr's Theorem - I

$$\theta_{A/C} = \frac{A}{EI} = \frac{1}{EI} \left( \frac{w\ell^3}{24} \right) = \frac{w\ell^3}{24EI}$$

Since it is symmetrically loaded

$$\theta_A = \theta_B = \frac{w\ell^3}{24EI}$$

##### (ii) Deflection

By Mohr's Theorem – II

$$\delta_c = \frac{A\bar{x}}{EI} = \frac{1}{EI} \left( \frac{w\ell^3}{24} \times \frac{5\ell}{16} \right)$$

$$\delta_c = \delta_{\max} = \frac{5w\ell^4}{384EI}$$

#### Problem 12

A Simply supported beam 5m span is 200mm x 300mm of size . It carries an UDL of 5KN/ m over the entire span. Calculate the Max slope & deflection by area moment method. Take  $E = 1.2 \times 10^5 \text{ N/mm}^2$ .

Given data:

Udl	w	= 5KN/m
Span	$\ell$	= 5m
Breadth	b	= 200mm
Depth	d	= 300mm
E		= $1.2 \times 10^5 \text{ N/mm}^2$

To find

Max Slope =  $\theta = ?$

Max deflection =  $\delta = ?$

**Solution:**

Area of BMD

$$A = \frac{2}{3} \times b h$$

$$\begin{aligned} \text{Bending moment} &= \frac{wl^2}{8} \\ &= \frac{5 \times 5^2}{8} \\ &= 15.625 \text{ kN} \cdot \text{m} \end{aligned}$$

$$A = \frac{2}{3} \times 2.5 \times 15.625$$

$$= 26.042 \text{ kN} \cdot \text{m}^2$$

$$A = 26.042 \times 10^9 \text{ N} \cdot \text{mm}^2$$

Centroid of BMD

$$\bar{x} = \left( \frac{5}{8} \times b \right)$$

$$\bar{x} = \left( \frac{5}{8} \times 2.5 \right)$$

$$\bar{x} = 1.563 \text{ m} = 1563 \text{ mm}$$

$$\begin{aligned} \text{Moment of inertia } I &= \frac{bd^3}{12} \\ &= \frac{200 \times 300^3}{12} \end{aligned}$$

$$I = 450 \times 10^6 \text{ mm}^4$$

**Applying Mohr's theorem – I**

$$\text{(i) Slope} = \theta_B = \theta_{\max} = \frac{A}{EI}$$

$$= \frac{(26.042 \times 10^9)}{(1.2 \times 10^5)(450 \times 10^6)}$$

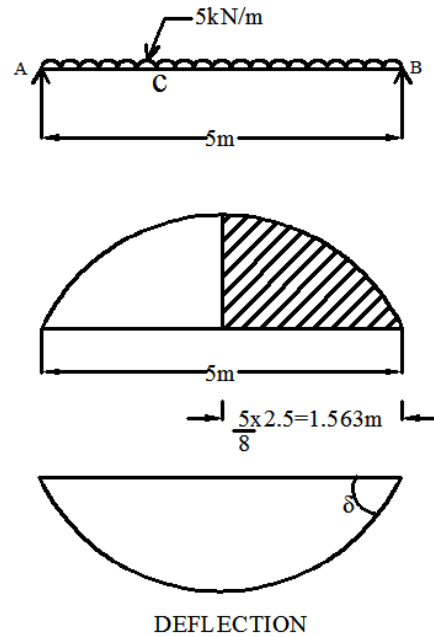
$$\text{Slope} = \theta_B = \theta_{\max} = 4.82 \times 10^{-4} \text{ Radians.}$$

**Applying Mohr's theorem – II**

$$\text{(ii) Deflection} = \delta_B = \delta_{\max} = \frac{A\bar{x}}{EI}$$

$$= \frac{(26.042 \times 1.563) \times 10^{12}}{(1.2 \times 10^5)(450 \times 10^6)}$$

$$\text{Deflection} = \delta_B = \delta_{\max} = 0.75 \text{ mm.}$$



**Result:**

**Slope =  $\theta_B = \theta_{\max} = 4.82 \times 10^{-4}$  Radians.**

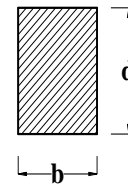
**Deflection =  $\delta_B = \delta_{\max} = 0.75\text{mm}$**

### Problem 13

A simply supported beam 6m long, 150mm x 300mm size carries a central point load of 40 kN. Determine the maximum slope and deflection. Take  $E = 1.5 \times 10^5 \text{ N/mm}^2$ .

**Given data:**

Span $\ell$	= 6m
Load $W$	= 40 kN
Wide $b$	= 150mm
Depth $d$	= 300mm
$E$	= $1.5 \times 10^5 \text{ N/mm}^2$



**Solution:**

**(i) Moment of inertia (I)**

$$I = \frac{bd^3}{12} = \frac{150 \times 300^3}{12} = 337.5 \times 10^6 \text{ mm}^4$$

**Bending Moment:**

$$\text{Max. B.M.} = \frac{W\ell}{4} = \frac{40 \times 6}{4} = 60 \text{ kN.m}$$

**Area of BMD**

$A$  = area of BMD between B & C

$\bar{x}$  = Centroid from B

$$A = \frac{1}{2} \times b \times h$$

$$A = \frac{1}{2} \times 3 \times 60 = 90 \text{ kNm}^2$$
$$= 90 \times 10^9 \text{ Nmm}^2$$

$$\bar{x} = \frac{2}{3} \times \frac{6}{2} = 2\text{m} = 2 \times 10^3 \text{ mm}$$

**(ii) Slope ( $\theta$ )**

**By Mohr's theorem – I**

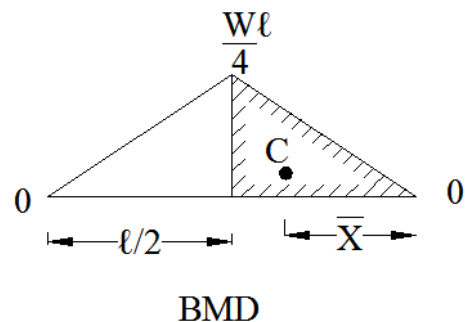
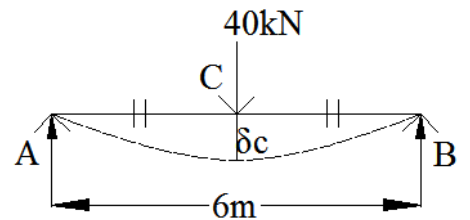
$$\theta_A = \theta_B = \frac{A}{EI} = \frac{90 \times 10^9}{(1.5 \times 10^5)(337.5 \times 10^6)} \text{ radians}$$

$$\theta_A = \theta_B = 1.78 \times 10^{-3} \text{ radians}$$

**(iii) Deflection ( $\delta_{\max}$ )**

**By Mohr's theorem – II**

$$\delta_C = \frac{A\bar{x}}{EI} = \frac{1}{EI} (A\bar{x})$$



$$\delta_c = \frac{1}{(1.5 \times 10^5)(337.5 \times 10^6)} (90 \times 2) \times 10^{12} = 3.56 \text{ mm}$$

### Result

$$\theta_{\max} = 1.78 \times 10^{-3} \text{ radians}$$

$$\delta_c = 3.56 \text{ mm}$$

### Problem 14

A simply supported beam 8m long carries a point load of 90 kN at centre and udl of 5 kN/m over at entire span. The size of beam is 200mm x 400mm  $E = 1.5 \times 10^4 \text{ N/mm}^2$ . Determine the maximum slope and deflection.

#### Given data:

Point load W	= 90 kN
Udl w	= 5 kN/m
Wide b	= 200mm
Depth d	= 400mm
E	= $1.5 \times 10^4 \text{ N/mm}^2$

#### Required:

Slope & Deflection

#### Solution:

##### i) Moment of inertia(I)

$$\text{M.I.} = I = \frac{bd^3}{12} = \frac{200 \times (400)^3}{12} = 1.067 \times 10^9 \text{ mm}^4$$

#### By Area Moment Method

##### ii) Free BMD

$$\text{BM due to Point load} = \frac{W\ell}{4} = \frac{90 \times 8}{4} = 180 \text{ kN.m}$$

$$\text{BM due to udl} = \frac{w\ell^2}{8} = \frac{5 \times 8^2}{8} = 40 \text{ kN.m}$$

##### iii) Area of BMD

$$\text{Area of triangle } A_1 = \frac{1}{2} \times b \times h$$

$$A_1 = \frac{1}{2} \times 4 \times 180 = 360 \text{ kN.m}^2$$

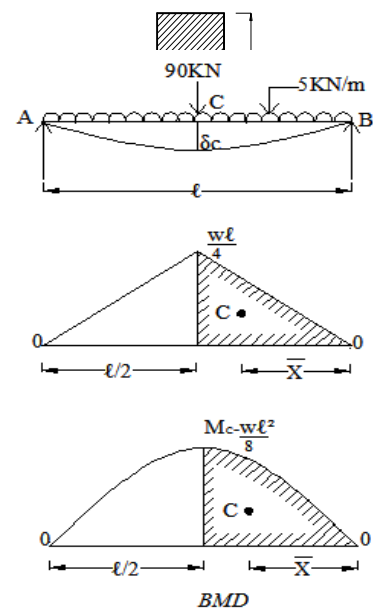
$$= 360 \times 10^9 \text{ Nmm}^2$$

$$\text{Centroid } \bar{x}_1 = \frac{2}{3} \times 4 = 2.67 \text{ m} = 2.67 \times 10^3 \text{ mm from B}$$

$$\text{Area of Parabola } A_2 = \frac{2}{3} \times b \times h$$

$$A_2 = \frac{2}{3} \times 4 \times 40 = 106.67 \text{ kN.m}^2$$

$$= 106.67 \times 10^9 \text{ Nmm}^2$$





$$\text{Centroid } \bar{x}_2 = \frac{5}{8} \times 4 = 2.5 \text{ m} = 2.5 \times 10^3 \text{ mm}$$

**(iv) Slope ( $\theta$ )**

**By Mohr's theorem – I**

$$\theta_A = \theta_B = \frac{A}{EI} = \frac{1}{EI} [A_1 + A_2]$$

$$= \frac{1}{(1.5 \times 10^4)(1.067 \times 10^9)} [360 + 106.67] \times 10^9 \text{ radians}$$

$$\theta_A = 29.16 \times 10^{-3} \text{ radians} = 0.0291 \text{ radians}$$

**(v) Deflection ( $\delta_{\max}$ )**

**By Mohr's theorem – II**

$$\delta_{\max} = \frac{A\bar{x}}{EI} = \frac{1}{EI} (A_1 \bar{x}_1 + A_2 \bar{x}_2)$$

$$\delta_{\max} = \frac{1}{(1.5 \times 10^4)(1.067 \times 10^9)} [(360 \times 2.67) + (106.67 \times 2.5)] \times 10^{12}$$

$$\delta_{\max} = 76.7 \text{ mm}$$

**Result**

$$\theta_A = \theta_B = 0.0291 \text{ radians}$$

$$\delta_c = \delta_{\max} = 0.0767 \text{ m}$$

**Problem 15**

A Simply supported beam of span 4 m carries an UDL of 10kN/m over the full length and a central point load of 20kN. determine the maximum slope and maximum deflection by area moment method.

Take  $E = 2 \times 10^5 \text{ N/mm}^2$  and  $I = 8 \times 10^7 \text{ mm}^4$ .

**Given data:**

S.S.B with UDL & P.L

UDL ( $w$ ) = 10 kN/m

P.L ( $W$ ) = 20 kN

Span  $\ell$  = 4 m

$E$  =  $2 \times 10^5 \text{ N/mm}^2$

$I$  =  $8 \times 10^7 \text{ mm}^4$

**To Find:**

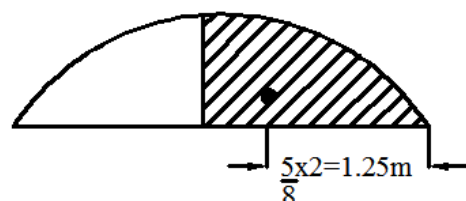
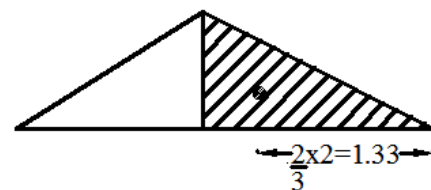
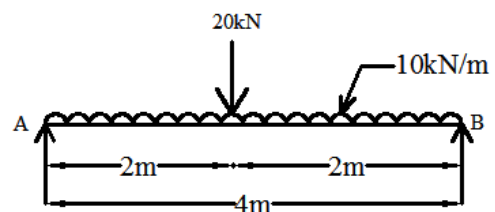
Slope =  $\theta$  = ?

Deflection =  $\delta$  = ?

**Solution:**

**(i) Area of BMD (Point load)**

$$\text{Area of BMD } A_1 = \frac{1}{2} \times b \times h$$



$$\begin{aligned}
 \text{Bending moment} &= \frac{Wl}{4} \\
 &= \frac{20 \times 4}{4} \\
 &= 20 \text{ KN.m} \\
 A_1 &= \frac{1}{2} \times 2 \times 20 \\
 &= 20 \text{ KN.m}^2 \\
 A_1 &= 20 \times 10^9 \text{ N.mm}^2
 \end{aligned}$$

**(ii) Area of BMD (UDL)**

$$\begin{aligned}
 \text{Area of BMD} \quad A_2 &= \frac{2}{3} \times b h \\
 \text{Bending moment} &= \frac{Wl^2}{8} \\
 &= \frac{10 \times 4^2}{8} \\
 &= 20 \text{ kN.m} \\
 A_2 &= \frac{2}{3} \times 2 \times 20 \\
 &= 26.67 \text{ KN.m}^2 \\
 A_2 &= 26.67 \times 10^9 \text{ N.mm}^2
 \end{aligned}$$

**Centroid of BMD (P.L)**

$$\begin{aligned}
 \bar{x}_1 &= \frac{2}{3} \times \ell \\
 &= \frac{2}{3} \times 2 \\
 &= 1.33 \text{ m} \\
 \bar{x}_1 &= 1.33 \times 10^3 \text{ mm.}
 \end{aligned}$$

**Centroid of BMD (UDL)**

$$\begin{aligned}
 \bar{x}_2 &= \frac{5}{8} \times \ell \\
 &= \frac{5}{8} \times 2 = 1.25 \text{ m} \\
 \bar{x}_2 &= 1.25 \times 10^3 \text{ mm.}
 \end{aligned}$$

**Applying Mohr's theorem - I**

$$\begin{aligned}
 \text{(iii) Slope} = \theta_B = \theta_{\max} &= \frac{(A_1 + A_2)}{EI} \\
 &= \frac{(20 + 26.67) \times 10^9}{(2 \times 10^5)(8 \times 10^7)} \\
 \text{Slope} = \theta_B = \theta_{\max} &= 2.92 \times 10^{-3} \text{ Radians.}
 \end{aligned}$$

### Applying Mohr's theorem - II

$$\begin{aligned} \text{(iv) Deflection} = \delta_B = \delta_{\max} &= \frac{(A_1 \bar{x}_1 + A_2 \bar{x}_2)}{EI} \\ &= \frac{[(20 \times 1.33) + (26.67 \times 1.25)] \times 10^{12}}{(2 \times 10^5)(8 \times 10^7)} \end{aligned}$$

$$\text{Deflection} = \delta_B = \delta_{\max} = 3.75 \text{ mm.}$$

#### Result:

$$\text{Slope} = \theta_B = \theta_{\max} = 2.92 \times 10^{-3} \text{ Radians.}$$

$$\text{Deflection} = \delta_B = \delta_{\max} = 3.75 \text{ mm.}$$

### Problem 16

A Simply Supported beam 6m span carries two point loads of 15 kN each at one third span. Determine the maximum slope and deflection.

Take  $EI = 2 \times 10^4 \text{ kN.m}^2$ .

#### Given data:

$$W = 15 \text{ kN}$$

$$l = 6 \text{ m}$$

$$A = \frac{l}{3} = \frac{6}{3} = 2 \text{ m}$$

$$EI = 2 \times 10^4 \text{ kN.m}^2$$

#### Solution

##### (i) Bending moment

Since the load is symmetrical

$$R_A = R_B = \frac{\text{Total load}}{2} = \frac{15 + 15}{2} = 15 \text{ kN}$$

$$M_A = M_B = 0$$

$$M_C = M_D = 15 \times 2 = 30 \text{ kN}$$

##### (ii) Area of BMD

$$\text{Area of triangle } A_1 = \frac{1}{2} \times b \times h$$

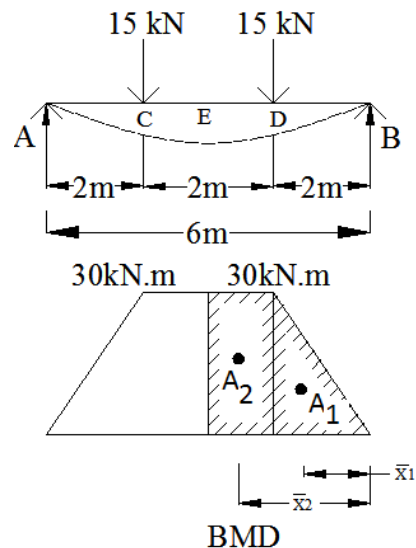
$$A_1 = \frac{1}{2} \times 2 \times 30 = 30 \text{ kN.m}^2$$

$$\text{Centroid } \bar{x}_1 = \frac{2}{3} \times 2 = 1.33 \text{ m from B}$$

$$\text{Area of rectangle } A_2 = b \times h$$

$$A_2 = 1 \times 30 = 30 \text{ kN.m}^2$$

$$\text{Centroid } \bar{x}_2 = 2 + \frac{1}{2} = 2.5 \text{ m}$$



**(iii) Slope ( $\theta$ )**

**By Mohr's theorem – I**

$$\begin{aligned}\theta_A = \theta_B &= \frac{A}{EI} = \frac{1}{EI} [A_1 + A_2] \\ &= \frac{1}{2 \times 10^4} [30 + 30] \text{ radian} \\ \theta_B &= 3 \times 10^{-3} \text{ radian}\end{aligned}$$

**(iv) Deflection ( $\delta_{\max}$ )**

**By Mohr's theorem – II**

$$\begin{aligned}\delta_{\max} &= \frac{A\bar{x}}{EI} = \frac{1}{EI} (A_1 \bar{x}_1 + A_2 \bar{x}_2) \\ \delta_{\max} &= \frac{1}{2 \times 10^4} [(30 \times 1.33) + (30 \times 2.5)] \\ &= 5.745 \times 10^{-3} \text{ m} \\ \delta_{\max} &= 5.745 \text{ mm}\end{aligned}$$

**Result:**

$$\text{Slope } \theta_B = 3 \times 10^{-3} \text{ radian}$$

$$\text{Deflection } \delta_{\max} = 5.745 \text{ mm}$$

---

**Problem 17**

A girder of uniform section and constant depth 1800mm is freely supported over a span of 20 meter. Calculate the deflection for a uniformly distributed load on it such that the maximum bending stress induced is 120 N/mm<sup>2</sup>.  $E = 2 \times 10^5 \text{ N/mm}^2$ .

**Given data:**

$$\begin{aligned}d &= 1800 \text{ mm} \\ \ell &= 20 \text{ m} = 20000 \text{ mm} \\ \sigma_b &= 120 \text{ N/mm}^2 \\ E &= 2 \times 10^5 \text{ N/mm}^2\end{aligned}$$

**To find:**

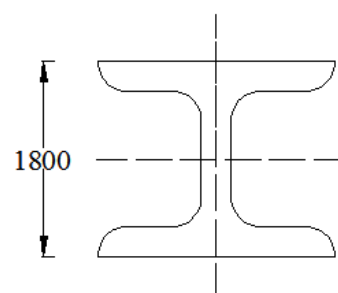
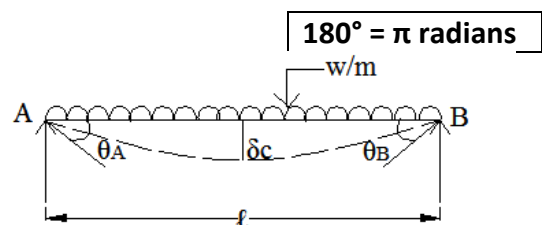
$$\delta_{\max} = ?$$

**Solution:**

**Moment of Inertia (I)**

We know

$$\frac{M}{I} = \frac{\sigma_b}{y} = \frac{E}{R}$$



$$y = \frac{d}{2} = \frac{1800}{2} = 900\text{mm}$$

$$M = \frac{w\ell^2}{8} = \text{B.M.}$$

$$\sigma_b = \frac{M}{I} \times y = \frac{w\ell^2}{8} \times \frac{900}{I} = 112.5 \left( \frac{w\ell^2}{I} \right)$$

$$\sigma_b = 112.5 \left( \frac{w\ell^2}{I} \right) = 120 \text{ N/mm}^2$$

$$\left( \frac{w\ell^2}{I} \right) = \frac{120}{112.5} = 1.067$$

$$\delta_{\max} = \frac{5\ell^2}{384E} \left( \frac{w\ell^2}{I} \right)$$

$$\delta_{\max} = \frac{5 \times (20000)^2}{384 \times 2 \times 10^5} \times (1.067) \text{ mm}$$

$$\delta_{\max} = 27.79\text{mm}$$

### Result

$$\delta_{\max} = 27.79\text{mm}$$

### Problem 18

A Simply Supported beam 4m long carries an udl over entire span if the maximum slope is  $1^\circ$  calculate the max deflection also udl.

Take  $EI = 1 \times 10^4 \text{ kN.m}^2$

Given:

$$\ell = 4\text{m} = 4000\text{mm}$$

$$\theta_A = \theta_B = \frac{\pi}{180} \times 1^\circ = 17.45 \times 10^{-3} \text{ radian}$$

$$EI = 1 \times 10^4 \text{ kN.m}^2$$

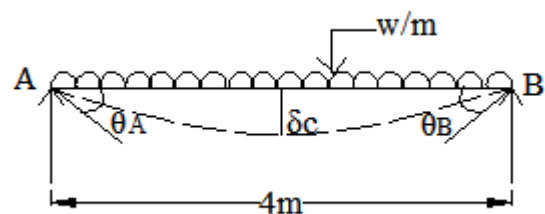
Required:

$$\delta_{\max} = ?$$

Solution:

(i) Safe udl (w)

Simply supported beam with udl over entire span



We know,

$$\text{Slope } \theta = \frac{w\ell^3}{24EI}$$

$$\begin{aligned} w &= \frac{\theta \times 24EI}{\ell^3} \\ &= \frac{17.45 \times 10^{-3} \times 24 \times 1 \times 10^4}{4^3} \\ &= 65.44 \text{ kN/m} \end{aligned}$$

$$\text{Deflection } \delta_c = \frac{5w\ell^4}{384EI}$$

$$\delta_{\max} = \frac{5 \times 65.43 \times 4^4}{384 \times 1 \times 10^4} = 21.81 \times 10^{-3} \text{ m}$$

$$\delta_{\max} = 21.81 \text{ mm}$$

### Result

$$w = 65.44 \text{ kN/m}$$

$$\delta_{\max} = 21.81 \text{ mm}$$

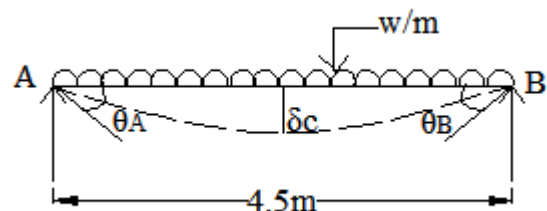
### Problem 19

A beam of span 4.5m is Simply Supported at its ends. Calculate the maximum permitted udl, if the maximum slope at the support is restricted to  $1^\circ$  also calculate the max deflection also udl. Take  $EI = 0.8 \times 10^4 \text{ kN.m}^2$

### Given

$$\ell = 4.5 \text{ m} = 4500 \text{ mm}$$

$$\begin{aligned} \theta_A = \theta_B &= \frac{\pi}{180} \times 1^\circ \\ &= 17.45 \times 10^{-3} \text{ radian} \\ EI &= 0.8 \times 10^4 \text{ kN.m}^2 \end{aligned}$$



### Required

$$w = ? , \delta_{\max} = ?$$

### Solution

For a simply supported beam with udl over entire span

We know,

$$\text{Max. Slope } \theta_A = \frac{w\ell^3}{24EI}$$

$$w = \frac{\theta_A \times 24 EI}{\ell^3}$$

$$= \frac{17.45 \times 10^{-3} \times 24 \times 0.8 \times 10^4}{(4.5)^3}$$

$$w = 36.77 \text{ kN/m}$$

$$\text{Deflection } \delta_c = \frac{5 w \ell^4}{384 EI}$$

$$\text{Deflection } \delta_c = \frac{5 w \ell^4}{384 EI}$$

$$\delta_{\max} = \frac{5 \times 36.77 \times 4.5^4}{384 \times 0.8 \times 10^4} = 24.54 \times 10^{-3} \text{ m}$$

$$\delta_{\max} = 24.54 \text{ mm}$$

### Result

$$w = 36.77 \text{ kN/m}$$

$$\delta_{\max} = 24.54 \text{ mm}$$

### Problem 20

A steel pipe 50mm internal dia. 2.5mm thick is simply supported over a span of 6m, if the deflection is limited to  $\frac{1}{325}$  of span calculate the rate of loading and maximum slope. Take  $E = 2 \times 10^5 \text{ N/mm}^2$ . Also find the maximum slope.

#### Given data:

$$\text{Internal dia } d = 50 \text{ mm}$$

$$\text{Thickness } t = 2.5 \text{ mm}$$

$$\text{External dia } D = (50 + 2 \times 2.5) = 55 \text{ mm}$$

$$\text{Span } \ell = 6 \text{ m} = 6000 \text{ mm}$$

$$\delta_{\max} = \frac{1}{325} \times \text{span} = \frac{6}{325}$$

$$= 18.46 \times 10^{-3} \text{ m}$$

$$E = 2 \times 10^5 \text{ N/mm}^2$$

#### Required:

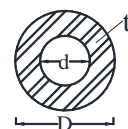
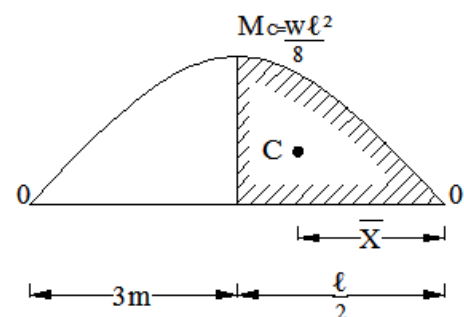
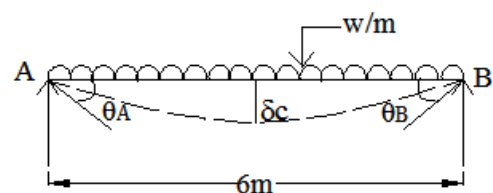
$$w = ?$$

#### Solution:

##### (i) Moment of inertia (I)

$$I = \frac{\pi}{64} (D^4 - d^4)$$

$$I = \frac{\pi}{64} (55^4 - 50^4)$$



$$\begin{aligned}
 I &= 142.38 \times 10^3 \text{ mm}^4 \\
 EI &= 2 \times 10^5 \times 142.39 \times 10^3 \\
 EI &= 28.48 \times 10^9 \text{ N.mm}^2 = 28.48 \text{ kN.m}^2
 \end{aligned}$$

We know,

**By Area Moment Method**

**(ii) Free BMD**

$$\text{BM due to udl} = \frac{w\ell^2}{8} = \frac{w \times 6^2}{8} = 4.5w \text{ kN.m}$$

Draw BMD

**(iii) Area of BMD**

$$\text{Area of Parabola } a = \frac{2}{3} \times 3 \times 4.5w = 9w$$

$$\text{Centroid } \bar{x} = \frac{5}{8} \times 3 = 1.875 \text{ m from B}$$

**(iv) Safe udl (w)**

**By Mohr's theorem – II**

$$\delta_{\max} = \frac{A\bar{x}}{EI} = \frac{1}{EI} (a\bar{x}) = 18.46 \times 10^{-3}$$

$$\delta_{\max} = \frac{1}{28.48} [(9w \times 1.875)] = 18.46 \times 10^{-3}$$

$$w = 31.16 \times 10^{-3} \text{ kN/m}$$

**(v) Slope ( $\theta$ )**

**By Mohr's theorem – I**

$$\theta_A = \theta_B = \frac{A}{EI} = \frac{1}{EI} [A]$$

$$\frac{1}{EI} [9w] = \frac{1}{28.48} [9 \times 31.16 \times 10^{-3}]$$

$$\theta_A = 9.847 \times 10^{-3} \text{ radians}$$

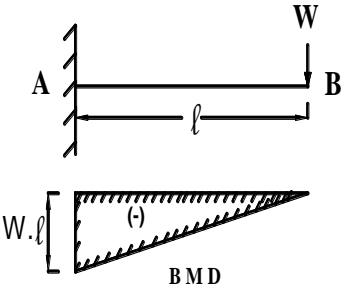
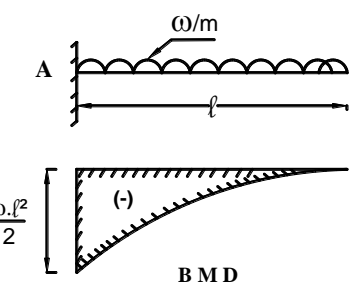
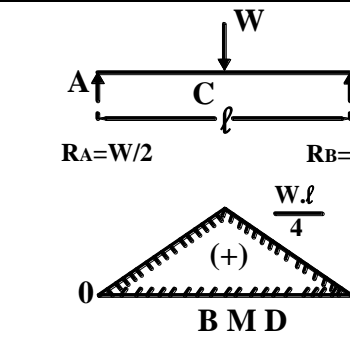
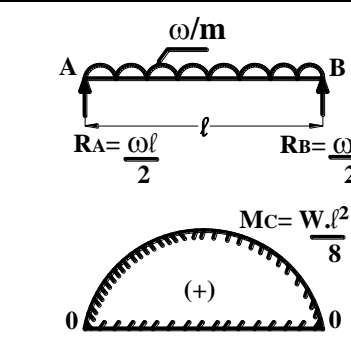
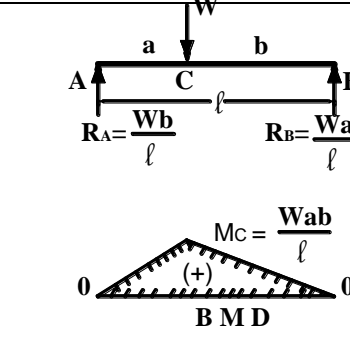
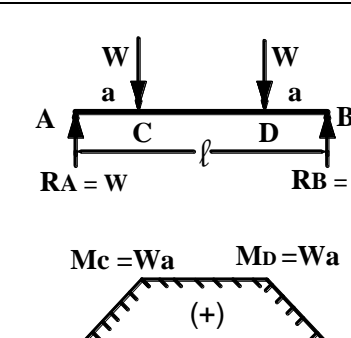
**Results**

$$w = 31.16 \times 10^{-3} \text{ kN/m}$$

$$\theta_A = 9.847 \times 10^{-3} \text{ radians}$$



## Bending Moment diagram for standard cases of beam

1.	 <p style="text-align: center;">B M D</p>	 <p style="text-align: center;">B M D</p>
2.	 <p style="text-align: center;">B M D</p>	 <p style="text-align: center;">B M D</p>
3.	 <p style="text-align: center;">B M D</p>	 <p style="text-align: center;">B M D</p>

## 1.1 HIGHLIGHTS


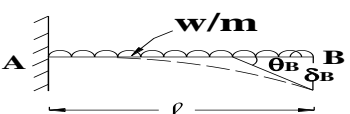
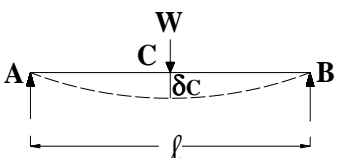
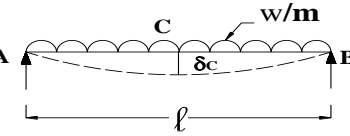
### 1. Mohr's Theorem – I

$$\theta = \frac{A}{EI} = \text{slope}$$

### 2. Mohr's Theorem – II

$$y = \frac{Ax}{EI} = \text{deflection.}$$

### 3. Slope and Deflection

Beam	Slope	Deflection	Deflect / Slope Ratio
	$\theta_B = \frac{Wl^2}{2EI}$	$\delta_B = \frac{Wl^3}{3EI}$	$\frac{2}{3} l$
	$\theta_B = \frac{wl^3}{6EI}$	$\delta_B = \frac{wl^4}{8EI}$	$\frac{3}{4} l$
	$\theta_A = \theta_B = \frac{Wl^2}{16EI}$	$\delta_C = \frac{Wl^3}{48EI}$	$\frac{1}{3} l$
	$\theta_A = \theta_B = \frac{wl^3}{24EI}$	$\delta_C = \frac{5wl^4}{384EI}$	$\frac{5}{16} l$

## 1.1 QUESTIONS for Homework

### Part I

Each question consist only 2 marks

1. What is deflection of beam at free end for the beam carrying Point load at Free end?
2. What is the slope at support of a simply supported beam carrying point load at mid span?
3. Define: Indeterminate Structure.
4. Define: Slope and Deflection.
5. State the Maximum slope value in a simply supported beam subjected to a point load at mid span.
6. Write the differential equation of flexure.
7. Draw the deflected shapes of any two beams.
8. Write the difference between roller and hinged supports.
9. Define elastic curve?
10. Write the equation of area moment method theorem of deflection

## Part II

### Three / Five mark Questions

1. State Mohr's area moment theorems.
2. State Mohr's area moment theorems for slope and deflection.
3. State Mohr's Theorems 1 and 2 with respect to the deflected shape of a beam.
4. A cantilever beam of 3 meter length is subjected to a point load of 30 kN at its free end. Find the deflection at the free end, using formula. if  $EI = 90 \times 10^{12} \text{ N.mm}^2$ .
5. Explain slope and deflection

## Part III

### Ten mark Questions

1. A steel pipe 50mm internal diameter and 2mm wall thickness is simply supported on a span of 6m. If the deflection is limited to  $1/325$  of the span, calculate the rate of loading on the beam. Also calculate the maximum slope at the supports. Take  $E = 2 \times 10^5 \text{ N/mm}^2$ .
2. A cantilever beam 120 mm wide and 200 mm deep is 3 m long. What udl should the beam can carry to produce a deflection of 8 mm at the free end. Take  $E = 210 \text{ GN/mm}^2$ .
3. A cantilever of 5 meter span carries an u.d.l. of intensity 20kN/m over a length of 3m from its fixed end and two point loads of 40kN and 30kN at 3m and 5m from the fixed end respectively. Determine the maximum slope and deflection at the free end using Mohr's Theorems if  $EI = 47.05 \times 10^3 \text{ kNm}^2$ .
4. A cantilever beam of span 4m is subjected to an UDL of 20kN/m over the entire length and a point load of 30 kN is acting at free end. Calculate the slope and Take  $E = 2 \times 10^5 \text{ N/mm}^2$  and  $I = 8 \times 10^7 \text{ mm}^4$ .
5. A cantilever beam of 1 m long is of rectangular section of width 40 mm and depth 60 mm. calculate the maximum udl that can be allowed over the entire length of the beam without exceeding a deflection of 3.5 mm at the free end. Also calculate the maximum slope at the free end. Take  $E = 7 \times 10^4 \text{ N/mm}^2$ .
6. A beam of span 4.5m is simply supported at its ends. Calculate the maximum permitted udl if the maximum slope at the support is restricted to  $1^\circ$ . Also calculate the maximum deflection. Take  $EI = 0.80 \times 10^4 \text{ kNm}^2$ .
7. A simply supported beam of span 4m carries an UDL of 10 kN/m over the full length and a central point load of 20kN . Determine the maximum slope and maximum deflection by area moment method. Take  $E=2 \times 10^5 \text{ N/mm}^2$  and  $I=4 \times 10^8 \text{ mm}^4$  and  $I = 8 \times 10^7 \text{ mm}^4$
8. A simply supported beam of span 8m carries an UDL of 18 kN/m throughout its length and a concentrated load of 60kN at the centre.  $EI = 2 \times 10^5 \text{ KN.m}^2$  Determine the maximum values of slope and deflection in the beam, using Mohr's theorem. (Formula shall not be used).

## 1.2 PROPPED CANTILEVER BEAM

### 1.2 PROPPED CANTILEVERS

Statically determinate and indeterminate Structures- Stable and Unstable Structures- Examples- Degree of Indeterminacy-Concept of Analysis of Indeterminate beams - Definition of Prop –Types of Props- Prop reaction from deflection consideration – Drawing SF and BM diagrams by area moment method for UDL throughout the span, central and non-central concentrated loads – Propped cantilever with overhang – Point of Contra flexure.

#### 1.2.1 Static Equilibrium Equations

According to the principle of statics, any structural member should satisfy the following equilibrium conditions.

1. Algebraic sum of all vertical forces should be equal to zero.

$$\text{ie } \Sigma v = 0$$

Sum of upward vertical forces = Sum of down ward vertical forces.

$$(+)\uparrow v = \downarrow v(-)$$

2. Algebraic sum of all horizontal forces should be equal to zero.

$$\text{ie } \Sigma H = 0$$

Sum of forces towards right side = Sum of forces towards side

$$H \rightarrow = \leftarrow H$$

(+)\quad\quad\quad(-)

3. Algebraic sum of moments of all forces should be equal to zero.

$$\text{ie } \Sigma M = 0$$

$$(+)\curvearrowright = \curvearrowleft(-)$$

Sum of anticlockwise moments = Sum of clockwise moments.

#### Determinate and indeterminate beams

Based on the static equilibrium equations the beams are classified as follows.

1. Statically determinate beams.
2. Statically indeterminate beams.

#### 2.1.5. Statically determinate beams

When the reaction components of a beam **can be** analysed by using static equilibrium equations ( $\Sigma v = 0$ ,  $\Sigma H = 0$ ,  $\Sigma M = 0$ ) only, it is called as statically determinate beam. In which the degree of indeterminacy is equal to zero.

The examples for statically determinate beams as given below

- i) Cantilever beam
- ii) Simply supported beam
- iii) Overhanging beam

### 1.2.1. (b) Statically indeterminate beam

When the reaction components of a beam **cannot be** analysed by using static equilibrium equations ( $\Sigma V = 0$ ,  $\Sigma H = 0$ ,  $\Sigma M = 0$ ) only. The beam is called as statically indeterminate beam. In which the degree of indeterminacy is not equal to zero. (One or more than one).

The examples for statically indeterminate beams are given below

i) Propped cantilever beam ii) Fixed beam iii) Continuous beam

### 1.2.1 (c) Degree of Indeterminacy

The difference between No. of unknown reaction components and No. of known equilibrium equation is called Degree of Indeterminacy or degree of redundancy.

$$\text{Degree of indeterminacy} = \left( \text{No. of unknown reaction components} \right) - \left( \text{No. of known using static equilibrium equations} \right)$$

### 1.2.1. (c) Example

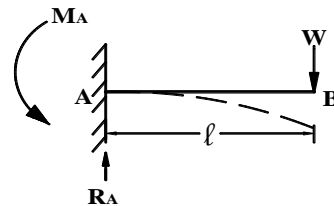
#### 1. Cantilever beam

Unknown reaction components  $M_A$  &  $R_A = 2$

Known static equilibrium equation ( $\Sigma V = 0$ ;  $\Sigma M = 0$ ) = 2

$$\therefore D.I = (2 - 2) = 0$$

It is statically determinate beam.



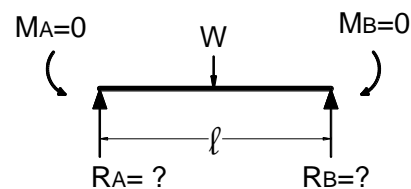
#### 2. Simply Supported beam

Unknown reaction components  $R_A$  &  $R_B = 2$

Known static equilibrium equation ( $\Sigma M = 0$ ;  $\Sigma V = 0$ ) = 2

$$\therefore D.I = (2 - 2) = 0$$

It is statically determinate beam.



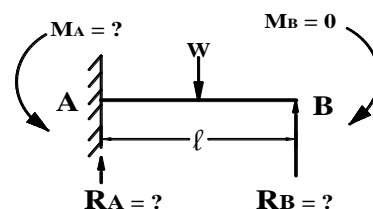
#### 3. Propped cantilever beam

Unknown reaction components  $R_A$ ,  $R_B$  &  $M_A = 3$

Known static equilibrium equation ( $\Sigma V = 0$ ;  $\Sigma M = 0$ ) = 2

$$\therefore D.I = (3 - 2) = 1$$

It is statically indeterminate beam.



#### 4. Fixed beam

Unknown reaction components

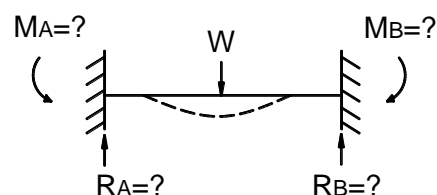
$(R_A, R_B, M_A, M_B) = 4$  Nos.

Known static equilibrium equations

$$(\Sigma V = 0, \Sigma M = 0) = 2$$

$$\therefore D.I. = (4 - 2) = 2 > 0$$

It is statically indeterminate beam.



## 5. Continuous beam

Unknown reaction components

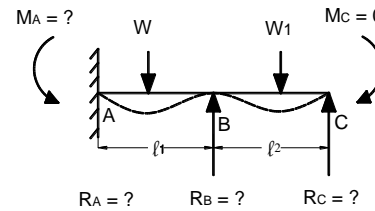
$(R_A, R_B, R_C, M_A, M_B) = 5 \text{ Nos.}$

Known static equilibrium equations

$(\sum v = 0, \sum M = 0) = 2$

$\therefore \text{D.I.} = (5 - 2) = 3$

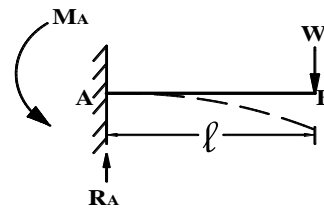
It is statically indeterminate beam.



### 1.2.3. Method of analysis of indeterminate beam

The following are the various methods of analysis of indeterminate beams.

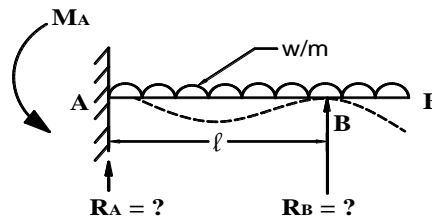
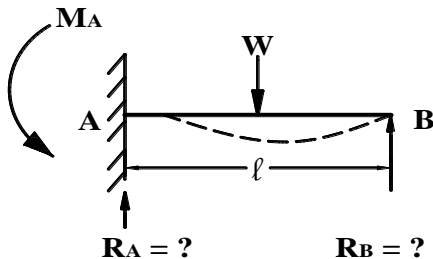
1. Area moment method.
2. Theorem of three moment method.
3. Moment distribution method.
4. Strain energy method.
5. Column analogy method
6. Slope deflection method.



### 1.2.4 Propped cantilever beam

#### Definition

When a cantilever beam is supported by vertical post at free end (or) near the free end is called Propped cantilever beam. It is statically determinate beam and its degree of indeterminacy is 1.



#### Advantages of Propped cantilever beam

By providing propped at free end (or) nearby free end in a cantilever beam, the following are the advantages.

1. Deflection at prop. is zero.
2. More shift and stable.
3. It can carry more load than cantilever beam.
4. Deflection is reduced.
5. Maximum +ve bending moment will be induced near the middle span.
6. Value of hogging moment at support is reduced.

### 1.2.5 Type of Prop.

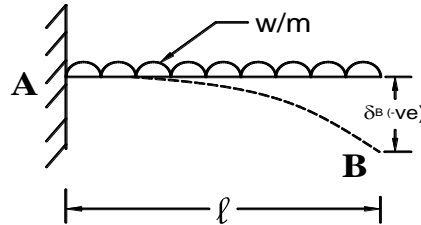
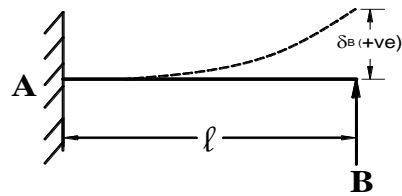
The following are the various types of Prop.

1. Rigid Prop.
2. Sinking Prop.
3. Elastic Prop.

#### Rigid Prop

- i) At Rigid prop. the upward deflection is equal to downward deflection.
  - ii) There is no change in length of Prop.
- i.e. Upward deflection = Downward deflection.

$$\delta_B (+)ve = \delta_B (-)ve$$



#### Sinking Prop.

At sinking Prop. a part of the deflection destroys by the load.

i.e. Upward deflection } is not equal to { Down load deflection due to  
at Prop. End } load.

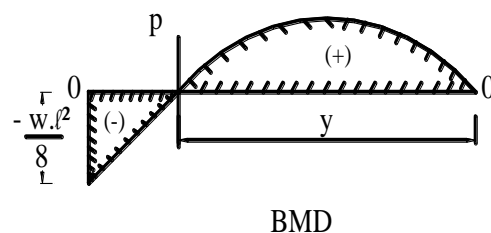
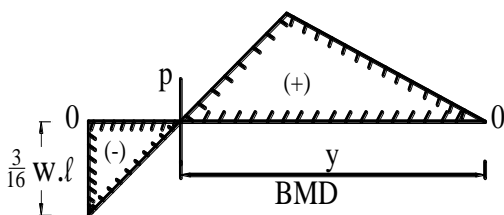
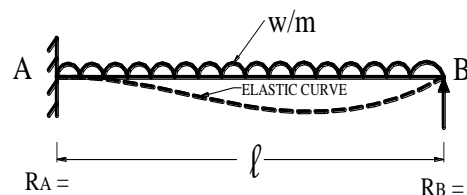
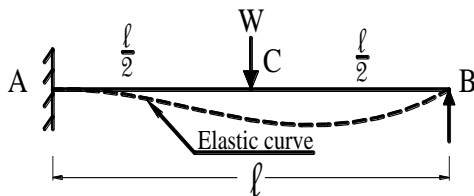
$$\delta_B (+)ve \neq \delta_B (-)ve$$

#### Elastic Prop.

At elastic Prop. a part of deflection destroys and also changes in length due to reaction in the Prop. because the Prop. material is elastic.

### 2.3.6 Point of contra flexure

The point where the BMD changes its sign from (+)ve to (-)ve and vice versa as shown in fig. is called point of contra flexure (or) point of inflexion. The B.M at this point is zero.



## AREA MOMENT METHOD

### Book Work – 1

#### 1.2.6 Propped cantilever beam with central point load (W)

##### Solution

Consider a cantilever beam propped at free end and loaded as shown in fig.

Let  $R_B$  = Prop. Reaction  
 BM at a due to Prop. Reaction =  $R_B \cdot \ell$   
 BM at A due to load =  $w \cdot \frac{\ell}{2}$

Draw BMD by parts.

$$A_1 = \frac{1}{2} \times b \times h$$

$$A_1 = \frac{1}{2} \times \ell \times R_B \ell = \frac{R_B \ell^2}{2}$$

$$\bar{x}_1 = \frac{2}{3} \ell$$

$$A_2 = (-) \frac{1}{2} \times \frac{\ell}{2} \times \frac{W\ell}{2} = \frac{(-)W\ell^2}{8}$$

$$\bar{x}_2 = \left( \frac{\ell}{2} \right) = \frac{5\ell}{6}$$

##### Prop. Reaction

By Mohr's Theorem – II

$$\delta_{\max} = \frac{A\bar{x}}{EI} = 0$$

$$A\bar{x} = 0; A_1\bar{x}_1 + A_2\bar{x}_2 = 0$$

$$\left( \frac{R_B \ell^2}{2} \right) \frac{2}{3} \ell - \left( \frac{W\ell^2}{8} \right) \left( \frac{5\ell}{6} \right) = 0$$

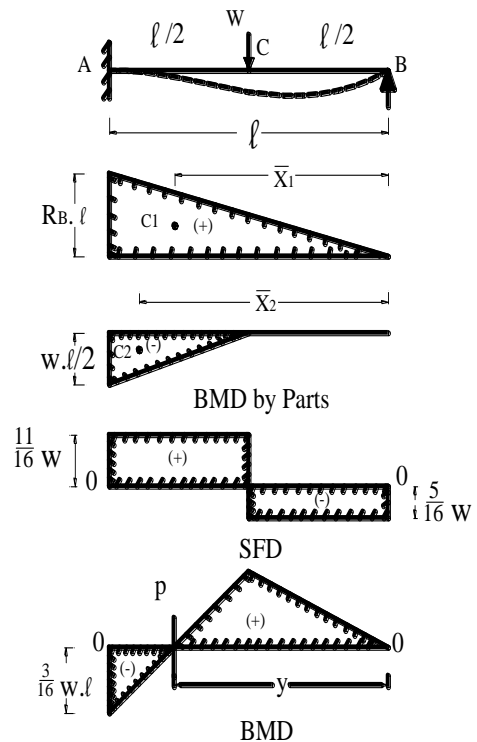
$$\frac{R_B \ell^3}{3} = \frac{5W\ell^3}{48}$$

$$R_B = \frac{3 \times 5W}{48} = \frac{5}{16} W$$

$$R_B = \frac{5}{16} W$$

$$R_A = W - R_B = W - \frac{5}{16} W = \frac{11}{16} W$$

Draw SFD as shown in fig.1.37





Bending Moment

$$M_B = 0$$

$$M_C = \frac{5}{16} W \times \frac{l}{2} = \frac{5Wl}{32}$$

$$M_D = \left( \frac{5}{16} W \times l \right) - \left( W \frac{l}{2} \right) = Wl \left( \frac{5-8}{16} \right)$$

$$M_A = \frac{-3}{16} Wl$$

Draw BMD

**Point of Contra Flexure (P) :**

Point of contra flexure will occur at “y” distance from B.

$$M_y = 0$$

$$M_y = R_B \times y - w \left( y - \frac{l}{2} \right) = 0$$

$$\frac{5}{16} \cdot w \cdot y - w \cdot y + \frac{w \cdot l}{2} = 0$$

$$\frac{11}{16} \cdot y = \frac{l}{2}$$

$$y = \frac{8}{11} l \text{ from B}$$

## Book Work – 2

### 1.2.7 Propped Cantilever beam with udl (w)

**Solution**

Consider a propped cantilever beam loaded as shown in fig.  $R_A =$   $R_B =$

Let  $R_B =$  Prop. Reaction

Draw BMD by parts.

**Prop. Reaction**

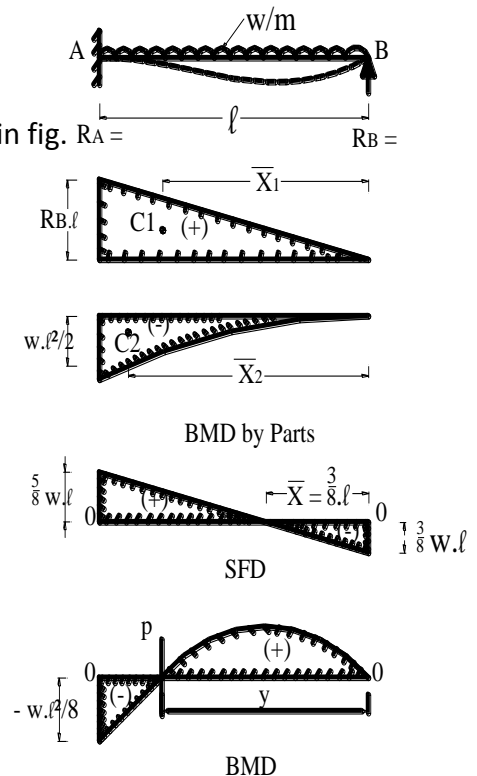
$$A_1 = \frac{1}{2} \times b \times h$$

$$A_1 = \frac{1}{2} \times l \times R_B = \frac{R_B l^2}{2}$$

$$\bar{x}_1 = \frac{2}{3} l$$

$$A_2 = \frac{1}{3} \times l \times \frac{wl}{2} = \frac{wl^3}{6}$$

$$\bar{x}_2 = \frac{3}{4} l$$



**By Mohr's Theorem – II**

$$\delta_{\max} = \frac{A\bar{x}}{EI} = 0$$

$$A\bar{x} = 0$$

$$\left( \frac{R_B \ell^2}{2} \right) \left( \frac{2}{3} \ell \right) - \left( \frac{w \ell^2}{6_2} \right) \left( \frac{3}{4} \ell \right) = 0$$

$$\frac{R_B \ell^3}{3} = \frac{w \ell^4}{8}$$

$$\boxed{R_B = \frac{3}{8} w \ell}$$

$$\therefore R_A = w \times \ell - R_B = w \ell - \frac{3}{8} w \ell$$

$$\boxed{R_A = \frac{5}{8} w \ell}$$

**Draw SFD**

Max. BM will occur at 'x' distance from B

$$\frac{x}{\frac{3}{8} w \ell} = \frac{(\ell - x)}{\frac{5}{8} w \ell}$$

$$6x = 3\ell - 3x$$

$$8x = 3\ell$$

$$\boxed{x = \frac{3}{8} \ell}$$

**Bending Moment**

$$M_B = 0$$

$$M_x = R_B \cdot x - w \cdot x \cdot \frac{x}{2}$$

$$= \left( \frac{3}{8} w \ell \right) \left( \frac{3}{8} \ell \right) - w \left( \frac{3}{8} \ell \right) \times \frac{1}{2} \times \left( \frac{3}{8} \ell \right)$$

$$M_x = \frac{9 w \ell^2}{6} - \frac{9 w \ell^2}{128} = \frac{18 w \ell^2 - 9 w \ell^2}{128} = \frac{9 w \ell^2}{128}$$

$$M_x = \frac{9 w \ell^2}{128}$$

$$M_A = R_B \times \ell - w \times \ell \times \frac{\ell}{2}$$

$$= \frac{3}{8} w \ell \times \ell - w \times \frac{\ell^2}{2} = w \ell^2 \left( \frac{3-4}{8} \right)$$

$$M_A = -\frac{w \ell^2}{8}$$

Draw BMD

### Point of Contra Flexure (P) :

Point of contra flexure will occur at “y” distance from B.

$$M_y = 0$$

$$M_y = R_B \times y - w \cdot y \cdot \frac{y}{2} = 0$$

$$\frac{3}{8} \cdot w \ell \cdot y - w \cdot \frac{y^2}{2} = 0$$

$$w \cdot \frac{y^2}{2} = \frac{3}{8} \ell \cdot y$$

$$y = \frac{3\ell}{4} \quad \text{from B}$$

### Book Work – 3

#### 1.2.8 Propped cantilever beam with Non-central point load (W)

##### Solution

Consider a cantilever beam propped at free end and loaded as shown in fig.

Let  $R_B$  = Prop. Reaction at B

BM at a due to Prop. Reaction =  $R_B \cdot \ell$

BM at A due to load =  $w \cdot a$

##### i) Area

$$a_1 = \frac{1}{2} \times \ell \times R_B \cdot \ell = \frac{R_B \cdot \ell^2}{2}$$

$$\bar{x}_1 = \frac{2}{3} \times \ell = 4\text{m}$$

$$a_2 = \frac{1}{2} \times a \times W \cdot a = \frac{W \cdot a^2}{2}$$

$$\bar{x}_2 = \left[ \frac{2}{3} \times a \right] + b$$

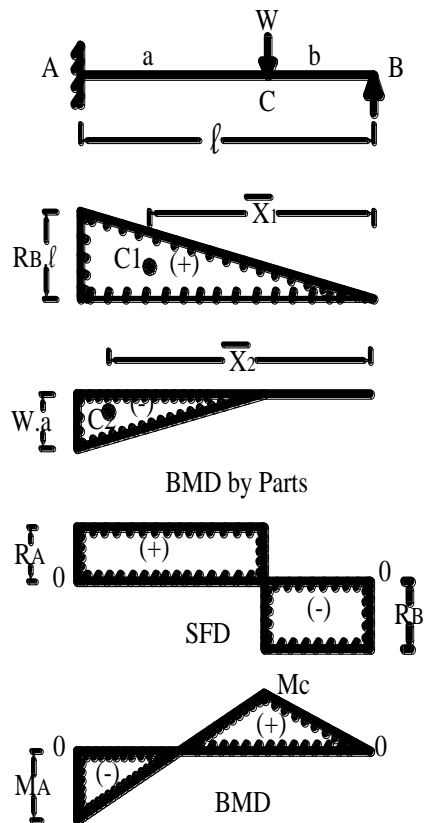
##### ii) Prop. Reaction ( $R_B$ )

##### By Mohr's Theorem - II

$$\delta_{\max} = \frac{A\bar{x}}{EI} = 0, \quad A\bar{x} = 0$$

Upward deflection at B due to  $R_B = \delta_B (+)$

$$\delta_B (+) = \frac{A\bar{x}}{EI} = \frac{1}{EI} A_1 \bar{x}$$



$$\delta_B (+) = \frac{1}{EI} \left[ \frac{R_B \cdot \ell^2}{2} \times \frac{2}{3} \ell \right] = \left[ \frac{R_B \cdot \ell^3}{3EI} \right] \text{----- (1)}$$

Downward deflection at B due to load W =  $\delta_B (-)$

$$\delta_B (-) = \frac{A_2 \bar{x}_2}{EI} = \frac{1}{EI} \left[ \frac{w \cdot a^2}{2} \times \left( b + \frac{2}{3} b \right) \right]$$

$$\delta_B (-) = \left[ \frac{w \cdot a^2}{6EI} (3\ell - a) \right] \text{----- (2)}$$

at Rigid Prop. Upward deflection = Downward deflection

$$\delta_B (+) = \delta_B (-)$$

$$\left[ \frac{R_B \cdot \ell^3}{3EI} \right] = \left[ \frac{w \cdot a^2}{6EI} (3\ell - a) \right]$$

$$R_B = \left[ \frac{w \cdot a^2}{2 \cdot \ell^3} (3\ell - a) \right]$$

$$R_A = \text{Total load} - R_B$$

$$= \left[ W - \frac{w \cdot a^2}{2 \cdot \ell^3} (3\ell - a) \right]$$

$$R_A = \left[ \frac{w \cdot b}{2 \cdot \ell^3} (3\ell^2 - b^2) \right]$$

Draw SFD

### Bending Moment

$$M_B = 0$$

$$M_C = R_B \times b = \left[ \frac{w \cdot a^2}{2 \cdot \ell^3} (3\ell - a) \times b \right] = \left[ \frac{w \cdot a \cdot b^2}{2 \cdot \ell^3} (3\ell - a) \right]$$

$$M_A = R_B \times \ell - w \cdot a = \left[ \frac{w \cdot a^2}{2 \cdot \ell^3} (3\ell - a) - (W \cdot a) \right] = - \left[ \frac{w \cdot b}{2 \cdot \ell^2} (\ell^2 - b^2) \right]$$

Draw BMD

### Problem 1

A propped cantilever beam 4m long carries a central point load of 20 kN. Determine the prop. reaction and draw SFD and BMD.

**Given data:**

$$\begin{aligned}\text{Span } \ell &= 4 \text{ m} \\ \text{Load } W &= 20 \text{ kN}\end{aligned}$$

**Solution:**

**i) Bending moment**

$$\begin{aligned}R_B &= \text{Prop. Reaction} \\ \text{BM at A due to } R_B &= R_B \times 4 \\ \text{BM at A due to load} &= 20 \times 2 = 40 \text{ kN.m} \\ \text{Draw BMD}\end{aligned}$$

**ii) Area of Bending Moment Diagram**

$$A_1 = \frac{1}{2} \times b \times h$$

$$A_1 = \frac{1}{2} \times \ell \times h$$

$$= \frac{1}{2} \times 4 \times 4 R_B$$

$$A_1 = 8 R_B$$

$$\bar{x}_1 = \frac{2}{3} \times 4 = 2.67 \text{ m}$$

$$A_2 = \frac{1}{2} \times b \times h$$

$$A_2 = \frac{1}{2} \times 2 \times 40 = -40 \text{ kNm}^2$$

$$\bar{x}_2 = 2 + \frac{2}{3} \times 2 = +3.33 \text{ m}$$

**iii) Prop. Reaction ( $R_B$ )**

**By Mohr's Theorem – II**

$$\delta_{\max} = \frac{Ax}{EI} = 0$$

$$Ax = 0$$

$$A_1 \bar{x}_1 + A_2 \bar{x}_2 = 0$$

$$(8 R_B \times 2.67) - 40 \times 3.33 = 0$$

$$8 R_B \times 2.67 = 40 \times 3.33$$

$$R_B = 6.24 \text{ kN}$$

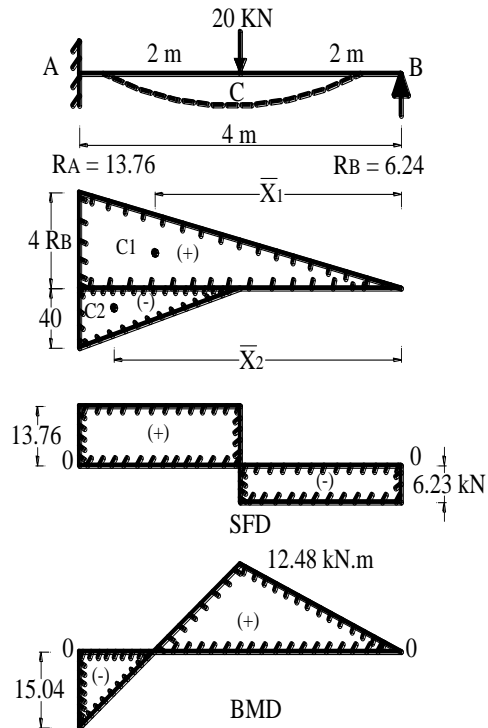
$$R_A = 20 - 6.23$$

$$R_A = 13.76 \text{ kN}$$

**Bending Moment**

$$M_B = 0$$

$$M_C = (6.24 \times 2) = 12.48 \text{ kN.m}$$



Upward deflection } = { Downward deflection

$$\delta_B (+) = \delta_B (-)$$

$$\frac{a_1 x_1}{EI} = \frac{a_2 x_2}{EI}$$

$$a_1 x_1 = a_2 x_2$$

$$8 R_B \times 2.67 = 40 \times 3.33$$

$$R_B = 6.24 \text{ kN}$$

$$\text{Reaction} = \text{Total load} - R_B$$

$$R_A = 20 - 6.24$$

$$R_A = 13.76 \text{ kN}$$

$$M_A = (6.24 \times 4) - (20 \times 2) = -15.04 \text{ kN.m}$$

Draw BMD

**Point of Contra Flexure (y) :**

Point of contra flexure will occur at "y" distance from B. (Similar triangles)

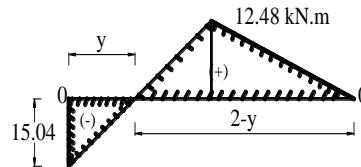
$$\frac{y}{15.04} = \frac{2-y}{12.48}$$

$$12.48 y = 15.04 (2 - y) = 0$$

$$27.52 y = 30.08$$

$$y = \frac{30.08}{27.52} = 1.09$$

$$y = 1.09 \text{ m from A}$$



## Problem 2

**A Propped cantilever beam is 6m long. It carries an udl of 30 kN/m over its entire span. Determine the Prop. reaction and Draw SFD and BMD.**

### Solution

Span  $\ell$  = 6 m  
 udl  $w$  = 30 kN/m  
 let  $R_B$  = Prop. reaction

#### i) Bending moment by parts

$R_B$  = Prop. Reaction  
 BM at A due to  $R_B = R_B \times \ell = 6 R_B$   
 BM at A due to udl =  $\frac{30 \times 6^2}{2}$   
 $= -540 \text{ kN.m}$

Draw BMD

#### ii) Area

$a_1$  = area of BMD due to  $R_B$

$$A_1 = \frac{1}{2} \times 6 \times 6 R_B = 18 R_B$$

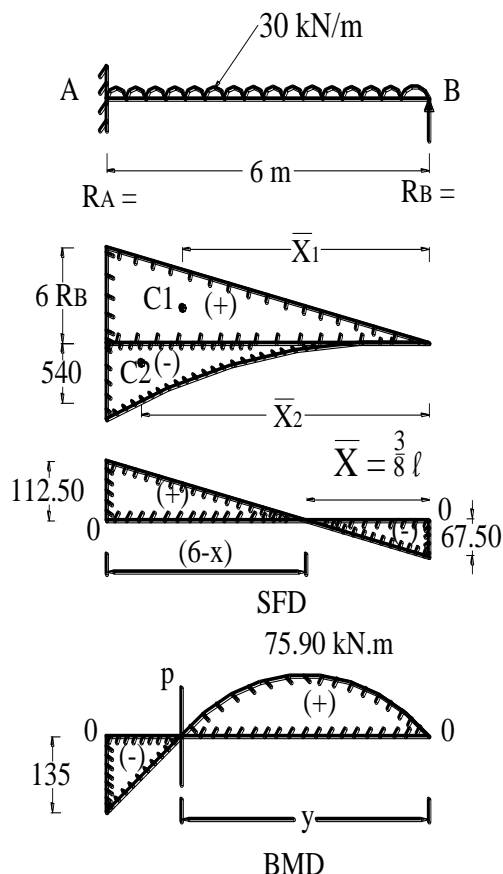
Centroid

$$\bar{x}_1 = \frac{2}{3} \times 6 = 4 \text{ m}$$

$a_2$  = area of BMD due to udl

$$A_2 = \frac{1}{3} \times 6 \times 540 = 1080 \text{ kN.m}^2$$

Centroid of BMD from B



$$\bar{x}_2 = \left( \frac{3}{4} \times 6 \right) = 4.5 \text{ m}$$

## ii) Prop. Reaction

### By Mohr's Theorem – II

Upward deflection due to Prop. reaction = Downward deflection due to load

$$\frac{A_1 \bar{x}_1}{EI} = \frac{A_2 \bar{x}_2}{EI}$$

$$A_1 \bar{x}_1 = A_2 \bar{x}_2$$

$$18 R_B \times 4 = 1080 \times 4.5$$

$$R_B = 67.50 \text{ kN}$$

$$\text{Reaction at A} = \text{Total load} - R_B$$

$$R_A = (30 \times 6) - 67.50 = 112.50 \text{ kN}$$

Draw SFD

**Maximum BM will occur at 'x' distance from B**

$$\frac{x}{67.50} = \frac{6-x}{112.50}$$

$$112.50 x - 67.50 (6 - x) = 405 - 67.50 x$$

$$x = 2.25 \text{ m from B}$$

## Bending Moment

$$M_B = 0$$

$$M_x = R_B \times 2.25 - w \cdot x \cdot \frac{x}{2} = 67.50 \times 2.25 - 30 \times \frac{2.25^2}{2} = 75.94 \text{ kN.m}$$

$$M_A = R_B \times 6 - \frac{w \cdot \ell^2}{2} = (67.5 \times 6) - \left( 30 \times \frac{6^2}{2} \right) = -135 \text{ kN.m}$$

Draw BMD

**Point of Contra Flexure (P) :**

Point of contra flexure will occur at "y" distance from B.

$$M_y = 0$$

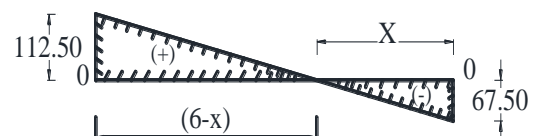
$$M_y = R_B \times y - w \cdot y \cdot \frac{y}{2} = 0$$

$$67.50 \times y - 15 y^2 = 0$$

$$y^2 - 4.5 = 0$$

$$y^2 = 4.5$$

$$y = 2.12 \text{ m from B}$$



### Problem 3

A propped cantilever beam 8m span carries an udl of 5 kN/m over its entire length. Determine the prop. reaction also draw SFD and BMD.

#### Solution

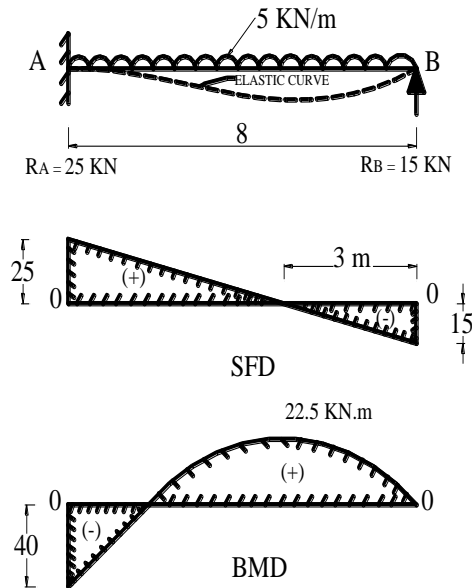
##### i) Prop. reaction

$$\begin{aligned}\text{we know, } R_B &= \frac{3}{8} w \ell \\ R_B &= \frac{3}{8} \times 5 \times 8 = 15 \text{ kN} \\ R_A &= 5 \times 8 - 15 = 25 \text{ kN}\end{aligned}$$

Draw SFD

Max. (+ve) BM will occur at 'x' distance from Prop.

$$\begin{aligned}\frac{x}{15} &= \frac{8-x}{25} \\ 25x &= 15(8-x) \\ 25x &= 120 - 15x \\ 40x &= 120 \\ x &= \frac{120}{40} = 3 \text{ m}\end{aligned}$$



##### Bending Moment

$$\begin{aligned}M_B &= 0 \\ M_x &= (15 \times 3) - \left( 5 \times 3 \times \frac{3}{2} \right) = 22.5 \text{ kN.m} \\ M_A &= 15 \times 8 - \left( 5 \times 8 \times \frac{8}{2} \right) = -40 \text{ kN.m}\end{aligned}$$

##### Check

$$M_A = \frac{-w\ell^2}{8} = \frac{5 \times 8^2}{8} = -40 \text{ kN.m}$$

### Problem 4

A propped cantilever beam 6m span carries a point load of 30 kN at 2m from propped end. Find prop. reaction draw SFD and BMD.

#### Given data:

$$\begin{aligned}\text{Span } \ell &= 6 \text{ m} \\ \text{Load } W &= 30 \text{ kN} \\ a &= 4 \text{ m} ; b = 2 \text{ m}\end{aligned}$$

#### Solution:

##### i) Bending moment by parts

$$\begin{aligned}\text{BM due to Prop. Reaction} &= R_B \times \ell = 6 R_B \\ \text{BM at A due to load} &= 30 \times 4 = 120 \text{ kN.m}\end{aligned}$$



## ii) Area of BMD

$$A_1 = \frac{1}{2} \times b \times h$$

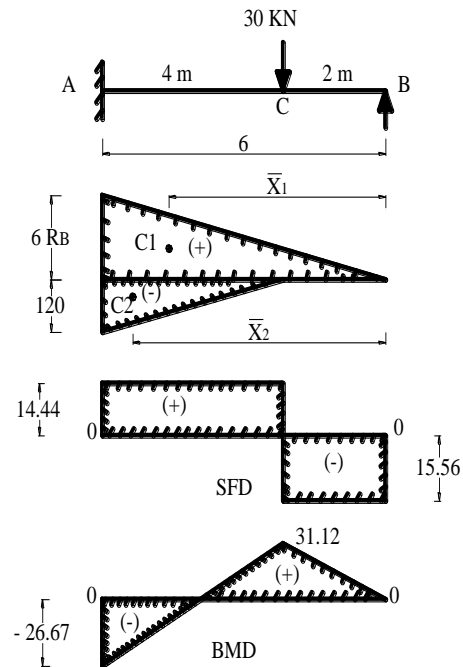
$$A_1 = \frac{1}{2} \times 6 \times 6 R_B = 18 R_B$$

$$\bar{x}_1 = \frac{2}{3} \times 6 = 4\text{m}$$

$$A_2 = \frac{1}{2} \times b \times h$$

$$A_2 = \frac{1}{2} \times 4 \times 120 = -240 \text{ m}^2$$

$$\bar{x}_2 = 2 + \frac{2}{3} \times 4 = 4.67 \text{ m}$$



## ii) Prop. Reaction ( $R_B$ )

By Mohr's Theorem - II

$$\delta_{B/A} = \frac{A\bar{x}}{EI} = 0, \quad A\bar{x} = 0$$

$$(18 R_B \times 4) - (240 \times 4.67) = 0$$

$$R_B = 15.56 \text{ kN}$$

$$R_A = 30 - 15.56 = 14.44 \text{ kN}$$

Draw SFD

## Check

(or) we know

$$R_B = \frac{Wa^2}{2\ell^3} (3\ell - a)$$

$$R_B = \frac{30 \times 4^2}{2 \times 6^3} (3 \times 6 - 4) = 15.56 \text{ kN}$$

$$R_A = 30 - 15.56 = 14.44 \text{ kN}$$

## Bending Moment

$$M_B = 0$$

$$M_C = 15.56 \times 2 = 31.12 \text{ kN.m}$$

$$M_A = 15.56 \times 6 - 30 \times 4 = -26.67 \text{ kN.m}$$

Draw BMD

### Problem 5

A beam of length 6m is fixed at one end and supported by a rigid Prop. at the other end at the same level. It carries an udl of 5 kN/m for a length of 4m from fixed end. Determine the Prop. reaction and Draw SFD and BMD.

#### Given data:

Span  $\ell$  = 6 m  
 udl  $w$  = 5 kN/m  
 $\ell_1$  = 4 m  
 let  $R_B$  = Prop. reaction

#### Solution

##### i) Bending moment by parts

$R_B$  = Prop. Reaction

BM at A due to  $R_B \times \ell = 4 R_B$

BM at A due to udl =  $\frac{5 \times 4^2}{2} = -40$  kN.m

Draw BMD by parts

##### ii) Area of BMD

$A_1$  = area of BMD due to  $R_B$

$$A_1 = \frac{1}{2} \times 6 \times 6 R_B = 18 R_B$$

$$\text{Centroid } \bar{x}_1 = \frac{2}{3} \times 6 = 4 \text{ m from B}$$

$A_2$  = area of BMD due to udl

$$A_2 = \frac{1}{3} \times 4 \times 40 = 53.33 \text{ kN.m}$$

$$\bar{x}_2 = \left( \frac{3}{4} \times 4 \right) + 2 = 5 \text{ m from B}$$

##### ii) Prop. Reaction ( $R_B$ )

By Mohr's Theorem – II

Upward deflection due to Prop. reaction = Downward deflection due to load

$$\frac{A_1 \bar{x}_1}{EI} = \frac{A_2 \bar{x}_2}{EI}$$

$$18 R_B \times 4 = 53.33 \times 5$$

$$R_B = 3.70 \text{ kN}$$

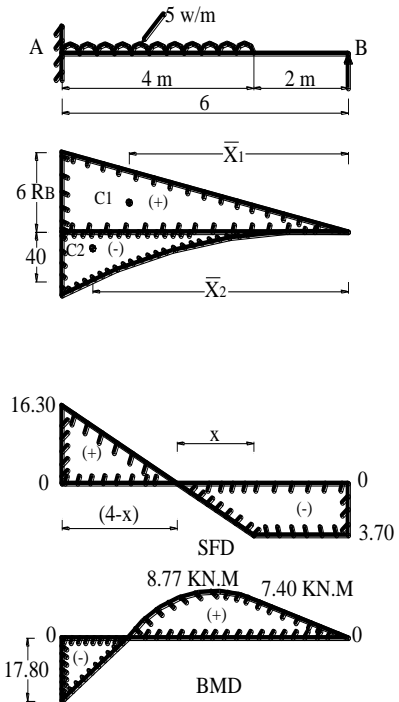
Reaction at A = Total load –  $R_B$

$$R_A = (5 \times 4) - 3.70 = 16.30 \text{ kN}$$

Draw SFD

Maximum (+ve) BM will occur at 'x' distance from C

$$\frac{x}{3.70} = \frac{4-x}{16.30}$$



$$16.30x - 3.70(4 - x) = 14.80 - 3.70x$$

$$x = \frac{14.80}{20} = 0.74 \text{ m from C}$$

i.e.  $(2 + 0.74) = 2.74 \text{ m from B}$

### Bending Moment

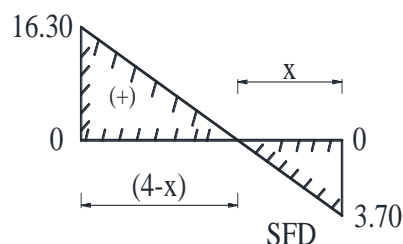
$$M_B = 0$$

$$M_C = R_B \times 2 = 3.7 \times 2 = 7.40 \text{ kN.m}$$

$$M_x = R_B \times 2.74 - w \cdot x \cdot \frac{x}{2} = 3.70 \times 2.74 - 5 \times \frac{0.74^2}{2} = 8.77 \text{ kN.m}$$

$$M_A = R_B \times \ell - \frac{w \cdot \ell^2}{2} = 3.7 \times 6 - \frac{5 \times 4^2}{2} = -17.80 \text{ kN.m}$$

Draw BMD



### Problem 6

A cantilever beam is supported by vertical post at free end 4m long and it carries a point load of 20 kN at centre and udl of 5 kN/m over entire length. Draw SFD and BMD.

#### Solution

$$\text{Span } \ell = 4 \text{ m}$$

$$\text{Load } W = 20 \text{ kN}$$

$$\text{udl } w = 5 \text{ kN/m}$$

#### i) Bending moment by parts

$$R_B = \text{Prop. Reaction}$$

$$\text{BM at A due to } R_B = 4 R_B$$

$$\text{BM at A due to udl} = \frac{5 \times 4^2}{2} = 40 \text{ kN.m}$$

$$\text{BM at A due to load} = 20 \times 2 = 40 \text{ kN.m}$$

Draw BMD by parts

#### ii) Area of BMD

$$A_1 = \frac{1}{2} \times b \times h$$

$$\begin{aligned}
 A_1 &= \frac{1}{2} \times 4 \times 4 R_B = 8 R_B \\
 \bar{x}_1 &= \frac{2}{3} \times 4 = 2.67 \text{ m} \\
 A_2 &= \frac{1}{3} \times b \times h \\
 A_2 &= \frac{1}{3} \times 4 \times 40 = 53.33 \\
 \bar{x}_2 &= \left( \frac{3}{4} \times 4 \right) = 3 \text{ m} \\
 A_3 &= \frac{1}{2} \times b \times h \\
 A_3 &= \frac{1}{2} \times 2 \times 40 = 40 \\
 \bar{x}_3 &= 2 + \frac{2}{3} \times 2 = 3.33 \text{ m}
 \end{aligned}$$

## ii) Prop. Reaction ( $R_B$ )

By Mohr's Theorem – II

$$\delta_{B/A} = \frac{A\bar{x}}{EI} = 0$$

$$A\bar{x} = 0$$

Upward deflection } = { Downward deflection

$$A_1 \bar{x}_1 = [A_2 \bar{x}_2 + A_3 \bar{x}_3]$$

$$(8 R_B \times 2.67) = [(53.33 \times 3) + (40 \times 3.33)]$$

$$21.36 R_B = 293.19$$

$$R_B = \frac{293.19}{21.36} = 13.75 \text{ kN}$$

$$R_A = 20 + (5 \times 4) - 13.75 = 26.25 \text{ kN}$$

(or) we know,

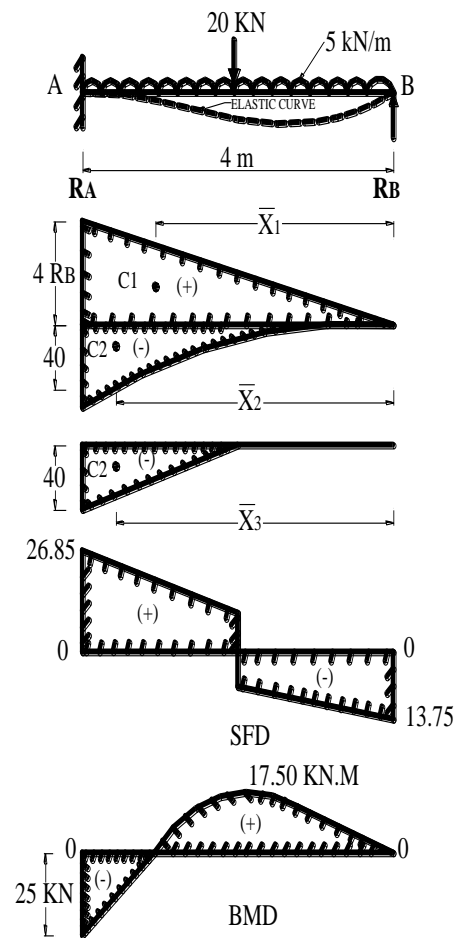
$$R_B = \left( \frac{5}{16} W + \frac{3}{8} \omega l \right)$$

$$R_B = \left( \frac{5}{16} \times 20 + \frac{3}{8} \times 5 \times 4 \right)$$

$$R_B = 13.75 \text{ kN}$$

$$R_A = 20 + 5 \times 4 - 13.75 = 26.25 \text{ kN}$$

Draw SFD



### Bending Moment

$$M_B = 0$$

$$M_C = (13.75 \times 2) - (5 \times 2) \left( \frac{2}{2} \right) = 17.50 \text{ kN.m}$$

$$M_A = 13.75 \times 4 - (20 \times 2) - \left( 5 \times 4 \times \frac{4}{2} \right) = -25 \text{ kN.m}$$

$$M_A = -25 \text{ kN.m}$$

Draw BMD

### Problem 7

A beam of length 6m is Propped at one end. It carries two point loads of 5 kN each at 2m and 4m from left supports. Determine the Prop. reaction by area moment method and Draw SFD and BMD.

#### Solution

$$\text{Span } \ell = 6 \text{ m}$$

$$W_1 = W_2 = 5 \text{ kN}$$

let  $R_B$  = Prop. reaction at B

$R_A$  = Prop. Reaction at A

#### i) Bending moment by parts

$$R_B = \text{Prop. Reaction} = R_B \times \ell = 6R_B$$

$$\text{BM at A due to } W_1 = R_B \times \ell (5 \times 4) = 20 \text{ kN.m}$$

$$\text{BM at A due to } W_2 = 5 \times 2 = 10 \text{ kN.m}$$

Draw BMD by parts

#### ii) Area

$A_1$  = area of BMD due to  $R_B$

$$A_1 = \frac{1}{2} \times 6 \times 6 R_B = 18 R_B$$

$$\text{Centroid } \bar{x}_1 = \frac{2}{3} \times 6 = 4 \text{ m}$$

$A_2$  = area of BMD due to udl

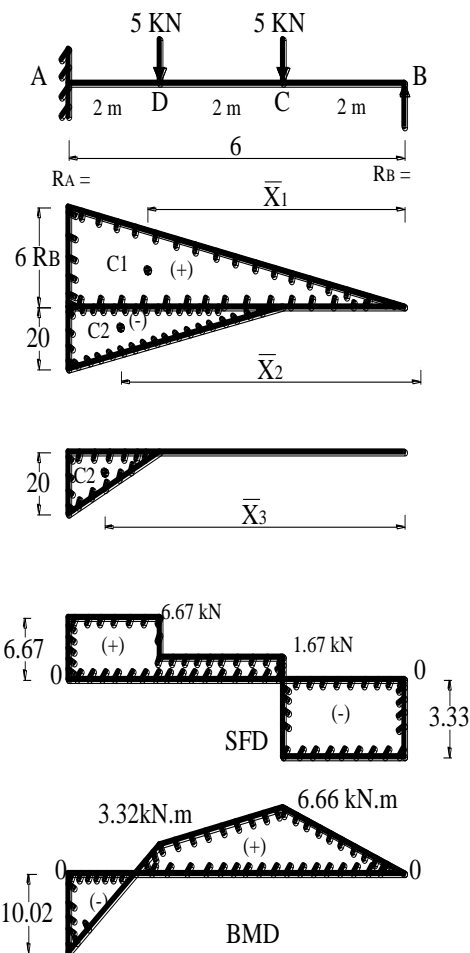
$$A_2 = \frac{1}{2} \times 4 \times 20 = 40$$

Centroid of BMD from B

$$\bar{x}_2 = 2 + \left( \frac{2}{3} \times 4 \right) = 4.67 \text{ m}$$

$$A_3 = \frac{1}{2} \times 2 \times 10 = 10$$

$$\bar{x}_3 = 4 + \frac{2}{3} \times 2 = 5.33 \text{ m}$$



## ii) Prop. Reaction ( $R_B$ )

By Mohr's Theorem – II

Upward deflection due to Prop. reaction = Downward deflection due to load

$$\frac{a_1 \bar{x}_1}{EI} = \frac{a_2 \bar{x}_2}{EI} + \frac{a_3 \bar{x}_3}{EI}$$

$$a_1 \bar{x}_1 = a_2 \bar{x}_2 + a_3 \bar{x}_3$$

$$18 R_B \times 4 = (40 \times 4.67) + (10 \times 5.33) = 240.10$$

$$R_B = 3.33 \text{ kN}$$

Reaction at A = Total load –  $R_B$

$$R_A = (5 + 5 - 3.33) = 6.67 \text{ kN}$$

Draw SFD

## Bending Moment

$$M_B = 0$$

$$M_C = R_B \times 2 = 3.33 \times 2 = 6.66 \text{ kN.m}$$

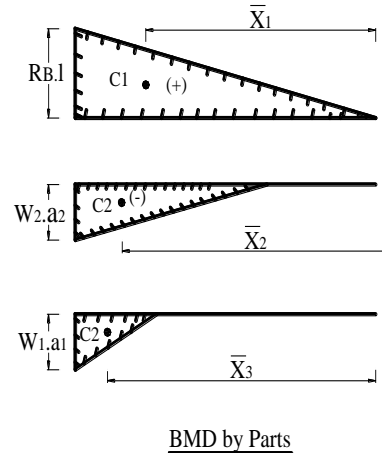
$$M_D = R_B \times 4 - (5 \times 2) = 3.33 \times 4 - 5 \times 2$$

$$M_x = 3.32 \text{ kN.m}$$

$$M_A = R_B \times 6 - (5 \times 4) - (5 \times 2) = 3.33 \times 6 - 5 \times 4 - 5 \times 2$$

$$M_A = -10.02 \text{ kN.m}$$

Draw BMD



## Problem 8

A Cantilever beam of 6m length Propped at 2m from free end it carries an udl of 12 kN/m over its entire span. Analyse the beam using area moment method Draw SFD and BMD indicating the values of salient points.

## Solution

$$\text{Span } \ell = 4 \text{ m}$$

$$\text{Projection} = 2 \text{ m}$$

$$\text{udl } w = 12 \text{ kN/m}$$

$$\text{let } R_A = \text{Reaction at A}$$

$$R_B = \text{Prop. reaction}$$

## i) Bending moment by parts

$$R_B = \text{Prop. Reaction}$$

$$\text{BM at A due to } R_B \times \ell = 4 R_B$$

$$\text{BM at A due to udl} = \frac{12 \times 6 \times 6}{2} = 216 \text{ kN.m}$$

$$\text{BM at B due to udl} = \frac{12 \times 2^2}{2} = 24 \text{ kN.m}$$

Draw BMD by parts

## ii) Area

**a<sub>1</sub> = area of BMD due to R<sub>B</sub>**

$$a_1 = \frac{1}{2} \times 4 \times 4 R_B = 8 R_B$$

Centroid

$$\bar{x}_1 = \frac{2}{3} \times 4 = 2.67 \text{ m from B}$$

**a<sub>2</sub> = area of BMD due to udl**

$$a_2 = 4 \times 24 = 96 \text{ kN.m}^2$$

Centroid of BMD from B

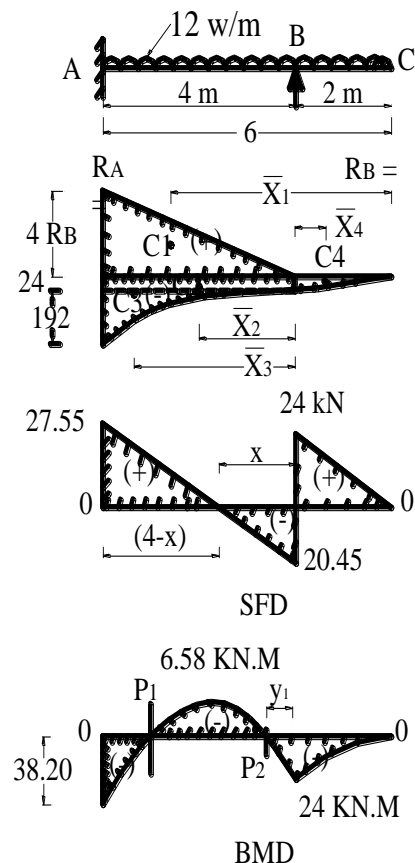
$$\bar{x}_2 = \left( \frac{4}{2} \right) = 2 \text{ m}$$

$$a_3 = \frac{1}{3} \times 4 \times 192 = 256 \text{ kNm}^2$$

$$\bar{x}_3 = \frac{3}{4} \times 4 = 3 \text{ m}$$

$$a_4 = \frac{1}{3} \times 2 \times 24 = 16 \text{ kNm}^2$$

$$\bar{x}_4 = \frac{1}{4} \times 2 = 0.5 \text{ m from B}$$



## ii) Prop. Reaction

**By Mohr's Theorem – II**

Upward deflection due to Prop. reaction = Downward deflection due to load

(Area of +ve Bm  $\times x$ ) = Area of -ve Bm  $\times x$ )

$$\frac{a_1 \bar{x}_1}{EI} + \frac{a_4 \bar{x}_4}{EI} = \frac{a_2 \bar{x}_2}{EI} + \frac{a_3 \bar{x}_3}{EI}$$

$$a_1 \bar{x}_1 + a_4 \bar{x}_4 = a_2 \bar{x}_2 + a_3 \bar{x}_3$$

$$(8 R_B \times 2.67) + (16 \times 0.5) = (96 \times 2) + (256 \times 3)$$

$$21.36 R_B + 8 = 192 + 768 = 960$$

$$21.36 R_B = 952$$

$$R_B = \frac{952}{21.36}$$

$$R_B = 44.45 \text{ kN}$$

$$\text{Reaction at A} = \text{Total load} - R_B$$

$$R_A = (12 \times 6) - 44.45 = 27.55 \text{ kN}$$

**Maximum BM will occur at 'x' distance from C**

$$\frac{x}{20.45} = \frac{4-x}{27.55}$$

$$27.55 x = 20.45 (4 - x)$$

$$27.55 x = 81.80 - 20.45x$$

$$48x = 81.80$$

$$x = \frac{81.80}{48} = 1.70 \text{ m from B}$$

### Bending Moment

$$M_C = 0$$

$$M_B = -12 \times \frac{2^2}{2} = 24 \text{ kN.m}$$

$$M_x = 44.45 \times 1.70 - 12 \times \frac{3.7^2}{2} = 6.58 \text{ kN.m}$$

$$M_A = R_B \times \ell - \frac{w \cdot \ell^2}{2} = 44.45 \times 4 - 12 \times \frac{6^2}{2} = -38.20 \text{ kN.m}$$

Draw SFD & BMD

### Problem 9

A beam of length 8m is fixed at one end and supported on a rigid prop. at the other end at the same level. The beam carries an udl of 8 kN/m over its entire length. Determine the prop. reaction and draw SFD and BMD.

### Solution

#### (i) Prop. reaction

$$R_B = \frac{3}{8} w \times \ell = \frac{3}{8} \times 8 \times 8$$

$$R_B = 24 \text{ kN}$$

$$R_A = (8 \times 8) - 24$$

$$R_A = 40 \text{ kN}$$

Draw SFD as shown in fig. 1.48

Max. (+ve) BM will occur at 'x' distance from Prop.

$$\frac{x}{24} = \frac{8-x}{40}$$

$$40x = 24(8-x)$$

$$40x = 192 - 24x$$

$$64x = 192$$

$$x = 3 \text{ m}$$

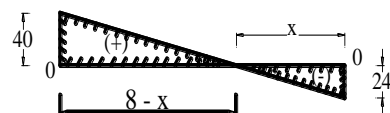
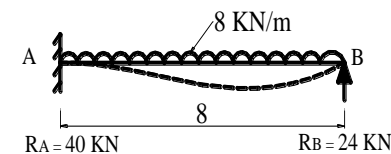
### Bending Moment

$$M_B = 0$$

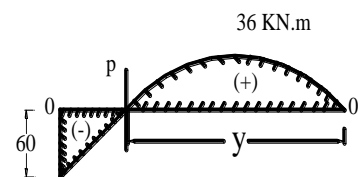
$$M_A = (24 \times 8) - 8 \times 8 \times \frac{8}{2} = -64 \text{ kN.m}$$

$$M_x = (24 \times 3) - 8 \times 3 \times \frac{3}{2} = 36 \text{ kN.m}$$

Draw BMD



SFD



BMD



**Point of Contra Flexure (P) :**

Point of contra flexure will occur at 'y' distance from B.

$$M_y = 0$$

$$R_B \times y - w \left( \frac{y^2}{2} \right) = 0$$

$$24 \times y - 8 \times \frac{y^2}{2} = 0$$

$$4.y^2 = 24 y$$

$$y = \frac{24}{4}$$

$$Y = 6 \text{ m from B}$$

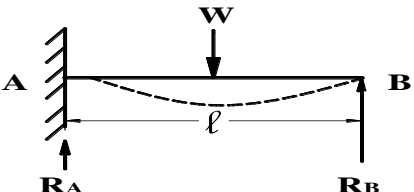
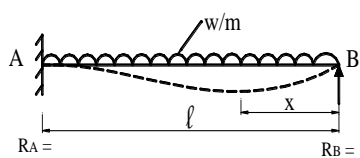
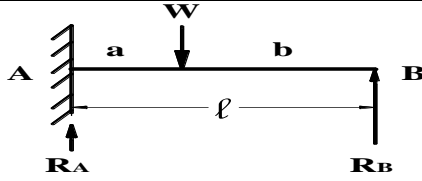
---

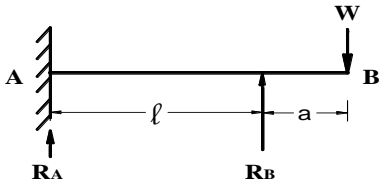
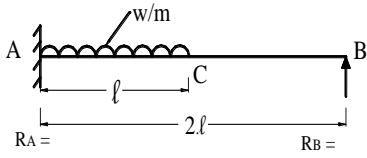
## 1.2 HIGHLIGHTS

**1. Propped cantilever beam**


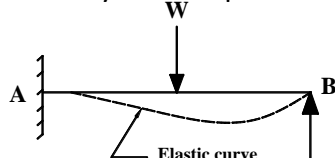
When a cantilever beam is supported by vertical post at free end (or) near the free end is called Propped cantilever beam. It is statically determinate beam and its degree of indeterminacy is 1.

**2. Prop. Reaction**

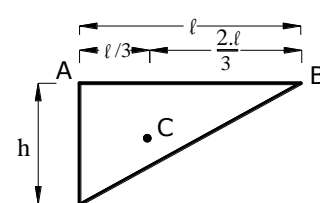
Sl. No.	Type of beam	Prop. Reaction ( $R_A$ & $R_B$ )
1.		$R_B = \frac{5}{16} W$ $R_A = \frac{11}{16} W$
2.		$R_B = \frac{3}{8} w.l$ $R_A = \frac{5}{8} w.l$ <p>Position max. Bm.</p> $x = \frac{3}{8} l$
3.		$R_B = \frac{W.a^2}{2.l^3} (3l - a)$ $R_A = (W - R_B)$

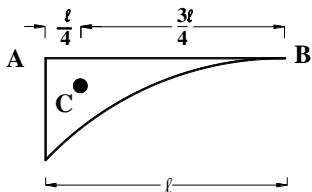
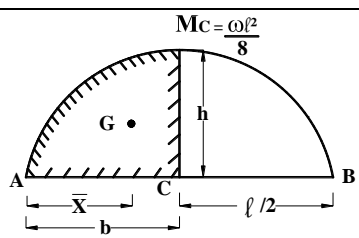
4.		$R_B = \frac{W}{2\ell} (3\ell + a)$
5.		$R_B = \frac{7}{64} w\ell$

### 3. Cantilever and Propped cantilever beam.

Sl. No	Cantilever beam	Propped cantilever beam
1.	One end fixed and another end free. 	One end fixed and another end supported by vertical post. 
2.	It is a statically determinate beam	It is statically indeterminate beam.
3.	Degree of indeterminacy is zero at fixed end is more.	Degree of indeterminacy is one End support moment is zero.
4.	There is no positive moment.	There is a positive moment also.
5.	Slope and deflection are more at free end.	Slope and deflection is zero at propped end.

### 4. Centroid and Area for standard cases.

Sl.No.	Shape	Centroid	Area
1.		$\bar{x}_A = \frac{\ell}{3}$ <p>from 'A'</p> $\bar{x}_B = \frac{2}{3} \times \ell$ <p>from 'B'</p>	$A = \frac{1}{2} \times \ell \times h$

2.		$\bar{x}_A = \frac{\ell}{4}$ from 'A' $\bar{x}_B = \frac{3\ell}{4}$ from 'B'	$A = \frac{1}{3} \times \ell \times h$
3.		$\bar{x}_A = \frac{5}{8} \times b$ from 'A' $\bar{x}_C = \frac{3}{8} \times b$ from 'C'	$A = \frac{1}{3} \times b \times h$

## 1.2 QUESTIONS

### One mark Questions

1. Define – A Prop
2. What is the degree of Indeterminacy of a propped cantilever beam?
3. Where the bending moment is maximum in a propped cantilever subjected to udl throughout.
4. Find the prop action of a propped cantilever beam subjected to point load at centre.
5. Draw the deflected shape of the any one-type of beam
6. What is the degree of indeterminacy of a Propped Cantilever beam?
7. State the prop reaction value of a propped cantilever beam with central point load 'W'
8. State the degree of indeterminacy of a fixed beam
9. What will be the degree of indeterminacy of a propped Cantilever? (unit 1.2)
10. What is the degree of indeterminacy of a fixed beam? (unit 1.2)

### Three/Five mark Questions

1. Find the prop reaction of a propped cantilever beam subjected to a point load at mid-span by area Moment Method.
2. Draw the deflected shapes of cantilever beam, simply supported beam, propped cantilever beam, fixed beam and continuous beam
3. Find the prop reaction of a propped cantilever beam subjected to UDL throughout the span by area moment method.

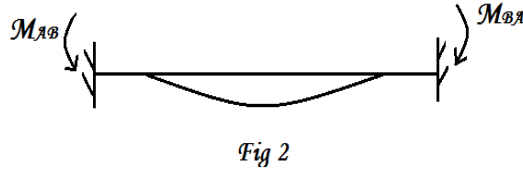
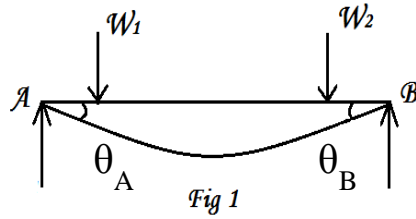
### Ten mark Questions

1. A beam of length 6m is fixed at one end and supported by a rigid prop at the other end at the same level. It carries an UDL of 10KN/m for a length of 4m from the fixed end. Determine the prop reaction and draw SFD and BMD.
2. A cantilever loaded with a point load at center of the span is propped at the free end. Find the fixed support moment and prop reaction.

3. A propped cantilever of length 8m is fixed at one end and supported on a rigid prop at the other end. It carries a point load of 40 kN at a distance of 5m from the fixed end. Determine the prop reaction. Draw SFD and BMD.
4. A beam of length 6m is fixed at one end and supported by a rigid prop at the other end. It carries an UDL of 5 kN/m for a length of 4m from the fixed end. Determine the prop reaction and draw SFD and BMD.
5. A beam of length 6m is fixed at one end and supported by a rigid prop at the other end. It carries an UDL of 30 kN/m over its length. Determine the prop reaction and draw SFD and BMD.
6. A Propped Cantilever of span 6m carries two equal point loads of 5kN act at 2m and 4m from left support. Determine the prop reaction and draw SFD and BMD
7. A beam of length 8m is fixed at one end and supported on a rigid unyielding prop carries an udl of 4 kN/m throughout the length. Draw SFD and BMD.
8. A cantilever of 6 m length is propped at 2m from the free end. It carries an udl of 12 kN/m throughout its length. Analyse the beam using area moment method and draw the SF and BM diagrams indicating the values at salient points.
9. Construct SFD and BMD for a propped cantilever of length 5m. with end prop carrying two point loads of 5KN, 10KN at 2m. and 3m. distances respectively from the fixed end.
10. A horizontal beam of 8 metre span is fixed at one end and simply supported at the other end. It carries an u.d.l. of 12 kN/m for 6m length from the fixed support. Determine the reactions at the supports and draw the SF and BM diagrams using area moment method. Determine also the positions of Zero moments in the beam.
11. A cantilever beam is supported by vertical post at free end 4m long and it carries a point load of 20 kN at centre and udl of 5 kN/m over entire length. Draw SFD and BMD.

## 2.1. FIXED BEAMS – AREA MOMENT METHOD

### Introduction to fixed beams:



$$\theta_A = 0 \quad \theta_B = 0$$

Fig 1 shows a simply supported beam AB carrying an external Load system.

Due to the load system a clockwise rotation at A ( $\theta_A$ ) and an anticlockwise rotation at B ( $\theta_B$ ) are developed.

To make these rotations ( $\theta_A$  &  $\theta_B$ ) zero, an anticlockwise moment  $M_{AB}$  at A and a clockwise moment  $M_{BA}$  at B are to be applied.

These moments ( $M_{AB}$  &  $M_{BA}$ ) can be developed by fixing the supports A & B.

These end moments are called “Fixed end moments” and such a beam is called a “Fixed beam”.

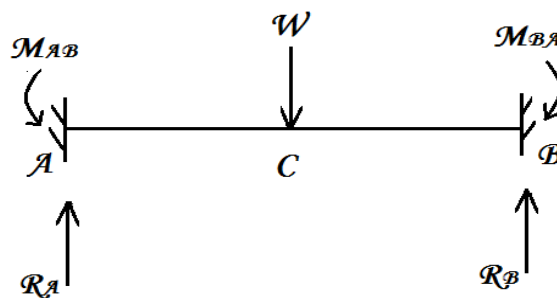
### Advantages:

- 1) The fixed end moments reduce the max bending moment near the mid span.
- 2) Smaller c/s and hence economical.
- 3) Less deflection
- 4) Stiffer, stronger and stable.

### Disadvantages:

- 1) Being an indeterminate structure, additional equations, besides static equilibrium equation are necessary for the analysis.
- 2) Proper care should be taken for the effects due to temperature and secondary stresses.

### Degree of indeterminacy of Fixed beam:



No of unknown reactions = 4

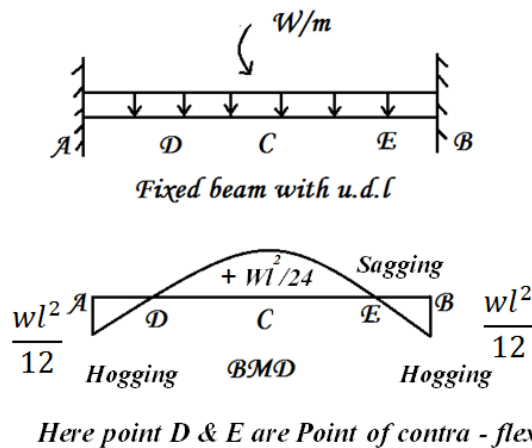
( $R_A$ ,  $R_B$ ,  $M_{AB}$  and  $M_{BA}$ )

No of available static equilibrium equation = 2

**Redundant reaction (excess unknown) =  $2(4-2)$**

∴ Degree of indeterminacy is **2**.

**Sagging and Hogging moments:**



In case of fixed beams, both hogging bending moment and sagging bending moments are present.

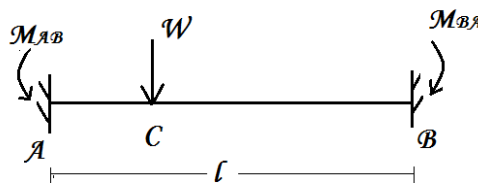
The fixed end moments are usually hogging in nature.

The mid span moment (for symmetrical loading) is sagging in nature.

At the ends, the moments are hogging and gradually reduces to zero at the point of contra-flexure and gradually increases to max sagging moment and then sagging moment gradually reduces to reach another point of contra-flexure and after that increasing to hogging moments at other end.

Thus there are two point of contra-flexure.

**Determination of Fixed end moments by Area moment method:**



The fixed ends can be calculated by Area moment method which uses Mohr's theorems.

In case of symmetrical loading, the fixed ends are equal (i.e.)  $M_{AB} = M_{BA}$ . For this case, the fixed end moments can be calculated by applying Mohr's theorem I.

In case of unsymmetrical loading, the fixed end moments are not equal. (i.e.)  $M_{AB}$  is not equal to  $M_{BA}$ . For this case, the fixed end moments can be calculated by both the Mohr's theorem.

(i.e.) Mohr's theorems I and II.

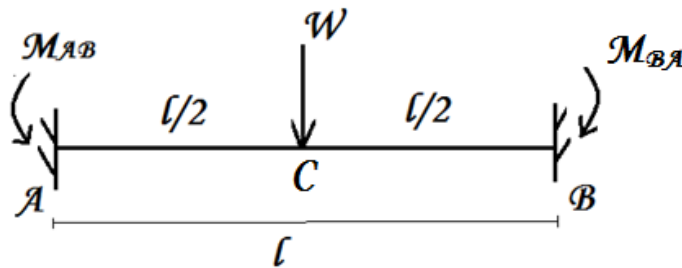
**Derivations of expression for standard cases of fixed beams:**

The following are the standard cases

- I. Fixed beam with central point load (symmetrical loading).
- II. Fixed beam with UDL throughout (symmetrical loading).
- III. Fixed beam with a non-central (eccentric) point load (unsymmetrical loading).

### Standard case I

#### FIXED BEAM WITH CENTRAL POINT LOAD:



#### Notations:

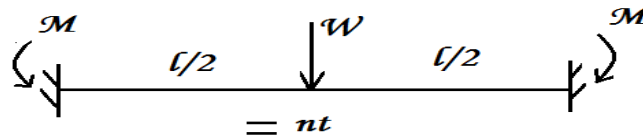
$W$	– Central point load.
$L$	– Span of the beam.
$M_{AB}$	– Fixed end moments at A.
$M_{BA}$	– Fixed end moments at B.

#### Concept:

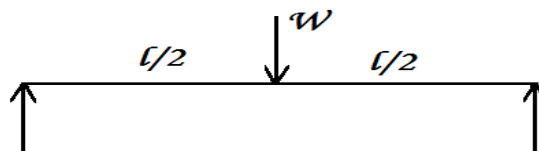
- \* This standard case is a case of **symmetrical loading**.
- \* The fixed end moments are equal.  
(i.e.)  $M_{AB} = M_{BA} = M$  (say).
- \* The fixed end moments ( $M_{AB}$  &  $M_{BA}$ ) are evaluated by applying **Mohr's theorem I**.

#### Approach:

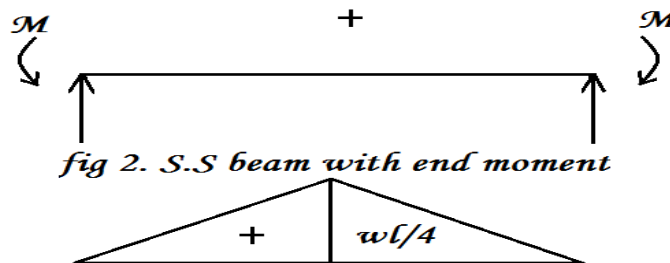
The given Fixed beam is




= nt



*fig 1 Simply supported beam with central point load*



*fig 2. S.S beam with end moment*



$\mu$  diagram (free BMD)

$\mu'$  diagram (fixed BMD)

In the figure,

The BMD's for the equivalent S.S beams are drawn.

The BMD for the S.S beam with loading is called as  $\mu$  diagram or free BMD.

For this case the  $\mu$  diagram is a triangle with a central ordinate of  $Wl/4$ .

The BMD for S.S beam with ends moments is called  $\mu'$  diagram or fixed BMD.

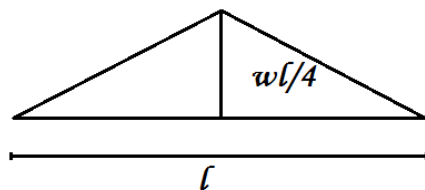
For this case, the end moments are equal and hence  $\mu'$  diagram is a rectangle.

The end moments are calculated by equating,

Area of  $\mu$  diagram = Area of  $\mu'$  diagram.

**Derivation:**

**Step 1: Area of  $\mu$  diagram**



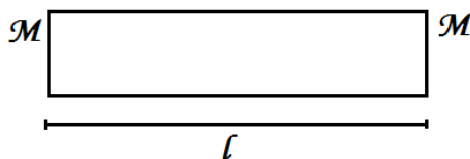
Area of  $\mu$  diagram

$$\begin{aligned} &= \text{Area of triangle} \\ &= \frac{1}{2}bh \\ &= \frac{1}{2} \times l \times wl/4 \\ &= wl^2/8 \end{aligned}$$

**Step 2: Area of  $\mu'$  – diagram:**

Area of  $\mu'$  diagram

$$= \text{Area of rectangle}$$



$$\begin{aligned} &= l \times b \\ &= l \times M \\ &= Ml \end{aligned}$$

**Step 3: Fixed end moments:**

Area of  $\mu'$  diagram = Area of  $\mu$  diagram

$$Ml = wl^2/8$$

$$M = wl/8$$

(i.e.)  $M_{AB} = M_{BA} = M = wl/8$ .

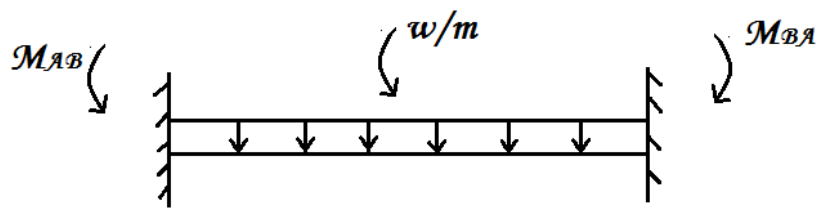
**Result:**

The fixed end moments

$$M_{AB} = M_{BA} = wl/8.$$



**Standard case II**  
**FIXED BEAM WITH UDL THROUGHOUT THE SPAN**



**Notations:**

- $w$  - UDL throughout the span
- $l$  - Span of the beam
- $M_{AB}$  - fixed end moment at A
- $M_{BA}$  - fixed end moment at B

**Concept:**

- This standard case is a case of **symmetrical loading**.
- The Fixed end moments are equal.  
 (i.e.)  $M_{AB} = M_{BA} = M$  (say)
- The fixed end moments ( $M_{AB}$  &  $M_{BA}$ ) are evaluated by applying **Mohr's Theorem I**.

**Approach:**

The given fixed beam is converted to an equivalent S.S beam.

From the diagram,

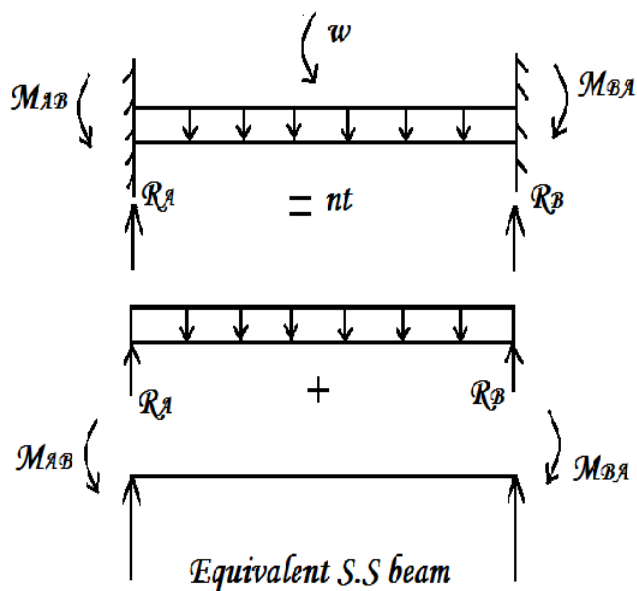
The BMD's for equivalent S.S beams are drawn.

The  $\mu$  diagram (free BMD) is a second degree parabola with a central ordinate of  $wl^2/8$ .

The  $\mu'$  diagram (fixed BMD) is a rectangle with length ' $l$ ' and breadth ' $M$ '.

The end moments are calculated by equating,

Area of  $\mu'$  diagram = Area of  $\mu$  diagram.



**Step 1: Area of  $\mu$  diagram:**Area of  $\mu$  diagram

$$\begin{aligned}
 &= \text{Area of parabola} \\
 &= \frac{2}{3} bh \\
 &= \frac{2}{3} \times l \times \frac{wl^2}{8} \\
 &= \frac{wl^3}{12}.
 \end{aligned}$$

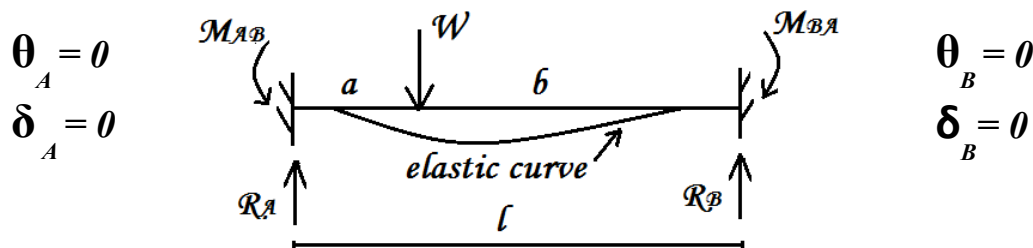
**Step 2: Area of  $\mu'$  diagram:**Area of  $\mu'$  diagram

$$\begin{aligned}
 &= \text{Area of rectangle} \\
 &= l \times b \\
 &= l \times M \\
 &= Ml
 \end{aligned}$$

**Step 3: Fixed end moments:**

Equating,

$$\begin{aligned}
 \text{Area of } \mu' \text{ diagram} &= \text{Area of } \mu \text{ diagram} \\
 l \times M &= \frac{wl^3}{12} \\
 \text{Therefore } M &= \frac{wl^2}{12} \\
 M_{AB} = M_{BA} = M &= \frac{wl^2}{12}
 \end{aligned}$$

**FIXED BEAMS WITH UNSYMMETRICAL LOADING*****Example fig***

In the fig,

$$a \neq b; M_{AB} \neq M_{BA};$$

$$R_A \neq R_B.$$

Boundary condition,

$$\theta_A = 0; \quad \theta_B = 0; \quad \delta_A = 0; \quad \delta_B = 0;$$

When a fixed beam is subjected to unsymmetrical loading,

- ♣ Fixed end moments ( $M_{AB}$  &  $M_{BA}$ ) are not equal (i.e.)  $M_{AB} \neq M_{BA}$ .
- ♣ The vertical reactions ( $R_A$  &  $R_B$ ) are also not equal.
- ♣ (i.e.)  $R_A \neq R_B$ .
- ♣ Since the degree of indeterminacy or redundancy is two, the redundant reactions (excess unknown reactions) are two.
- ♣ Hence we require two more equations in addition to the two static equilibrium equations.
- ♣ The two additional equations can be obtained from the geometric conditions of the elastic curve at the ends (boundary conditions).
- ♣ Here we use the conditions that the slope and deflection at the ends are zero.
- ♣ (i.e.)  $\theta_A = 0, \delta_A = 0$ ; (or)  $\theta_B = 0, \delta_B = 0$ ;

- ♣ We make use of the area moment theorem (Mohr's theorem) I & II between the two ends to obtain the two equations.
- ♣ The first equation is obtained from theorem I making use of the condition that the slope at the ends of the beam are zero.
- ♣ The second equation is obtained from theorem II making use of the condition that the deflection at the ends are zero.

Hence from theorem I

$$\sum a_{AB} / EI = 0$$

$EI \neq 0$ , therefore

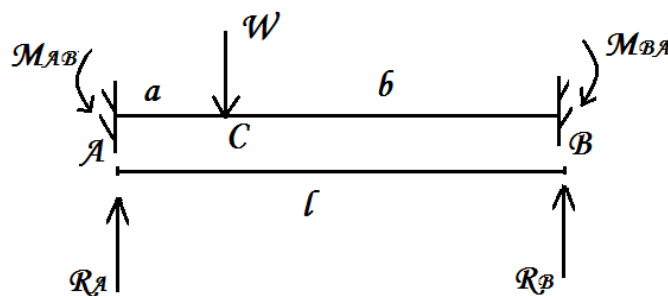
$$\sum a_{AB} = 0 \quad - \quad (1)$$

Hence from theorem II

$$\frac{\sum a_{AB} \bar{X}_A}{EI}$$

$$EI \neq 0, \sum a_{AB} \times \bar{X}_A = 0$$

### Standard case III FIXED BEAM WITH A NON - CENTRAL (ECCENTRIC) POINT LOAD



#### Notations:

- W - Non – central point load
- $M_{AB}$  - Fixed end moment at A
- $M_{BA}$  - Fixed end moment at B
- $R_A$  - Vertical reaction at A
- $R_B$  - Vertical reaction at B
- l - Span of the beam

#### Concept:

- ♣ This standard case is a case of unsymmetrical loading.
- ♣ The Fixed end moments are not equal. (i.e.)  $M_{AB} \neq M_{BA}$ .
- ♣ The Fixed end moments are evaluated by applying Mohr's theorems I & II.

#### Approach:

The given fixed beam is converted into equivalent simply supported beams and the corresponding  $\mu$  diagram (Free BMD) and  $\mu'$  diagram (Fixed BMD) are drawn.

The  $\mu$  diagram is a triangle with an ordinate of  $Wab/l$  at C.

Since  $M_{AB} \neq M_{BA}$ , the  $\mu'$  diagram is trapezium. The fixed end moments are evaluated by applying Mohr's theorems I & II.

From theorem I,

$$\text{Area of } \mu' \text{ diagram} = \text{Area of } \mu \text{ diagram}$$

From theorem II,

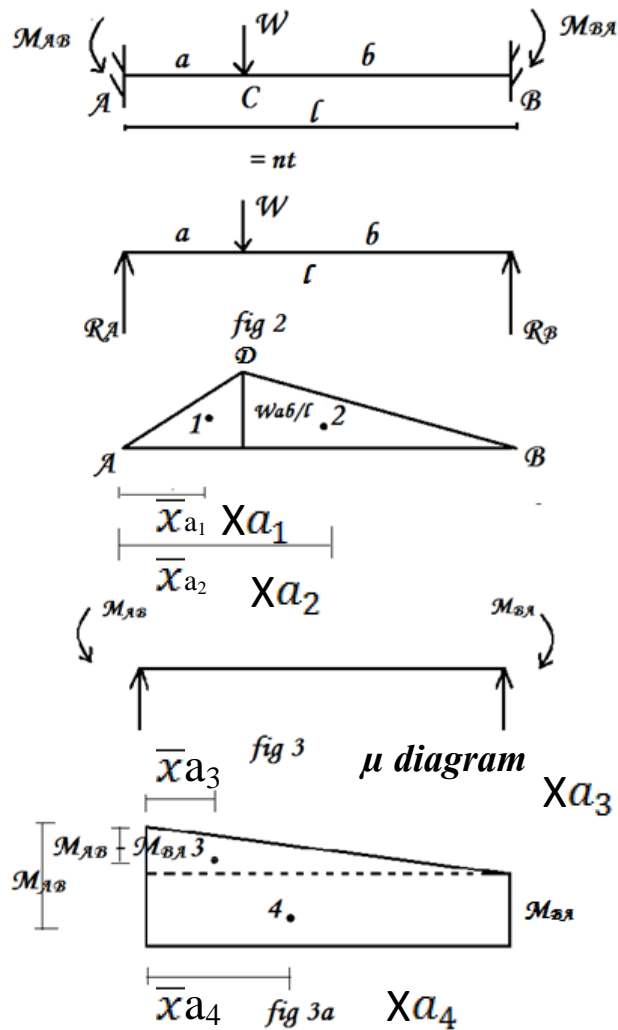
$$\text{Moment of area of } \mu \text{ diagram about A} = \text{Moment of area of } \mu' \text{ diagram about A}$$

In this fig

Fig 2 & fig 3 are equivalent S.S beams

Fig 2(a)  $\mu$  diagram (Free BMD)

Fig 3(a)  $\mu'$  diagram (Fixed BMD)



**Derivation:**

**Step I: Area of  $\mu$  diagram:**

Area of  $\mu$  diagram = Area of triangle

$$= \frac{1}{2}bh$$

$$= \frac{1}{2} \times l \times \frac{W_{ab}}{l}$$

$$= Wab / 2$$

**Step II: Area of  $\mu'$  diagram:**

Area of  $\mu'$  diagram = Area of trapezium

= Area of rectangle + Area of triangle

$$= lb + \frac{1}{2} bh$$

$$= (I \times M_{BA}) + \frac{1}{2} \times I \times (M_{AB} - M_{BA})$$

$$= 1 \times M_{BA} + \frac{1}{2} \times 1 \times M_{AB} - \frac{1}{2} \times 1 \times M_{BA}$$

$$= \frac{1}{2} \times 1 \times M_{BA} + \frac{1}{2} \times 1 \times M_{AB}$$

$$= (M_{AB} + M_{BA}) \times 1/2$$

**Step III: Application of Mohr's theorem I:**

$$\frac{\sum a_{AB}}{EI} = 0, \quad EI \neq 0$$

$$\therefore \sum a_{AB} = 0$$

$$\text{Area of } \mu \text{ diagram} - \text{Area of } \mu' \text{ diagram} = 0$$

$$\text{Area of } \mu \text{ diagram}$$

$$= \text{Area of } \mu' \text{ diagram}$$

$$Wab/2 = (M_{AB} + M_{BA}) l/2$$

$$\therefore M_{AB} + M_{BA} = Wab / l \quad - (1)$$

**Step IV: Moment of area of  $\mu$  diagram:**

Moment of area of  $\mu$  diagram about the left end A

$$= a_1 \cdot \bar{x}a_1 + a_2 \cdot \bar{x}a_2$$

$$a_1 = \frac{1}{2} \times a \times \frac{Wab}{l}$$

$$\bar{x}a_1 = \frac{2}{3} a$$

$$a_1 \cdot \bar{x}a_1 = \frac{1}{2} \times a \times \frac{Wab}{l} \times \frac{2}{3} \times a$$

$$= Wa^3b / 3l$$

$$a_2 = \frac{1}{2} \times b \times \frac{Wab}{l}$$

$$\bar{x}a_2 = (a + b/3) = \left(\frac{3a+b}{3}\right)$$

$$a_2 \cdot \bar{x}a_2 = \frac{1}{2} \times b \times \frac{Wab}{l} \times \left(\frac{3a+b}{3}\right)$$

$$= \frac{Wab^2}{6l} (3a + b)$$

$\therefore$  Moment of area of  $\mu$  diagram about A

$$= a_1 \cdot \bar{x}a_1 + a_2 \cdot \bar{x}a_2$$

$$= \frac{Wa^3b}{3l} + \frac{Wab^2}{6l} \times (3a + b)$$

$$= \frac{Wab}{6l} (2a^2 + 3ab + b^2)$$

**Step V: Moment of area of  $\mu'$  diagram about A**

Moment of area of  $\mu'$  diagram about A,

$$= a_3 \cdot \bar{x}a_3 + a_4 \cdot \bar{x}a_4$$

$$a_3 = \frac{1}{2} bh$$

$$= \frac{1}{2} \times l \times (M_{AB} - M_{BA})$$

$$= (M_{AB} - M_{BA}) \times l/2$$

$$\bar{x}a_3 = l/3$$

$$a_3 \cdot \bar{x}a_3 = (M_{AB} - M_{BA}) \times (l/2) \times (l/3)$$

$$= (M_{AB} - M_{BA}) \times l^2/6$$

$$a_4 = M_{BA} \times l$$

$$\bar{x}a_4 = l/2$$

$$a_4 \cdot \bar{x}a_4 = M_{BA} \times l \times l/2$$

$$= \frac{M_{BA}}{2} l^2$$

$$\therefore a_3 \cdot \bar{x}a_3 + a_4 \cdot \bar{x}a_4 = \frac{M_{AB} - M_{BA}}{6} l^2 + M_{BA} \frac{l^2}{2}$$

$$= \frac{M_{AB} - M_{BA} + 3M_{BA}}{6} \times l^2$$

$$= \frac{M_{AB} + 2M_{BA}}{6} l^2$$

$\therefore$  Moment of area of  $\mu'$  diagram about A

$$\frac{M_{AB} + 2M_{BA}}{6} l^2$$

$$- (2)$$

**Step VI: Fixed end moments:**

$$(M_{AB} + 2 M_{BA}) \times l^2/6 = \frac{Wab}{6l} (2a^2 + 3ab + b^2)$$

$$M_{AB} + 2 M_{BA} = \frac{Wab}{l^3} (a^2 + ab + a^2 + 2ab + b^2)$$

$$= \frac{Wab}{l^3} [a(a+b) + (a+b)^2]$$

$$= \frac{Wab}{l^3} (al + l^2)$$

$$= \frac{Wab}{l^3} l(a+l)$$

$$M_{AB} + 2 M_{BA} = \frac{Wab}{l^2} (l+a) \quad - (3)$$

$$M_{AB} + M_{BA} = \frac{Wab}{l}$$

Equating 1 & 3

$$M_{BA} = \frac{Wab}{l^2} (l+a) - \frac{Wab}{l}$$

$$= \frac{Wab}{l} + \frac{Wa^2b}{l^2} - \frac{Wab}{l}$$

$$\therefore M_B = \frac{Wa^2b}{l^2} \text{ (Hogging)}$$

Substituting in 1

$$M_{AB} + \frac{Wa^2b}{l^2} = \frac{Wab}{l}$$

$$M_{AB} = \frac{Wab}{l} - \frac{Wa^2b}{l^2}$$

$$= \frac{Wab l - Wa^2b}{l^2}$$

$$= \frac{Wab(l-a)}{l^2}$$

$$= \frac{Wab^2}{l^2} \quad (\text{since } l-a = b)$$

$$\therefore M_{AB} = \frac{Wab^2}{l^2} \text{ (Hogging)}$$

**Results:**

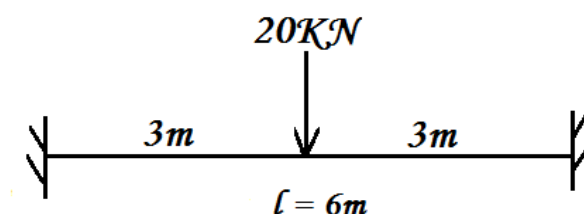
Fixed end moments

$$M_{AB} = \frac{Wab^2}{l^2} \text{ (hogging).}$$

$$M_{BA} = \frac{Wa^2b}{l^2} \text{ (hogging).}$$

**Illustrative examples for symmetrical loading:**

(1). A Fixed beam of span 6m carries a central point load of 20kN. Analyse the beam for shear, BM and draw the SFD & BMD.

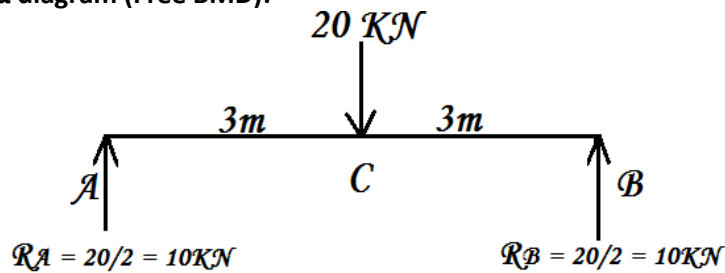
**Given data:****To find:**

To analyse the beam for shear & BM

**Solution:**

Consider  $M_{AB}$  &  $M_{BA}$  as redundant reactions. (Excess unknowns)

Step 1:  $\mu$  diagram (Free BMD):



$$R_A = R_B = \frac{\text{total load}}{2}$$

$$= 20 / 2 = 10 \text{ kN}$$

$M_{\mu_A} = 0$  (simple support)

$$M_{\mu_C} = + R_A \times 3 - 20 \times 0 = + 10 \times 3$$

$$= + 30 \text{ kNm}$$

$M_{\mu_B} = 0$  (simple support)

Complete  $\mu$  diagram.

Step 2: Fixed end moments: ( $M_{AB}$  &  $M_{BA}$ )

By symmetry  $M_{AB} = M_{BA} = M$

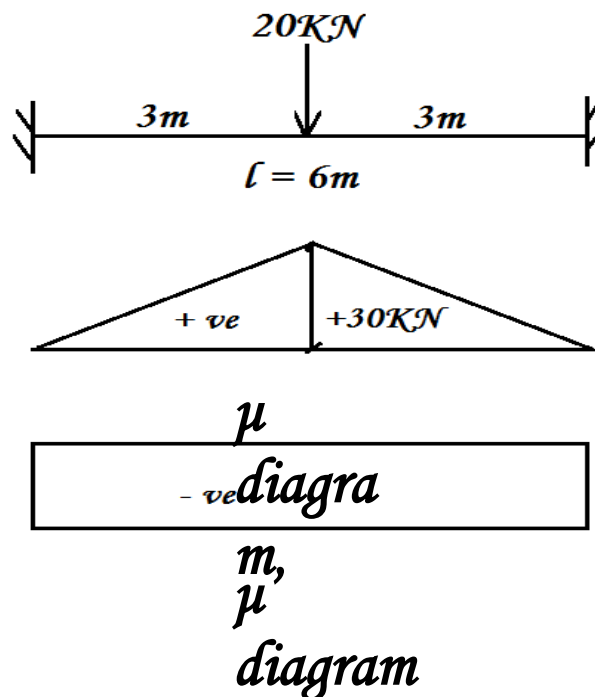
For symmetrically loaded fixed beam

Area of  $\mu'$  diagram = Area of  $\mu$  diagram

$$M \times 6 = \frac{1}{2} \times 6 \times 30$$

$$= 90 \text{ kNm.}$$

$$M = 15 \text{ kNm}$$



Step 3: Vertical reactions ( $R_A$ ,  $R_B$ ):

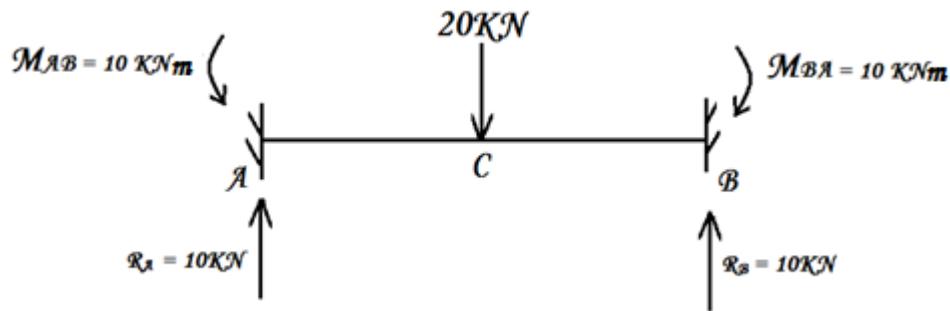
By symmetry,

$$R_A = R_B = \frac{\text{total load}}{2}$$

$$= 20 / 2 = 10 \text{ kN ( )}$$



**Step 4: Shear force ( $V_x$ ):**



$$V_A \quad (L)$$

$$= 0$$

$$V_A (R) = + 10 \text{ kN}$$

$$V_C (L) = V_A (R) = +10 \text{ kN}$$

$$V_C (R) = V_C (L) - 20 = +10 - 20 \\ = -10 \text{ kN}$$

$$V_B (L) = V_C (R) = - 10 \text{ kN}$$

$$V_B (R) = 0$$

Where L = left side, R = right side

Complete SFD.

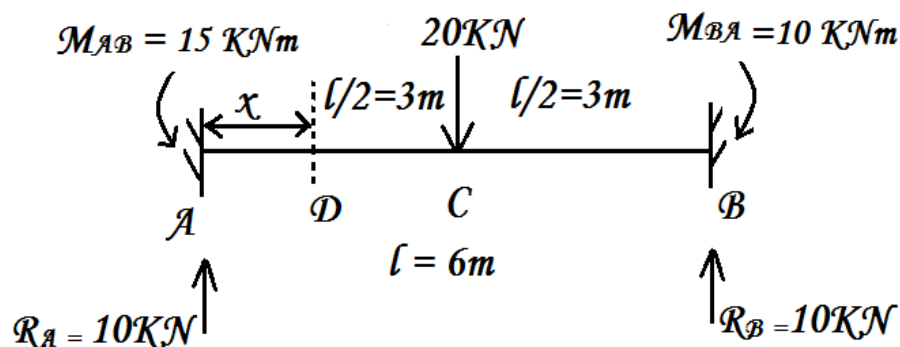
**Step 5: Bending moment ( $M_x$ ):**

$$M_A = - M_{AB} (=M) = - 15 \text{ kNm}$$

$$M_C = - M + R_A \times 3 = - 15 + (10 \times 3) \\ = + 15 \text{ kNm}$$

$$M_B = - M_{BA} (=M) = - 15 \text{ kNm}$$

Points of contra – flexure:



Since the BM changes its sign from –ve to +ve from A to C and from +ve to –ve from C to B.

∴ There are two points of contra – flexure.

Let one of the point of contra – flexure be D at a distance X from A.

$$\therefore M_D = 0$$

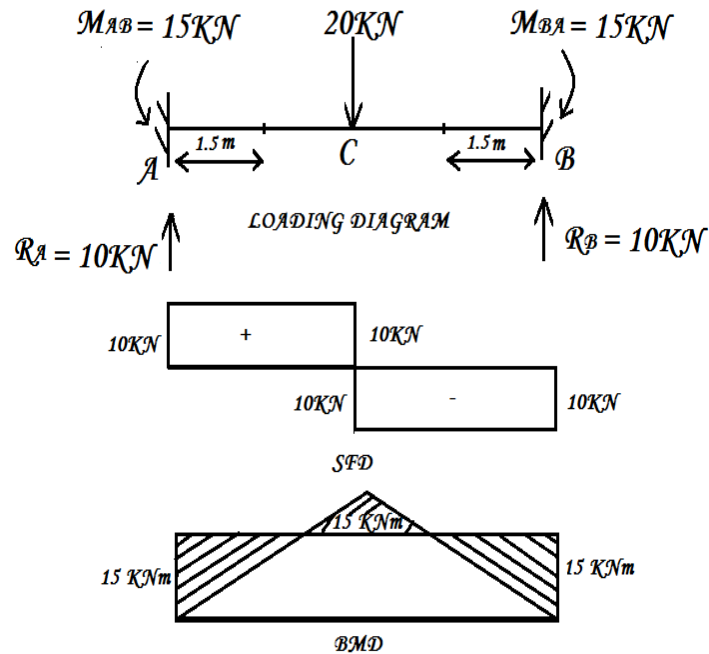
$$+ R_A \times x - M_{AB} = 0$$

$$+ 10 \times x - 15 = 0$$

$$\therefore X = 1.5 \text{ m from A}$$

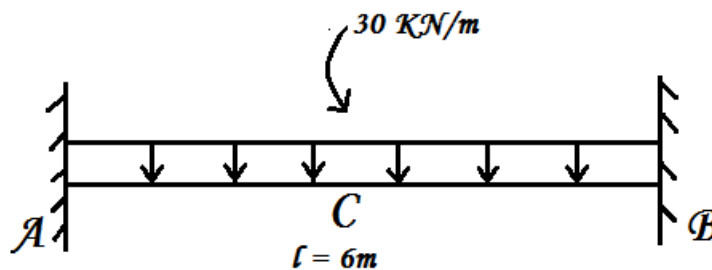
By symmetry another point of contra – flexure at 1.5m from B.





(2). A fixed beam of span 6m carries a UDL of 30 kN/m throughout the span. Analyse the beam for shear, BM and draw SFD & BMD.

**Given data:**



### *Loading Diagram*

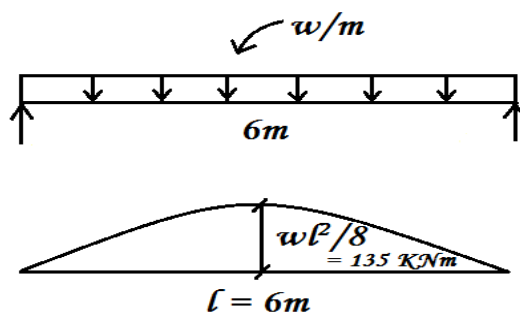
**To find:**

To analyse beam for shear, BM and draw SFD & BMD.

**Solution:**

The given fixed beam is a symmetrically loaded fixed beam.

**Step 1:  $\mu$  diagram (free BMD):**



*$\mu$  diagram*

$\mu$  diagram is a second degree parabola with max value as  $Wl^2/8$  at mid span and with ends 0.

$$\begin{aligned}\text{Area of } \mu \text{ diagram} &= \frac{2}{3} \times 6 \times 135 \\ &= 540 \text{ kNm}^2\end{aligned}$$

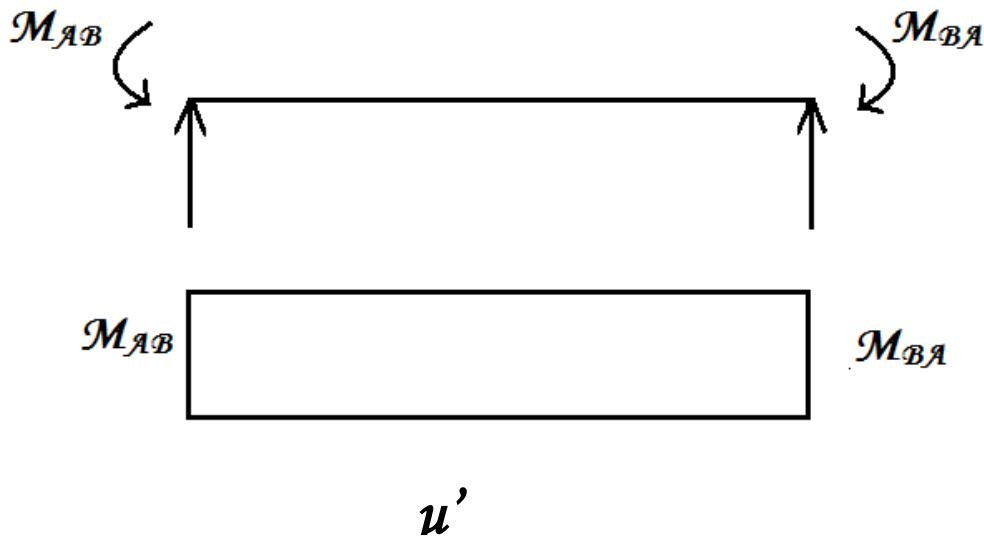
**Step 2:  $\mu'$  diagram (fixed BMD):**

Since the loading is symmetrical.

$$M_{AB} = M_{BA}$$

The  $\mu'$  diagram is a rectangle.

$$\begin{aligned}\text{Area of } \mu' \text{ diagram} &= M_{AB} \times l = M_{AB} \times 6 \\ &= 6 M_{AB}.\end{aligned}$$



**Step 3: Redundant reactions ( $M_{AB}$  &  $M_{BA}$ ):**

Consider the fixed end moments  $M_{AB}$  &  $M_{BA}$  as redundant reactions (excess unknown)

For symmetrically loaded fixed beam

$$\text{Area of } \mu' \text{ diagram} = \text{Area of } \mu \text{ diagram}$$

$$6 M_{AB} = 540$$

$$M_{AB} = 540 / 6 = 90 \text{ kNm.}$$

$$\text{By symmetry } M_{AB} = M_{BA}$$

$$\therefore M_{AB} = M_{BA} = 90 \text{ kNm (hogging).}$$

**Step 4: Vertical reactions ( $R_A$  &  $R_B$ ):**

By symmetry

$$\begin{aligned}R_A = R_B &= \frac{\text{total load}}{2} \\ &= \frac{30 \times 6}{2} \\ &= 90 \text{ kN.}\end{aligned}$$

**Step 5: Shear force ( $V_x$ ):**

$$V_A = + R_A = + 90 \text{ kN}$$

$$V_C = + R_A - wl = + 90 - (30 \times 3) = 0$$

$$V_B = - R_B = - 90 \text{ kN}$$

Complete SFD.

**Step 6: Bending moment ( $M_x$ ):**

$$M_A = - M_{AB} = - 150 \text{ kNm}$$

$$\begin{aligned}M_C &= + R_A \times (l/2) - M_{AB} - w \times (l/2) \times (l/4) \\ &= + 90 \times (6/2) - 90 - [30 \times (6/2) \times (6/4)]\end{aligned}$$

$$= +270 - 90 - 135 = 45 \text{ kNm}$$

$$M_B = -M_{BA} = -150 \text{ kNm}$$

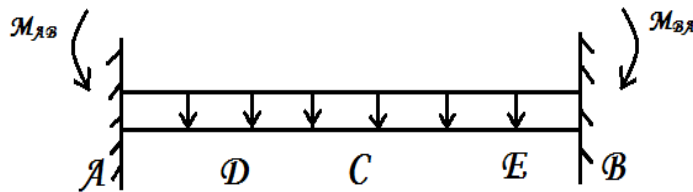
Point of contra – flexure:

For this standard case, the point of contra – flexure D & E are  $0.211 l$  from the nearby support.

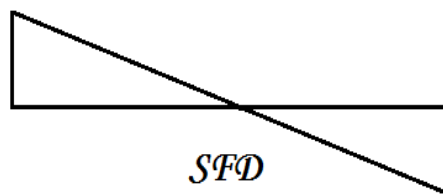
$0.211 \times 6 = 1.266 \text{ m}$  from either support.

Complete BMD.

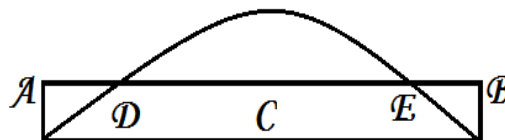
**SFD & BMD:**



*Fixed beam with u.d.l*



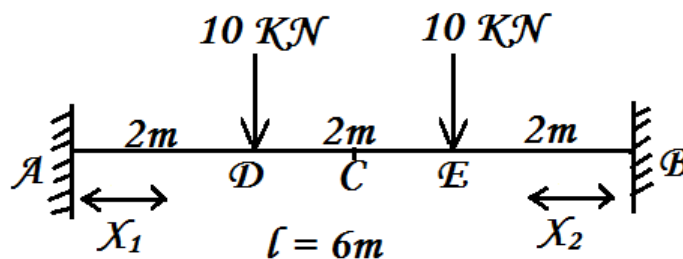
*SFD*



*BMD*

(3). A fixed beam of span 6m carries a point loads of 10kN at one – third points. Analyse the beam for shear, BM and draw the SFD & BMD.

**Given data:**

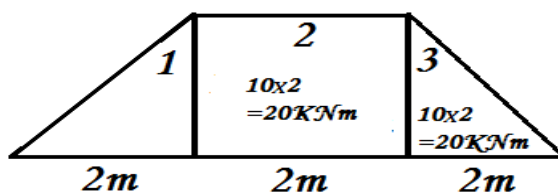


**To find:**

To analyse the beam for shear, BM and draw the SFD & BMD.

**Solution:**

**Step 1:  $\mu$  diagram**



$$\begin{aligned}
 a_1 &= \frac{1}{2}bh \\
 &= \frac{1}{2} \times 2 \times 20 \\
 &= 20 \text{ kNm}^2 \\
 a_2 &= l \times b \\
 &= 20 \times 2 = 40 \text{ kNm}^2 \\
 a_3 &= a_1 = 20 \text{ kNm}^2
 \end{aligned}$$

Area of  $\mu$  diagram =  $a_1 + a_2 + a_3 = 80 \text{ kNm}^2$

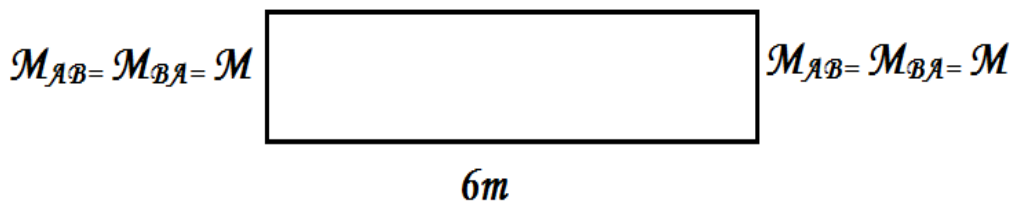
For concentrated loads (point loads) at 1/3rd points, the  $\mu$  diagram is a trapezium.

### Step 2: $\mu'$ diagram

By symmetry

$$M_{AB} = M_{BA} = M$$

∴ The  $\mu'$  diagram is a rectangle.



Step 3: Redundant reactions ( $M_{AB}$  &  $M_{BA}$ )

Consider  $M_{AB}$  &  $M_{BA}$  as redundants (excess unknowns)

But  $M_{AB} = M_{BA} = M$  (By symmetry)

There is only one redundant reaction.

∴ By applying Mohr's theorem I,

Area of  $\mu'$  diagram = Area of  $\mu$  diagram

$$6M = 80$$

$$M = 80/6 = 13.33 \text{ kNm}$$

∴  $M_{AB} = M_{BA} = 13.33 \text{ kNm}$

Step 4: Vertical reactions ( $R_A$ ,  $R_B$ )

$$\begin{aligned}
 R_A = R_B &= \frac{\text{total load}}{2} \\
 &= \frac{10+10}{2} = 10 \text{ kN}
 \end{aligned}$$

Step 5: Shear force ( $V_x$ )

$$V_A(L) = 0$$

$$V_A(R) = +R_A = +10 \text{ kN}$$

$$V_D(L) = V_A(R) = +10 \text{ kN}$$

$$\begin{aligned}
 V_D(R) &= V_D(L) - 10 \\
 &= 10 - 10 = 0
 \end{aligned}$$

$$V_E(L) = V_D(R) = 0$$

$$\begin{aligned}
 V_E(R) &= V_E(L) - 10 \\
 &= 0 - 10 = -10 \text{ kN}
 \end{aligned}$$

$$V_B(L) = V_E(R) = -10 \text{ kN}$$

$$V_B(R) = 0$$

Where L = Left side, R = Right side

Complete SFD.

Step 6: Bending moment ( $M_x$ )

$$M_A = -M_{AB} = -13.33 \text{ kNm}$$

$$\begin{aligned}
 M_B &= +R_A \times 2 - M_{AB} \\
 &= +10 \times 2 - 13.33 = +6.67 \text{ kNm}
 \end{aligned}$$

$$\begin{aligned}
 M_C &= +R_A \times 3 - M_{AB} - 10 \times 1 \\
 &= +10 \times 3 - 13.33 - 10 = -6.67 \text{ kNm} \\
 M_E &= M_D = +6.67 \text{ kNm} \\
 M_B &= -M_{BA} = -13.33 \text{ kNm}
 \end{aligned}$$

#### Points of contra – flexure:

Since the BM changes its sign –ve to +ve from A to D and +ve to –ve from E to B. There are two points of contra – flexure one in section AD and another in section EB.

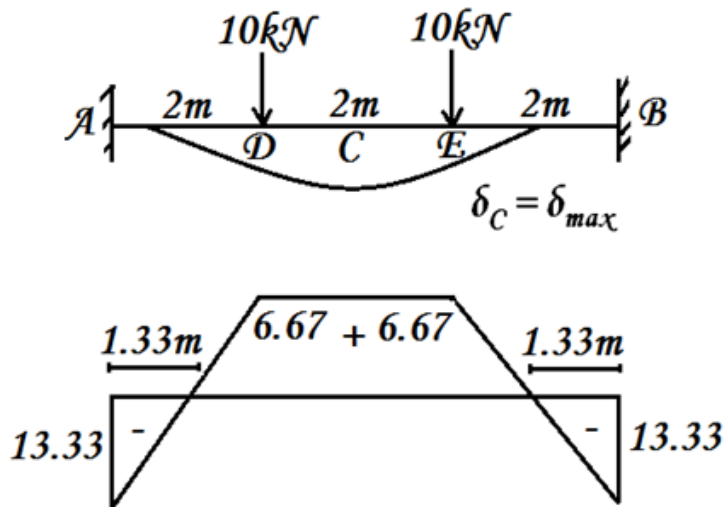
By symmetry both will be equal distance from the nearby support.

Let the BM be 0 at a distance X from A.

$$\begin{aligned}
 M_X &= M_D = 0 \\
 +R_A \times x - M_{AB} &= 0 \\
 +10 \times x - 13.33 &= 0 \\
 10x &= 13.33 \\
 x &= 1.33 \text{ m}
 \end{aligned}$$

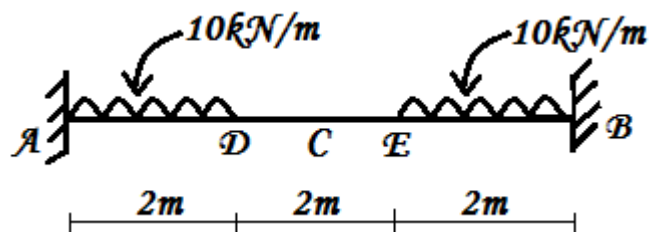
By symmetry,

$$\begin{aligned}
 x_1 &= 1.33 \text{ m from A} \\
 x_2 &= 1.33 \text{ m from B}
 \end{aligned}$$



(4). A fixed beam of span 6m carries an u.d.l of 10kN/m run over a length of 1/3<sup>rd</sup> span from both the supports. Calculate the fixed end moments and draw SFD & BMD.

#### Given data:



#### Solution:

##### Step 1: Redundant reaction ( $M_{AB}$ , $M_{BA}$ )

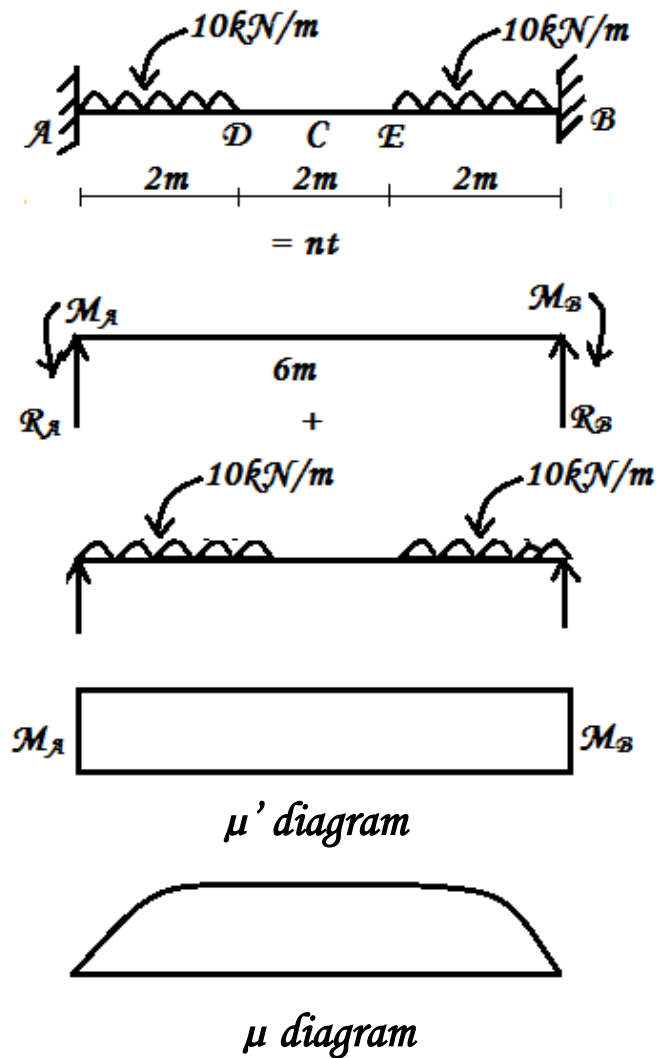
The given loading is symmetrical

$$M_{AB} = M_{BA}$$

Using  $\Theta_B = 0$ ,

Area of  $\mu$  diagram = Area of  $\mu'$  diagram

$\mu'$  diagram:



$$\mu_A = 0 \text{ kNm}$$

$$\mu_D = 20 \times 2 - (10 \times 2 \times 2/2) = 20 \text{ kNm}$$

$$\mu_C = 20 \times 3 - 10 \times 2 \times (2/2 + 1) = 20 \text{ kNm}$$

$$\mu_E = 20 \times 4 - 10 \times 2 \times (2/2 + 2) = 20 \text{ kNm}$$

$$\mu_B = 20 \times 6 - 10 \times 2 \times (2/2 + 2) - 10 \times 2 \times 2/2 = 0 \text{ kNm}$$

Complete  $\mu$  diagram.3

Area of  $\mu'$  diagram = Area of  $\mu$  diagram

$$l \times b = 2 \left( \frac{2}{3} \times bh \right) + (l \times b)$$

$$M_{AB} \times 6 = 2 \left( \frac{2}{3} \times 2 \times 20 \right) + (2 \times 20)$$

$$6M_{AB} = 93.33$$

$$M_{AB} = 15.56 \text{ kNm}$$

$$M_{AB} = M_{BA}$$

$$M_{BA} = 15.56 \text{ kNm}$$

### Step 2: Vertical reactions ( $R_A$ & $R_B$ )

$$R_A = R_B \text{ . So,}$$

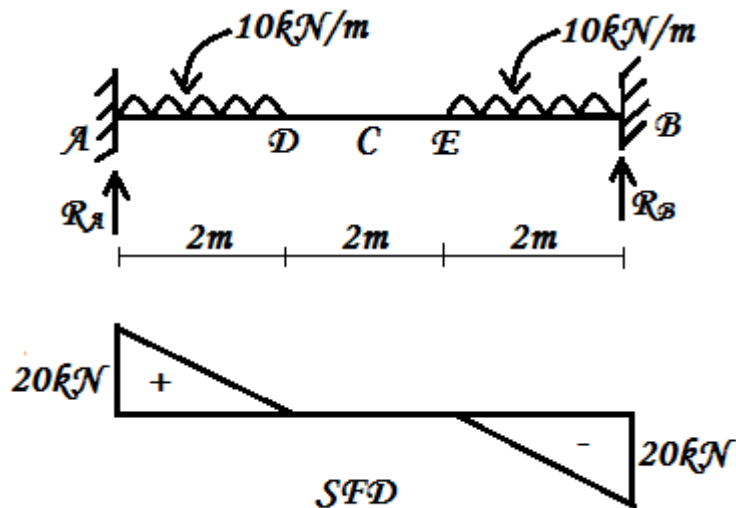
$$R_A = \frac{\text{total loads}}{2}$$

$$= \frac{(20 \times 2) + (10 \times 2)}{2} = 40/2$$

$$R_A = 20 \text{ kN}$$

$$R_A = R_B = 20\text{kN}$$

### Step 3: Shear force ( $V_x$ )



$$V_A(L) = 0\text{kN}$$

$$V_A(R) = +R_A = +20\text{kN}$$

$$V_D = +R_A - (10 \times 2) = +20 - 20 = 0\text{kN}$$

$$V_C = 0\text{kN}$$

$$V_E = 0\text{kN}$$

$$V_B(L) = R_A - (10 \times 2) - (10 \times 2) = 20 - 20 - 20 = -20\text{kN}$$

$$V_B(R) = 0\text{kN}$$

#### Point of zero shear:

Shear Force is 0 at D, C, and E.

$$V_D = V_C = V_E = 0\text{kN}.$$

Complete SFD.

### Step 4: Bending moment ( $M_x$ )

$$M_A = -M_{AB} = -15.56\text{kNm}$$

$$M_D = R_A \times 2 - M_{AB} - 10 \times 2 \times 2/2 = 20 \times 2 - 15.56 - 20 = 4.44\text{kNm}$$

$$M_C = R_A \times 3 - M_{AB} - 10 \times 2 \times (2/2 + 1) = 20 \times 3 - 15.56 - 40 = 4.44\text{kNm}$$

$$M_E = R_A \times 4 - M_{AB} - 10 \times 2 \times (2/2 + 2) = 20 \times 4 - 15.56 - 60 = 4.44\text{kNm}$$

$$M_B = R_A \times 6 - M_{AB} - 10 \times 2 \times (2/2 + 4) - (10 \times 2 \times 2/2) = 20 \times 6 - 15.56 - 60 - 20 = -15.56\text{kNm}$$

#### Point of contra - flexure:

$$M_F = R_A \times x - 15.56 - 10 \times x \times x/2 = 0$$

$$20x - 15.56 - 5x^2 = 0$$

$$5x^2 - 20x + 15.56 = 0$$

$$= \frac{-b \pm \sqrt{b^2 - 4ac}}{2a}$$

$$= \frac{+20 \pm \sqrt{(-20)^2 - 4 \times 5 \times 15.56}}{2 \times 5}$$

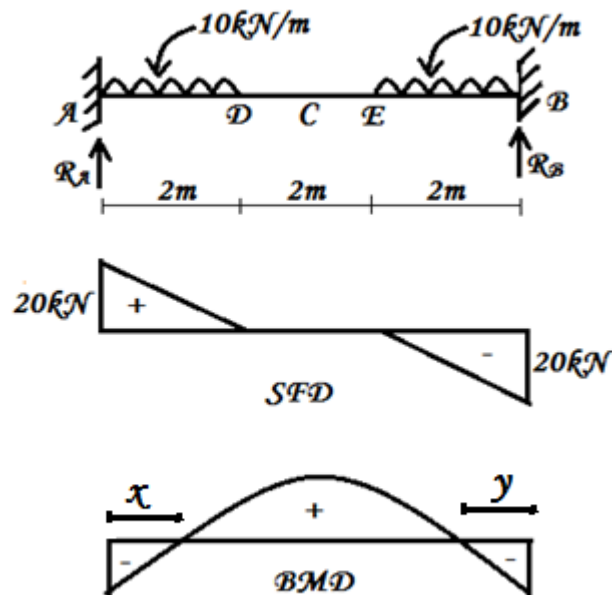
$$= \frac{+20 \pm 9.42}{10}$$

$$a = +1.06\text{m}, b = +2.94\text{m}$$

Take a distance of 1.06m as x.

$$x = y \text{ so, } y = 1.06\text{m}$$

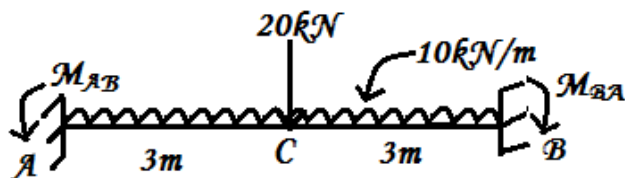
Complete BMD.



(Alternative Method using Formula)

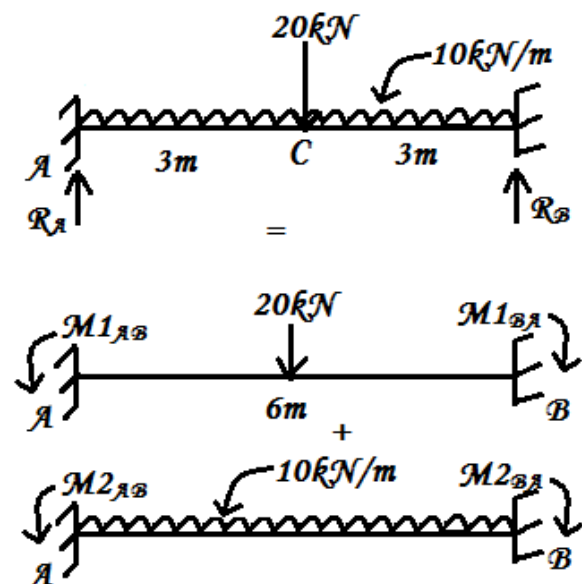
(5). A fixed beam of span 6m carries an u.d.l of 10kN/m throughout the span. It also carries a central point load of 20kN. Calculate the fixed end moments & draw SFD & BMD. Locate the point of contra flexure.

**Given data:**



**Solution:**

**Step 1: Fixed end moments**





$$\begin{aligned}
 M_{AB} &= M1_{AB} + M2_{AB} \\
 &= \frac{Wl}{8} + \frac{wl^2}{12} \\
 &= \frac{20 \times 6}{8} + \frac{20 \times 6^2}{12} \\
 &= 15 + 30 = 45 \text{ kNm}
 \end{aligned}$$

Loading is symmetrical.

$$M_{AB} = M_{BA} = 45 \text{ kNm (Hogging).}$$

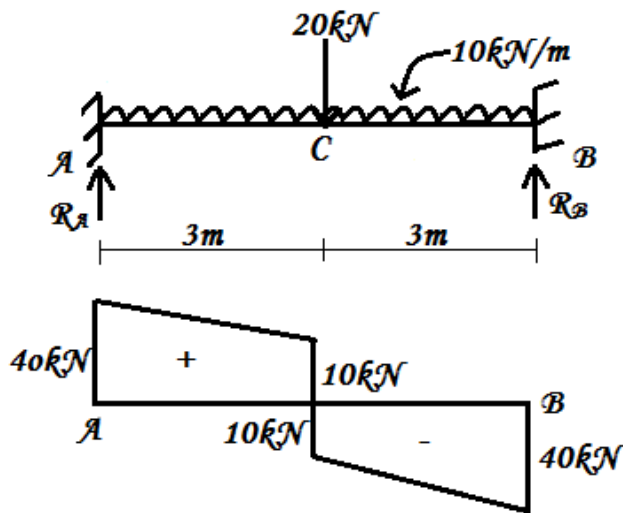
### **Step 2: Vertical reaction ( $R_A$ & $R_B$ )**

Loading is symmetrical

$$\begin{aligned}
 R_A &= \frac{\text{Total loads}}{2} \\
 &= \frac{20 + (10 \times 6)}{2} = 40 \text{ kN}
 \end{aligned}$$

$$R_A = R_B = 40 \text{ kN}$$

### **Step 3: Shear force**



$$V_A(L) = 0 \text{ kN}$$

$$V_A(R) = 40 \text{ kN}$$

$$V_C(L) = 40 - (10 \times 3) = 10 \text{ kN}$$

$$V_C(R) = 40 - (10 \times 3) - 20 = -10 \text{ kN}$$

$$V_B(L) = 40 - (10 \times 6) - 20 = -40 \text{ kN}$$

$$V_B(R) = 0 \text{ kN}$$

#### **Point of zero shear:**

S.F values suddenly changes exactly at C.

Point of zero shear is at C.

Complete SFD.

### **Step 4: Bending moment**

$$M_A = -45 \text{ kNm}$$

$$M_C = -45 + (40 \times 3) - (10 \times 3 \times 3/2) = +30 \text{ kNm}$$

$$M_B = -45 + (40 \times 6) - (10 \times 6 \times 6/2) - 20 \times 3 = -45 \text{ kNm}$$

Point of zero shear at C.

$$M_{\max} = M_C = 30 \text{ kNm}$$

### Point of contra – flexure:

Since BM values change from –ve to +ve in the portion of point of contra – flexure is in the portion AC & BM values changes from +ve to –ve is in the portion CB, another point of contra – flexure is in the portion CB.

Let the BM be 0 at D at a distance x.

$$\begin{aligned}M_D &= 0 \\-45 + (40 \times x) - 10 \times x \times x / 2 &= 0 \\5x^2 - 40x + 45 &= 0 \\&= \frac{-b \pm \sqrt{b^2 - 4ac}}{2a} \\&= \frac{+40 \pm \sqrt{(-40)^2 - 4 \times 5 \times 45}}{2 \times 5} \\&= \frac{40 \pm \sqrt{1600 - 900}}{10} \\&= 6.65\text{m} \text{ \& } 1.35\text{m}\end{aligned}$$

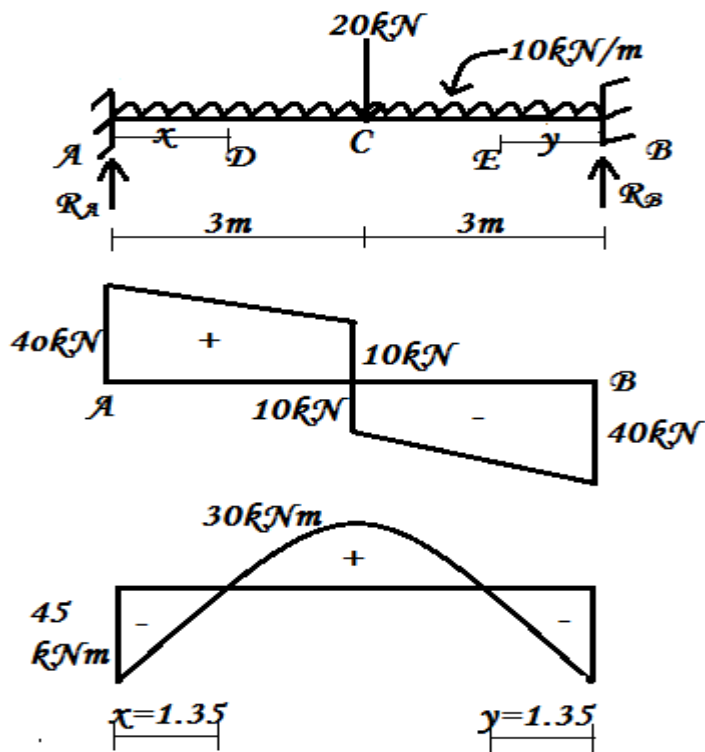
The points of contra flexure are x= 1.35m from A and also y = 1.35m from B.

$$x = y, D = E$$

∴ acceptable value 1.35m from A.

Since the loading is symmetrical.

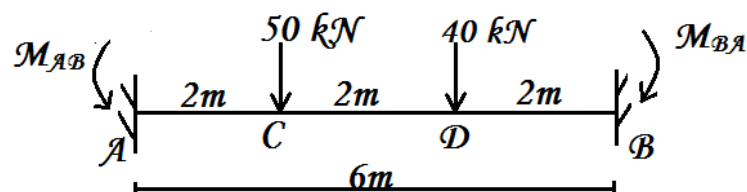
$$Y = 1.35 \text{ from B}$$



### Illustrative example for unsymmetrical loading

(1). A fixed beam of span 6m carries a point load of 50kN at a distance of 2m from the left end and another point load of 40kN at a distance of 2m from the right end. Calculate the fixed end moments and draw SFD & BMD. Locate the point of contra – flexure.

Given data:



To find:

1. Fixed end moments ( $M_{AB}$ ,  $M_{BA}$ )
2. Draw SFD & BMD
3. Locate point of contra – flexure

Solution:

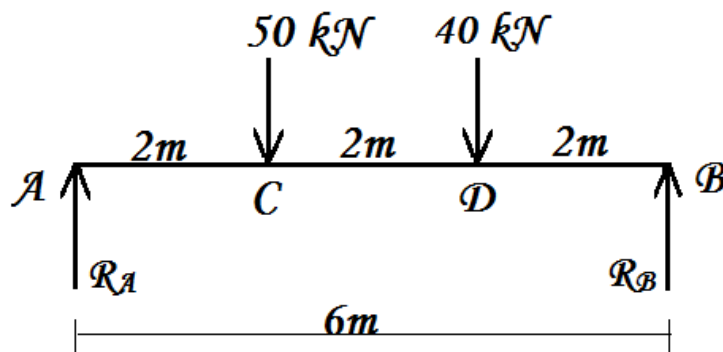
Though symmetry exists with respect to type of load and position, the values are not same.

This is case of unsymmetrical loading.

$$\therefore M_{AB} \neq M_{BA}$$

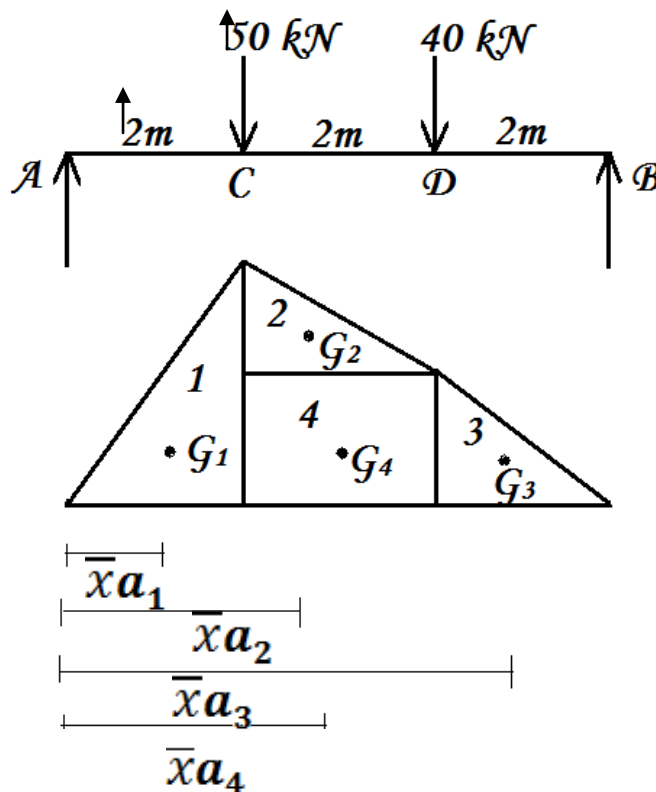
**Step 1: (1)  $\mu$  diagram**

Considering the beam with loading as simply supported  $\mu$  diagram



$$R_A + R_B = 50 + 40 \\ = 90\text{kN}$$

Taking moments about A,



*$\mu$  diagram*

$M_{\mu_A} = 0$  (simple support)

$$M_{\mu_C} = + R_A \times 2 = +46.67 \times 2 \\ = +93.34 \text{ kNm}$$

$$M_{\mu_D} = + R_A \times 4 - (50 \times 2) = +46.67 \times 4 - 100 \\ = +86.68 \text{ kNm}$$

$M_{\mu_B} = 0$

Complete  $\mu$  diagram

**(2) Centroidal distances:**

$$\bar{x}_{a_1} = \frac{2}{3} \times 2 = 4/3 = 1.33 \text{ m from A}$$

$$\bar{x}_{a_2} = 2 + \frac{1}{3} \times 2 = 2.66 \text{ m from A}$$

$$\bar{x}_{a_3} = 2 + 2 + \frac{1}{3} \times 2 = 4.66 \text{ m from A}$$

$$\bar{x}_{a_4} = 2 + \frac{2}{2} = 3 \text{ m from A}$$

**(3). Area of  $\mu$  diagram**

Area of (1)  $a_1 = \frac{1}{2}bh$

$$= \frac{1}{2} \times 2 \times 93.34 \\ = 93.34 \text{ kNm}^2$$

Area of (2)  $a_2 = \frac{1}{2}bh$

$$= \frac{1}{2} \times 2 \times (93.34 - 86.68) \\ = \frac{1}{2} \times 2 \times 6.66 = 6.66 \text{ kNm}^2$$

Area of (3)  $a_3 = \frac{1}{2}bh$

$$= \frac{1}{2} \times 2 \times 86.68 = 86.68 \text{ kNm}^2$$

Area of (4)  $a_4 = l \times b$

$$= 2 \times 86.68 = 173.36 \text{ kNm}^2$$

$\therefore$  Area of  $\mu$  diagram = Area of (1) + Area of (2) + Area of (3) + Area of (4)

$$= 93.34 + 6.66 + 86.68 + 173.36 \\ = 360.04 \text{ kNm}^2$$

**(4). Moment of area of  $\mu$  diagram about A:**

$$= \sum a_i \cdot \bar{x}_i$$

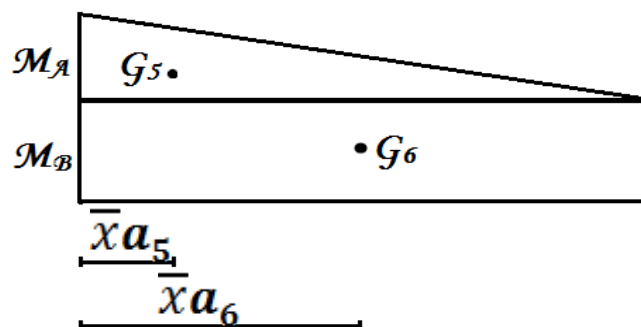
$$= a_1 \cdot \bar{x}_{a_1} + a_2 \cdot \bar{x}_{a_2} + a_3 \cdot \bar{x}_{a_3} + a_4 \cdot \bar{x}_{a_4}$$

$$= (93.34 \times 1.33) + (6.66 \times 2.66) + (86.68 \times 4.66) + \\ (173.36 \times 3)$$

$$= 124.14 + 17.72 + 403.93 + 520.08$$

$$= 1065.87 \text{ kNm}^3$$

**Step 2:  $\mu'$  diagram**



Since the loading is unsymmetrical  $\mu'$  diagram is a trapezium. Assuming  $M_A > M_B$ .

**Centroidal distances:**

$$\bar{x}a_5 = \frac{1}{3} \times 6 = 2\text{m from A}$$

$$\bar{x}a_6 = l/2 = 6/2 = 3\text{ from A}$$

Area of  $\mu'$  diagram:

$$= \text{Area of } (5)a_5 + \text{Area of } (6)a_6$$

Area of (5)  $a_5 = \frac{1}{2}bh$

$$= \frac{1}{2} \times 6 \times (M_A - M_B)$$

$$= 3 \times (M_A - M_B)$$

$$= 3M_A - 3M_B$$

Area of (6)  $a_6 = l \times b$

$$= 6 \times M_B$$

$$= 6M_B$$

$\therefore$  Area of  $\mu'$  diagram =  $a_5 + a_6$

$$= 3M_A - 3M_B + 6M_B$$

$$= 3M_A + 3M_B$$

Moment of area of  $\mu'$  diagram about A:

$$= a_5 \cdot \bar{x}a_5 + a_6 \cdot \bar{x}a_6$$

$$a_5 \cdot \bar{x}a_5 = 3(M_A - M_B) \times 2 = 6(M_A - M_B)$$

$$a_6 \cdot \bar{x}a_6 = 6M_B \times 3 = 18M_B$$

$$a_5 \cdot \bar{x}a_5 + a_6 \cdot \bar{x}a_6 = 6 \times (M_A - M_B) + 18M_B$$

$$= 6M_A - 6M_B + 18M_B$$

$$= 6M_A + 12M_B$$

### Step 3: Fixed end moments

Since the loading is unsymmetrical  $M_{AB} \neq M_{BA}$

Applying Mohr's theorem I

Area of  $\mu'$  diagram = Area of  $\mu$  diagram

$$3M_A + 3M_B = 360.64$$

$$M_A + M_B = 120.21 \quad - (1)$$

Applying Mohr's theorem II

Moment of area of  $\mu'$  diagram about A = Moment of area of  $\mu$  diagram about A

$$6M_A + 12M_B = 1065.67$$

$$6(M_A + 2M_B) = 1065.67$$

$$M_A + 2M_B = 177.61 \quad - (2)$$

$$M_A + M_B = 120.21 \quad - (1)$$

Subtracting (1) from (2)

$$M_B = 177.61 - 120.21$$

$$\therefore M_B = 57.4\text{kNm (hogging)}$$

$$M_A = 62.81\text{kNm (hogging)}$$

### Step 4: Vertical reactions ( $R_A$ , $R_B$ )

Already calculated in step 1.

$$\therefore R_A = 46.67\text{kN} \quad R_B = 43.33\text{kN}$$

### Step 5: Shear force ( $V_x$ )

$$V_A (L) = 0$$

$$V_A (R) = + R_A = + 46.67 \text{ kN}$$

$$V_C (L) = + V_A (R) = + 46.67 \text{ kN}$$

$$V_C (R) = + R_A - 50 = + 46.67 - 50 \\ = - 3.33 \text{ kN}$$

$$V_D (L) = V_C (R) = - 3.33 \text{ kN}$$

$$V_D (R) = + R_A - 50 - 40 \\ = + 46.67 - 90 = - 43.33 \text{ kN}$$

$$V_B (L) = V_D (R) = - 43.33 \text{ kN}$$

$$V_B (R) = 0$$

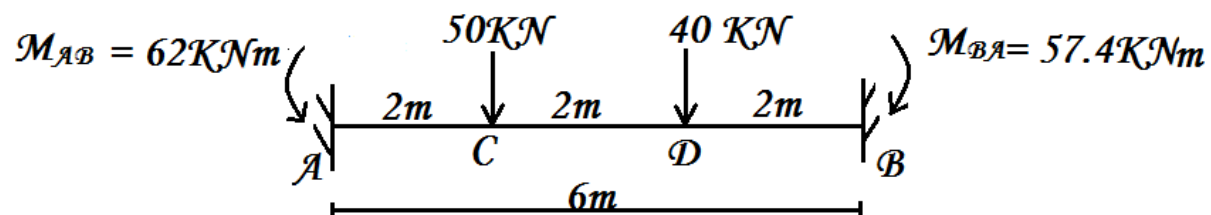
Since S.F changes its sign exactly at C,  $+M_{\max}$  occurs at C.

### Step 6: Bending moment ( $M_x$ )

$$M_A = - M_{AB}$$

--

62kNm



$$M_C = - M_{AB} + R_A \times 2$$

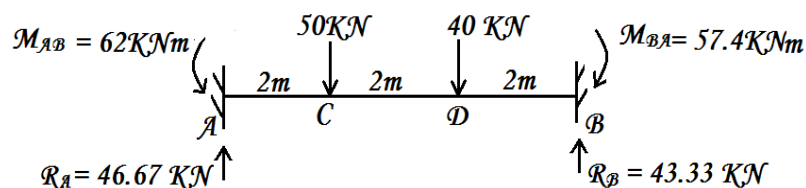
$$= - 62 + 46.67 \times 2 = + 31.34 \text{ kNm}$$

$$M_D = - M_{AB} + R_A \times 4 - 50 \times 2$$

$$= - 62 + 46.67 \times 4 - 100 = + 24.68 \text{ kNm}$$

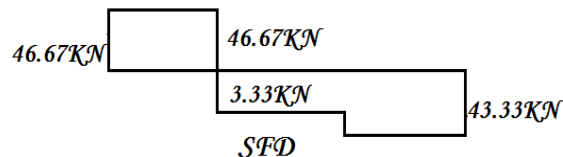
$$M_B = - M_{BA} = - 57.74 \text{ kNm}$$

### Step 7: Summary

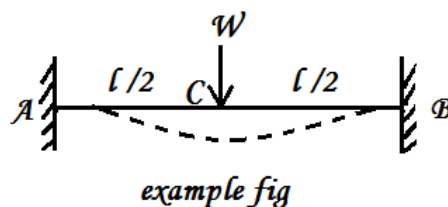
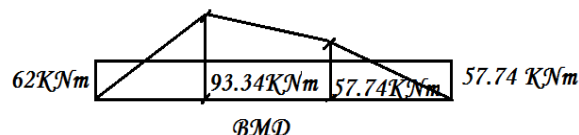


$$\theta_A = 0$$

$$\delta_A = 0$$



$$\delta_C = \delta_{\max}$$



$$\theta_B = 0$$

$$\delta_B = 0$$

Slope and Deflection of symmetrically loaded Fixed beams by Area – moment method

In case of symmetrically loaded fixed beams, the slopes and deflections at the fixed supports are 0.

- ♣ In case of symmetrically loaded fixed beams, the max deflection occurs at mid span (Centre).
- ♣ For finding the maximum deflection, Mohr's theorem II is applied between A & C or B & C.
- ♣ Only half the BMD is considered.

#### WORKED EXAMPLE ON DEFLECTION FOR SYMMETRICALLY LOADED FIXED BEAMS.

- (1) A fixed beam of span 6m carries concentrated load of 10kN at a distance of 2m from the left end and another concentrated load of 10kN at a distance of 2m from the right end. Calculate the max deflection by Area – moment method.

**Given data:**

$$\delta_C = \delta_{\max}$$

**To find:**

The max deflection by Area – moment method

**Solution:**

Mohr's theorem II is applied between the p

**Step 1: Fixed end moments ( $M_{AB} = M_{BA} = M$ )**

For symmetrically loaded fixed beam  $M_{AB} =$

∴ Applying Mohr's theorem I,

Area of  $\mu$  diagram = Area of  $\mu'$  diagram

Area of half  $\mu$  diagram =  $a_1 + a_2$

$$\begin{aligned} a_1 &= \frac{1}{2}bh \\ &= \frac{1}{2} \times 2 \times 20 \\ &= 20 \text{ kNm}^2 \\ a_2 &= l b \\ &= 1 \times 20 \\ &= 20 \text{ kNm}^2 \end{aligned}$$

$$\begin{aligned} \text{Total area of } \mu \text{ diagram} &= 2(20 + 20) \\ &= 80 \text{ kNm}^2 \end{aligned}$$

$$\begin{aligned} \text{Area of } \mu' \text{ diagram (} a_3 \text{)} &= l b \\ &= 6 M \end{aligned}$$

$$\text{Area of } \mu' \text{ diagram} = \text{Area of } \mu \text{ diagram}$$

$$6 M = 80$$

$$M = 80 / 6 = 13.33 \text{ kNm.}$$

**Step 2: Max deflection ( $\delta_{\max}$ ):**

$$\delta_{\max} = \delta_C$$

Applying Mohr's theorem II between A & C

$$\delta_{\max} = \delta_C = \frac{\sum a_{AC} \bar{x}_A}{EI}$$

$$\sum a_C \bar{x}_A = a_1 \cdot \bar{x}_{A1} + a_2 \cdot \bar{x}_{A2} - a_3 \cdot \bar{x}_{A3}$$

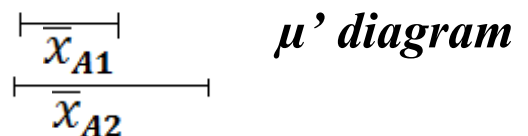
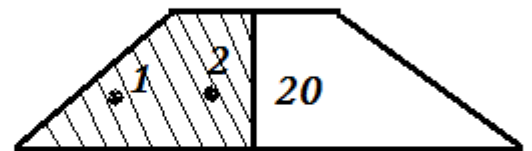
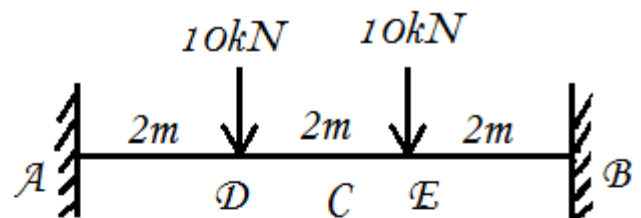
$$\bar{x}_{A1} = \frac{2}{3} \times 2 = 4/3 = 1.33 \text{ m from A}$$

$$\bar{x}_{A2} = 2 + 1/2 = 2.5 \text{ m from A}$$

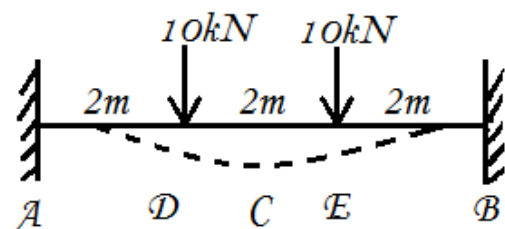
$$\bar{x}_{A3} = 3/2 = 1.5 \text{ m from A}$$

$$\begin{aligned} \therefore \sum a_C \cdot \bar{x}_A &= 20 \times 1.33 + 20 \times 2.5 - 3 \times 13.33 \times 1.5 \\ &= 16.61 \end{aligned}$$

$$\therefore \delta_{\max} = \delta_C = \frac{\sum a_{AC} \bar{x}_A}{EI} = \frac{16.61}{EI} \text{ m.}$$



$$M = 13.33$$



*Deflected shape*

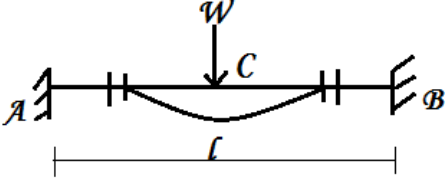
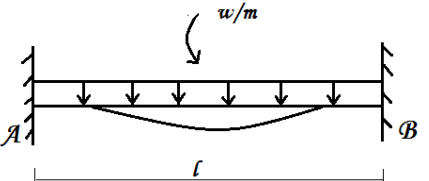
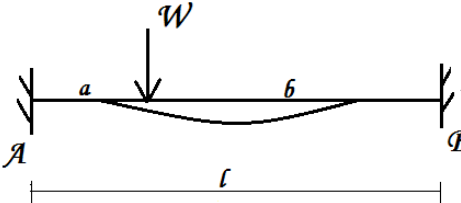
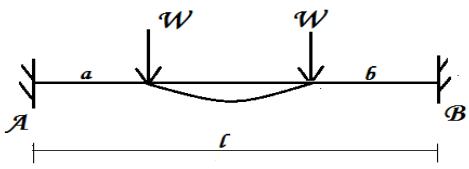
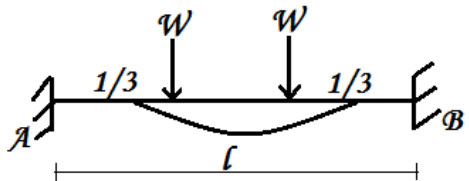
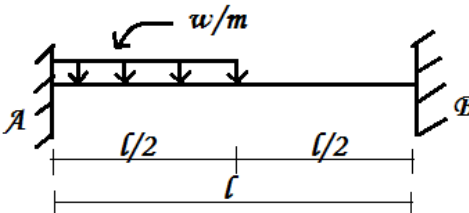
When  $EI$  is in  $\text{kNm}^2$ .

**Result:**

Maximum deflection =  $\frac{16.61}{EI}$  m.

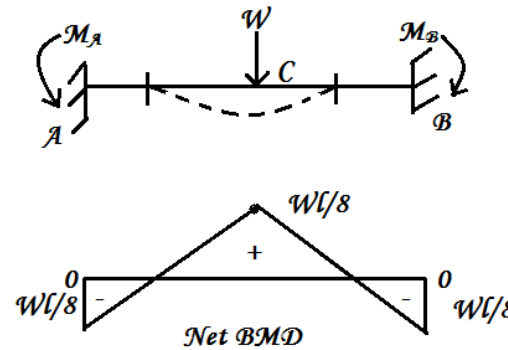
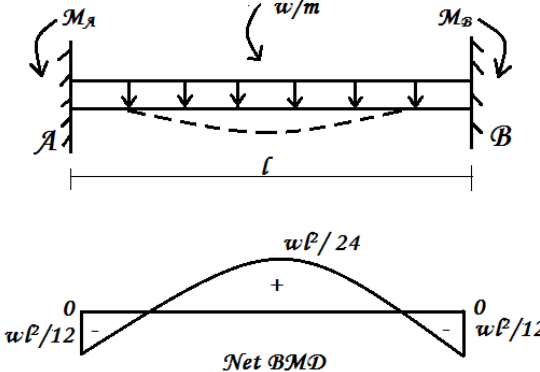
**HIGH LIGHTS**

**1). Fixed beam:**

Sl.no	Beam	$M_A$	$M_B$	$\delta_{\max}$
1.		$-\frac{Wl}{8}$	$-\frac{Wl}{8}$	$\frac{Wl^3}{192 EI}$
2.		$-\frac{wl^2}{12}$	$-\frac{wl^2}{12}$	$\frac{wl^4}{384 EI}$
3.		$-\frac{Wab^2}{l^2}$	$-\frac{Wa^2b}{l^2}$	$\frac{Wa^3b^3}{3 EI l^3}$
4.		$-\frac{Wa(l-a)}{l}$	$-\frac{Wa(l-a)}{l}$	$\frac{Wa^2(3l-4a)}{24 EI}$
5.		$-\frac{2}{9} Wl$	$-\frac{2}{9} Wl$	-
6.		$-\frac{11}{192} wl^2$	$-\frac{5}{192} wl^2$	-



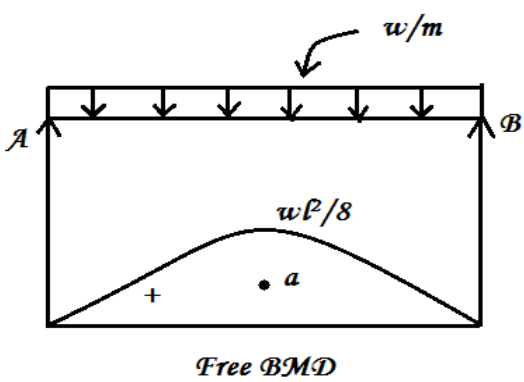
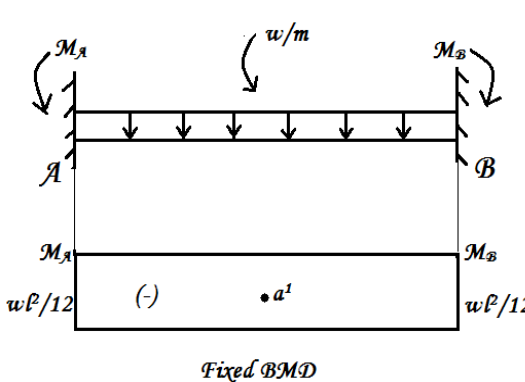
## 2). Net bending moment:

1)		$M_c = +\frac{Wl}{8}$
2)		$M_c = +\frac{wl^2}{24}$

## 3). Simply supported beam and Fixed beam:

Sl.no	Simply supported beam	Fixed beam
1.	Ends are simply supported	Ends are fixed
2.	Ends are free to rotation	Ends are restricted against rotation
3.	Slope at the ends are maximum	Slope at the ends are zero
4.	Moment at the ends are zero	Moment at the end is maximum
5.	Moment at the centre is maximum	Moment at the centre is much reduced
6.	Deflection at the centre is more	Deflection at the centre is less
7.	It is a determinate beam.	It is a indeterminate beam.

#### 4). Free BMD & Fixed BMD:

Sl. no	Free BMD	Fixed BMD
1)	The bending moment diagram drawn considering the beam as a simply supported beam is called free bending moment diagram.	The bending moment diagram drawn only for the fixed end moments are called fixed bending moment diagram.
2)	It is denoted by $\mu$ diagram	It is denoted by $\mu'$ diagram.
3)	It is sagging bending moment	It is hogging bending moment.
		

### QUESTIONS

#### Two mark Questions:

- 1) Draw the bending moment diagram for the fixed beam carrying UDL throughout.
- 2) What is the fixed beam and How is differ from Simply supported beam?
- 3) What will be slope at the fixed end of the fixed beam carrying UDL throughout its length?
- 4) Draw the BMD for a fixed beam subjected to a point load at the mid-span.
- 5) State the maximum deflection value in a fixed beam subjected to a UDL throughout the span.
- 6) State any two advantages of a fixed beam.
- 7) Write any one advantage of a fixed beam compared to simply supported beam.
- 8) Define free BMD.
- 9) Show that the area of free BMD and fixed BMD in a fixed beam are equal.
- 10) Define Free BMD? (unit 2.1)

#### Three mark Questions:

- 1) Calculate fixed end moment and maximum deflection in a fixed beam of span 5m subjected to a central point load of 30kN. Take  $EI = 1.20 \times 10^4 \text{ kNm}^2$ .
- 2) A fixed beam of 6m span subjected to a UDL of  $w/m$  over its full length. The net BM at the centre is 30kN/m. find the value of  $w$ .
- 3) Show that the area of BMD and fixed BMD in a fixed beam are equal.
- 4) State the different method of Analysis of Indeterminate structures.

**Ten mark Questions:**

- 1) A fixed beam of span 9m is subjected to an UDL of 20kN/m over the entire length. It is also carries two concentrated loads of 10kN each at 3m from the ends.
  - i. Determine the values of fixing moments.
  - ii. Sketch the BMD marking the maximum values there in.
- 2) A fixed beam of 12m span carries two point loads of 60kN and 30kN at distance of 3m & 6m from left end support respectively. Draw the SF and BM diagrams, using area moment method.
- 3) A fixed beam of span 8m is subjected to an UDL of 4kN/m over a length of 4m. Symmetrically placed at centre portion. Determine the support moments and draw the BMD.
- 4) A fixed beam of span 'l' carries a non-centric concentrated load of 'w' at distance 'a' from the left support and 'b' from the right support. Derive the expression for the fixed end moments using Mohr's Theorems (Area-moment method).
- 5) A fixed beam of span 5m carries two equal point loads of 20kN each at 2m from each end. Find the fixed end moments. Draw the SFD and BMD.
- 6) A fixed beam of span 6m carries a central point load of 20kN in addition to an UDL of 10kN/m over the entire span. Calculate the fixed end moments. Draw the BMD.
- 7) A fixed beam of span 6m carries a central point load of 30kN and 50kN at 2m and 4m from the left support respectively. Find the support moments and draw SFD and BMD.
- 8) A fixed beam of span 5m carries a central point load of 16kN. Determine the fixing moments and draw SFD and BMD. Find the maximum central deflection.
- 9) A fixed beam of 6m span subjected to a two concentrated load of 30kN at a distance of 2m from both ends. Draw SFD and BMD.
- 10) A fixed beam of span 8m carries an UDL of 45kN/m over the entire span. It also carries two point loads of 150kN each at 2m from the ends. Calculate the support moments. Draw the BMD.

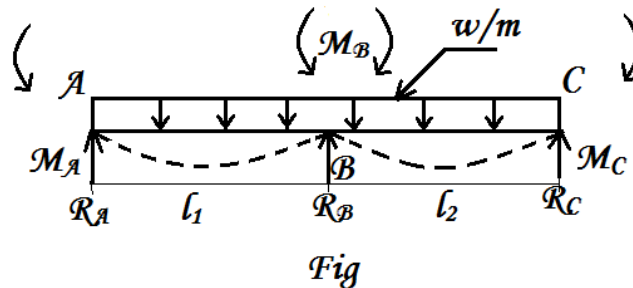
## 2.2. CONTINUOUS BEAMS

### THEOREM OF THREE MOMENTS METHOD

#### Introduction to Continuous beams:

When the beam has more than two supports, it is called as **continuous beam**. Hogging moment will be developed at the intermediate supports. Hence, it is stiffer and stronger than other beams.

It is statically indeterminate beam. The slope and deflection are less. It can carry more loads than other type of beams. Continuous beams are economical.



#### Degree of indeterminacy of continuous beam:

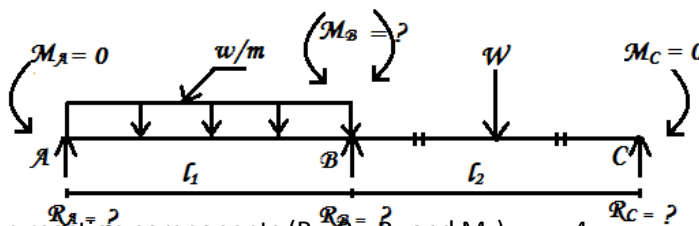
The difference between number of known reaction components and number of known static equation is called Degree of indeterminacy.

i.e. D.I. = (No of known reaction components – No of known static equation)

The degree of indeterminacy is depend upon the end conditions, no of spans and type of supports as given below.

#### a. Two span continuous beam:

##### 1. Continuous beam with both end simply supported:

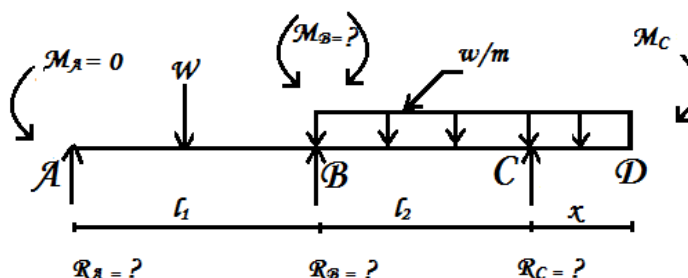


No of unknown reaction components ( $R_A, R_B, R_C$  and  $M_B$ ) = 4

No of available static equilibrium Equations ( $\sum V = 0, \sum M = 0$ ) = 2

Degree of indeterminacy =  $(4 - 2) = 2$

##### 2. Continuous beam with one end simply supported and other end with overhanging:

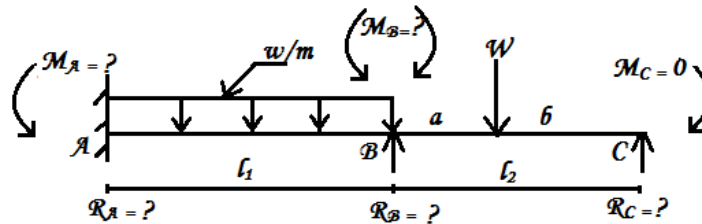


No. of unknown reaction components ( $R_A, R_B, R_C$  &  $M_B$ ) = 4

No. of available static equilibrium eqns ( $\sum V = 0, \sum M = 0$ ) = 2

Degree of indeterminacy =  $(4 - 2) = 2$

### 3. Continuous beam with one end fixed and other end simply supported:

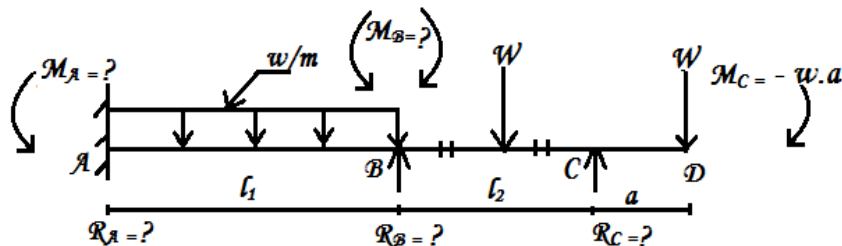


No. of unknown reaction components ( $R_A, R_B, R_C$  &  $M_A, M_B$ ) = 5

No. of available static equilibrium eqns ( $\sum V = 0, \sum M = 0$ ) = 2

Degree of indeterminacy =  $(5 - 2) = 3$

### 4. Continuous beam with one end fixed and other end with over hanging:

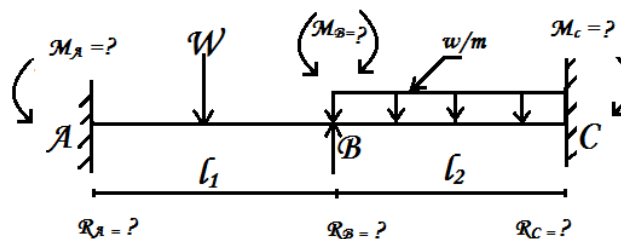


No. of unknown reaction components ( $R_A, R_B, R_C$  &  $M_A, M_B$ ) = 5

No. of available static equilibrium eqns ( $\sum V = 0, \sum M = 0$ ) = 2

Degree of indeterminacy =  $(5 - 2) = 3$

### 5. Continuous beam with both ends fixed:



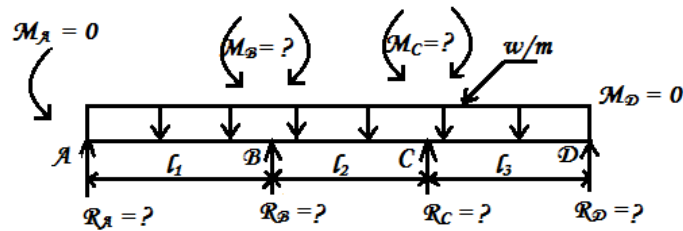
No. of unknown reaction components ( $R_A, R_B, R_C, M_A, M_B$  &  $M_C$ ) = 6

No. of available static equilibrium eqns ( $\sum V = 0, \sum M = 0$ ) = 2

Degree of indeterminacy =  $(6 - 2) = 4$

### **b. Three span continuous beam:**

#### **1) Both ends are simply supported:**



No. of unknown reaction components ( $R_A$ ,  $R_B$ ,  $R_C$ ,  $R_D$ ,  $M_B$  &  $M_C$ ) = 6

No. of available static equilibrium eqns ( $\sum V = 0$ ,  $\sum M = 0$ ) = 2

Degree of indeterminacy =  $(6 - 2) = 4$

### **General methods of analysis of continuous beam:**

Method of analysis of continuous beam.

- A. Theorem of three moments method
- B. Moment distribution method
- C. Area moment method
- D. Slope and deflection method
- E. Strain energy method
- F. Khan's rotation method
- G. Column analogy method
- H. Influence line method

### **Theorem of Three Moment's Method (or) Clapeyron's Theorem of Three Moment Method:**

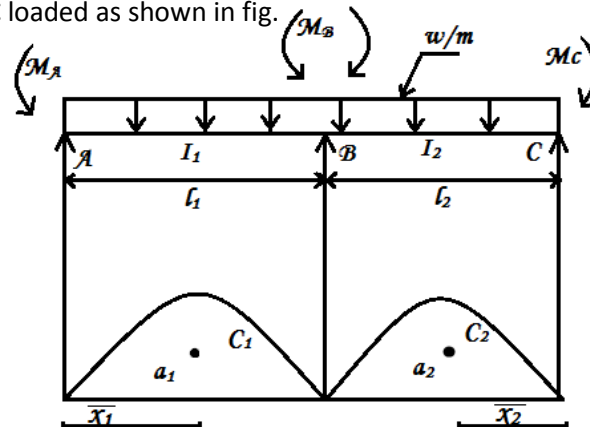
In this method Mohr's theorem I & II are used for determinate the support moment of a continuous beam. It is based on the geometric condition of the deformed continuous beam.

This method was introduced by Engineer Clapeyron's using three support moments. Hence, it is called Clapeyron's theorem of three moment's method.

### **Statement of Clapeyron's Theorem of three moments:**

Clapeyron's theorem states that if a beam has 'n' supports, the end being fixed than the same number of equations required to determining the support moments may be obtained from the consecutive pairs of spans i.e. AB – BC, BC – CD, CD – DE and so on.

Continuous beam ABC loaded as shown in fig.



Let,

$M_A, M_B, M_C$  are the support moments.

$$M_A \left( \frac{l_1}{l_1} \right) + 2 M_B \left( \frac{l_1}{l_1} + \frac{l_2}{l_2} \right) = - \left[ \frac{6a_1 \bar{x}_1}{l_1 l_1} + \frac{6a_2 \bar{x}_2}{l_2 l_2} \right]$$

Theorem of three moments equation

When,

$$l_1 = l_2 = l$$

$$M_A l_1 + 2 M_B (l_1 + l_2) + M_C l_2 = - \left[ \frac{6a_1 \bar{x}_1}{l_1} + \frac{6a_2 \bar{x}_2}{l_2} \right]$$

Where,

$a_1$  = area of free BMD for span AB

$a_2$  = area of fixed BMD for span BC

$\bar{x}_1$  = c.g of BMD from left end (A)

$\bar{x}_2$  = c.g of BMD from right end (C)

#### Application of Clapeyron's Theorem of three moments:

The following solved problems are the examples for the Application of Clapeyron's Theorem of three moments.

#### Area of free BMD for standard cases:

##### 1) Simply supported beam with central point load:

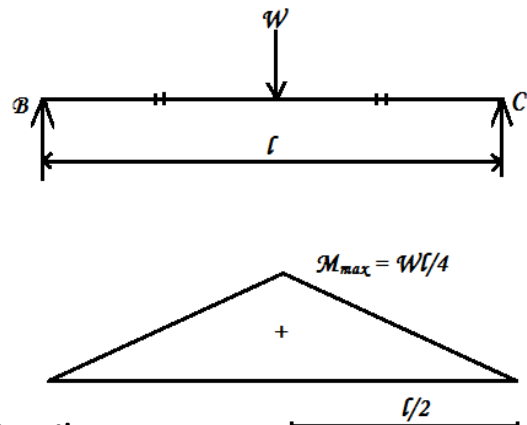
$$\text{Max B.M} = \frac{wl}{4}$$

$$\text{Area, } a = \frac{1}{2} \times l \times \frac{wl}{4} = \frac{wl^2}{8}$$

$$\bar{x} = \frac{l}{2} \text{ centroid from supports.}$$

$$\therefore \frac{6a\bar{x}}{l} = \frac{6 \times \left[ \frac{wl^2}{8} \right] \times \frac{l}{2}}{l} = \frac{3}{8} wl^2$$

$$\frac{6a\bar{x}}{l} = \frac{3}{8} wl^2$$



##### 2) Simply supported beam with UDL of w/m over its entire span:

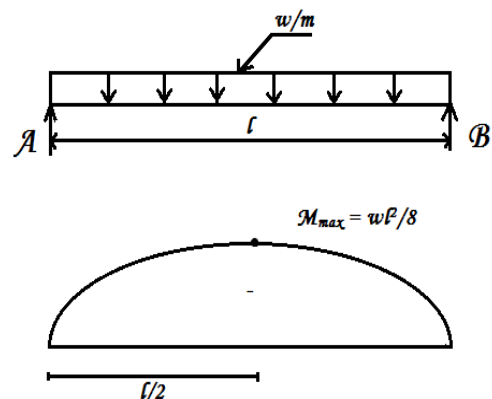
$$\text{Max B.M} = \frac{wl^2}{8}$$

$$\text{Area } a = \frac{2}{3} \times l \times \frac{wl^2}{8} = \frac{wl^3}{12}$$

$$\bar{x} = \frac{l}{2} \text{ centroid from either supports}$$

$$\therefore \frac{6a\bar{x}}{l} = \frac{6 \times \left[ \frac{wl^3}{12} \right] \times \frac{l}{2}}{l} = \frac{wl^3}{4}$$

$$\frac{6a\bar{x}}{l} = \frac{wl^3}{4}$$



### 3) Simply supported beam with non – central load (W):

$$\text{Max B.M} = \frac{Wab}{l}$$

$$\text{Area } a = \frac{1}{2} \times l \times \frac{Wab}{l}; \quad a = \frac{Wab}{2}$$

$$\text{Centroid from left end } \bar{x}_1 = \left[ \frac{l+a}{3} \right]$$

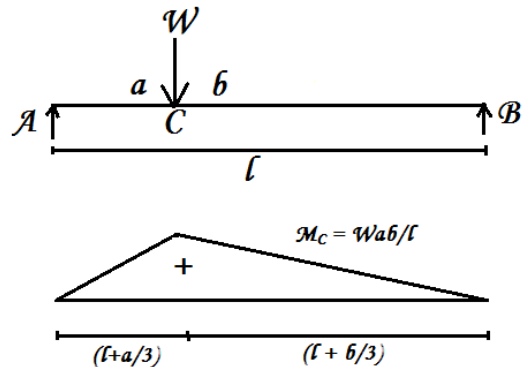
$$\text{Centroid from right end } \bar{x}_2 = \left[ \frac{l+b}{3} \right]$$

$$\therefore \frac{6a\bar{x}_1}{l} \text{ from left end A} = \frac{6 \times \left[ \frac{Wab}{2} \right] \times \left[ \frac{l+a}{3} \right]}{l} = \frac{Wab(l+a)}{l}$$

$$\frac{6a\bar{x}_1}{l} = \frac{Wab(l+a)}{l} = \frac{Wab(l^2 - a^2)}{l}$$

$$\frac{6a\bar{x}_1}{l} = \frac{Wab(l^2 - a^2)}{l} \text{ from left end}$$

$$\text{III ly } \frac{6a\bar{x}_1}{l} = \frac{Wb(l^2 - b^2)}{l} \text{ from right end}$$



## TWO SPAN CONTINUOUS BEAM

### TYPE – 1 Both Ends Are Simply Supported

#### **Problem 1:**

A Continuous beam ABC is Simply Supported at A and C such that AB = 6m and BC = 5m. The span AB carries an UDL of 20kN/m and the span BC carries a point load of 50kN at the centre. Find the support moments by using theorem of three moments draw SFD and BMD.

#### Solution:

##### 1) Simply Supported beam moments:

Considering a each span as Simply

Supported beam and draw free BMD

##### **Span AB:**

$$M = \frac{wl^2}{8} = \frac{20 \times 6^2}{8} = 90 \text{ kNm}$$

##### **Span BC:**

$$M = \frac{wl}{4} = \frac{50 \times 5}{4} = 62.5 \text{ kNm}$$

Using theorem of three moments method.

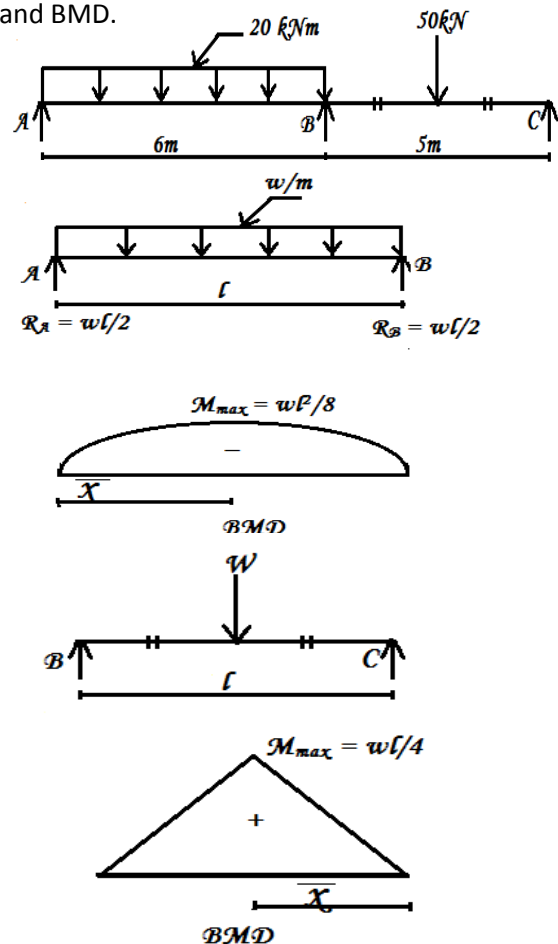
##### 2) Support moments:

##### **Span AB & BC**

$$AB = l_1 = 6 \text{ m}; \quad BC = l_2 = 5 \text{ m}$$

Since end A & C are simply supported

$$M_A = M_C = 0$$





Applying theorem of three moment equation

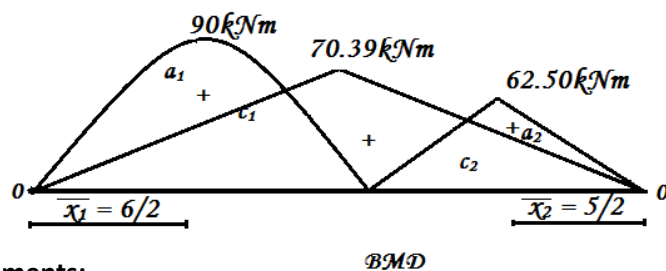
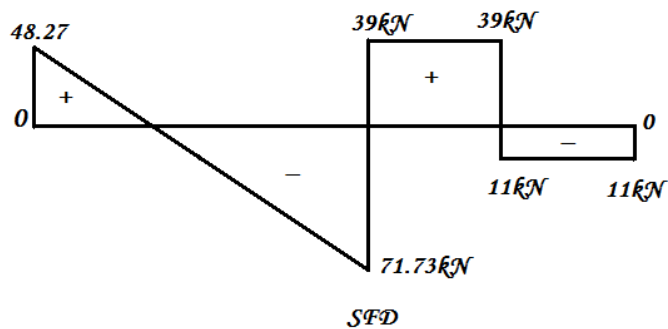
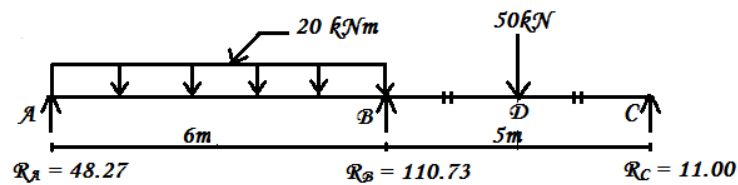
$$M_A l_1 + 2M_B (l_1 + l_2) + M_C l_2 = -6 \left[ \frac{a_1 \bar{x}_1}{l_1} + \frac{a_2 \bar{x}_2}{l_2} \right]$$

$$0 + 2M_B (6+5) + 0 = -6 \left[ \frac{\left(\frac{2}{3} \times 6 \times 90\right) \left(\frac{6}{2}\right)}{6} + \frac{\left(\frac{1}{2} \times 5 \times 62.5\right) \left(\frac{5}{2}\right)}{5} \right]$$

$$22 M_B = -1548.75$$

$$M_B = -70.40 \text{ kNm.}$$

**Draw SFD and BMD:**



**Final support moments:**

$$M_A = 0$$

$$M_B = -70.40 \text{ kNm}$$

$$M_C = 0$$

**Reactions:**

support	A	B	C
Reaction due to free BM $w \frac{l}{2}, \frac{W}{2}$	+60	+60	+25 +25
Reactions due to fixing moments $\frac{M_A \sim M_B}{l_1}, \frac{M_B \sim M_C}{l_2}$	-11.73	+11.73	+14 -14
Net reactions		71.72	39
	$R_A = 48.27\text{kN}$	$R_B = 110.73\text{kN}$	$R_C = 11\text{kN}$

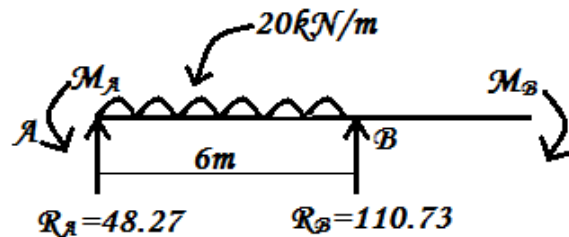
**Alternate method:****For span AB**

Taking moment about 'B'

$$M_A + w \cdot l \cdot \frac{l}{2} = R_A \times l + M_B$$

$$0 + 20 \times 6 \times \frac{6}{2} = R_A \times 6 + 70.40$$

$$R_A = 48.27\text{kN}.$$

**For span BC**

Taking moment about 'B'

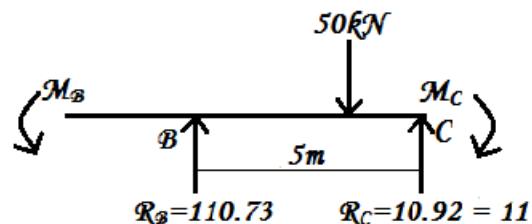
$$M_B + R_C \times l = W \frac{l}{2} + M_C$$

$$70.40 + R_C \times 5 = 50 \times \frac{5}{2} + 0$$

$$R_C = 11\text{kN}$$

$$R_B = \text{Total load} - (R_A + R_C) = (20 \times 6 + 50) - (48.27 + 11)$$

$$R_B = 110.73\text{kN}$$

**Net BM:**

Max BM will occur at x distance from A,

$$71.73 x = (6-x) (48.27)$$

$$= 289.62 - 48.27x$$

$$120 x = 289.62$$

$$x = \frac{289.62}{120}$$

$$x = 2.40\text{m}$$

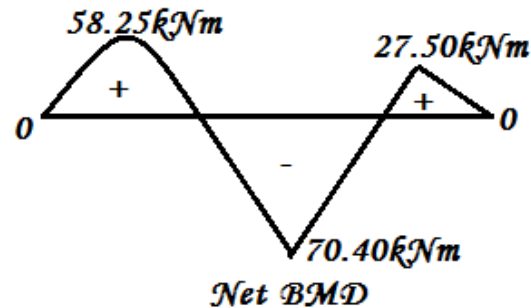
$$M_A = 0$$

$$M_x = 48.27 \times 2.40 - 20 \times 2.40 \times \frac{2.40}{2} = 58.25\text{kNm}$$

$$M_B = -70.40\text{kNm}$$

$$M_D = R_C \times \frac{5}{2} = 11 \times \frac{5}{2} = 27.50\text{kNm}$$

**Draw BMD**



**Problem 2:**

A continuous beam ABC of length 8m has two equal spans. The span AB carries an UDL of 20kN/m over its entire length and the span carries a point load of 20kN at 3m from B. Draw SFD and BMD. Take ends A & C are simply supported. Apply the theorem of three moments.

**Solution:**

i)

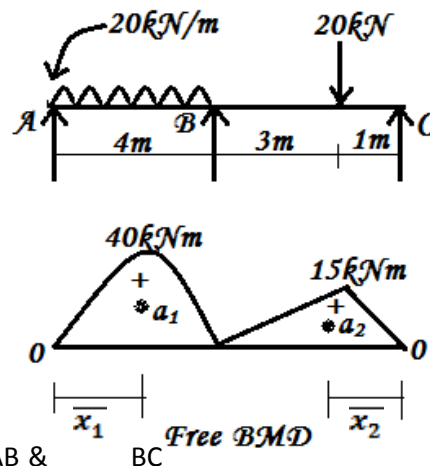
**Draw free BMD for each span**

**For span AB**

$$M_{AB} = \frac{wl^2}{8} = \frac{20 \times 4^2}{8} = 40\text{kNm}$$

**For span BC**

$$M_{BC} = \frac{Wab}{l} = \frac{20 \times 3 \times 1}{4} = 15\text{kNm}$$



ii)

**Support moments:**

Applying theorem of three moment equation for span AB & BC

$$M_A l_1 + 2M_B (l_1 + l_2) + M_C l_2 = -6 \left[ \frac{a_1 \bar{x}_1}{l_1} + \frac{a_2 \bar{x}_2}{l_2} \right]$$

(Or)

$$M_A l + 2M_B (l_1 + l_2) + M_C l_2 = - \left[ \frac{6a_1 \bar{x}_1}{l_1} + \frac{6a_2 \bar{x}_2}{l_2} \right] \rightarrow (1)$$

Since the ends A and C are simply supported.

$$M_A = M_C = 0.$$

**Using formula for standard cases:**

- i. Simply supported beam with UDL over entire span,  $\frac{6a\bar{x}}{l} = \frac{wl^3}{4}$

$$\therefore \frac{6a_1\bar{x}_1}{l_1} = \frac{20 \times 4^3}{4} = 320$$

- ii) simply supported beam with non-central load

$$\frac{6a\bar{x}}{l} = \frac{Wb(l^2 - b^2)}{l} \text{ from right end}$$

$$\therefore \frac{6a_2\bar{x}_2}{l_2} = \frac{20 \times 1(4^2 - 1^2)}{4} = 80$$

Substituting in equation (1)

$$M_A \times 4 + 2M_B(4+4) + M_C \times 4 = -[320+80]$$

$$0 + 16M_B + 0 = -400$$

$$M_B = \frac{-400}{16} = -25 \text{ kNm}$$

**Reactions:**

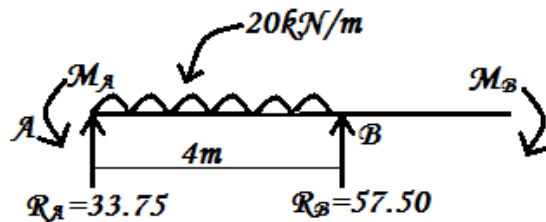
**Consider span AB**

Taking moment at B

$$= M_A + \frac{wl^2}{2} = R_A \times l + M_B$$

$$0 + \frac{20 \times 4^2}{2} = 4R_A + 25$$

$$R_A = \frac{160 - 25}{4} = 33.75 \text{ kN}$$



**Consider span BC**

Taking moment about B

$$R_C \times l + M_B = M_C + (W \times a)$$

$$R_C \times 4 + 25 = 0 + (20 \times 3)$$

$$R_C = \frac{60 - 25}{4} = 8.75 \text{ kN}$$

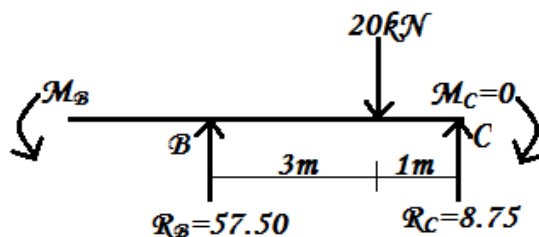
$$\Sigma V = 0$$

$$R_A + R_B + R_C = \text{Total load}$$

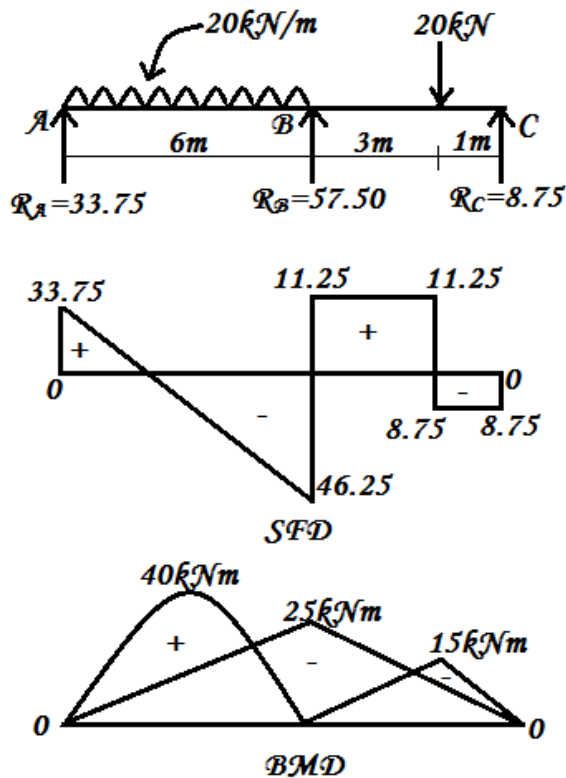
$$R_A = \text{Total load} - (R_B + R_C)$$

$$R_B = (20 \times 4) + 20 - (33.75 + 8.75)$$

$$R_B = 57.50 \text{ kN.}$$



Draw SFD & BMD



### Problem 3:

A two span continuous beam ABC of uniform flexural rigidity is supported to UDL of  $w/m$ . The two spans  $AB = BC = l$ . Determine the support moments by using Clapeyron's Theorem of three moments method. Ends A & C are simply supported Draw BMD.

### Solution:

Span  $AB = BC = l$

#### I. Free Bending Moment Diagram:

B.M for span AB:  $M_{AB} = \frac{wl^2}{8} \text{ kNm}$

B.M for span BC:  $M_{BC} = \frac{wl^2}{8} \text{ kNm}$

#### II. Support Moments:

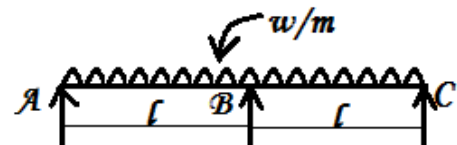
Ends A & C are simply supported:

$$M_A = M_C = 0$$

Applying theorem of three moments

Spans AB & BC

$$AB = l_1 = l; BC = l_2 = l$$



### Applying Clapeyron's three moments equation:

$$M_A l_1 + 2M_B (l_1 + l_2) + M_C l_2 = - \left[ \frac{6a_1 \bar{x}_1}{l_1} + \frac{6a_2 \bar{x}_2}{l_2} \right]$$

Since spans AB = BC = l and carries equal UDL of w/m

$$a_1 = a_2 = \frac{2}{3} \times l \times \frac{wl^2}{8} = \frac{wl^3}{12}$$

$$\bar{x}_1 = \frac{l}{2} \text{ from A; } \bar{x}_2 = \frac{l}{2} \text{ from C}$$

$$\frac{6a_1 \bar{x}_1}{l_1} = \frac{6 \times \frac{wl^3}{12} \times \frac{l}{2}}{l_1} = \frac{wl^3}{4}$$

$$\text{III ly } \frac{6a_2 \bar{x}_2}{l_2} = \frac{wl^3}{4}$$

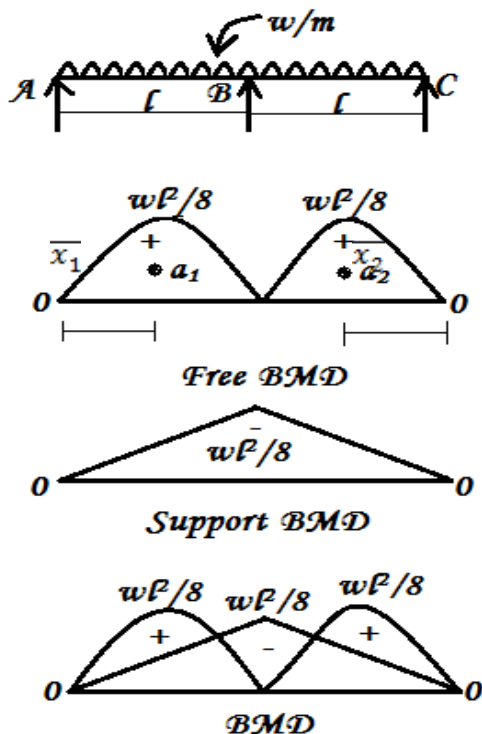
$$M_A l_1 + 2M_B (l_1 + l_2) + M_C l_2 = - \left[ \frac{6a_1 \bar{x}_1}{l_1} + \frac{6a_2 \bar{x}_2}{l_2} \right]$$

$$0 + 2M_B (l+l) + 0 = - \frac{wl^3}{4} + \frac{wl^3}{4};$$

$$0 + 4M_B \cdot l + 0 = - \frac{wl^3}{2}$$

$$M_B = - \frac{wl^3}{2} \times \frac{1}{4l} = - \frac{wl^2}{8}$$

**Draw BMD as shown in fig.**



**Results:**

Final moments

$$M_A = 0$$

$$M_B = - \frac{wl^2}{8}$$

$$M_C = 0$$

**Type II One End Simply Supported**  
**and Other End With Over Hanging**

**Problem 4:**

A continuous beam ABCD is 12m long is simply supported at A, B & C span AB is 6m long and carries a point load of 10kN at its centre, span BC = 4m. Carries UDL of 2kN/m to its full length. Span CD carries a point load 5kN at free end D. Draw BMD by using theorem of three moments.

**Solution:**

**i. Draw free BMD for each span:**

**Span AB**

$$M_{AB} = \frac{Wl}{4} = \frac{10 \times 6}{4} = 15 \text{ kNm}$$

**Span BC**

$$M_{BC} = \frac{wl^2}{8} = \frac{2 \times 4^2}{8} = 4 \text{ kNm}$$

$$M_C = -W \cdot a = - (5 \times 2) = -10 \text{ kNm}$$

**ii. Support moments:**

Applying theorem of three moments equation

**Span AB & BC**

$$M_A l_1 + 2M_B (l_1 + l_2) + M_C l_2 = - \left[ \frac{6a_1 \bar{x}_1}{l_1} + \frac{6a_2 \bar{x}_2}{l_2} \right] \rightarrow (1)$$

End A is simply supported

$$\therefore M_A = 0$$

Supported C is with over hanging

$$\therefore M_C = -5 \times 2 = -10 \text{ kNm}$$

Using formula for standard cases

- Simply supported with central point load,  $\frac{6a_1 \bar{x}_1}{l_1} = \frac{3Wl^2}{8}$

$$\therefore \frac{6a_1 \bar{x}_1}{l_1} = \frac{3 \times 10 \times 6^2}{8} = 135$$

- Simply supported with UDL,  $\frac{6a_2 \bar{x}_2}{l_2} = \frac{wl^3}{4}$

$$\therefore \frac{6a_2 \bar{x}_2}{l_2} = \frac{2 \times 4^3}{4} = 32$$

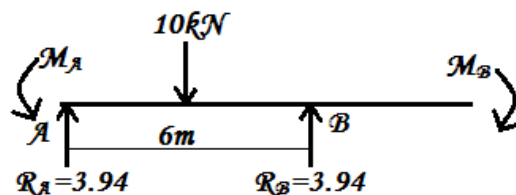
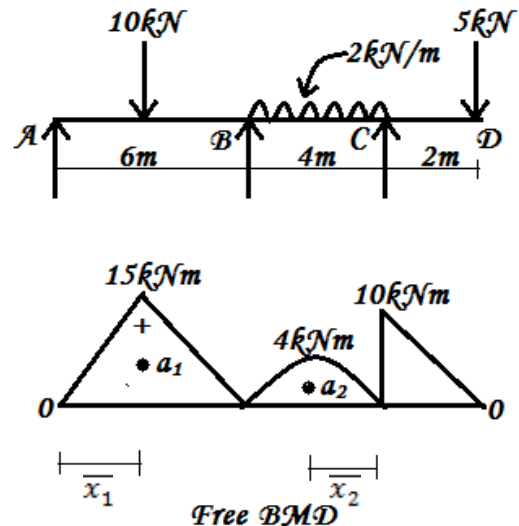
Substituting in equation (1)

$$M_A \times 6 + 2M_B (6+4) + M_C \times 4 = - [135 + 32]$$

$$0 + 20 M_B + (-) 10 \times 4 = -167$$

$$20 M_B = -167 + 40 = -127$$

$$M_B = \frac{-127}{20} = -6.35 \text{ kNm}$$



### Reaction:

#### Consider span AB

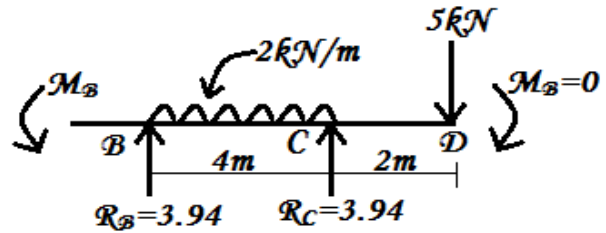
Taking moment about B

$$M_A + \frac{wl^2}{2} = R_A \times l + M_B$$

$$0 + \frac{10 \times 6}{2} = R_A \times 6 + 6.35$$

$$6 R_A = (30 - 6.35) = 23.65 \text{ kNm}$$

$$R_A = \frac{23.65}{6} = 3.94 \text{ kNm}$$



#### Consider span BCD

Taking moment about B

$$R_C \times 4 + M_B = (2 \times 4 \times \frac{4}{2}) + 5 \times 6$$

$$4 R_C + 6.35 = 16 + 30 = 46$$

$$R_C = \left( \frac{46 - 6.35}{4} \right) = 9.90 \text{ kN}$$

$$\sum V = 0$$

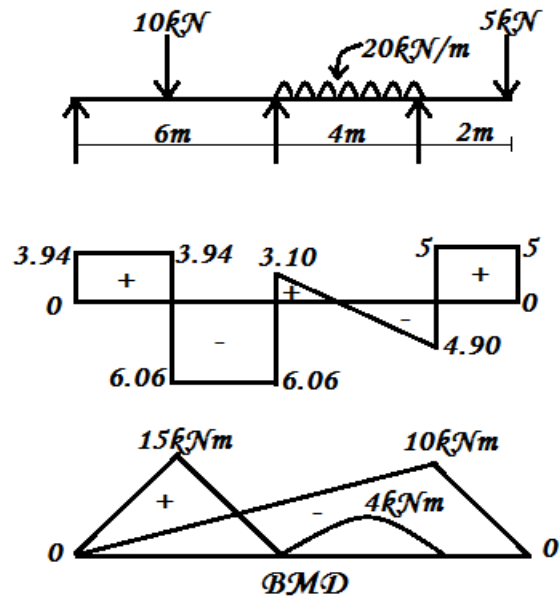
$$R_A + R_B + R_C = \text{Total load}$$

$$R_B = \text{Total loads} - (R_A + R_C)$$

$$R_B = (10 + (2 \times 4) + 5)$$

$$- (3.94 + 9.90)$$

$$R_B = 9.16 \text{ kN.}$$



### Draw SFD & BMD:

#### Problem 5:

A continuous beam of ABCD of length  $12 \text{ m}$  is simply supported by three supports at A, B and C with an equal spacing of  $5 \text{ m}$ . It carries an UDL of intensity  $20 \text{ kN/m}$  over the two spans. There is a  $30 \text{ kN}$  load on the free end, D. Analyse the beam using Clapeyron's Theorem and draw SFD & BMD.

#### Solution:

##### 1. Free BMD for each span:

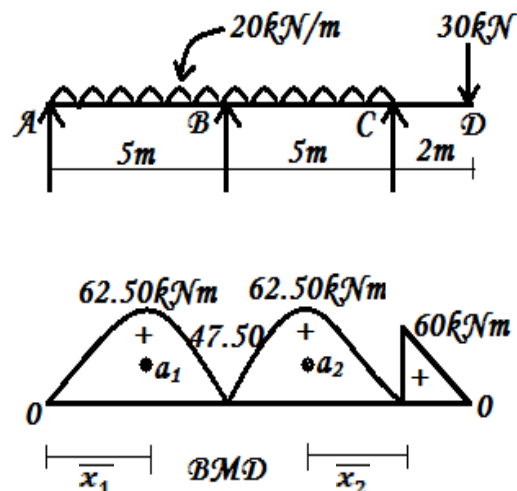
##### Span AB & BC

$$M_{AB} = M_{BC} = \frac{wl^2}{8}$$

$$= \frac{20 \times 5^2}{8} = 62.50 \text{ kNm}$$

##### Moment at C

$$M_C = -30 \times 2 = -60 \text{ kNm}$$





## 2. Support moments:

Applying Theorem of three moment equation for span AB & BC

$$M_A l_1 + 2M_B (l_1 + l_2) + M_C l_2 = - \left[ \frac{6a_1 \bar{x}_1}{l_1} + \frac{6a_2 \bar{x}_2}{l_2} \right] \rightarrow (1)$$

Since end A is simply supported,  $M_A = 0$

Support 'C' is with over hanging  $M_C = -30 \times 2 = -60 \text{ kNm}$

$$l_1 = l_2 = 5 \text{ m}$$

**For standard cases**

a) Simply supported with UDL,  $\frac{6a\bar{x}}{l} = \frac{wl^3}{4}$

$$\frac{6a_1 \bar{x}_1}{l} = \frac{6a_2 \bar{x}_2}{l} = \frac{20 \times 6^3}{4} = 625$$

Substituting in equation (1)

$$M_A \times 5 + 2M_B (5+5) + (-60 \times 5) = - [625 + 625]$$

$$0 + 20M_B - 300 = - 1250$$

$$M_B = \frac{-1250 + 300}{20} = - 47.50 \text{ kNm}$$

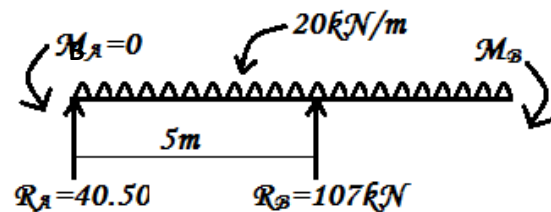
## Reactions:

**Consider span AB taking moment about B**

$$M_A + \frac{wl^2}{2} = R_A \times l + M_B$$

$$0 + \frac{20 \times 5^2}{2} = 5 R_A + 47.50 \quad \text{A}$$

$$R_A = \frac{250 - 47.50}{5} = 40.50 \text{ kN}$$



**Consider span BC:**

Taking moment about B

$$R_C \times 1 + M_B = \left( \frac{20 \times 5 \times 5}{2} \right) + (30 \times 7)$$

$$R_C \times 5 + 47.50 = (250 + 210) = 460$$

$$R_C = \left( \frac{460 - 47.50}{5} \right) = 82.50 \text{ kNm}$$

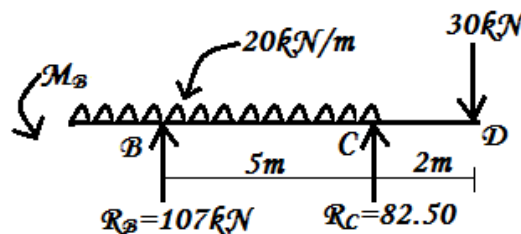
$$\sum V = 0$$

$$R_A + R_B + R_C = \text{Total load}$$

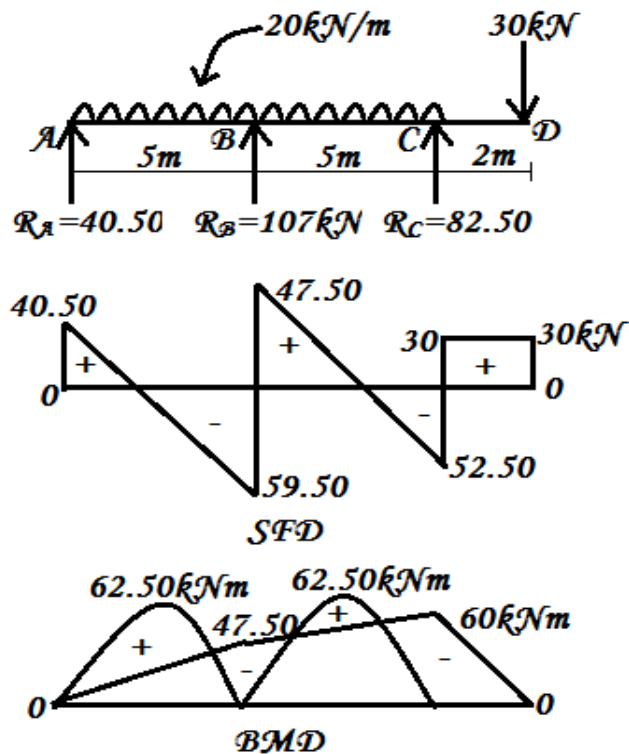
$$R_B = \text{Total load} - (R_A + R_C)$$

$$R_B = (20 \times 10) + 30 - (40.50 + 82.50)$$

$$R_B = 107 \text{ kN.}$$



**Draw SFD and BMD:**



**Type III One End Fixed And Other End Simply Supported**

**Problem 6:**

A continuous beam ABC of span 10m is fixed at end A and simply supported at C span AB is 4m long and carries an UDL of 30kN/m over entire span and span BC carries a point load of 60kN at 2.5m from B. Determine the support moments by using theorem of three moments. Draw BMD.

**Solution:**

I. **Free BMD for each span**

For span AB

$$M_{AB} = \frac{wl^2}{8} = \frac{30 \times 4^2}{8} = 60 \text{ kNm}$$

Span BC

$$M_{BC} = \frac{Wab}{l} = \frac{60 \times 2.5 \times 3.5}{6} = 87.50 \text{ kNm}$$

II. **Support moments:**

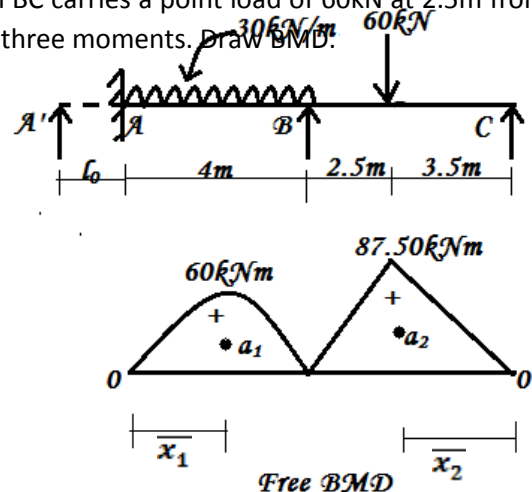
Since end A is fixed,

Assume an imaginary beam  $A^1A$

of span  $l_0 = 0\text{m}$

$$\therefore M_{A^1A} = 0$$

Applying Clapeyron's three moment



Equation for span A<sup>1</sup>A and AB

$$A^1A = l_0 = 0, AB = l_1 = 4\text{m},$$

$$M_A l_0 + 2M_B (l_0 + l_1) + M_C l_1 = - \left[ \frac{6a_0 \bar{x}_0}{l_0} + \frac{6a_1 \bar{x}_1}{l_1} \right] \rightarrow (I)$$

**For standard cases:**

$$\left[ \frac{6a_0 \bar{x}_0}{l_0} \right] = 0 \text{ (No load)}$$

i) Simply supported with UDL,  $\frac{6a \bar{x}}{l} = \frac{wl^3}{4}$

$$\therefore \left[ \frac{6a_1 \bar{x}_1}{l_1} \right] = \frac{30 \times 4^3}{4} = 480$$

Substituting in equation (1)

$$M_A \times l_0 + 2M_B (0+4) + M_C \times 4 = - [0+480]$$

$$0 + 8M_B + 4M_C = - 480$$

$$2 M_B + M_C = - 120 \rightarrow (1)$$

**From span AB & BC**

Applying Clapeyron's three moment equation for span AB & BC

$$AB = l_1 = 4\text{m}, BC = l_2 = 4\text{m}$$

Since end C is simply supported,  $M_C = 0$

$$M_A l_1 + 2M_B (l_1 + l_2) + M_C l_2 = - \left[ \frac{a_1 \bar{x}_1}{l_1} + \frac{a_2 \bar{x}_2}{l_2} \right] \rightarrow (II)$$

**For standard cases:**

1. Simply supported with UDL,  $\frac{6a \bar{x}}{l} = \frac{wl^3}{4}$

$$\therefore \left[ \frac{6a_1 \bar{x}_1}{l_1} \right] = \frac{30 \times 4^3}{4} = 480$$

2. Simply supported with non-central load,  $\frac{6a \bar{x}}{l} = \frac{Wb(l^2 - b^2)}{l}$

$$\frac{6a_2 \bar{x}_2}{l_2} = \frac{60 \times 3.5 \times (6^2 - 3.5^2)}{6} = 831.25$$

Substituting in equation (II)

$$M_A \times 4 + 2M_B (4+6) + M_C \times 6 = - [480 + 831.25]$$

$$4M_A + 20M_B + 0 = - 1311.25 \rightarrow (2)$$

Solving equation (1) & (2)

$$(2) \rightarrow 4 M_A + 20 M_B = - 1311.25$$

$$(1) \times (2) \rightarrow - 4 M_A - 2 M_B = - 240.00$$

$$0 + 18 M_B = -1071.25$$

$$M_B = \frac{-1071.25}{18} = -59.51 \text{ kNm}$$

Substituting in equation (1)

$$2 M_A + (-59.51) = -120$$

$$M_A = -30.25 \text{ kNm}$$

### Final support moments:

$$M_A = -30.25 \text{ kNm}$$

$$M_B = -59.51 \text{ kNm}$$

$$M_C = 0$$

### Reactions:

#### Consider span AB

Taking moment about B

$$M_A + (30 \times 4) \times \frac{4}{2} = R_A \times 4 + M_B$$

$$30.25 + 240 = 4 R_A + 59.51$$

$$R_A = 52.68 \text{ kN}$$

#### Consider span BC:

Taking moment about B:

$$R_C \times 6 + M_B = M_C + 60 \times 2.5$$

$$6 R_C \times 59.51 = 0 + 150$$

$$R_C = \frac{(150 - 59.51)}{6} = 15.08 \text{ kN}$$

$$\sum V = 0$$

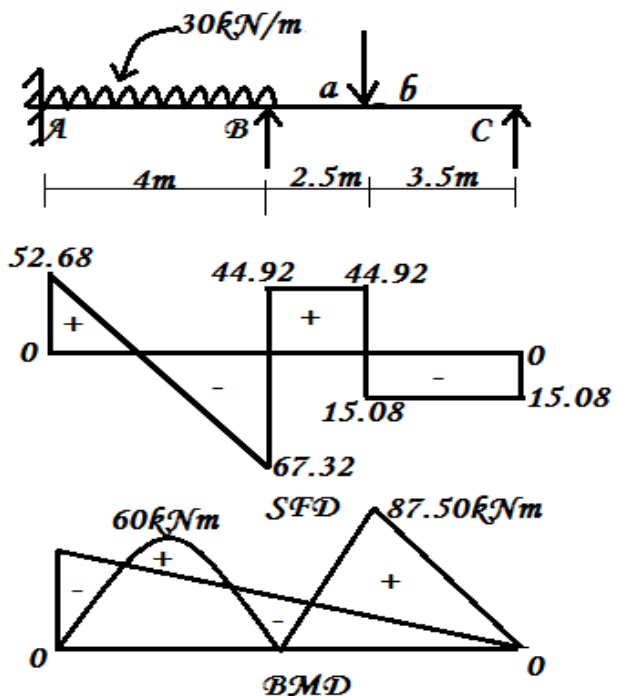
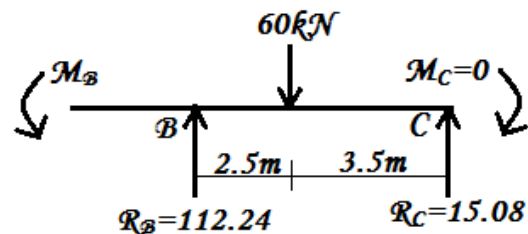
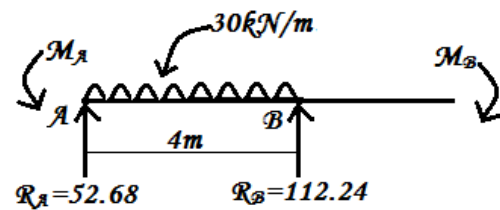
$$R_A + R_B + R_C = \text{Total load}$$

$$R_B = \text{Total load} - (R_A + R_C)$$

$$= (30 \times 4) + 60 - (52.68 + 15.08)$$

$$R_B = 112.24 \text{ kN.}$$

### Draw SFD & BMD:



### Problem 7:

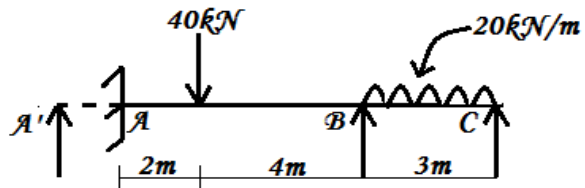
A two span beam ABC of length 9m is fixed at 'A' and simply supported at 'C'. The span AB is 6m long carries a point load 40kN at 2m from A. The span BC is 3m long carries an UDL of 20kN/m. Find the support moments using Theorem of three moments method and draw SFD and BMD.

#### Solution:

##### i. Free BMD:

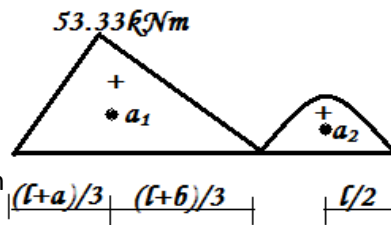
Span AB,  $a = 2\text{m}$ ,  $b = 4\text{m}$

$$M_{AB} = \frac{Wab}{l} = \frac{40 \times 2 \times 4}{6} = 53.33\text{kNm}$$



Span BC

$$M_{BC} = \frac{wl^2}{8} = \frac{20 \times 3^2}{8} = 22.50\text{kNm}$$



##### ii. Support moments:

Since end A is fixed, assume an imaginary beam A<sup>1</sup>A of span  $l_0 = 0\text{m}$ .

Applying Clapeyron's three moment equation for span A<sup>1</sup>A and AB

$$A^1A = l_0 = 0, AB = l_1 = 4\text{m},$$

$$M_A l_0 + 2M_A (l_0 + l_1) + M_B l_1 = - \left[ \frac{6a_0 \bar{x}_0}{l_0} + \frac{6a_1 \bar{x}_1}{l_1} \right] \rightarrow (I)$$

For standard cases:

$$\left[ \frac{6a_0 \bar{x}_0}{l_0} \right] = 0 \text{ (no load)}$$

Simply supported with non-central load,  $\frac{6a_1 \bar{x}_1}{l_1} = \frac{Wb(l^2 - b^2)}{l}$  from end B

$$\left[ \frac{6a_1 \bar{x}_1}{l_1} \right] = \frac{40 \times 4(6^2 - 4^2)}{6} = 533.33$$

Substituting in equation (I)

$$M_A \times l_0 + 2M_A (0+6) + M_B \times 6 = - [0 + 533.33]$$

$$0 + 12 M_A + 6 M_B = - 533.33$$

$$2 M_A + M_B = - 88.89 \rightarrow (1)$$

Applying Clapeyron's three moment

Equation for span AB and BC

$$AB = l_1 = 6\text{m}, BC = l_2 = 3\text{m},$$

Since end C is simply supported,  $M_C = 0$

$$M_A l_1 + 2M_B (l_1 + l_2) + M_C l_2 = - \left[ \frac{6a_1 \bar{x}_1}{l_1} + \frac{6a_2 \bar{x}_2}{l_2} \right] \rightarrow (II)$$

### For standard cases

Simply supported with non-central load,  $\frac{6a\bar{x}}{l} = \frac{Wa(l^2 - a^2)}{l}$  from end A.

$$\left[ \frac{6a_1\bar{x}_1}{l_1} \right] = \frac{40 \times 2(6^2 - 2^2)}{6} = 426.67$$

i. Simply supported with UDL,  $\frac{6a\bar{x}}{l} = \frac{wl^3}{4}$

$$\therefore \left[ \frac{6a_2\bar{x}_2}{l_2} \right] = \frac{20 \times 3^3}{4} = 135$$

Substituting in equation (II)

$$M_A \times 6 + 2 M_B (6+3) + 0 = - [426.67 + 135]$$

$$6 M_A + 18 M_B = - 561.67$$

$$M_A + 3 M_B = - 93.61 \rightarrow (2)$$

Solving equation (1) and (2)

$$(1) \quad \rightarrow 2 M_A + M_B = - 88.890$$

$$(2) \quad \times 2 \rightarrow 2 M_A + 6 M_B = - 187.223$$

$$0 \quad - 5 M_B = - 98.33$$

$$M_B = - 19.67 \text{ kNm}$$

Substituting in equation (1)

$$2 M_A + (-19.67) = - 88.89$$

$$M_A = - 34.61 \text{ kNm}$$

$$M_A = - 34.61 \text{ kNm}$$

$$M_B = - 19.67 \text{ kNm}$$

$$M_C = 0$$

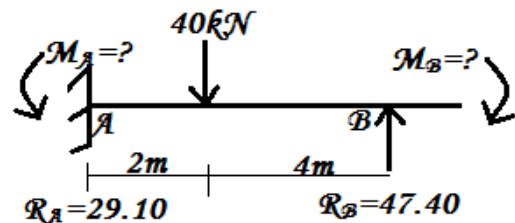
### iii. Reactions:

Consider span AB taking moment about B

$$M_A + W \cdot b = M_B + R_A \times l$$

$$34.61 + (40 \times 4) = 19.67 + R_A \times 6$$

$$R_A = 29.16 \text{ kN}$$

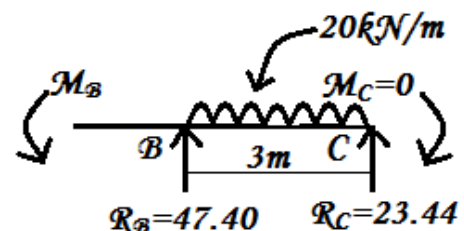


Consider span BC taking moment about B

$$R_C \times l + M_B = M_C + \frac{Wl^2}{2}$$

$$R_C \times 3 + 19.67 = 0 + \frac{20 \times 3^2}{2}$$

$$R_C = \frac{(90 - 19.67)}{3} = 23.44 \text{ kN}$$



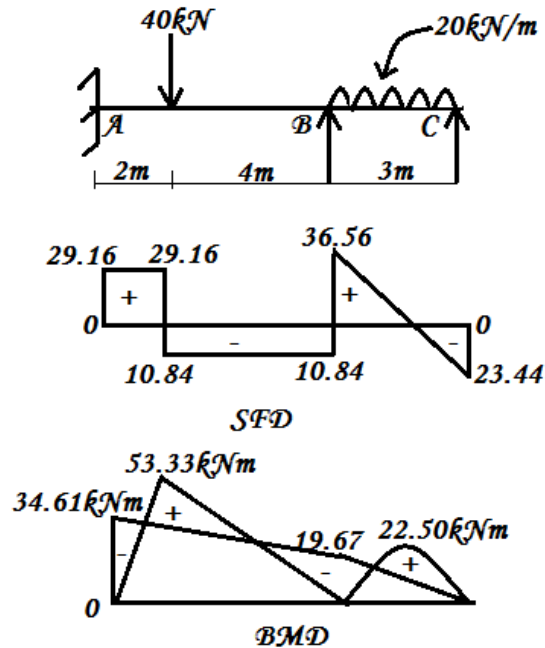
$$\sum V = 0$$

$$R_B = \text{Total load} - (R_A + R_C)$$

$$R_B = 40 + (20 \times 3) - (29.16 + 23.44)$$

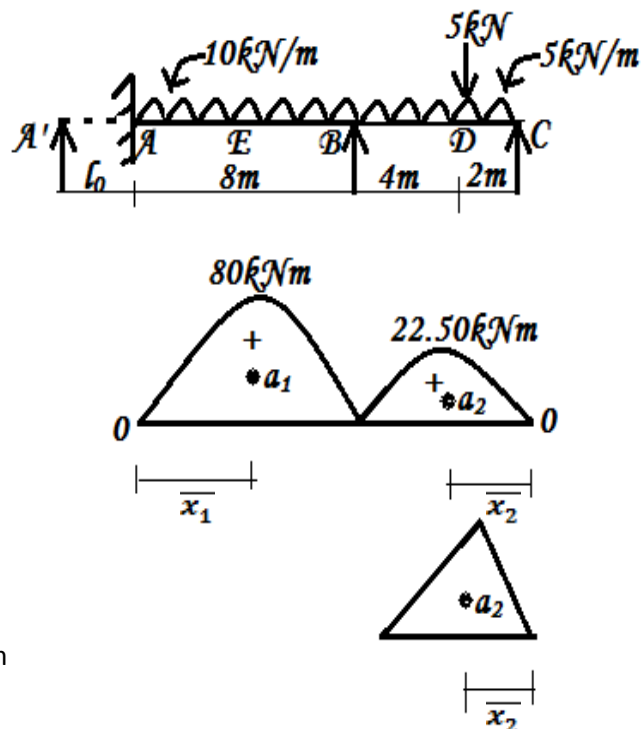
$$R_B = 47.40 \text{ kN}$$

### Draw SFD and BMD



### Problem 8:

A continuous beam ABC of uniform section, with span AB as 6m is fixed at A and simply supported at B and C. The beam carries an UDL of 10kN/m and span BC carries an UDL of 5kN/m. It also carries a point load of 20kN at 2m from the end C. Find the support moments using three moment equation. Draw SFD and BMD.



### Solution:

#### i. Free BMD:

Span AB

$$M_{AB} = \frac{wl^2}{8} = \frac{10 \times 8^2}{8} = 80 \text{ kNm}$$

### Span BC

$$l = 6\text{m}; a = \frac{l}{3} = \frac{6}{3} = 2\text{m}$$

$$\text{Due to UDL} = \frac{wl^2}{8} = \frac{5 \times 6^2}{8} = 22.50\text{kNm}$$

$$\text{Due to central point load} = \frac{Wab}{l} = \frac{20 \times 4 \times 2}{6} = 26.67\text{kNm}$$

Draw free BMD

#### ii. Support moments:

End A is fixed, hence assume an imaginary beam A<sup>1</sup>A of span  $l_0 = 0\text{m}$

Hence assume an imaginary beam of A<sup>1</sup>A & C<sup>1</sup>C

Applying theorem of three moments equation span A<sup>1</sup>A & AB,

$$A^1A = l_0 = 0\text{m} \quad M_{A^1} = 0$$

$$AB = l_1 = 8\text{m}$$

$$M_{A^1} l_0 + 2M_A (l_0 + l_1) + M_B l_1 = - \left[ \frac{6a_0 \bar{x}_0}{l_0} + \frac{6a_1 \bar{x}_1}{l_1} \right] \rightarrow (I)$$

$$\left[ \frac{6a_0 \bar{x}_0}{l_0} \right] = 0;$$

For standard cases:

Simply supported beam with UDL,

$$\left[ \frac{6a_1 \bar{x}_1}{l_1} \right] = \frac{wl^3}{4} = \frac{10 \times 8^3}{4} = 1280$$

Substituting in equation (I)

$$0 + 2M_A (0+8) + M_B \times 8 = - [0+1280]$$

$$16M_A + 8M_B = -1280$$

$$2M_A + M_B = -160 \rightarrow (1)$$

Applying theorem of three moments equation for span AB and BC

$$AB = l_1 = 8\text{m}, BC = l_2 = 6\text{m},$$

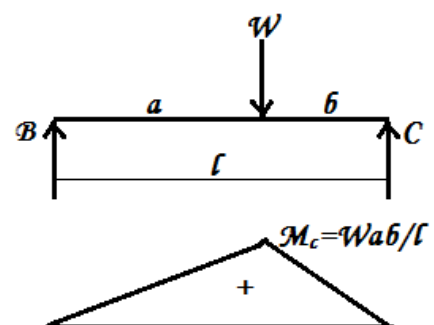
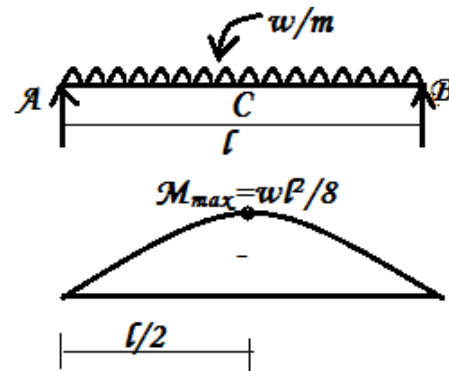
Since 'C' is simply supported  $M_C = 0$

$$M_A l_1 + 2M_B (l_1 + l_2) + M_C l_2 = - \left[ \frac{6a_1 \bar{x}_1}{l_1} + \frac{6a_2 \bar{x}_2}{l_2} \right] \rightarrow (II)$$

For standard cases:

Simply supported beam with UDL

$$\frac{6a \bar{x}}{l} = \frac{wl^3}{4} = 384$$





$$\frac{6a_1 \bar{x}_1}{l_1} = \frac{10 \times 8^3}{4} = 1280$$

Simply supported beam with non-central load

$l = 6\text{m}$ ,  $a = 4\text{m}$ ,  $b = 2\text{m}$ ,

$$\frac{6a_2 \bar{x}_2}{l_2} = \frac{Wb(l^2 - b^2)}{l} \text{ from end 'C'}$$

$$\frac{6a_2 \bar{x}_2}{l_2} = \left[ \frac{Wl^3}{4} + \frac{Wb(l^2 - b^2)}{l} \right] = \left[ \frac{5 \times 6^3}{4} + \frac{20 \times 2(6^2 - 2^2)}{6} \right]$$

$$= [270 + 2013.33] = 483.33$$

Substituting in equation (II)

$$M_A \times 8 + 2 M_B = - [1280 + 483.33] = - 1763.33$$

$$8 M_A + 28 M_B = - 1763.33 \rightarrow (2)$$

Solving equations (1) and (2)

$$1) \times 28 \rightarrow 56 M_A + 28 M_B = - 4480.00$$

$$2) \rightarrow 8 M_A + 28 M_B = - 1763.33$$

$$48 M_A + 0 = - 2716.70$$

$$M_A = - 56.60\text{kNm}$$

Substituting in (1)

$$2 M_A + M_B = - 160 \rightarrow (1)$$

$$2 \times (- 56.60) + M_B = - 160$$

$$M_B = - 160 + 113.2 = - 46.80$$

$$M_B = - 46.80\text{kNm}$$

### III. Result:

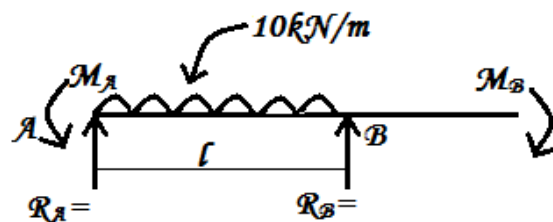
**Final Support Moments:**

$$M_A = - 56.60\text{kNm}$$

$$M_B = - 46.80\text{kNm}$$

$$M_C = 0$$

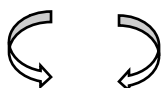
Draw BMD as shown in fig.



**Reactions:**

**Consider span AB**

Taking moment at B



$$M_A + \frac{wl^2}{2} = R_A \times l + M_B$$

$$56.60 + \frac{10 \times 8^2}{2} = 8 R_A + 46.80$$

$$R_A = 41.23 \text{ kN}$$

**Consider span BC:**

Taking moment about B

$$R_C \times l + M_B = M_C + (W \times a) + \frac{wl^2}{2}$$

$$R_C \times 6 + 46.80 = 0 + (20 \times 4) + \frac{5 \times 6^2}{2}$$

$$R_C = 20.53 \text{ kN}$$

$$\sum V = 0$$

$$R_A + R_B + R_C = \text{Total load}$$

$$R_B = \text{Total load} - (R_A + R_C)$$

$$41.23 + R_B + 20.53 = (10 \times 8) + (5 \times 6) + 20$$

$$R_B = 68.24 \text{ kN.}$$

Draw SFD

**Net BMD:**

$$M_C = 0$$

$$M_D = 20.53 \times 2 \left( \frac{5 \times 2^2}{2} \right) = 31.06 \text{ kNm}$$

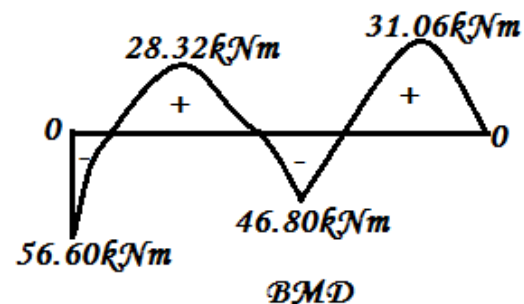
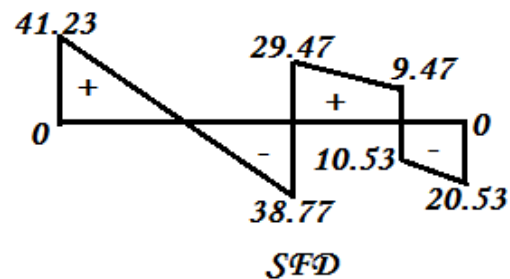
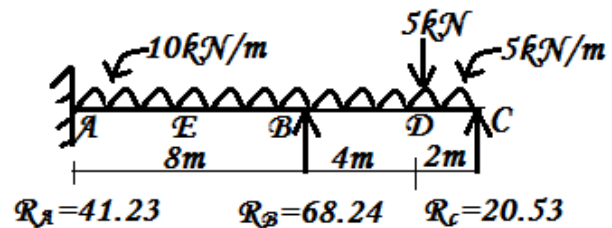
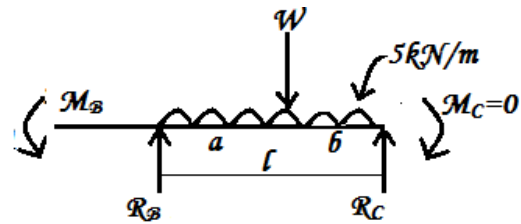
$$M_B = -46.80 \text{ kNm}$$

$$M_E = R_A \times 4 - M_A - \frac{wl^2}{2}$$

$$= R_A \times 4 - 56.60 - \frac{10 \times 4^2}{2}$$

$$= (164.92 - 56.60 - 80) = 28.32 \text{ kNm}$$

$$M_A = -56.60 \text{ kNm}$$



## Type – IV One End Fixed and Other End With Over Hanging

### Problem 9:

A continuous beam ABCD is fixed at A and simply supported at B and C. Span AB is 6m long and carries point load of 30kN at its mid span, the span BC is 4m long carries an UDL of 10kN/m over its entire span, span CD is 2m long carries a point load of 5kN at free end D. Find the support moments by Clapeyron's theorem of three moments. Draw SFD and BMD.

#### Solution:

##### I. Free BMD:

Span AB

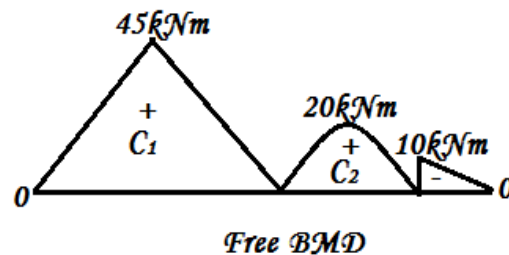
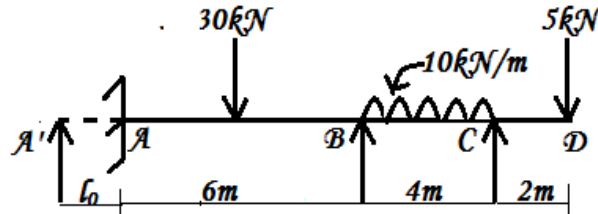
$$M_{AB} = \frac{wl}{4} = \frac{10 \times 6}{4} = 45 \text{ kNm}$$

Span BC

$$M_{BC} = \frac{wl^2}{8} = \frac{10 \times 4^2}{8} = 20 \text{ kNm}$$

Support 'C' is with overhanging

$$\therefore M_{CD} = -5 \times 2 = -10 \text{ kNm}$$



##### II. Support moments:

End A is fixed, introduce an imaginary beam A<sup>1</sup>A of span

$$l_0 = 0\text{m}; M_A^1 = 0; a_0 = 0$$

Applying theorem of three moments equation span A<sup>1</sup>A and AB

$$A^1A = l_0, AB = l_1 = 6\text{m}$$

$$M_A l_0 + 2M_A (l_0 + l_1) + M_B l_1 = - \left[ \frac{6a_0 \bar{x}_0}{l_0} + \frac{6a_1 \bar{x}_1}{l_1} \right] \rightarrow (I)$$

$$\left[ \frac{6a_0 \bar{x}_0}{l_0} \right] = 0$$

For standard cases:

Simply supported with central load,  $\left[ \frac{6a \bar{x}}{l} \right] = \frac{3}{8} Wl^2$

$$\left[ \frac{6a_1 \bar{x}_1}{l_1} \right] = \frac{3}{8} \times 30 \times 6^2 = 405$$

Substituting in equation (I)

$$0 + 2M_A (0+6) + M_B \times 6 = - [0+405]$$

$$12M_A + 6M_B = -405 \rightarrow (1)$$

(1) Applying theorem of three moments equation for span AB and BC.

$$AB = l_1 = 6\text{m}, BC = l_2 = 4\text{m},$$

$$M_C = -10 \text{ kNm}$$

$$M_A l_1 + 2M_B (l_1 + l_2) + M_C l_2 = - \left[ \frac{6a_1 \bar{x}_1}{l_1} + \frac{6a_2 \bar{x}_2}{l_2} \right] \rightarrow (II)$$

**For standard cases**

Simply supported with central load,  $\left[ \frac{6a \bar{x}}{l} \right] = \frac{3}{8} Wl^2$

$$\left[ \frac{6a_1 \bar{x}_1}{l_1} \right] = \frac{3}{8} \times 30 \times 6^2 = 405$$

Simply supported with UDL,  $\left[ \frac{6a \bar{x}}{l} \right] = \frac{wl^3}{4}$

$$\frac{6a_2 \bar{x}_2}{l} = \frac{wl^3}{4} = \frac{10 \times 4^3}{4} = 160$$

Substituting in equation (II)

$$6 M_A + 2 M_B (6+4) + 4 \times 10 = - [405 + 160]$$

$$6 M_A + 20 M_B = -65 + 40 = -525$$

$$6 M_A + 20 M_B = -525 \rightarrow (2)$$

Solving equation (1) and (2)

$$1. \quad 12 M_A + 6 M_B = -405$$

$$2. \quad \times 3 \rightarrow 12 M_A + 40 M_B = -1050$$

$$34 M_B = -645$$

$$M_B = -18.97 \text{ kNm}$$

Substituting in equation (2)

$$6 M_A + 20 \times (-18.97) = -525$$

$$6 M_A - 379.40 = -525$$

$$M_A = \frac{-525 + 379.40}{6} = -24.27 \text{ kNm}$$

$$M_A = -24.27 \text{ kNm}$$

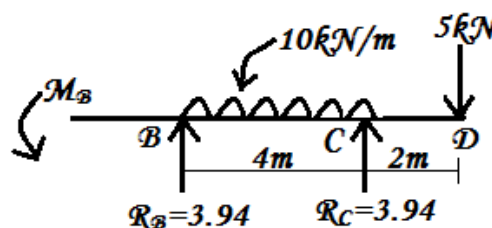
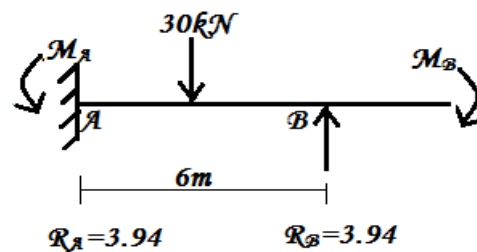
### III. Reactions:

Consider span AB

Taking moment about left of 'B'

$$M_A + W \frac{l}{2} = R_A \times l + M_B$$

$$24.27 + 30 \times \frac{6}{2} = 6 R_A + 18.97$$



$$6 R_A = 99.85$$

$$R_A = 16.47 \text{ kN}$$

### Consider span BCD

Taking moment about right of B

$$R_C \times l + M_B = w l \frac{l}{2} + W (l+a)$$

$$4R_C + 18.97 = 10 \times 4 \times \frac{5}{2} + 5 (4+2)$$

$$4R_C + 18.97 = 110$$

$$R_C = \frac{(92-8)}{4} = 22.75 \text{ kN}$$

$$\Sigma V = 0$$

$$R_B = \text{Total load} - (R_A + R_C)$$

$$R_B = 30 + (10 \times 4) + 5 - (16.47 + 22.75)$$

$$R_B = 35.78 \text{ kN}$$

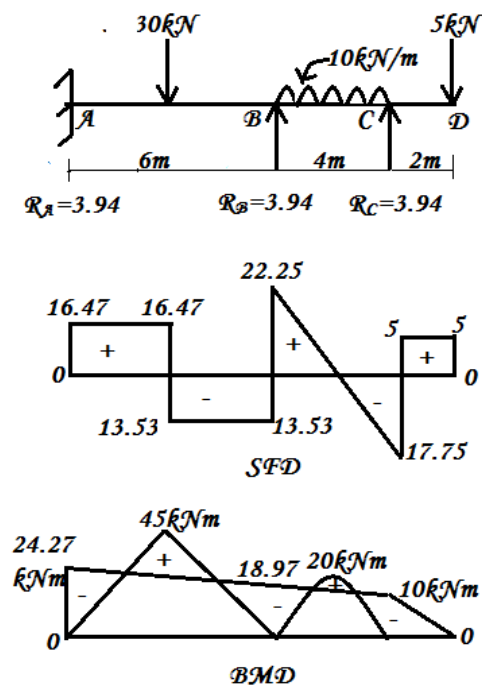
### Final support moments:

$$M_A = -24.27 \text{ kNm}$$

$$M_B = -18.97 \text{ kNm}$$

$$M_C = -10 \text{ kNm}$$

### Draw SFD and BMD:





**For standard cases:**

Simply supported with UDL,  $\left[ \frac{6a\bar{x}}{l} \right] = \frac{wl^3}{4}$

$$\left[ \frac{6a_1\bar{x}_1}{l_1} \right] = \frac{wl^3}{4} = \frac{20 \times 6^3}{4} = 1080$$

Simply supported with central point load,  $\left[ \frac{6a\bar{x}}{l} \right] = \frac{3}{8} Wl^2$

$$\left[ \frac{6a_2\bar{x}_2}{l_2} \right] = \frac{3}{8} Wl^2 = \frac{3}{8} \times 60 \times 6^2 = 810$$

Substituting in equation (II)

$$M_A \times 6 + 2 M_B (6+6) + 6 M_C = - [1080 + 810]$$

$$6 M_A + 24 M_B + 6 M_C = - 1890$$

$$M_A + 4 M_B + M_C = - 315 \rightarrow (2)$$

Applying theorem of three moments for span BC and CC<sup>1</sup>

$$BC = l_2 = 6m; CC^1 = l_3 = 0m, M_C^1 = 0$$

$$M_B l_2 + 2M_C (l_2 + l_3) + M_C^1 l_3 = - \left[ \frac{6a_2\bar{x}_2}{l_2} + \frac{6a_3\bar{x}_3}{l_3} \right] \rightarrow (III)$$

We know,

$$\left[ \frac{6a_2\bar{x}_2}{l_2} \right] = \frac{3}{8} Wl^2 = \frac{3}{8} \times 60 \times 6^2 = 810 \text{ kNm from end C}$$

$$\left[ \frac{6a_3\bar{x}_3}{l_3} \right] = 0$$

Substituting in equation III

$$M_B \times 6 + 2 M_C (6+0) + 0 = - [810 + 0]$$

$$6 M_B + 12 M_C = - 810$$

$$M_B + 2 M_C = - 135 \rightarrow (3)$$

Solving equations (2) and (3)

$$(3) \rightarrow M_B + 2 M_C = - 135$$

$$(2) \times 2 \rightarrow 2 M_A + 8 M_B + 2 M_C = - 630$$

$$(\text{Solving 2\&3}) - 2 M_A - 7 M_B + 0 = - 495$$

$$2 M_A + 7 M_B + 0 = - 495 \rightarrow (4)$$

Solving (1) and (4)

$$(4) \rightarrow 2 M_A + 7 M_B = - 495$$

$$(1) \rightarrow 2 M_A + M_B = - 180$$

$$6 M_B = - 315$$

$$M_B = \frac{- 315}{6} = - 52.50$$

$$M_B = - 52.50 \text{ kNm}$$

Substituting in (1)

$$2 M_A + (-52.50) = - 180$$

$$M_A = \frac{(-180 + 52.5)}{2} = - 63.75 \text{ kNm}$$

$$M_A = - 63.75 \text{ kNm}$$

Substituting value of  $M_B$  in equation (3)

$$M_B + 2 M_C = - 135 \rightarrow (3)$$

$$- 52.50 + 2 M_C = - 135$$

$$M_C = - 41.25 \text{ kNm}$$

### **Reactions:**

support	A		B		C	
Reaction due to simply supported beam $\frac{wl}{2}, \frac{W}{2}$	+60		+60		+30	+30
Reactions due to fixing moments $\frac{M_A \sim M_B}{l_1}, \frac{M_B \sim M_C}{l_2}$	-1.88		+1.87		+1.88	-1.87
Final reactions $R_A, R_B \text{ \& } R_C =$	+ 58.12 $R_A$		61.87		31.88	28.13 $R_C$
			93.75 $R_B$			

### **Result:**

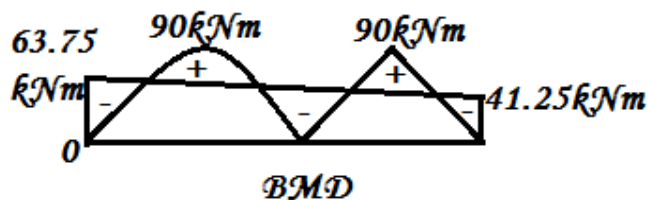
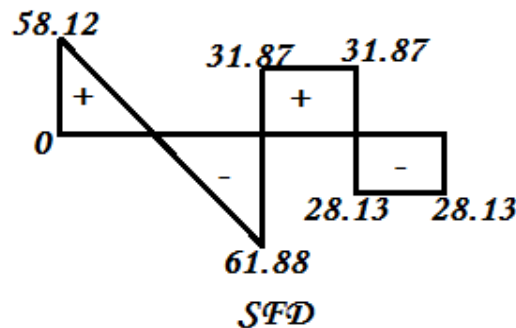
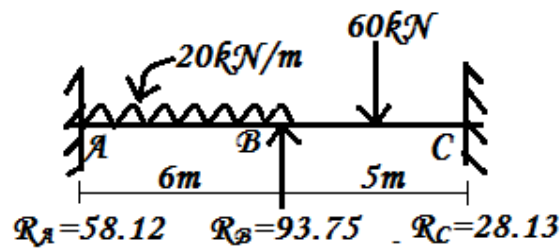
$$M_A = - 63.75 \text{ kNm}$$

$$M_B = - 52.50 \text{ kNm}$$

$$M_C = - 41.25 \text{ kNm}$$



### Draw SFD and BMD



### Problem 11:

A two span continuous beam of 4m and 6m spans are fixed at both of its end. The size of the beam is uniform in both spans. The span AB is 4m carries an UDL of 24kN/m throughout its length. The 6m span carries two point loads of 30kN each at its one third points. Find out the support moments by Clapeyron's theorem of three moments.

#### Solution:

##### I. Free BMD

Span AB

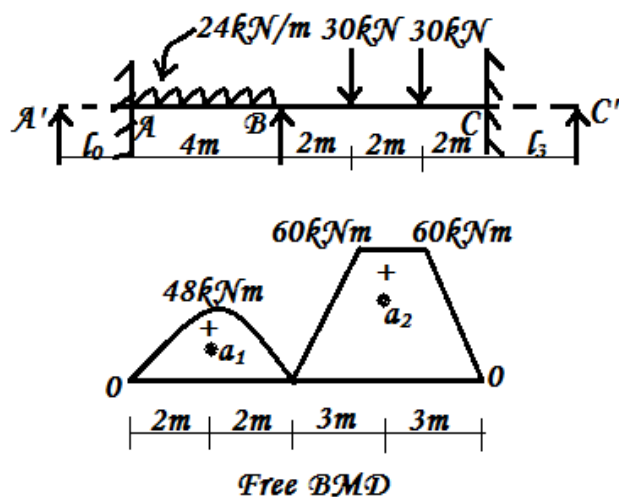
$$M_{AB} = \frac{wl^2}{8} = \frac{24 \times 4^2}{8} = 48 \text{ kNm}$$

Span BC

$$l = 6\text{m}; a = \frac{l}{3} = \frac{6}{3} = 2\text{m}$$

$$M_{BC} = w \cdot a = 30 \times 2 = 60 \text{ kNm}$$

Draw free BMD.



##### II. Support moments:

End A and C are fixed

Hence assume an imaginary beams of  $A^1A$  &  $C^1C$

$$A^1A = l_0 = 0\text{m}; C^1C = l_3 = 0\text{m}; M_{A^1} = M_{C^1} = 0$$

Applying theorem of three moments equation Span A<sup>1</sup>A and AB,

$$AB = l_1 = 6\text{m}$$

$$M_{A'} l_0 + 2M_B (l_0 + l_1) + M_B l_1 = - \left[ \frac{6a_0 \bar{x}_0}{l_0} + \frac{6a_1 \bar{x}_1}{l_1} \right]$$

$$\left[ \frac{6a_0 \bar{x}_0}{l_0} \right] = 0; \quad \left[ \frac{6a_1 \bar{x}_1}{l_1} \right] = \frac{wl^3}{4} = \frac{24 \times 4^3}{4} = 384$$

$$0 + 2 M_A (0+4) + M_B \times 4 = - [0 + 384]$$

$$8 M_A + 4 M_B = - 384$$

$$2 M_A + M_B = - 96 \quad \rightarrow (1)$$

Applying theorem of three moments equation for span AB and BC

$$AB = l_1 = 4\text{m}, BC = l_2 = 6\text{m},$$

$$M_A l_1 + 2M_B (l_1 + l_2) + M_C l_2 = - \left[ \frac{6a_1 \bar{x}_1}{l_1} + \frac{6a_2 \bar{x}_2}{l_2} \right]$$

$$\frac{6a_1 \bar{x}_1}{l_1} = \frac{wl^3}{4} = 384$$

$$a_2 = \left( \frac{(a+b)}{2} \right) h = \frac{2+6}{2} \times 60 = 240$$

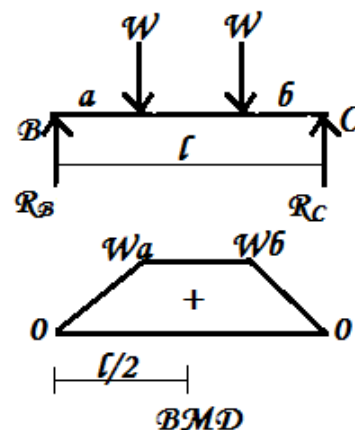
$$\bar{x}_2 = \frac{6}{2} = 3\text{m}$$

$$\frac{6a_2 \bar{x}_2}{l_2} = \frac{6 \times 240 \times 3}{6} = 720$$

$$4 M_A + 2 M_B (4+6) + 6 M_C = - [384 + 720]$$

$$4 M_A + 20 M_B + 6 M_C = - 1104$$

$$2 M_A + 10 M_B + 3 M_C = - 552 \quad \rightarrow (2)$$



Applying theorem of moments equation for span BC and CC<sup>1</sup>

$$BC = l_2 = 6\text{m}, CC^1 = l_3 = 0\text{m},$$

$$M_B l_2 + 2M_C (l_2 + l_3) + M_C l_3 = - \left[ \frac{6a_2 \bar{x}_2}{l_2} + \frac{6a_3 \bar{x}_3}{l_3} \right]$$

$$\frac{6a_2 \bar{x}_2}{l_2} = \frac{6 \times 240 \times 3}{6} = 720; \quad \frac{6a_3 \bar{x}_3}{l_3} = 0;$$

$$6 M_B + 2 M_C (6+0) = - [720+0]$$

$$6 M_B + 12 M_C = - 720$$

$$M_B + 2 M_C = - 120 \quad \rightarrow (3)$$

$$2 M_A + M_B = - 96 \quad \rightarrow (1)$$

$$2 M_A + 10 M_B + 3 M_C = - 552 \quad \rightarrow (2)$$

$$M_B + 2 M_C = -120 \rightarrow (3)$$

Solving equations (1) and (2)

$$(2) \rightarrow 2 M_A + 10 M_B + 3 M_C = -552$$

$$(1) \rightarrow 2 M_A + 0 M_B = -96$$

$$0 + 9 M_B + M_C = -456$$

$$3 M_B + M_C = -152 \rightarrow (4)$$

Solving equation (3) and (4)

$$(4) \times 2 \rightarrow 6 M_B + 2 M_C = -304$$

$$(3) \rightarrow M_B + 2 M_C = -120$$

$$5 M_B + 0 = -184$$

$$M_B = \frac{-184}{5} = -36.80 \text{ kNm}$$

Substituting in (3)

$$M_B + 2 M_C = -120$$

$$-36.80 + 2 M_C = -120$$

$$2 M_C = -120 + 36.80$$

$$2 M_C = -83.20$$

$$M_C = -\frac{83.20}{2} = -41.60 \text{ kNm}$$

Substituting  $M_B$  in (1)

$$2 M_A + M_B = -96$$

$$2 M_A - 36.80 = -96$$

$$2 M_A = -96 + 36.80$$

$$2 M_A = -59.20$$

$$M_A = \frac{-59.20}{2} = -29.60 \text{ kNm}$$

Draw BMD as shown in fig.

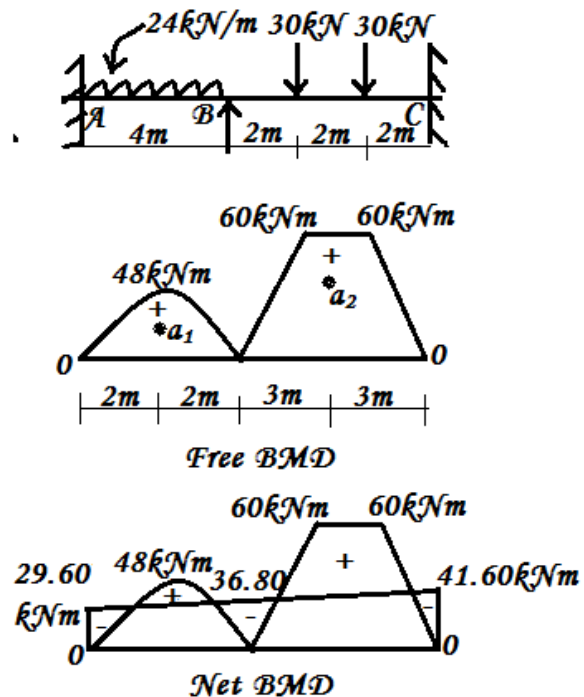
Result:

**Final support moments**

$$M_A = -29.60 \text{ kNm}$$

$$M_B = -36.80 \text{ kNm}$$

$$M_C = -41.60 \text{ kNm}$$



### Three Span Continuous Beam

#### Problem 12:

Draw BMD for a continuous beam ABCD as shown in fig by theorem of three moments method.

#### Solution:

##### I. Free BMD

Span AB

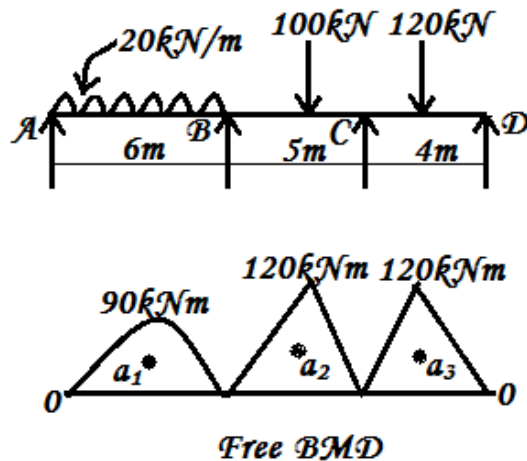
$$M_{AB} = \frac{wl^2}{8} = \frac{20 \times 6^2}{8} = 90 \text{ kNm}$$

Span BC

$$M_{BC} = \frac{Wab}{l} = \frac{100 \times 3 \times 2}{5} = 120 \text{ kNm}$$

Span CD

$$M_{CD} = \frac{Wl}{4} = \frac{120 \times 4}{4} = 120 \text{ kNm}$$



##### II. Support moments:

Since ends A and D are simply supported

$$M_A = 0; M_D = 0$$

Applying theorem of three moments for span AB and BC

$$AB = l_1 = 6\text{m}, BC = l_2 = 5\text{m},$$

$$M_A l_1 + 2M_B (l_1 + l_2) + M_C l_2 = - \left[ \frac{6a_1 \bar{x}_1}{l_1} + \frac{6a_2 \bar{x}_2}{l_2} \right] \rightarrow (I)$$

For standard cases

Simply supported with UDL,  $\left[ \frac{6a \bar{x}}{l} \right] = \frac{wl^3}{4}$  from end 'A'

$$\frac{6a_1 \bar{x}_1}{l_1} = \frac{wl^3}{4} = \frac{20 \times 6^3}{4} = 1080$$

Simply supported beam with non-central load

$$l = 5\text{m}, a = 3\text{m}, b = 2\text{m},$$

$$\left[ \frac{6a \bar{x}}{l} \right] = \left[ \frac{Wb(l^2 - b^2)}{l} \right] \text{ from end 'C'}$$

$$\frac{6a_2 \bar{x}_2}{l_2} = \left[ \frac{Wb(l^2 - b^2)}{l} \right] = \left[ \frac{100 \times 2(5^2 - 2^2)}{5} \right] = 840$$

Applying theorem of three moments:

$$0 + 2M_B (6+5) + M_C \times 5 = - [1080 + 840]$$

$$22M_B + 5M_C = -1920 \rightarrow (1)$$

### Applying theorem of three moments for span BC and CD

$$BC = l_2 = 5\text{m}, CD = l_3 = 4\text{m},$$

$$M_D = 0$$

$$M_B l_2 + 2M_C (l_2 + l_3) + M_D l_3 = - \left[ \frac{6a_2 \bar{x}_2}{l_2} + \frac{6a_3 \bar{x}_3}{l_3} \right] \rightarrow (II)$$

### For standard cases:

Simply supported beam with non-central load

$$l = 5\text{m}, a = 3\text{m}, b = 2\text{m},$$

$$\left[ \frac{6a\bar{x}}{l} \right] = \left[ \frac{Wa(l^2 - a^2)}{l} \right] \text{ from end 'B'.$$

$$\frac{6a_2 \bar{x}_2}{l_2} = \left[ \frac{Wa(l^2 - a^2)}{l} \right] = \left[ \frac{100 \times 3(5^2 - 3^2)}{5} \right] = 960$$

Simply supported with central point load,  $\left[ \frac{6a\bar{x}}{l} \right] = \frac{3}{8} Wl^2$  from end D

$$\left[ \frac{6a_2 \bar{x}_2}{l_2} \right] = \frac{3}{8} Wl^2 = \frac{3}{8} \times 120 \times 4^2 = 720$$

Substituting in equation II

$$5 M_B + 2 M_C (5+4) + 0 = - [960 + 720]$$

$$5 M_B + 18 M_C = - 1680 \rightarrow (2)$$

Solving equations (1) and (2)

$$(2) \times 22 \rightarrow 110 M_B + 396 M_C = - 36960$$

$$(1) \times 2 \rightarrow -110 M_B + 25 M_C = - 9600$$

$$0 + 371 M_C = - 27360$$

$$M_C = \frac{-27360}{371} = - 73.75$$

$$M_C = - 73.75\text{kNm}$$

Substituting value of  $M_C$  in equation (3)

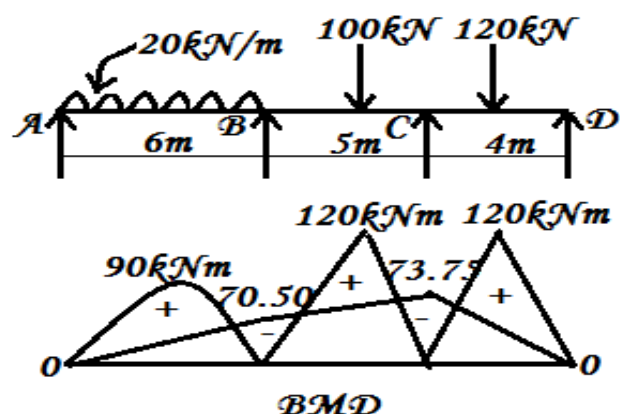
$$5 M_B + 18 \times (-73.75) = - 1680$$

$$5 M_B = - 1680 + 1327.5 = - 352.50$$

$$M_B = \frac{-352.50}{5} = - 70.50$$

$$M_B = - 70.50\text{kNm}$$

**Draw SFD and BMD:**



**Result:****Final support moments:**

$$M_A = 0$$

$$M_B = + 70.50 \text{ kNm}$$

$$M_C = - 73.75 \text{ kNm}$$

$$M_D = 0$$

**Propped Cantilever Beam**

(By theorem of three moments method)

**Problem 13:**

A cantilever beam of span 6m is propped at 2m from free end it carries an UDL of 12kN/m over its entire span. Determine

- The prop. Reaction
- Support moments and
- Draw SFD and BMD by theorem of three moment method.

**Given:**

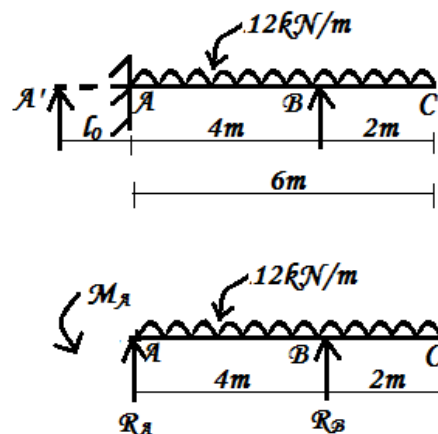
Span  $l = 4\text{m}$ ; Projection =  $2\text{m}$ ; UDL,  $w = 12\text{kN/m}$

**Solution:****i. Free BMD:****Span AB**

$$M_{\max} = \frac{wl^2}{8} = \frac{12 \times 4^2}{8} = 24 \text{ kNm};$$

**Span BC**

$$M_B = - \frac{wX^2}{2} = \frac{12 \times 2^2}{2} = -24 \text{ kNm}.$$

**ii. Support moments:**

Since end A is fixed assume an imaginary beam of  $A^1A$

$$A^1A = l_0 = 0\text{m};$$

Applying theorem of three moments equation of span  $A^1A$

$$M_{A^1} = 0\text{m}; AB = l_1 = 4\text{m}$$

$$M_{A^1} l_0 + 2M_B (l_0 + l_1) + M_B l_1 = - \left[ \frac{6a_0 \bar{x}_0}{l_0} + \frac{6a_1 \bar{x}_1}{l_1} \right] \rightarrow (I)$$

**For standard cases:**

$$\left[ \frac{6a_0 \bar{x}_0}{l_0} \right] = 0; \left[ \frac{6a_1 \bar{x}_1}{l_1} \right] = \frac{wl^3}{4} = \frac{12 \times 4^3}{4} = 192$$

$$0 + 2 M_B (0+4) + M_B \times 4 = - [0 + 192]$$

$$M_A + 4 M_B = -192$$

$$2 M_A + 4(-24) = -192$$

$$M_A = \frac{-192 + 96}{2} = -48 \text{ kNm}$$

iii. **Prop reaction:**

Let  $R_B$  = prop reaction at B;  $R_A$  = reaction at A

Taking moment about A

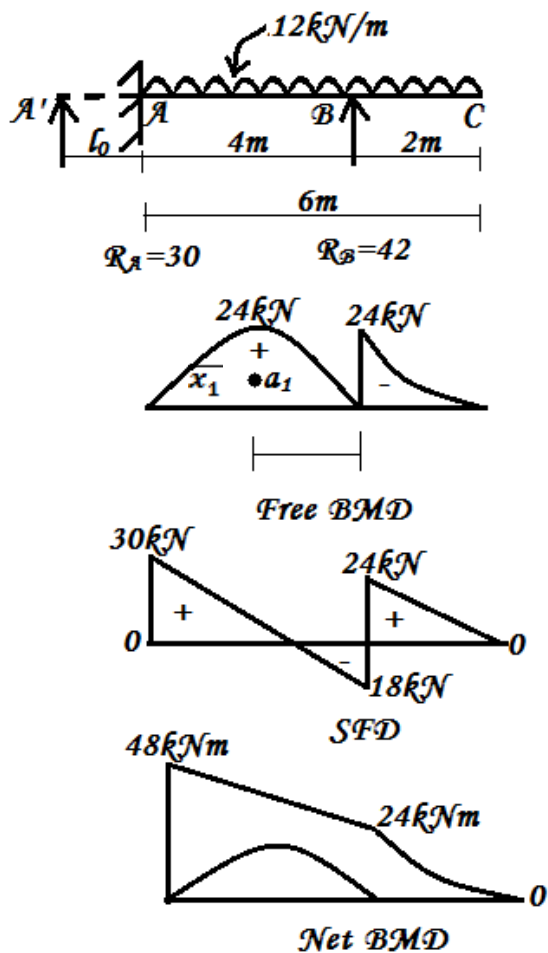
$$R_B \times 4 + M_A = 12 \times 6 \times \frac{6}{2}$$

$$4 R_B + 48 = 216$$

$$R_B = \frac{-192 + 96}{2} = 42 \text{ kNm}$$

$$R_A = \text{Total load} - R_B = (12 \times 6 - 42) = 30 \text{ kNm}$$

Draw SFD and BMD as shown in fig



iv. **Results:**

$$M_A = -48 \text{ kNm}; \quad M_B = -24 \text{ kNm}$$

$$R_A = 30 \text{ kNm}; \quad R_B = 42 \text{ kNm}.$$

## HIGH LIGHTS

### Statement of Clapeyron's Theorem of three moments.

Clapeyron's theorem states that if a beam has 'n' supports, the end being fixed then the same number of equations required to determining the support moments may be obtained from the consecutive pairs of spans i.e. AB-BC, BC-CD, CD-DE and so on. Continuous beam ABC loaded as shown in fig.

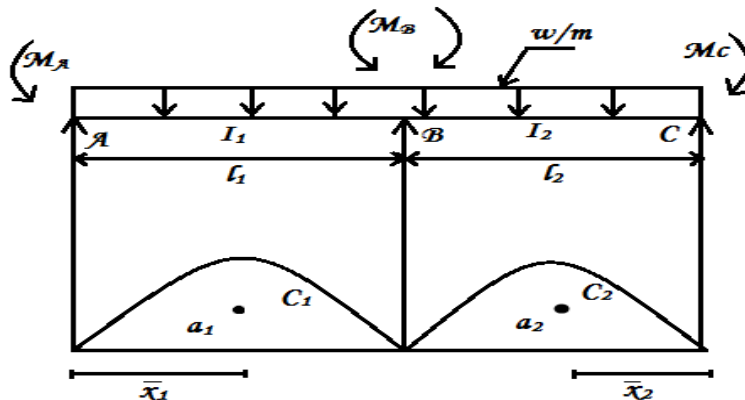
$$M_A l_1 + 2M_B (l_1 + l_2) + M_C l_2 = - \left( \frac{6a_1 \bar{x}_1}{l_1} + \frac{6a_2 \bar{x}_2}{l_2} \right)$$

Where,

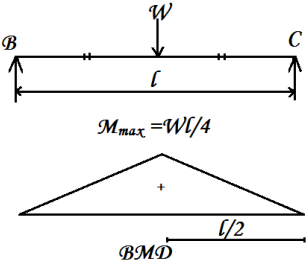
$a_1$  = area of free BMD for span AB

$a_2$  = area of fixed BMD for span BC

$\bar{x}_1$  = c.g. of BMD from left end (A)

$$\bar{x}_2 = \text{c.g. of BMD from right end (C)}$$


### Area of Free BMD for standard cases

Sl.no	Types of Beam	$\frac{6ax}{l}$ from left end	$\frac{6ax}{l}$ from right end	BMD
1.	Simply supported beam with central point load	$\frac{3}{8}wl^2$	$\frac{3}{8}wl^2$	 <p>Diagram of a simply supported beam of length <math>l</math> with a central point load <math>W</math>. The maximum bending moment is <math>M_{max} = Wl/4</math>. The bending moment diagram (BMD) is shown as a triangle with a peak at the center and a base of <math>l/2</math>.</p>



2.	Simply supported beam with UDL of $w/m$	$\frac{wl^3}{4}$	$\frac{wl^3}{4}$	
3.	Simply supported beam with non-central load	$\frac{Wa(l^2 - a^2)}{l}$	$\frac{Wb(l^2 - b^2)}{l}$	

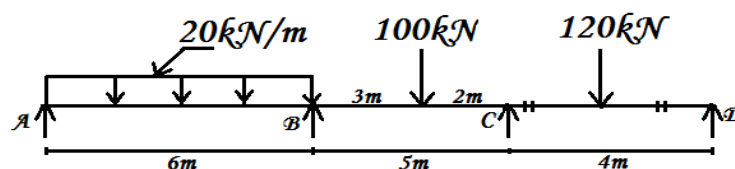
### QUESTIONS

#### Two mark questions

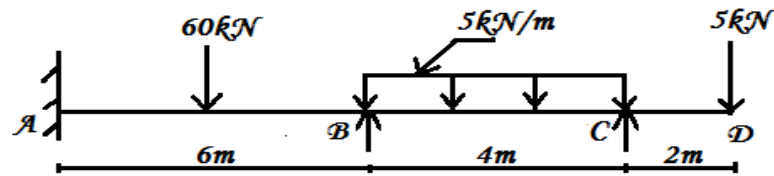
1. State the degree of indeterminacy of a fixed beam
2. When a beam is called indeterminate?
3. Give two examples of indeterminate beams.
4. Where the (-ve) moment is maximum in a two span continuous beam having simple supports at the ends?
5. State the application of theorem of three moment equation for continuous beams with fixed ends.

#### Ten mark questions

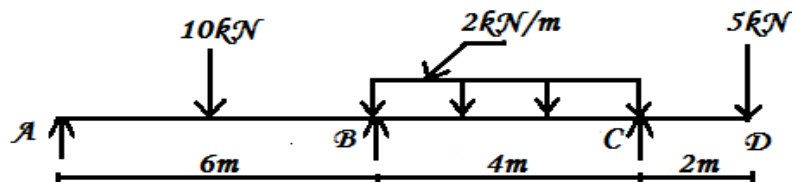
1. A continuous beam ABCD of length 12m is simply supported by three supports at A, B and C with an equal spacing of 5m. It carries an UDL of intensity 20kN/m over the two spans. There is 30kN load on the free end, D. Analyse the beam using Clapeyron's Theorem and draw the SF and BM diagram.
2. A continuous beam ABC is simply supported at A and C such that  $AB = 6m$  and  $BC = 5m$ . The span AB carries an UDL of 20kN/m and the span BC carries a point load of 50kN at its mid - span. Find the support moments by theorem of three moments. Draw the BMD and SFD.
3. A continuous beam ABC of length 8m has two equal spans. The AB carries an UDL of 20kN/m over its entire length and span BC carries a point load of 20kN at 3m from B. Draw the BMD and SFD. Apply theorem of three moments method. End A & C are simply supported.
4. A continuous beam ABCD of length 9m is fixed at A and simply supported at C. The span AB of length 6m carries a point load of magnitude 40kN at 2m from A. The span BC of length 3m carries an UDL of intensity 20kN/m. The size of beam is uniform throughout its length. Analyse the beam using three moments and draw the BMD and SFD diagrams.
5. Analyse the continuous beam shown in fig. By the use of Clapeyron's theorem of three moments. Draw the BMD.



6. Analyse the continuous beam shown in fig. by the use of Clapeyron's Theorem of three moments. Take  $EI$  constants. Draw the BMD.



7. Determine the support moments for the beam shown in figure by Clapeyron's theorem of three moments. Draw the bending moment diagram.  $EI$  is constant.



8. A continuous beam ABC of length 8m has two equal spans. The span AB carries an UDL of 20kN/m over its entire length and the span carries a point load of 20kN at 3m from B. Draw SFD and BMD. Take ends A & C are simply supported. Apply theorem of three moments.

9. A continuous beam ABC of span 10m is fixed at end A and simply supported at C span AB is 4m long and carries an UDL of 30kN/m over entire span and span BC carries a point load of 60kN at 2.5m from B. Determine the support moments by using theorem of three moments. Draw BMD.

10. A continuous Beam ABC is fixed at A and C simply supported at B each span AB and BC is 6m. The span AB carries an UDL of 20kN/m and span BC carries a point load of 60kN at mid - span. Using theorem of three moments find support moments. Draw SFD and BMD.

11. A continuous beam ABC of uniform section, with span AB as 6m is fixed at A and simply supported at B and C. The beam carries an UDL of 10kN/m and span BC carries an UDL of 5kN/m. it also carries a point load of 20kN at 2m from the end C. Find the support moments using three moment equation. Draw SFD and BMD.

### 3.1 CONTINUOUS BEAMS – MOMENT DISTRIBUTION METHOD

#### **Introduction:**

The moment distribution method was first introduced by Prof. Hardy cross, an American structural engineer in 1930. It is also popularly known as Hardy cross method and widely used for the analysis of all indeterminate structure like continuous beams and portal frames.

#### **Concept:**

- The moment distribution method consists of successive approximations using a series of cycles, each converging towards a precise final result.
- It is initially assumed that all the joints are fixed or clamped and then the fixed end moments (FEM) due to external loads are calculated and those calculated moments at every joint are checked for equilibrium after releasing the initially introduced clamps by applying equal and opposite moment to balance a joint and evaluating its effects on opposite joints.

The process is repeated till the required accuracy is got.

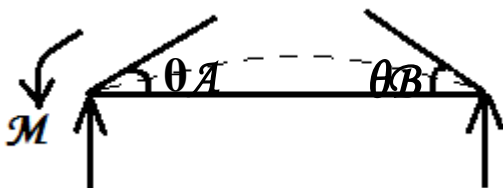
#### **Fundamental concepts:**

- 1) Beam stiffness
- 2) Relative stiffness or stiffness ratio
- 3) Distribution factor
- 4) Distribution moment
- 5) Carryover moment
- 6) Carryover factor

#### **1). Beam stiffness:**


Stiffness is a measure of resistance of a structural member for deflection.

(a). Stiffness of a beam hinged at both ends:



Stiffness of a beam hinged at both ends,  $k = \frac{3EI}{l}$

(b). Stiffness of a beam hinged at near end and fixed at far end (k):



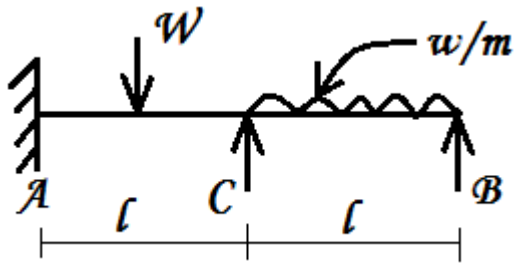
Stiffness of a beam hinged at near end and fixed at far end,

$$k = \frac{4EI}{l}$$

#### **2). Relative stiffness:**

The ratio of stiffness of various members meeting at a structural joint is known as “relative stiffness”.

**Explanation:**



For the continuous beam shown in fig, B is the joint where members BA & BC meet.

Stiffness of BA =  $\frac{4EI}{l}$  (far end A is fixed)

Stiffness of BC =  $\frac{3EI}{l}$

Relative stiffness

Stiffness of BA: Stiffness of BC

$$\frac{4EI}{l} : \frac{3EI}{l}$$

If the beam is made of same material, then relative stiffness

$$= \frac{4EI}{l} : \frac{3EI}{l}$$

(Or)

Dividing by 4,

Relative stiffness

$$= \frac{I}{l} : \frac{3I}{4l}$$

### **3). Distribution factor:**

The ratio of stiffness of a member meeting at a structural joint to the sum of the stiffness of all members meeting at that joint is known as “distribution factor”.

For ex:

$$D.F_{BA} = \frac{K_{BA}}{\sum K}$$


### **4). Distribution moment:**

The moment shared by a member at a joint in proportion to its stiffness or in relation to its distribution factor (D.F) is known as “distribution moment”. It is also known as “balancing moment”.

### **5). Carryover moment:**


The moment produced at the far end of a beam due to application of a moment at the near end is called “carryover moment”.

i. When the far end is fixed:



The carry over moment is  $\frac{1}{2}$  the applied moment in the same direction.

ii. When the far end is hinged:



No carryover

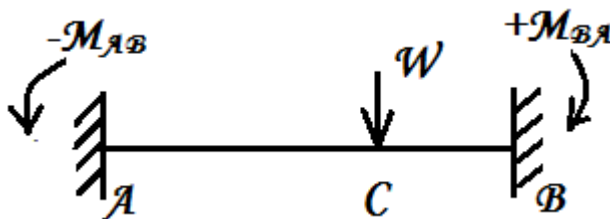
There is no carry over. When the far end is hinged.

### 6). Carry over factor:

The ratio of carry over moment at the far end to the applied moment at the near end is known as carry over factor.

$$\text{Carry over factor} = \frac{\text{Carry Over Moment}}{\text{Applied Moment}}$$

### Sign convention:



The new sign convention different from conventional sign is followed in the process of moment – distribution method. After the analysis is over, the end moments are converted back to conventional bending moments by merely changing the sign to the left of each span.

Based on rotational sense, Clockwise moments are +ve, anticlockwise moments are –ve as shown in figure.

### Moment distribution method procedure (Theory):

- 1) Assume all the supports (joints) are fixed.
- 2) Calculate the **fixed end moments (FEM)** due to external loads considering each span as a separate fixed beam.
- 3) Calculate the stiffness, relative stiffness and hence the **distribution factors** of members meeting at each intermediate joint.

### **Note:**

- i. D.F of a member at its fixed end is zero.
- ii. D.F of a member at its hinged end is one.
- iii. D.F of an overhanging member at its joint is zero.

- 4) Prepare a moment – distribution table in tabular form and enter D.F & F.E.M with proper signs.
- 5) Release each clamped support in succession. Distribute the unbalanced moment at each joint among the connecting members according to their distribution factor with a sign opposite to the unbalanced moment. This is called as 'Balancing the joint'.
- 6) Do **carry over**, one half of each distributed moment with the **same sign** to the farther end of each span.

**Note:**

- i. Do carry over to farther fixed ends and intermediate supports only.
  - ii. Do not do carry over to farther simply supported end and farther overhanging ends.
- This completes one cycle of moment distribution.

7) The carry over moments in step 6 cause new unbalanced moments. Hence perform distribution and carry over as explained in steps 5&6 to complete the second cycle.

8) Repeat the process of distribution and carryover until the carry over moments become zero or negligibly small.

**Note:**

- i. The accuracy depends upon the no. of cycles.
- ii. Generally 4 or 5 cycles will be sufficient as the unbalanced moments caused by carryover decrease rapidly.

9) Stop the process with distributor at the intermediate supports when the end supports are simply supported.

(Or)

With carry over to the fixed ends when the supports are fixed.

10) Arrive at the final moments at each joint by finding the algebraic sum of moments in each vertical column.

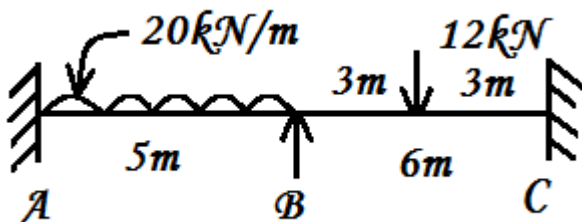
11) Change the signs of final moments to the left of the support to get conventional moments.

### **APPLICATION OF MOMENT – DISTRIBUTION TO TWO SPAN CONTINUOUS BEAMS**

#### **Worked examples**

#### **CONTINUOUS BEAM WITH FIXED ENDS**

- 1) A continuous beam ABC is fixed at A & C. It is loaded as shown in fig. Calculate the support moments and draw SFD & BMD. Assume EI as constant.

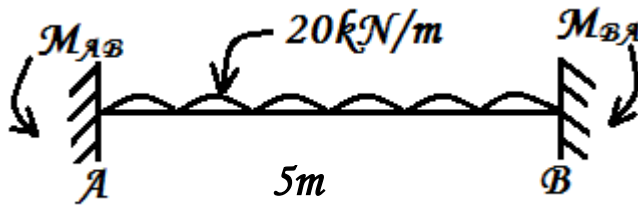


#### **Step 1: Fixed end moments**

Considering each span as fixed.

### Span AB:

Adopting clockwise as +ve & anticlockwise as -ve.



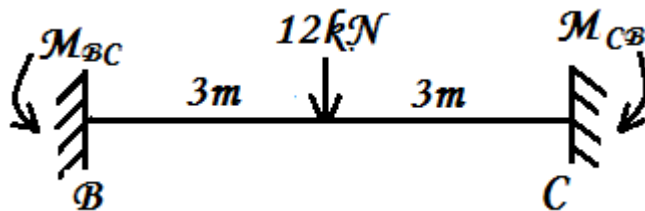
$$M_{AB} = \frac{-wl^2}{12} = -\frac{20 \times 5^2}{12}$$

$$= -41.67 \text{ kNm}$$

$$M_{BA} = \frac{+wl^2}{12} = +\frac{20 \times 5^2}{12}$$

$$= +41.67 \text{ kNm}$$

### Span BC:



$$M_{BC} = \frac{-wl}{8} = \frac{-12 \times 6}{8}$$

$$= -9 \text{ kNm}$$

$$M_{CB} = \frac{+wl}{8} = \frac{+12 \times 6}{8}$$

$$= +9 \text{ kNm}$$

### Step 2: Distribution Factor

#### (1) Joint: Only one joint: B

Joint	Member	Stiffness	Relative stiffness (k)	$\Sigma k$	Distribution factor (D.F)
B	BA	$\frac{4EI}{l} = \frac{4EI}{5}$ (far end A is fixed)	$K_{BA} : K_{BC}$ $\frac{4EI}{5} : \frac{4EI}{6}$	$= K_{BA} + K_{BC}$ $= 6 + 5$ $= 11$	$D.F_{BA} = \frac{K_{BA}}{\Sigma k}$ $= 6/11$
	BC	$\frac{4EI}{l} = \frac{4EI}{6}$ (far end C is fixed)	6:5		$D.F_{BC} = \frac{K_{BC}}{\Sigma k}$ $= 5/11$

## (2) Supports (A & C):

A & C are end supports and they are fixed supports. No distribution is done at the fixed ends and D.F at the fixed ends are 0.

### Step 3: Moment distribution table

	(support) A	(joint) B	(support) C
Member	AB	BA	BC      CB
Distribution factor (D.F)	0	6/11	5/11      0
Fixed end moments (FEM)	-41.67	+41.67	-9.00      +9.00
I Distribution at B Carry Over (C.O) to A & C	0.00	-17.82	-14.85      0.00
	-8.91		-7.43
Final moments (algebraic sum)	-50.58	+23.85	-23.85      +1.57
Conventional BM (change the sign at left of B & C)	-50.58	-23.85	-23.85      -1.57

### Moment distribution process (explanation):

- A moment distribution table is prepared and FEM & DF are entered.
- A & C are fixed supports. Hence there is no distribution at A & C.
- At joint B,

Unbalanced moment = +41.67 – 9.00 = +32.67

∴ Balancing moment at B = - 32.67

I distribution to BA (acc to  $DF_{BA}$ ) =  $\frac{6}{11} \times -32.67 = -17.82$

I distribution to BC (acc to  $DF_{BC}$ ) =  $\frac{5}{11} \times -32.67 = -14.85$

These values are entered in second step at table. (acc – according)

- The far ends A & C are fixed. Hence one half of distributed moments with the same sign are carried over (C.O) to A & C.

C.O to A from B =  $-17.82 \times \frac{1}{2} = -8.91\text{kNm}$

C.O to C from B =  $-14.85 \times \frac{1}{2} = -7.43\text{kNm}$

These values are entered in the third step.

- Since there is no chance for further distribution or carry over, the process comes to a halt and the process is stopped.
- To get the final moments, all the moments at each support are algebraically added.
- To get back the conventional moments, the sign of final moments to the left of each support are changed. (Here +sign to – sign).



**BMD:**

Superpose the free BMD & fixed BMD.

**Free BMD:**

Span AB

$$\text{Max free BM at D} = \frac{+wl^2}{8} = \frac{+20 \times 5^2}{8}$$

$$= + 62.5\text{kNm}$$

Span BC

$$\text{Max free BM at E} = \frac{+Wl}{4} = \frac{+12 \times 6}{4}$$

$$= 18\text{kNm}$$

**Fixed BMD:**

$$M_A = - 50.58\text{kNm}$$

$$M_B = - 23.85\text{kNm}$$

$$M_C = - 1.57\text{kNm}$$

**SFD:**

Let  $V_A$ ,  $V_B$  &  $V_C$  be the vertical support reactions.

(i). Taking moments about B & considering left of B.

$$R_A \times 5 - M_{AB} - (20 \times 5 \times 5/2) + M_{BA} = 0$$

$$5R_A - 50.58 - 250 + 23.85 = 0$$

$$R_A = 55.35\text{kN}(\uparrow)$$

(ii). Again taking moments about B & considering right of B.

$$-R_C \times 6 + M_{CB} + 12 \times 3 - M_{BC} = 0$$

$$-6R_C + 1.57 + 36 - 23.85 = 0$$

$$R_C = 2.29\text{kN}(\uparrow)$$

From  $\Sigma V = 0$

$$R_A + R_B + R_C - 20 \times 5 - 12 = 0$$

$$55.35 + R_B + 2.29 - 100 - 12 = 0$$

$$R_B = 54.36\text{kN}$$

**Shear force ( $V_x$ ):**

$$V_A = + R_A = + 55.35\text{kN}$$

$$V_B(L) = + R_A - 20 \times 5 = + 55.35 - 100$$

$$= -44.65 \text{ kN}$$

$$V_B(R) = +R_A - 20 \times 5 + R_B = +55.35 - 100 + 54.36$$

$$= +9.71 \text{ kN}$$

$$V_E(L) = V_B(R) = +9.71 \text{ kN}$$

$$V_E(R) = V_E(L) - 12 = +9.71 - 12$$

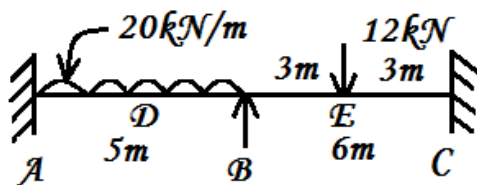
$$= -2.29 \text{ kN}$$

$$V_C(L) = V_E(R) = -2.29 \text{ kN}$$

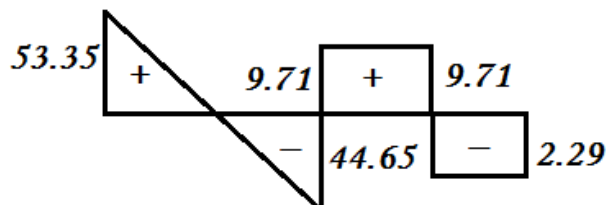
$$V_C(R) = 0$$

Complete SFD.

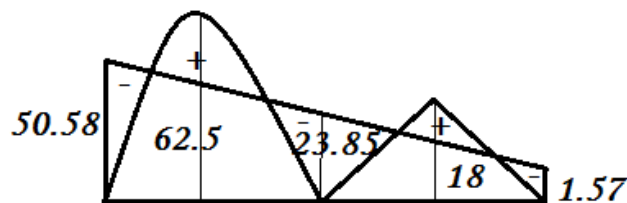
**Results:**



*Loading diagram*



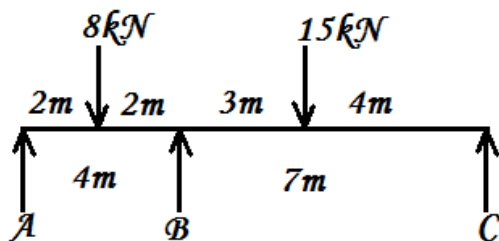
*SFD*



*BMD*

#### **CONTINUOUS BEAM WITH SIMPLY – SUPPORTED ENDS**

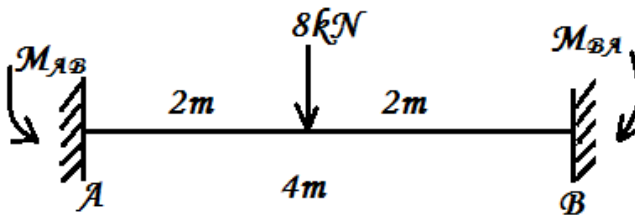
- 2) For the continuous beam ABC shown in fig, find the support moments by moment – distribution method. Draw BMD.



**Solution:****Step 1: Fixed end moments**

Considering each span as fixed.

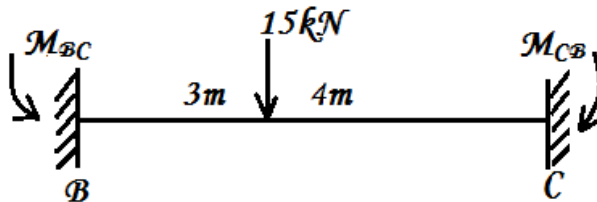
Span AB



$$M_{AB} = \frac{-Wl}{8} = \frac{-8 \times 4}{8} = -4 \text{ kNm}$$

$$M_{BA} = \frac{+Wl}{8} = +4 \text{ kNm}$$

Span BC



$$M_{BC} = \frac{-Wab^2}{l^2} = \frac{-15 \times 3 \times 4^2}{7^2}$$

$$= -14.69 \text{ kNm}$$

$$M_{CB} = \frac{+Wab^2}{l^2} = \frac{+15 \times 3^2 \times 4}{7^2} = +11.02 \text{ kNm}$$

**Step 2: Distribution Factor (D.F)**

(1). Joint: Only one joint B

Joint	Member	Stiffness	Relative stiffness (k)	$\Sigma k$	Distribution factor (D.F)
B	BA	$K_{BA} = \frac{3EI}{l}$ $= \frac{3EI}{4}$ (since far end A is simply supported)	$K_{BA} : K_{BC}$ $\frac{3EI}{4} : \frac{3EI}{7}$ 7:4	$= K_{BA} + K_{BC}$ $= 7 + 4$ $= 11$	$D.F_{BA} = \frac{K_{BA}}{\Sigma k}$ $= 7/11$
	BC	$K_{BC} = \frac{3EI}{l}$ $= \frac{3EI}{7}$ (since far end C is simply supported)			$D.F_{BC} = \frac{K_{BC}}{\Sigma k}$ $= 4/11$

## (2). End supports (A & C)

A & C are simply supported ends. The distribution factor is 1.

$$\therefore D.F_{AB} = 1 ; D.F_{CB} = 1$$

### Step 3: Moment – distribution table

	(support) A		(joint) B		(support) C	
Member	AB	BA	BC	CB		
Distribution factor(D.F)	1	7/11	4/11	1		
Fixed end moments (FEM)	-4.00	+4.00	-14.69	+11.02		
Release simple supports A & C.	+4.00	C.O to B 2.00	-5.51	← C.O to B 11.02		
Adjusted initial FEM I distribution at B	0.0	+6.00 +9.04	-20.20 +5.16	0.00		
Final moments (algebraic sum)	0.00	+15.04	-15.04	0.00		
Conventional moments	0.00	-15.04	-15.04	0.00		

### Moment distribution process (Explanation):

- A moment distribution table is prepared and FEMs & DFs are entered.
- A & C are simply supported ends. The BM at A & C should be 0. Hence A & C are released by applying balancing moments of 4.00kNm at A and -11.02kNm at C and half their amounts are carried over with the same sign to B and thus the FEMs are adjusted and entered in the third row.
- Now the joint B is unbalanced

$$\text{Unbalanced moment at B} = +6.00 - 20.20 = -14.20\text{kNm}$$

$$\therefore \text{Balancing moment at B} = +14.20\text{kNm}$$

$$\text{I distribution to BA (acc to } D.F_{BA}) = +14.20 \times \frac{7}{11} = +9.03 \text{ kNm}$$

$$\text{I distribution to BC (acc to } D.F_{BC}) = +14.20 \times \frac{4}{11} = +5.16 \text{ kNm}$$

- Since there is no chance for further distribution & C.O, the process is stopped.
- To get the final moments, the moments at each support are algebraically added.
- To get back the conventional moments the sign of final moments to the left of each support are changed. (Here +sign to –sign).

### BMD:

#### (1). Free BMD

Consider each span as simply supported.

Span AB

$$M_{\max} = \frac{+wl^2}{4} = \frac{+8 \times 4}{4} = +8\text{kNm}$$

Span BC

$$M_{\max} = \frac{+Wab}{l} = \frac{+15 \times 3 \times 4}{7} = +25.71 \text{ kNm}$$

Complete free BMD

**(2). Fixed BMD**

$$M_A = 0$$

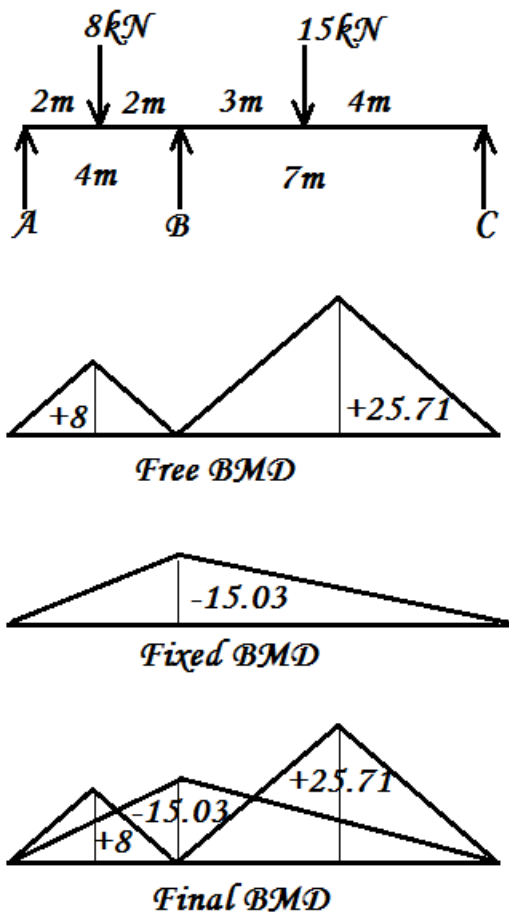
$$M_B = -15.04 \text{ kNm}$$

$$M_C = 0$$

Complete fixed BMD.

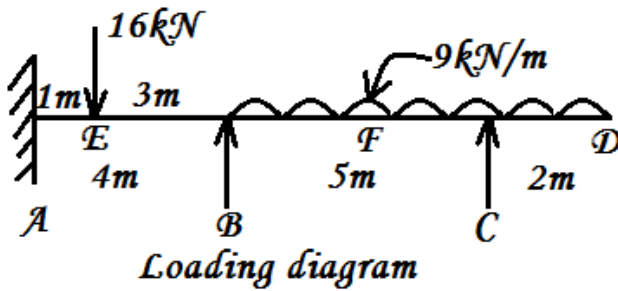
Superpose fixed BMD over free BMD to get BMD.

**Complete final BMD**



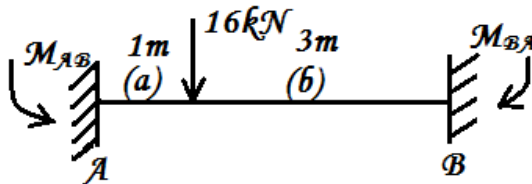
### CONTINUOUS BEAMS WITH OVERHANGS

- 1) A continuous beam ABCD is fixed at A, simply supported at B, C & free at D. It is loaded as shown in fig. EI is constant throughout. Calculate the support moments and draw SFD & BMD.



#### Step 1: Fixed end moments

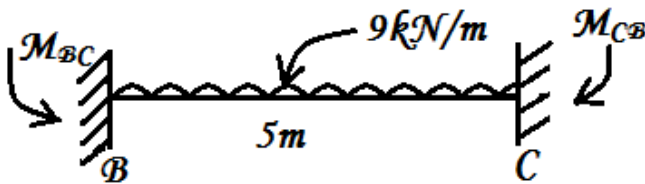
Span AB



$$M_{AB} = \frac{-Wab^2}{l^2} = \frac{-16 \times 1 \times 3^2}{4^2} = -9 \text{ kNm}$$

$$M_{BA} = \frac{+Wa^2b}{l^2} = \frac{+16 \times 1^2 \times 3}{4^2} = +3 \text{ kNm}$$

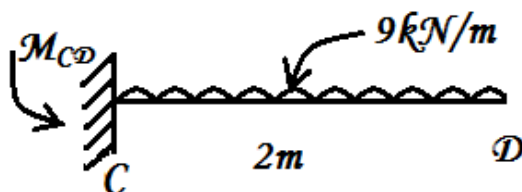
Span BC



$$M_{BC} = \frac{-wl^2}{12} = \frac{-9 \times 5^2}{12} = -18.75 \text{ kNm}$$

$$M_{CB} = \frac{+wl^2}{12} = +18.75 \text{ kNm}$$

Span CD



It behaves like a cantilever.

$$M_{CD} = \frac{-wl^2}{2} = \frac{-9 \times 2^2}{2} = -18 \text{ kNm}$$

$$M_{DC} = 0 \text{ (free end)}$$

### Step 2: Distribution factor (D.F)

Joint B & C.

Joint	Member	Stiffness	Relative stiffness (k)	$\Sigma k$	Distribution factor (D.F)
B	BA	$K_{BA} = \frac{4EI}{l}$ $= \frac{4EI}{4}$ (since far end A is fixed)	$K_{BA} : K_{BC}$ $\frac{4EI}{4} : \frac{3EI}{5}$ 1: 3/5	$= K_{BA} + K_{BC}$ $= 5 + 3$ $= 8$	$D.F_{BA} = \frac{K_{BA}}{\Sigma k}$ $= 5/8$
	BC	$K_{BC} = \frac{3EI}{l}$ $= \frac{3EI}{5}$ (since far end C is simply supported)	5:3		$D.F_{BC} = \frac{K_{BC}}{\Sigma k}$ $= 3/8$
C	CB	1	1:0	1	$D.F_{CB} = 1$
	CD	0			$D.F_{CD} = 0$

### Step 3: Moment distribution table

A                      B                      C                      D

Member	AB	BA	BC	CB	CD	DC
Distribution factors	0	5/8	3/8	1	0	
Fixed end moments (FEM)	-9.00	+3.00	-18.75	+18.75	-18.00	
Release C & C.O to B			-0.38	-0.75 ←		
Initial/ Adjusted FEM I distribution at B	-9.00	+3.00	-19.13			
		+10.08	+6.05			
Carry over (To A from B)	+5.04	-	-		-	-
Final moments ( $\Sigma$ ) (algebraic sum)	-3.96	+13.08	-13.08	+18.00	-18.00	0
Conventional moments	-3.96	-13.08	-13.08	-18.00	-18.00	0

Σ  
↓

**SFD:**

Left of B

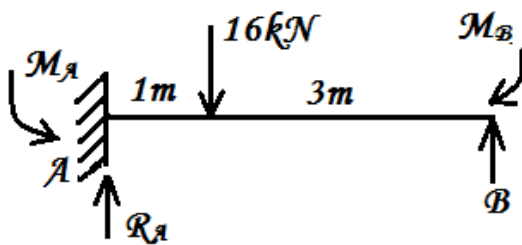
Considering left of B and taking moments about B.

$$M_A + R_A \times 4 - 16 \times 3 + M_B = 0$$

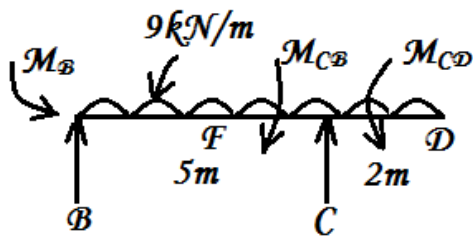
$$-3.96 + R_A \times 4 - 48 + 13.08 = 0$$

$$4R_A = 38.88$$

$$R_A = 9.72 \text{ kN}(\uparrow)$$



Considering right of B



Taking moments about B

$$-M_B + 9 \times 7 \times 7/2 - R_C \times 5 = 0$$

$$-13.08 + 220.5 - 5R_C = 0$$

$$R_C = 41.48 \text{ kN}(\uparrow)$$

From  $\Sigma V = 0$

$$R_A + R_B + R_C = 16 + 9 \times 7$$

$$9.72 + R_B + 41.48 = 79$$

$$R_B = 27.8 \text{ kN}$$

**Shear force ( $V_x$ ):**

$$V_A(L) = 0$$

$$V_A(R) = + R_A = + 9.72 \text{ kN}$$

$$V_E(L) = V_A(R) = + 9.72 \text{ kN}$$

$$V_E(R) = V_E(L) - 16 = + 9.72 - 16$$



$$= -6.28 \text{ kN}$$

$$V_B(L) = V_E(R) = -6.28 \text{ kN}$$

$$V_B(R) = V_E(R) + R_B = -6.28 + 27.8$$

$$= +21.52 \text{ kN}$$

$$V_C(L) = V_B(R) - 9 \times 5 = +21.52 - 45$$

$$= -23.48 \text{ kN}$$

$$V_C(R) = V_C(L) + R_C = -23.48 + 41.48$$

$$= +17.7 \text{ kN}$$

$$V_D = 0$$

Complete SFD.

### **BMD:**

**Span AB** – free BMD (sagging BM)

Max free BM for span AB

$$= \frac{+Wab}{l} = \frac{+16 \times 1 \times 3}{4}$$

$$= +12 \text{ kNm}$$

### **Span BC**

Max free BM for span BC

$$= \frac{+wl^2}{8} = \frac{+9 \times 5^2}{8}$$

$$= +28.13 \text{ kNm}$$

### **Span CD**

No free BM since it behaves like a cantilever.

Fixed BMD (hogging BM)

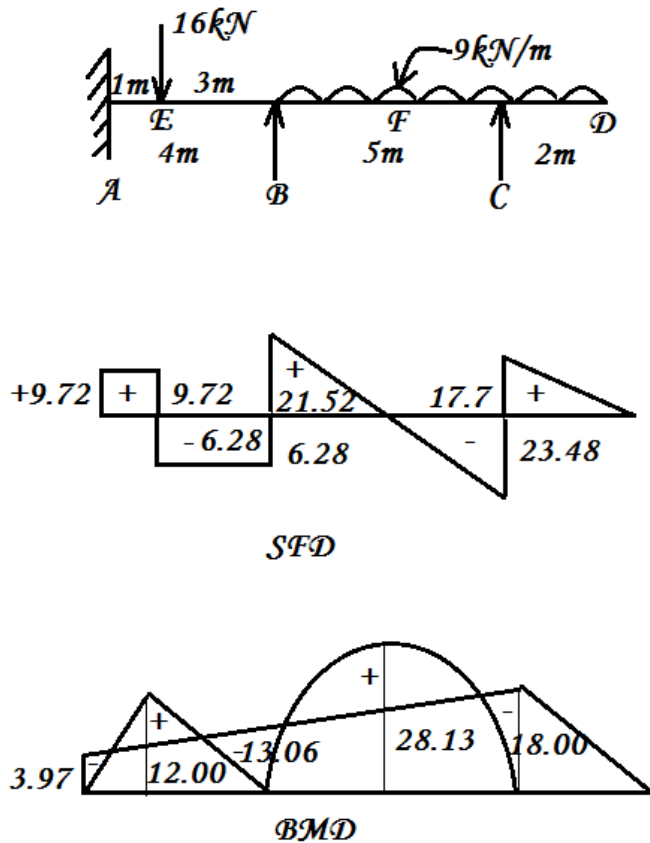
$$\text{At support A } M_A = -3.97$$

$$\text{At support B } M_B = -13.06$$

$$\text{At support C } M_C = -18.00$$

Complete BMD by superposing fixed BMD over free BMD.

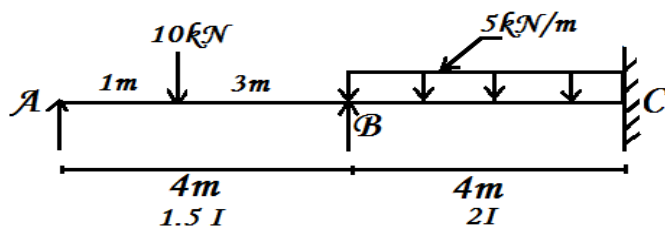
**Final BMD:**



## TWO – SPAN CONTINUOUS BEAMS

(EI not constant: EConstant, I Varying)

4. Find the support moments for the continuous beam loaded as shown in fig.

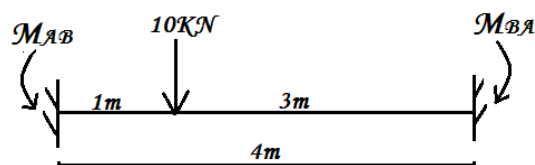


**Solution:**

**Step 1: Fixed End Moments:**

**Span AB:**

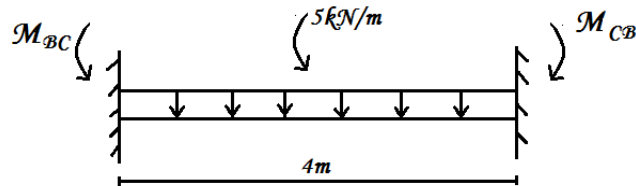
$$\begin{aligned}
 M_{AB} &= -\frac{Wab^2}{l^2} \\
 &= -\frac{10 \times 1 \times (3)^2}{4^2} \\
 &= -5.63 \text{ kNm.}
 \end{aligned}$$



$$\begin{aligned}
 M_{BA} &= +\frac{W a^2 b}{l^2} \\
 &= +\frac{10 \times 1^2 \times 3}{(4)^2} \\
 &= +1.88 \text{ kNm.}
 \end{aligned}$$

**Span BC:**

$$\begin{aligned}
 M_{BC} &= -\frac{w l^2}{12} \\
 &= -\frac{5 \times (4)^2}{12} \\
 &= -6.67 \text{ kNm.}
 \end{aligned}$$



$$\begin{aligned}
 M_{CB} &= +\frac{w l^2}{12} \\
 &= +6.67 \text{ kNm.}
 \end{aligned}$$

**Step 2: Distribution Factors (DF):**

**1. Joints (Only one joint B)**

Joint	Member	Stiffness	Relative Stiffness	$\sum k$	D.F = $k/\sum k$
B	BA	$K_{BA} = \frac{3EI}{l}$ <p>(since A is simply supported)</p> $= \frac{3E(1.5I)}{l}$ $= \frac{4.5EI}{4}$	$K_{BA} : K_{BC}$ $= \frac{4.5EI}{4} : \frac{8EI}{4}$ $4.5 : 8$ <p>(i.e.) 9 : 16</p>	$9 + 16$ $= 25$	$DF_{BA} = \frac{k_{BA}}{\sum k}$ $= \frac{9}{25}$
	BC	$K_{BC} = \frac{4EI}{l}$ <p>(since C is fixed)</p> $= \frac{4E(2I)}{l}$ $= \frac{8EI}{4}$			$DF_{BC} = \frac{k_{BC}}{\sum k}$ $= \frac{16}{25}$

**2. End supports:**

- i. A is simply supported  $\therefore DF_{AB} = 1$
- ii. C is fixed  $\therefore DF_{CB} = 0$



**Step 3: Moment Distribution Table:**

A

B

C



Member	AB	BA	BC	CB
Distribution Factor	1	9/25	16/25	0
FEM	-5.63	+1.88	-6.67	+6.67
Release A & C.O to B	+5.63	2.82 		
Initial / Adjusted FEM	0.00	+4.70	-6.67	+6.67
I – distribution at B		+0.70	1.27 	
C.O to C				0.64
Final moments $\Sigma$	0.00	+5.40	-5.40	+7.31
Conventional moments	0.00	-5.40	-5.40	-7.31

#### Moment Distribution Process : ( Explanation)

- The FEM & DF are calculated and are entered in the moment distribution table.
- Since A is a simple support, it is released to make the moment zero. Half the moments is carried over to B. thus the FEMs are initially adjusted.
- Since B is unbalanced, it is balanced and distribution is done to BA & BC according to DF.
- One half of the balanced moment is carried over to C from B.
- Since there is no chance for further distribution or C.O, the process is stopped.
- To get the final moments algebraic sum from adjusted FEM is done.
- To get back the conventional moments the sign of moment is changed at the left of each support.

#### BMD

##### 1. Free BMD

Maximum free BM for span AB =  $+\frac{Wab}{l}$

$$= +\frac{10 \times 1 \times 3}{4}$$

$$= +7.5 \text{ kNm}$$

Maximum free BM for span BC =  $+\frac{wl^2}{8}$

$$= +\frac{5 \times 4^2}{8}$$

$$= +10 \text{ kNm}$$

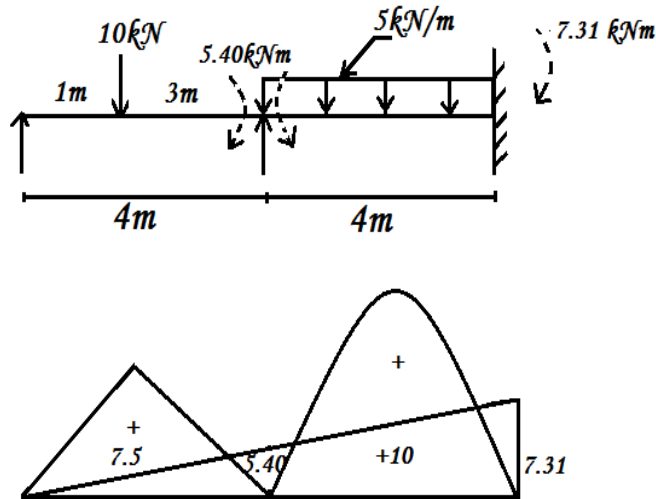
## 2. Fixed BMD

$$M_A = 0$$

$$M_B = -5.40 \text{ kNm}$$

$$M_C = -7.31 \text{ kNm}$$

## 3. Final BMD

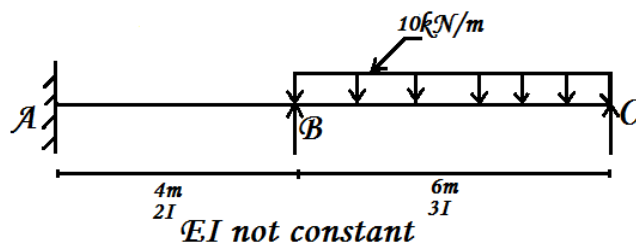


Final BMD

## TWO - SPAN CONTINUOUS BEAM

(EI not constant, I Varying)

5. Find the support moments for the two-span continuous beam ABC shown in fig. Also draw BMD.



### Step 1: Fixed End Moments:

Span AB:

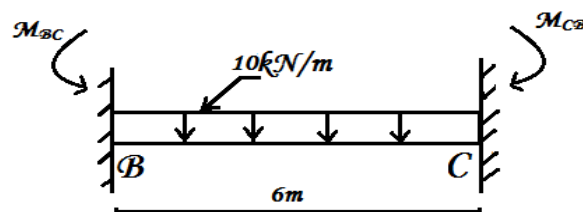
No loading in span AB

$$\therefore M_{AB} = M_{BA} = 0$$

Span BC:

$$M_{BC} = -\frac{wl^2}{12}$$

$$= -\frac{10 \times 6^2}{12}$$



$$= -30\text{kNm}$$

$$M_{CB} = +\frac{wl^2}{12}$$

$$= +\frac{10 \times 6^2}{12}$$

$$= +30\text{kNm}$$

### Step 2: Distribution Factors (DF):

#### i. Joints (only one joint B)

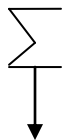
Joint	Member	Stiffness	Relative Stiffness	$\sum k$	D.F = $k/\sum k$
B	BA	$K_{BA} = \frac{4EI}{l}$ $= \frac{4E(2I)}{4}$ $= \frac{8EI}{4}$	$K_{BA} : K_{BC}$ $= \frac{8EI}{4} : \frac{9EI}{6}$	$4+3$ $= 7$	$DF_{BA} = \frac{k_{BA}}{\sum k}$ $= \frac{4}{7}$ $DF_{BC} = \frac{k_{BC}}{\sum k}$ $= \frac{3}{7}$
	BC	$K_{BC} = \frac{3EI}{l}$ $= \frac{3E(3I)}{6}$ $= \frac{9EI}{6}$	$\frac{8}{4} : \frac{9}{6}$ $24 : 18$ $(i.e.) 4:3$		

#### ii. Supports:

1. A is fixed      ∴  $DF_{AB} = 0$ .
2. C is simply supported      ∴  $DF_{CB} = 1$ .

### Step 3: Moment distribution Table:

	A	B	C	
Member	AB	BA	BC	CB
Distribution Factor	0	4/7	3/7	1
FEM	0.00	0.00	-30.00	+30.00
Release C & C.O to B			-15.00	-30.00
Initial / Adjusted FEM	0.00	0.00	-45.00	0.00
I – distribution		+25.72	+19.28	
C.O to A	+12.86			
Final moments $\sum$	+12.86	+25.71	-25.71	0.00
Conventional moments	-12.86	-25.71	-25.71	0.00



### Moment Distribution Process: (Explanation)

- A moment distribution table is prepared. The FEM & DF are entered.
- Since C is a simple – support, to make the moment zero, it is released by balancing it and half the balanced moment is carried over to B and thus the FEM are adjusted.
- Now I distribution is done at B.
- Since 'A' is a fixed support, half the moment is carried over to A from B.
- Since there is no chance for further distribution & C.O, the process is stopped.
- To get final moments, add the moment algebraically from adjusted FEM.
- To get back the conventional moments, the signs in the left support moments are changed.

### **Step 4: BMD**

#### **1. Free BMD: (sagging)**

Maximum free BM for span AB = 0 (since no loading)

$$\begin{aligned}\text{Maximum free BM for span BC} &= +\frac{wl^2}{8} \\ &= +\frac{10 \times 6^2}{8} \\ &= +45\text{kNm}.\end{aligned}$$

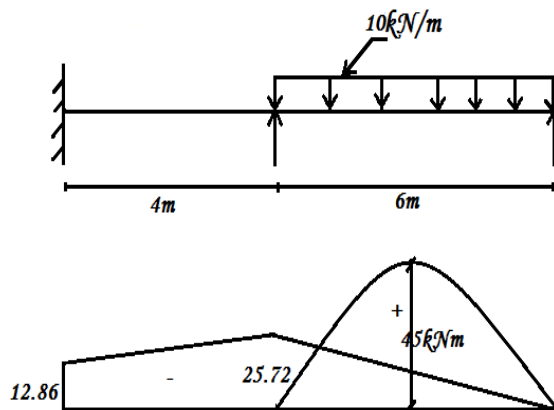
#### **2. Fixed BMD: (hogging)**

$$M_A = -12.86\text{kNm}.$$

$$M_B = -25.72\text{kNm}.$$

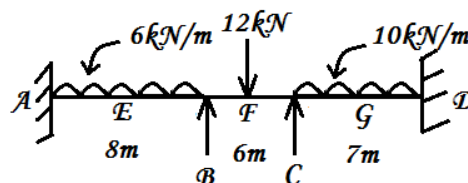
$$M_C = 0\text{kNm}.$$

**Final BMD:**



### THREE SPAN CONTINUOUS BEAMS

6) A continuous beam ABCD is fixed at A & D. It is loaded as shown in fig. Calculate the support moments by moment distribution method. Sketch BMD.

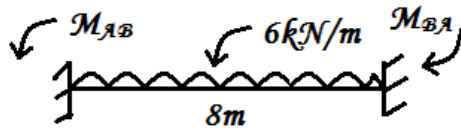


**Solution:**

**Step 1: Fixed end moments (FEM)**

Considering each span as fixed.

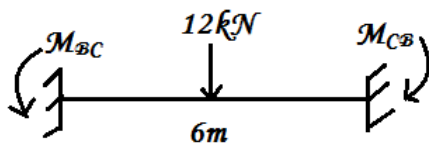
**Span AB**



$$M_{AB} = \frac{-wl^2}{12} = \frac{-6 \times 8^2}{12}$$
$$= -32 \text{ kNm}$$

$$M_{BA} = \frac{+wl^2}{12} = \frac{+6 \times 8^2}{12}$$
$$= +32 \text{ kNm}$$

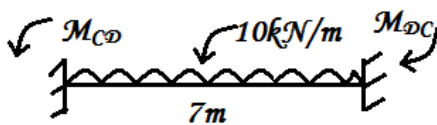
**Span BC**



$$M_{BC} = \frac{-Wl}{8} = \frac{-12 \times 6}{8}$$
$$= -9 \text{ kNm}$$

$$M_{CB} = \frac{+Wl}{8} = +9 \text{ kNm}$$

**Span CD**



$$M_{CD} = \frac{-wl^2}{12} = \frac{-10 \times 7^2}{12}$$
$$= -40.83 \text{ kNm}$$

$$M_{DC} = \frac{+wl^2}{12} = \frac{+10 \times 7^2}{12}$$
$$= +40.83 \text{ kNm}$$



## Step 2: Distribution factors (D.F)

### (1). Joints B & C

Joint	Member	Stiffness	Relative stiffness (k)	$\Sigma k$	Distribution factor (D.F)
B	BA	$K_{BA} = \frac{4EI}{l} = \frac{4EI}{8}$	$K_{BA} : K_{BC}$ $\frac{4EI}{8} : \frac{4EI}{6}$ 6: 8	$= K_{BA} + K_{BC}$ $= 6 + 8$ $= 14$	$D.F_{BA} = \frac{K_{BA}}{\Sigma k}$ $= 3/7$
	BC	$K_{BC} = \frac{4EI}{l} = \frac{4EI}{6}$			$D.F_{BC} = \frac{K_{BC}}{\Sigma k}$ $= 4/7$
C	CB	$K_{CB} = \frac{4EI}{l} = \frac{4EI}{6}$	$K_{CB} : K_{CD}$ $\frac{4EI}{6} : \frac{4EI}{7}$ 7:6	7 + 6 13	$D.F_{CB} = 7/13$
	CD	$K_{CD} = \frac{4EI}{l} = \frac{4EI}{7}$			$D.F_{CD} = 6/13$

### 2) End supports (C, D):

End supports C & D are fixed, ∴ no distribution is done at C & D

∴  $DF_{AB} = 0$ ;  $DF_{DC} = 0$

### Step 3: Moment distribution table:

	A		B		C		D	
Member	AB	BA	BC	CB	CD	DC		
Distribution factors (DF)	0	3/7	4/7	7/13	6/13	0		
Fixed end moments (FEM)	-32.00	+32.00	-9.00	+9.00	-40.83	+40.83		
I distribution		-9.86	-13.14	+17.14	+14.69			
Carry over (C.O)	-4.93					+7.35		
II distribution		-3.67	+8.57	-6.57	+3.03			
C.O	-1.84		+1.77	-2.45		+1.52		
III distribution		-0.76	-1.01	+1.32	+1.13			
C.O	-0.38		+0.66	-0.51		+0.57		
IV distribution		-0.28	-0.38	+0.75	-0.24			
Final moments ( $\Sigma$ ) (algebraic sum)	-39.15	+17.43	-17.43	+22.22	-22.22	+50.27		
Conventional moments	-39.15	-17.43	-17.43	-22.22	-22.22	-50.27		

### Moment distribution process (Explanation):

- The FEM and DF are entered in the table.
- The distribution and carry over process is continued upto IV distribution.
- Since the C.O moments after III distribution is very small, the process is stopped up to IV distribution. (Normally four distributions will be sufficient).

### BMD:

#### 1). Free BMD

##### Span AB

$$\text{Max free BM at E} = \frac{+wl^2}{8} = \frac{+6 \times 8^2}{8}$$
$$= +48\text{kNm}$$

##### Span BC

$$\text{Max free BM at F} = \frac{+Wl}{4} = \frac{+12 \times 6}{4}$$
$$= +18\text{kNm}$$

##### Span CD

$$\text{Max free BM at G} = \frac{+wl^2}{8} = \frac{+10 \times 7^2}{8}$$
$$= +61.25\text{kNm}$$

#### 2). Fixed BMD

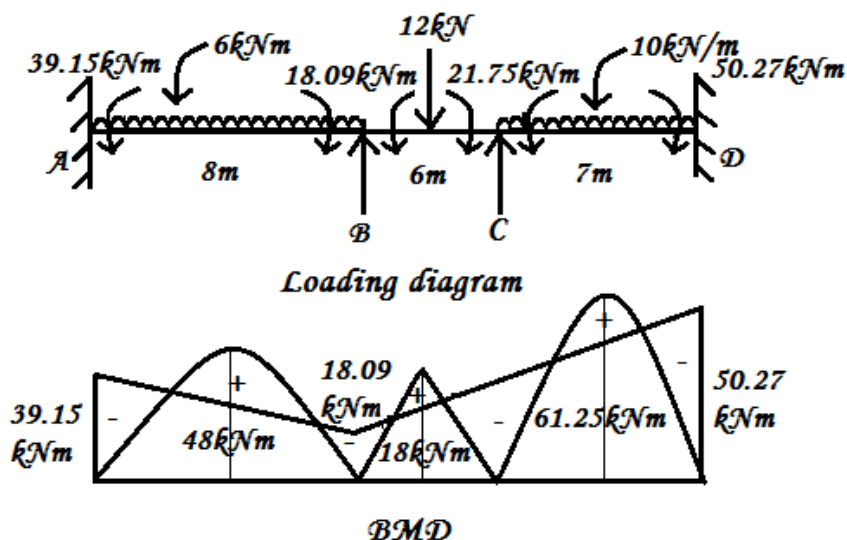
$$M_A = -39.15\text{kNm}$$

$$M_B = -17.43\text{kNm}$$

$$M_C = -22.22\text{kNm}$$

$$M_D = -50.27\text{kNm}$$

Superpose fixed BMD over free BMD to get BMD.



### Results:

## HIGH LIGHTS

### 1. a) Stiffness factor (k)

- i. When far end is fixed stiffness factor  $= \frac{4EI}{l}$
- ii. When the far end is hinged stiffness factor  $= \frac{3EI}{l}$

### b) Relative stiffness

- i. When the far end is fixed relative stiffness  $= \frac{I}{l}$
- ii. When the far end is hinged relative stiffness  $= \frac{3I}{4l}$

### c) Carry over moment

Carry over moment = carry over factor  $\times$  applied moment.

### 2. Carry over factor

Carry over factor (COF) =  $\frac{\text{Carry over moment}}{\text{Applied moment}}$

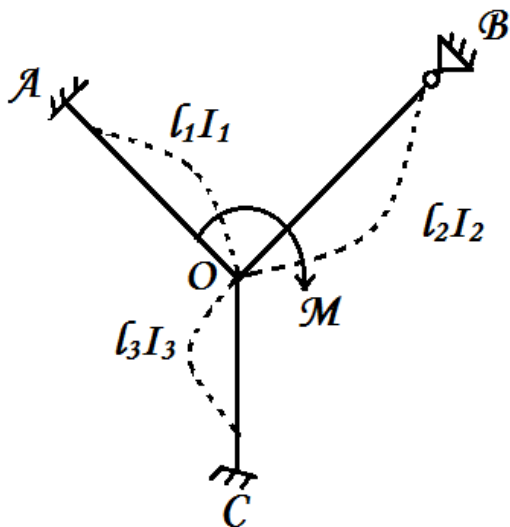
- a. When the far end is fixed, COF =  $\frac{1}{2}$
- b. When the far end is hinged, COF = 0

### Distribution Moment

Distribution moment = distribution factor  $\times$  applied moment.

### Distribution factor (DF)

Distribution factor =  $\frac{\text{Stiffness Factor of any member}}{\text{Total stiffness}}$



E.g.

In figure,

$DF_{OA}$  = Distribution Factor for member OA

$$DF_{OA} = \frac{K_{OA}}{\sum K_O}$$

III<sup>ly</sup>

$$DF_{OB} = \frac{K_{OB}}{\sum K_O}$$

$$DF_{OC} = \frac{K_{OC}}{\sum K_O}$$

## QUESTIONS

### Two mark questions:

- 1) Where the (-ve) moment is maximum in a two span continuous beam having simple supports at the ends?
- 2) Define stiffness factor.
- 3) Define distribution factor.
- 4) Where the hogging (-ve) moment is maximum in a two span continuous beam, having simple supports at the ends?
- 5) Give examples of indeterminate beams.
- 6) State any two methods of analysis of indeterminate structures.
- 7) Define Distribution factor and Distribution moment.
- 8) What is Carry over factor?

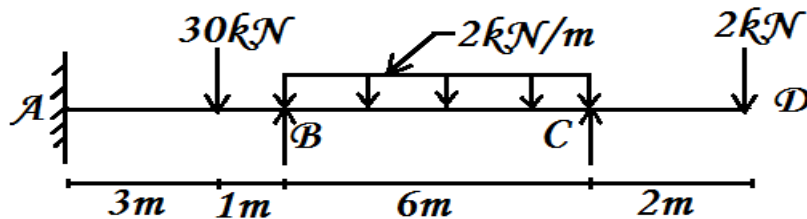
### Three mark questions:

- 1) A three span continuous beam with hinged ends carries UDL on its interior panel only. Draw the shapes of the SF and BM diagrams with proper signs (values need not be mentioned).
- 2) How do you analyse a continuous beam by Hardy cross method?
- 3) Prove that the stiffness of a simply supported beam of uniform cross section is  $3EI/l$ .
- 4) Derive an expression for the stiffness of a beam when it is simply supported at both the ends.
- 5) Derive the expression for the stiffness of a beam when it is fixed at one end and freely supported at the other end.

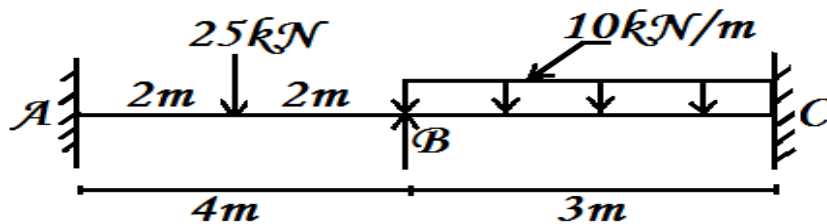
### Ten mark questions:

- 1) A continuous beam of ABC, simply supported at A and C, carries an UDL of 20kN/m on AB = 6m and carries a central point load of 120kN on BC = 6m. Take EI as constant. Draw SFD and BMD by moment distribution method.
- 2) A continuous beam of ABC, fixed at A & C, carries a point load of 5kN at 4m from A on the span AB = 6m and carries an UDL of 1.5kN/m on the span BC = 4m. Take EI as constant. Draw SFD and BMD by moment distribution method.
- 3) Compute the support moments by Hardy cross method for the two span continuous beam ABC with simply supported ends. All carries an UDL of 20kN/m. BC carries a point load of 90kN at 2m from B.  $I_{BA} = I$ ,  $I_{BC} = 2I$ .
- 4) A beam ABCD, 9m long is simply supported at A, B and C, such that the span AB is 3m, span BC is 4.5m and the overhanging CD is 1.5m. It carries an UDL of 30kN/m in span AB and a point load of 10kN at the free end. The MI of the span AB is  $I$  and in span BC is  $2I$ . Compute the support moments by moment distribution method.

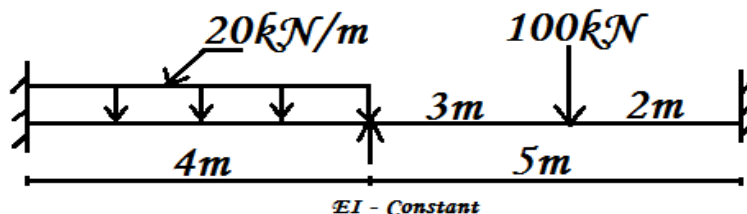
- 5) A continuous beam ABCD has three equal spans  $AB = BC = CD = 4\text{m}$ . It is simply supported at the ends A & D. AB carries an UDL of intensity  $20\text{kN/m}$ ; BC carries a central point load of  $40\text{kN}$ ; span CD carries an eccentric point load of  $30\text{kN}$  at  $1\text{m}$  from D. The flexural rigidity,  $EI$  is constant. Analyse the beam by Moment Distribution method (3 cycles sufficient) and draw the SF & BM diagram.
- 6) A continuous beam of ABC, fixed at A & C, carries an UDL of  $30\text{kN/m}$  on  $AB = 6\text{m}$  and carries a central point load of  $180\text{ kN}$  on  $BC = 6\text{m}$ . Take  $EI$  as constant. Draw SFD and BMD by moment distribution method.
- 7) A continuous beam of ABC, fixed at A and C, carries a point load of  $5\text{kN}$  at  $4\text{m}$  from A on the span  $AB = 6\text{m}$  and carries an UDL of  $1.5\text{kN/m}$  on the span  $BC = 4\text{m}$ . Take  $EI$  as constant. Draw SFD and BMD by moment distribution method.
- 8) A two span continuous beam ABC is fixed at support A and simply supported at support C.  $AB = 8\text{m}$ ;  $BC = 4\text{m}$ . Span AB carries an UDL of  $16\text{kN/m}$ ; BC carries a central point load of  $80\text{kN}$ .  $I_{AB} = 1.5 I_{BC}$ . Analyse the beam by moment distribution method and draw BMD.
- 9) Analyse the continuous beam shown in fig. By moment distribution method. Find the support moments and draw the BMD. Assume  $EI$  as constant.



- 10) Analyse the continuous beam shown in fig. By moment distribution method. Draw the BMD.  $EI$  is constant.



- 11) Using Hardy cross method, determine the support moments and draw the BMD for the continuous beam shown in fig.



### 3.2 PORTAL FRAMES MOMENT DISTRIBUTION METHOD

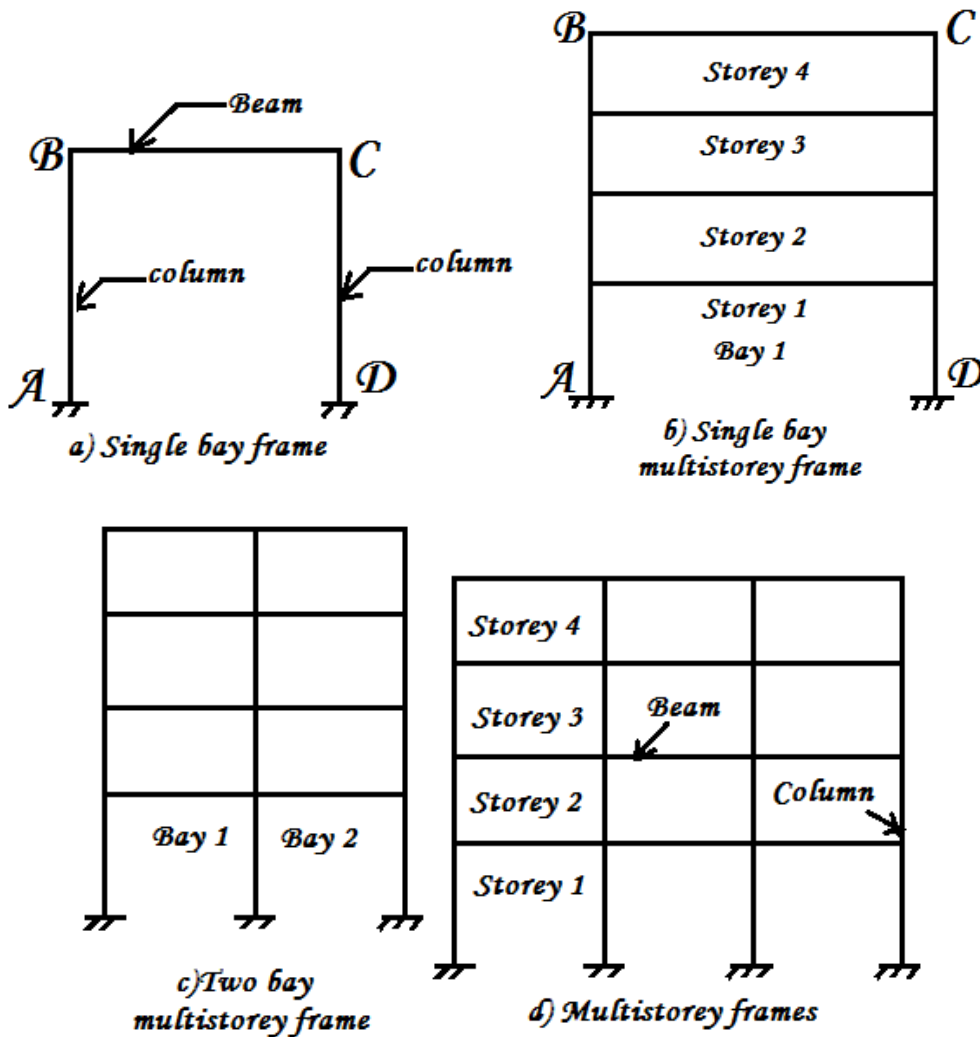
#### Frames:

A structure built – up of several members (beam over columns) joined together by rigid at their ends to support the external loads (vertical and horizontal) is called a frame. It is an indeterminate structure.

#### Types of frames:

Frames may be classified as

1. Based on bays
  - (i) Single bay single storey frame (Portal frame)
  - (ii) Single bay multi – storey frames
  - (iii) Frames multi bay frame
2. Based on storey
  - (i) Single storey frame
  - (ii) Multi storey frame



**a) Single bay frame:**

When a frame consists of single bay it is called single bay frame. It may be of single storey or multi-storey as shown in fig.

When a frame consists of single bay with multi-storey as shown in fig.

**b) Multi bay frame:**

When a frame consists of two or more bays it is called multi bay frame. It may be of multi bay multi-storey frame as shown in fig.

**Portal frame:**

A frame consisting of beam resting on columns with rigid joints is known as portal frame.

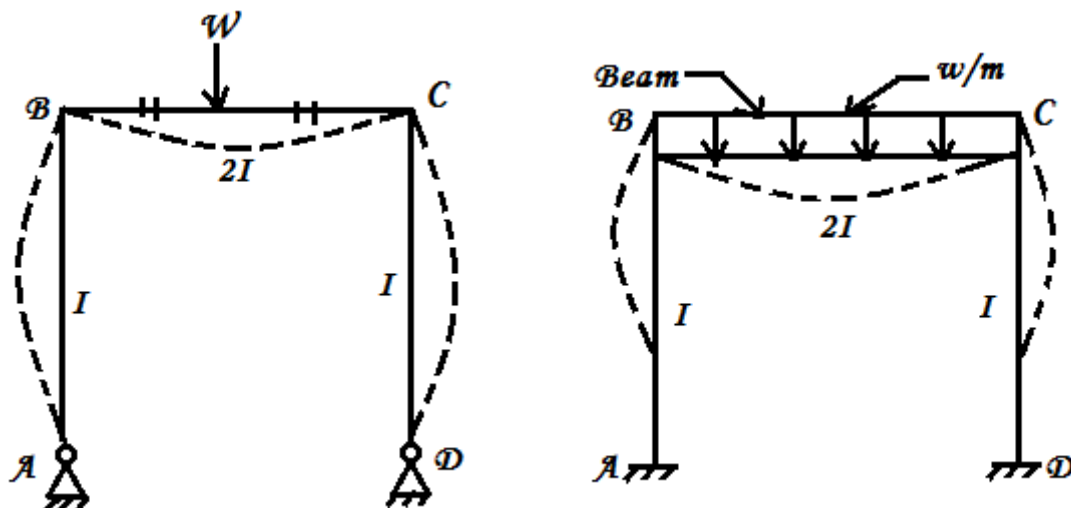
**Classification of portal frame:**

Portal frame classified as

- a) Symmetrical portal frame
- b) Unsymmetrical portal frame
- c) Sway type portal frame
- d) Non – sway type portal frame

**a) Symmetrical portal frame:**

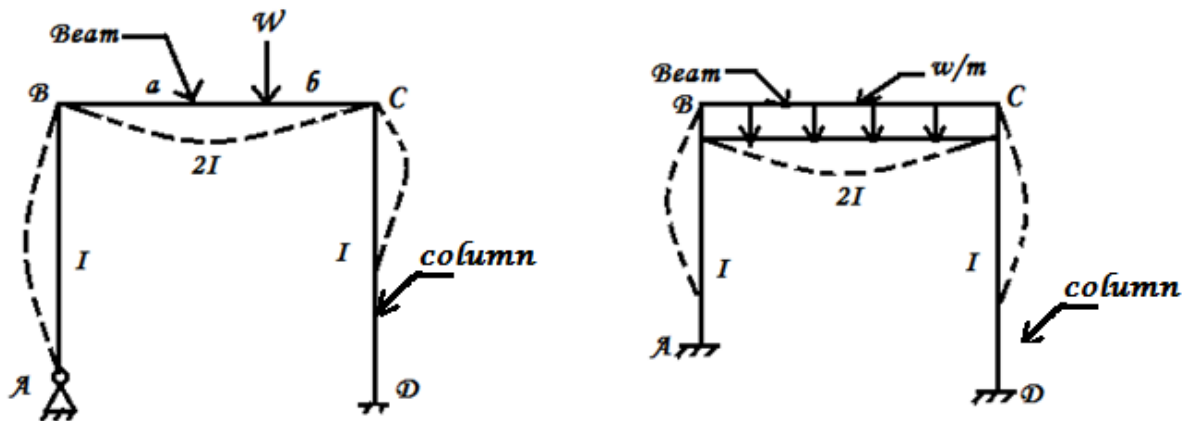
A portal frame, in which both the columns are having of the same length, geometry shape, similar end conditions, moments of inertia, modulus of elasticity and subjected to symmetrical loading as shown in fig. is called symmetrical portal frame.



*a) Symmetrical portal frame*

### b) Unsymmetrical portal frame:

A portal frame, in which both the columns are not having of the same length, geometry shape, similar end conditions, moments of inertia, modulus of elasticity and subjected to unsymmetrical loading as shown in fig. is called unsymmetrical portal frame.



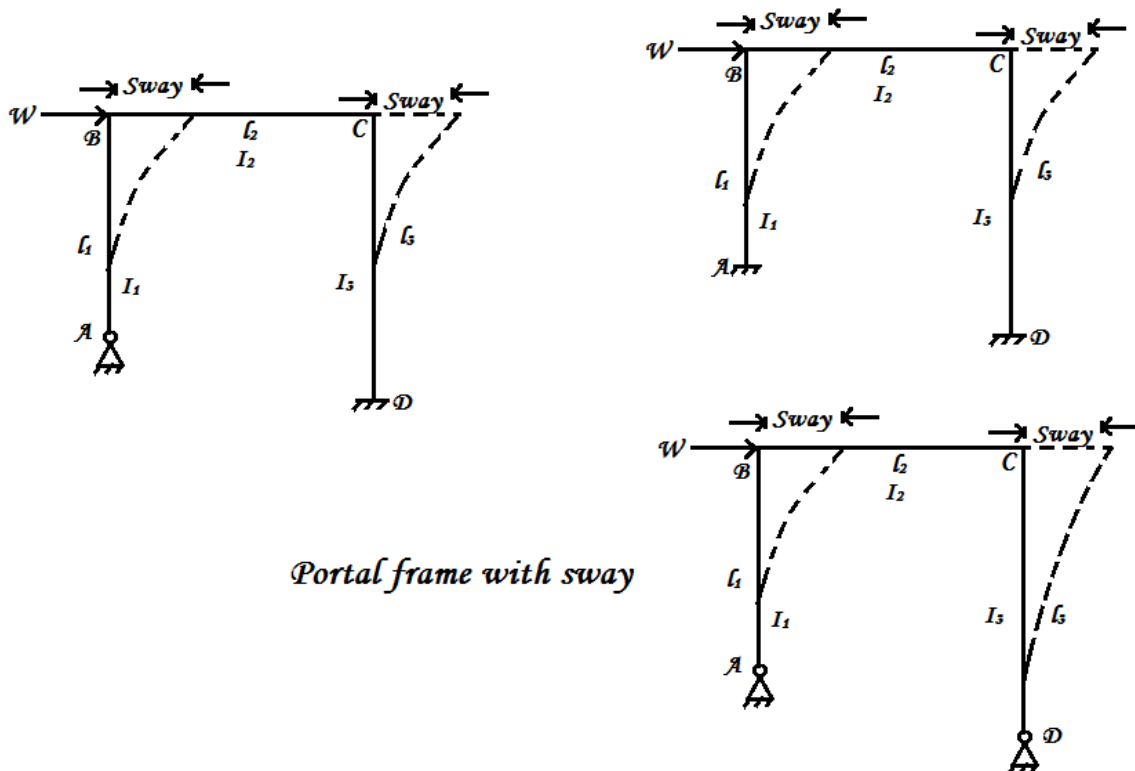
*b) Unsymmetrical Portal frame*

### c) Sway type portal frame:

In case of unsymmetrical portal frame, the frame deflects horizontally. The frame having horizontal deflection is called sway type portal frame. In this case sway moments are considered. If the symmetrical portal frame is loaded asymmetrically sway moments are also considered.

These may be classified into

- i) Pure sway frame
- ii) General sway frame



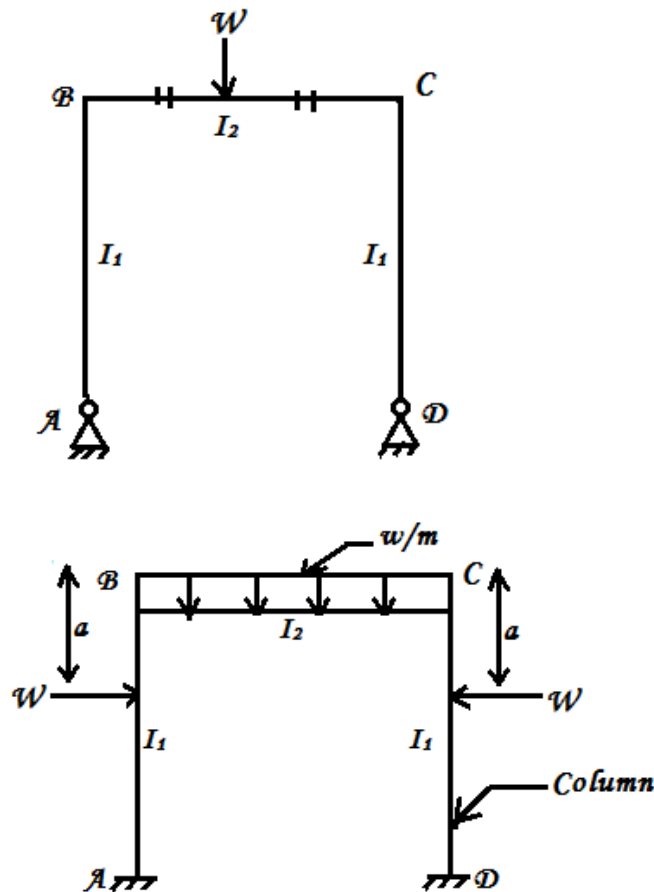
*Portal frame with sway*



**d) Non – sway type portal frames:**

In case of symmetrical portal frame with symmetrical load horizontal deflection will not occur, this frame is called non – sway type portal frame.

This type of portal frame are analysed as in the case of continuous beams.

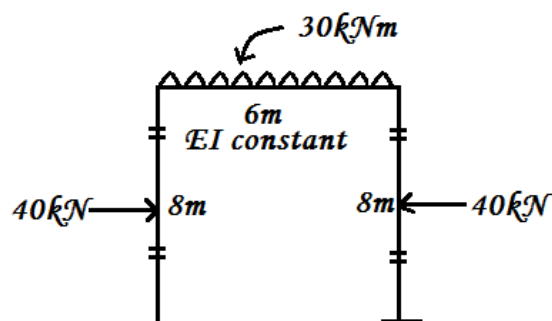


**d) Non Sway Type Portal frame**

Analysis of symmetrical (non – sway) portal frames by moment distribution method

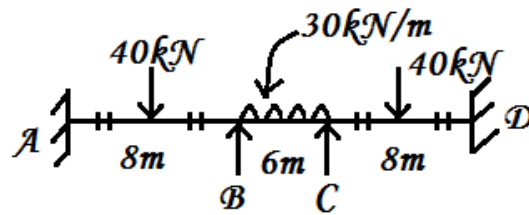
**Problems: WORKED EXAMPLE 1**

A portal frame ABCD is shown in fig. AB is loaded with central point load of 40kN at 8m and BC is loaded with an u.d.l of 30 kN/m throughout and CD is loaded with the same central point load of 40kN at 8m. If EI is constant throughout. Calculate the bending moments in the frame and draw the BMD.

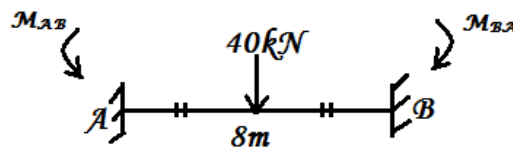


**Solution:**

Stretch out the frame horizontally. The frame is equivalent to a continuous beam as shown in fig.

**Step 1: Fixed end moments (FEM)**

Consider each span as fixed:

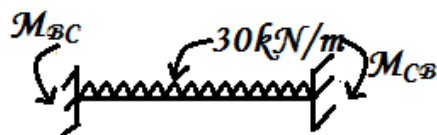
**Span AB**

$$M_{AB} = \frac{-Wl}{8} = \frac{-40 \times 8}{8}$$

$$= -40 \text{ kNm}$$

$$M_{BA} = \frac{+Wl}{8} = \frac{+40 \times 8}{8}$$

$$= +40 \text{ kNm}$$

**Span BC**

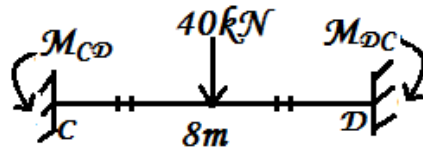
$$M_{BC} = \frac{-wl^2}{12} = \frac{-30 \times 6^2}{12}$$

$$= -90 \text{ kNm}$$

$$M_{CB} = \frac{+wl^2}{12} = \frac{+30 \times 6^2}{12}$$

$$= +90 \text{ kNm}$$

**Span CD**



$$M_{CD} = \frac{-Wl}{8} = \frac{-40 \times 8}{8}$$

$$= -40 \text{ kNm}$$

$$M_{DC} = \frac{+Wl}{8} = \frac{+40 \times 8}{8}$$

$$= +40 \text{ kNm}$$

## Step 2: Distribution factors (DF)

### (1) joints (B, C)

Joint	Member	Stiffness	Relative stiffness (k)	$\Sigma k$	Distribution factor (D.F)
B	BA	$K_{BA} = \frac{4EI}{l} = \frac{4EI}{8}$	$K_{BA} : K_{BC}$ $\frac{4EI}{8} : \frac{4EI}{6}$ 6: 8	$= K_{BA} + K_{BC}$ $= 6 + 8$ $= 14$	$D.F_{BA} = \frac{K_{BA}}{\Sigma k}$ $= 3/7$
	BC	$K_{BC} = \frac{4EI}{l} = \frac{4EI}{6}$			$D.F_{BC} = \frac{K_{BC}}{\Sigma k}$ $= 4/7$
C	CB	$K_{CB} = \frac{4EI}{l} = \frac{4EI}{6}$	$K_{CB} : K_{CD}$ $\frac{4EI}{6} : \frac{4EI}{8}$ 8:6	8 + 6 14	$D.F_{CB} = 8/14$ $= 4/7$
	CD	$K_{CD} = \frac{4EI}{l} = \frac{4EI}{8}$			$D.F_{CD} = 6/14$ $= 3/7$

### (2) End supports (A & D)

End supports A & D are fixed. No distribution is done at A & D.

$$\therefore DF_{AB} = 0$$

$$DF_{DC} = 0$$

### Step 3: Moment distribution table

	A		B		C		D	
Member	AB		BA		BC		CB	
Distribution factors(D.F)	0		3/7		4/7		4/7	
(FEM)	-40.00		+40.00		-90.00		+90.00	
I distribution			+21.43		+28.57		28.57	
Carry over (C.O)	+10.72				-14.29		+14.29	
II distribution			+6.12		+8.17		-8.17	
C.O	+3.06				-4.09		+4.09	
III distribution			+1.75		+2.34		-2.34	
C.O	+0.88				-1.17		+1.17	
IV distribution			+0.50		+0.67		-0.67	
Sum $\Sigma$	-25.34		+69.80		-69.80		+69.80	
Conventional moments	-25.34		-69.80		-69.80		-69.80	

#### Moment distribution process (explanation):

- The frame is stretched out and equivalent continuous beam is drawn.
- The FEM & DF are calculated and entered in the moment distribution table.
- The distribution & C.O process is continued up to IV distribution.
- Since the C.O moments after III distribution is very small, the process is stopped at IV distribution.
- The final moments are arrived by algebraic sum of the in each column.
- To get back the conventional moments, by changing the sign of moments at the left end of each span.

#### BMD:

##### Free BMD (Sagging):

$$\text{Max free BM for span AB} = \frac{+Wl}{4} = \frac{+40 \times 8}{4}$$

$$= + 80\text{kNm}$$

$$\text{Max free BM for span BC} = \frac{+wl^2}{8} = \frac{+30 \times 6^2}{8}$$

$$= + 135\text{kNm}$$

$$\text{Max free BM for span CD} = \frac{+Wl}{4} = \frac{+40 \times 8}{4}$$

$$= + 80\text{kNm}$$

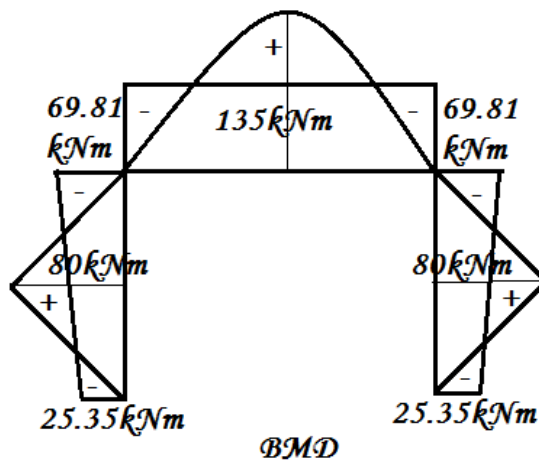
**Fixed BMD (Hogging):**

$$M_A = -25.34 \text{ kNm.}$$

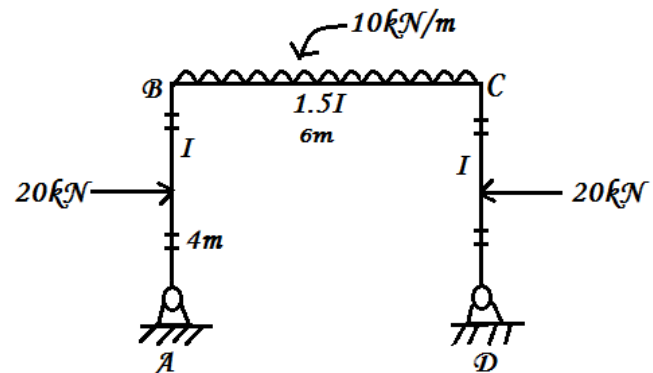
$$M_B = -69.80 \text{ kNm.}$$

$$M_C = -69.80 \text{ kNm.}$$

$$M_D = -25.34 \text{ kNm.}$$

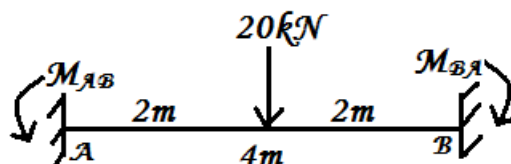
**Final BMD:****WORKED EXAMPLE 2**

- 1) Analyse the portal frame shown in fig. by moment distribution method and draw BMD.



EI not constant: I varying.

The frame is stretched & equivalent continuous beam is drawn.

**Step 1: FEM****Span AB**

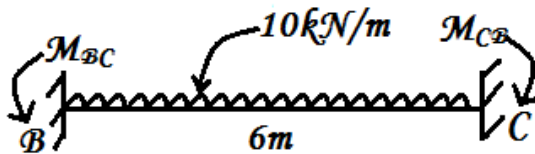
$$M_{AB} = \frac{-Wl}{8} = \frac{-20 \times 4}{8}$$

$$= -10\text{kNm}$$

$$M_{BA} = \frac{+Wl}{8} = \frac{+20 \times 4}{8}$$

$$= +10\text{kNm}$$

**Span BC**



$$M_{BC} = \frac{-wl^2}{12} = \frac{-10 \times 6^2}{12}$$

$$= -30\text{kNm}$$

$$M_{CB} = \frac{+wl^2}{12} = \frac{+10 \times 6^2}{12}$$

$$= +30\text{kNm}$$

**Span CD (symmetrical)**

$$M_{CD} = -10\text{kNm}$$

$$M_{DC} = +10\text{kNm}$$

**Step 2: Distribution factors:**

**1) Joints (B, C)**

Joint	Member	Stiffness	Relative stiffness (k)	Sum $\Sigma k$	Distribution factor(D.F) $\left(\frac{K}{\Sigma K}\right)$
B	BA	$K_{BA} = \frac{3EI}{l}$ $= \frac{3EI}{4}$ (A is hinged)	$K_{BA} : K_{BC}$ $\frac{3EI}{4} : \frac{6EI}{6}$ LCM is 12 units 9: 12 i.e. 3:4	$= K_{BA} + K_{BC}$ $= 3 + 4$ $= 7$	$D.F_{BA} = \frac{K_{BA}}{\Sigma k}$ $= 3/7$
	BC	$K_{BC} = \frac{4EI}{l}$ $= \frac{4E(1.5l)}{6}$ $= \frac{6EI}{6}$ (c is fixed)			$D.F_{BC} = \frac{K_{BC}}{\Sigma k}$ $= 4/7$

C	CB	$K_{CB} = \frac{4EI}{l}$ $= \frac{4E(1.5I)}{6}$ $= \frac{6EI}{6}$ (B is fixed)	$K_{CB} : K_{CD}$ $\frac{6EI}{6} : \frac{3EI}{4}$ 12:9 4:3	4 + 3 = 7	D.F <sub>CB</sub> = 4/7
	CD	$K_{CD} = \frac{3EI}{l}$ $= \frac{3EI}{4}$ (D is hinged)			D.F <sub>CD</sub> = 3/7

## (2)End supports (A, D)

A & D are hinged.

$$\therefore DF_{AB} = 1$$

$$DF_{DC} = 1$$

## Step 3: Moment distribution table:

	A	B	C	D			
	Member	AB	BA	BC	CB	CD	DC
	Distribution factors	1	3/7	4/7	4/7	3/7	1
	FEM	-10.00	+10.00	-30.00	+30.00	-10.00	+10.00
	Release A & D & C.O to B, C	+10.00	+5.00			-5.00	-10.00
<div>Σ</div> <div>↓</div>	Initial/ Adjusted FEM I distribution	0.00	+15.00	-30.00	+30.00	-15.00	0.00
			+6.43	+8.57	-8.57	-6.43	
	C.O (from B to C & C to B)			-4.29	+4.29		
	II distribution		+1.84	+2.45	-2.45	-1.84	
	C.O			-1.23	+1.23		
	III distribution		+0.53	+0.70	-0.70	-0.53	
	C.O			-0.35	+0.35		
	IV distribution		+0.15	+0.20	-0.20	-0.15	
	Final moments(Σ)	0.00	+23.95	-23.95	+23.95	-23.95	0.00
	Conventional moment	0.00	-23.95	-23.95	-23.95	-23.95	0.00

## Moment distribution process (explanation):

- The given frame is stretched and an equivalent continuous beam is drawn.
- The FEM & DF are calculated and entered in the moment distribution table.

- Since A & D are hinged, A & D are released (balanced) to make the moments zero, and half the moment is C.O to B from A and illy from D to C. Thus the FEM's are initially adjusted. Algebraic sum at the end ( $\Sigma$ ) should start from here only.
- Distribution and C.O process are done at B & C up to IV distribution.
- Since the C.O moments are gradually small, the process is stopped at IV distribution.
- For final moment, algebraic sum of moments from adjusted FEM are done.
- To get back the conventional moments the signs are changed at the left of each support.

**BMD:**

**Free BMD (Sagging):**

$$\text{Max free BM for span AB} = \frac{+Wl}{4} = \frac{+20 \times 4}{4}$$

$$= +20\text{kNm}$$

$$\text{Max free BM for span BC} = \frac{+wl^2}{8} = \frac{+10 \times 6^2}{8}$$

$$= +45\text{kNm}$$

$$\text{Max free BM for span CD} = \frac{+Wl}{4} = \frac{+20 \times 4}{4}$$

$$= +20\text{kNm}$$

**Fixed BMD (Hogging):**

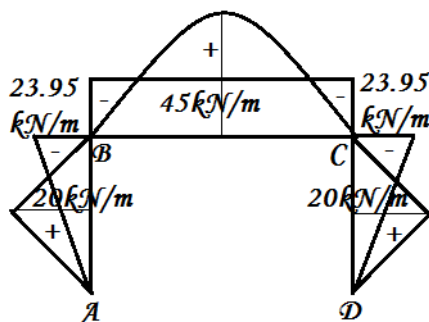
$$M_A = 0 \text{ (hinged).}$$

$$M_B = -23.95\text{kNm.}$$

$$M_C = -23.95\text{kNm.}$$

$$M_D = 0 \text{ (hinged).}$$

**Final BMD:**



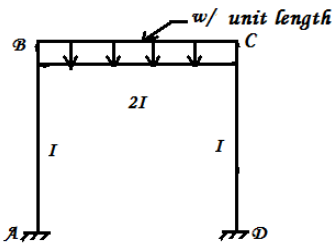
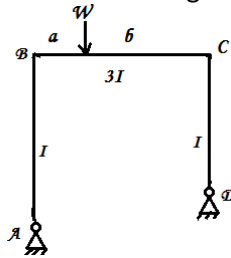
## HIGH LIGHTS

### 1. Portal Frame:

A Frame consisting of beam resting on columns with rigid joints are known as portal frame.



## 2. Symmetrical and Unsymmetrical portal frames:

Sl.no	Symmetrical Portal Frame	Unsymmetrical Portal Frame
1.	Both the columns are same length. 	Columns are in different length. 
2.	Modulus of elasticity is same.	Modulus of elasticity may be different.
3.	Moment of inertia is same for both the columns.	Moment of inertia may be different.
4.	Both the end conditions are same.	End conditions are different.
5.	Loading is symmetrical.	Loading is unsymmetrical.

### 3. Sway type Portal Frame:

In case of unsymmetrical portal frame, the frame deflects horizontally. The frame having horizontal deflection is called sway type portal frame. In this case sway moments are considered. If the symmetrical portal frame is loaded asymmetrically sway moments are also considered.

These may be classified into

- Pure sway frame
- General sway frame

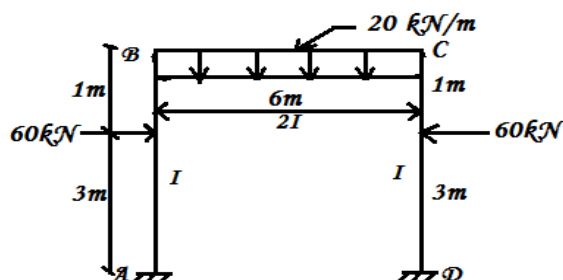
### 4. Non – sway type portal frame:

In case of symmetrical portal frame with symmetrical load horizontal deflection will not occur, this frame is called non – sway type portal frame.

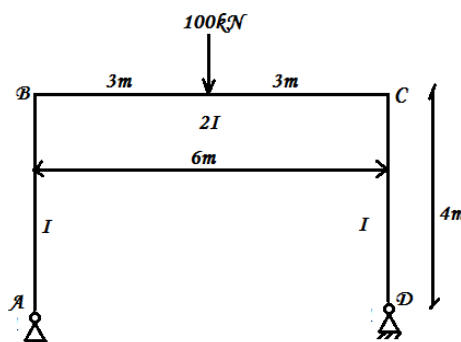
## QUESTIONS

### Ten mark Questions

1. Analyse the portal frame shown in figure by moment distribution method and draw the BMD.



2. Analyse the portal frame shown in figure and draw the bending moment diagram by moment distribution method.



## 4. COLUMNS AND STRUTS

---

### 4.1 COLUMNS AND STRUTS

columns and struts – Definition – Short and Long columns – End conditions – Equivalent length / Effective length - Slenderness ratio – Axially loaded short column – Axially loaded long column – Euler's Theory of long columns – Derivation of expression for critical load of columns with hinged ends-Expressions for other standard cases of end conditions (separate derivations not required)-Problems- Derivation of Rankine's formula for crippling load of columns-Factor of safety-safe load on columns-simple problems

---

## Chapter 4

### 4.1. STRUTS AND COLUMN

Any member of structure subjected to axial compressive force is known as strut. A strut inclined at  $90^\circ$  to the horizontal (i.e. a vertical strut) is known as column, pillar or stanchion.

#### 4.1.1.DEFINITIONS

- (a) **Column:** A long vertical slender member or bar subjected to an axial compressive force is known as column.
- (b) **Strut:** A slender member in any position other than vertical subjected to axial compressive force is known as strut.
- (c) **Slenderness ratio:** It is the ratio of length of column to the least radius of gyration. Slenderness ratio has no unit.

Slenderness ratio = Length of column / Least radius of gyration =  $L/K$

It represents the extent to which the column is long and slender. As the slenderness ratio of a column increases its compressive strength decreases. A slenderness ratio of 200 is extremely large for a column.

- (a) **Buckling load:** The maximum axial compressive load at which the column starts buckling is known as buckling load or crippling load or critical load. Buckling always takes place about the axis having least moment of inertia. The value of buckling load is less than the crushing load.
- (b) **Safe load:** It is the load which a column can withstand safely without any buckling/failure. It is the ratio of buckling load and factor of safety.  
Safe load = Buckling load / Factor of safety
- (c) **Buckling factor:** Buckling factor is the ratio of equivalent length to the least radius of gyration.

#### 4.1.2. CLASSIFICATION OF COLUMNS

Depending upon the length to diameter ratio or slenderness ratio, a column can be classified as:

- (a) **Short column:** If the length of a column is less than 8 times its least lateral dimension then the column is said to be a short column. If the slenderness ratio of a column is less than 32, then the column is also called a short column. In short column, buckling is negligible and the column fails due to direct crushing only.

**(b) Medium size column:** A column is said to be medium size column if its length varying from 8 times to 30 times of its least lateral dimension. If the slenderness ratio of a column lies between 32 to 120, then the column is also said to be medium size or intermediate column. In these column, both buckling as well as direct stresses are of significant value. In the design of medium size column, both the stresses are taken into account.

**(c) Long column:** A column is said to be long column if its length is more than 30 times the least lateral dimension or the slenderness ratio of the column is more than 120. In this type of column, direct compressive stress is very small as compared to buckling stress, i.e., the failure is only due to buckling stress. Hence, long columns are designed to withstand buckling stresses.

#### 4.1.3. FAILURE OF COLUMN

The failure of a column takes place due to any of the following stresses:

- Direct compressive stress
- Buckling stress
- Combination of direct and buckling stresses

##### (A) Failure of short column

Consider a short column of cross-sectional area 'A' subjected axial compressive load p, then

$$\text{Compressive stress} = \frac{P}{A}$$

If the compressive load is gradually increased, a stage will be reached at which the column will be at a point of failure by crushing. The stress inducted in the column corresponding to this load is called crushing stress and the load is known as crushing load ( $p_c$ ).

$$\text{Crushing stress} = \frac{\text{Crushing load}}{\text{cross section area}} = \frac{P}{A}$$

##### (B) Failure of a long column:

Figure 4.1 shows a long column of cross-sectional area 'A' subjected to an axial compressive load p. In case of long column, the failure is due to crushing as well as buckling (bending). The load at which the column just buckles is known as buckling load. The buckling load is less than the crushing load.

- Let,
- $p$  = Axial compressive load
  - $l$  = length of the column
  - $A$  = Cross-sectional area
  - $e$  = Maximum bending at the centre of the column
  - $z$  = Section modulus in the axis of bending

Direct stress,  $\sigma_d = \frac{P}{A}$

Bending stress,  $\sigma_b = \frac{P \cdot e}{z}$

Stresses at the mid-section of the column are:

Maximum stress,  $\sigma_{\max} = \sigma_b + \sigma_d$



Maximum stress,  $\sigma_{\min} = \sigma_b - \sigma_d$

If the maximum stress is more than crushing stress, the column will fail. In long columns, direct compressive stress is negligible as compared to buckling stress. Hence, very long columns are subjected to buckling stresses only.

#### 4.1.4. END CONDITIONS OF COLUMN

The following end conditions of columns are important:

- (a) Both the ends hinged [Fig. 4.2(i)]
- (b) Both the ends fixed [Fig. 4.2(ii)]
- (c) One end fixed and other end hinged [Fig.4.2(iii)]
- (d) One end fixed and other free [Fig.4.2(iv)]

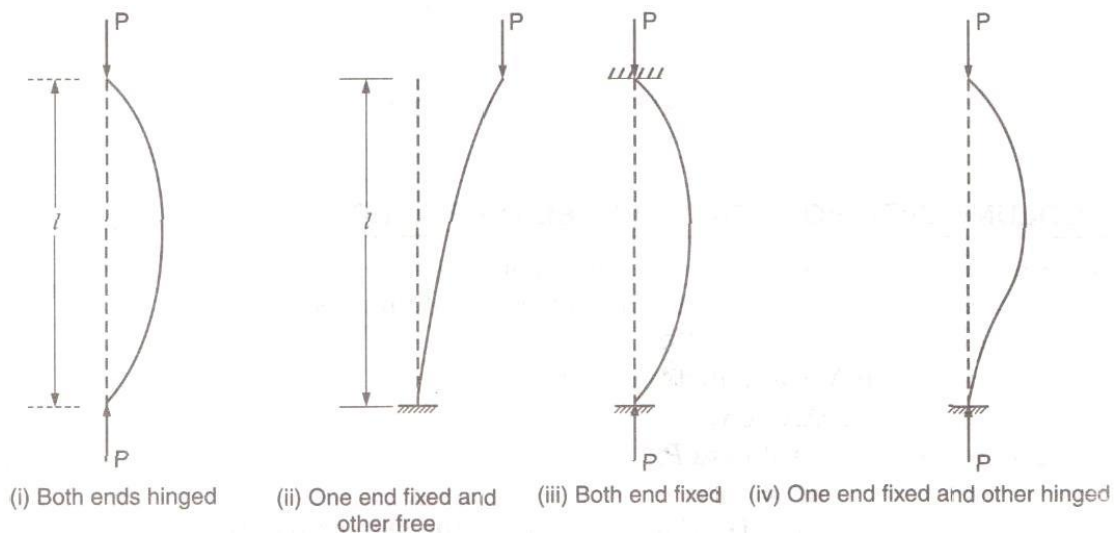


Fig.4.2

#### 4.1.5 EQUIVALENT LENGTH OR EFFECTIVE LENGTH

Equivalent length is the length of the long column which is actually involved in bending. Equivalent length of a column is also defined as the distance between adjacent point of inflexion\*. The equivalent length of a column is obtained by multiplying it with some constant factor 'C'. The constant factor 'C' depends on end conditions of the column. If  $l$  is the actual length of a column, then its equivalent length,  $L = c \times l$

Hence, in case of column with:

- (a) Both ends fixed, equivalent length,  $L = \frac{l}{2}$
- (b) Both ends hinged,  $L = l$
- (c) One end fixed and other end free,  $L = \frac{2l}{\sqrt{2}}$
- (d) One end fixed and other hinged,  $L = \frac{l}{\sqrt{2}}$

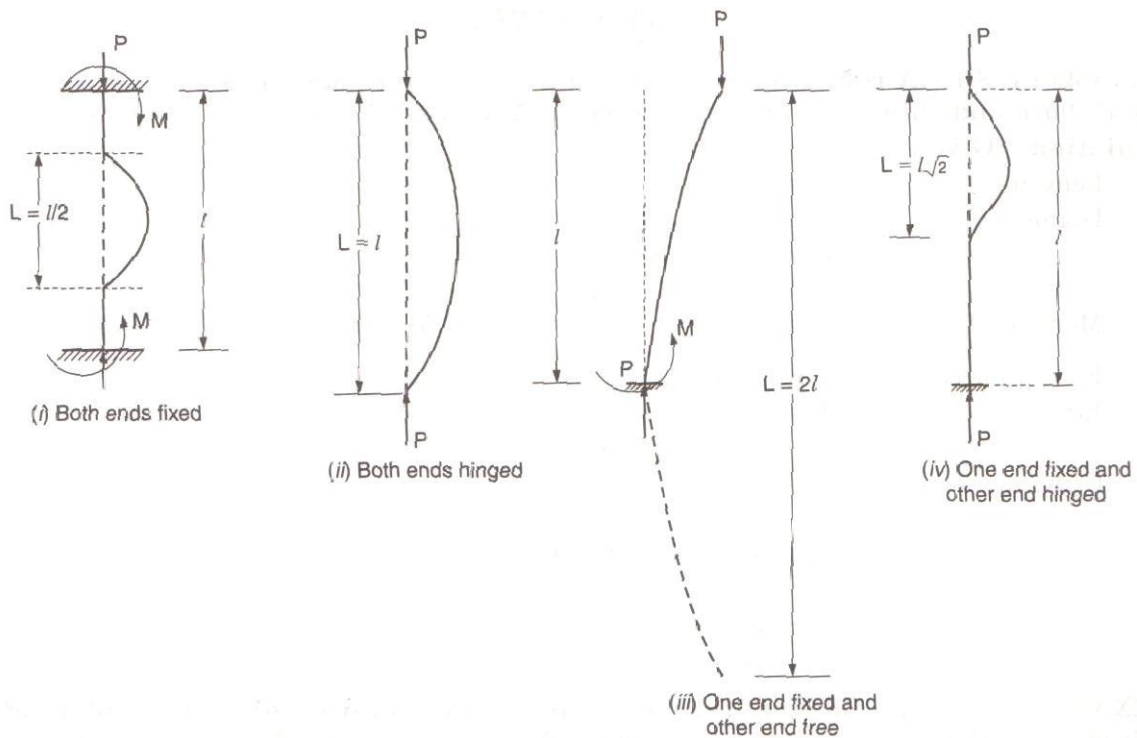


Fig.4.3

Table 4.1. Equivalent Length

S.NO.	End conditions of column	Relation between effective length (L) and actual length (l)	Value of factor 'C'	Crippling load in terms of	
				Actual length	Effective length
1.	Both ends fixed	$L = \frac{l}{2}$	$\frac{1}{2}$	$P = \frac{4\pi^2 EI}{l^2}$	$P = \frac{\pi^2 EI}{L^2}$
2.	Both ends hinged	$L = l$	1	$P = \frac{\pi^2 EI}{l^2}$	$P = \frac{\pi^2 EI}{L^2}$
3.	One end fixed and other end free	$L = 2l$	2	$P = \frac{\pi^2 EI}{4l^2}$	$P = \frac{\pi^2 EI}{L^2}$
4.	One end fixed and other hinged	$L = \frac{l}{\sqrt{2}}$	$\frac{1}{\sqrt{2}}$	$P = \frac{2\pi^2 EI}{l^2}$	$P = \frac{\pi^2 EI}{L^2}$

#### 4.2.0. SLENDERNESS RATIO

We have already discussed in art 22.11 that the euler's formula for the crippling load

$$P_E = \frac{\pi^2 EI}{L_e^2}$$

We know that the buckling of a column under the crippling load will take place about the axis of least resistance. Now substituting  $I = Ak^2$  (where A is the area and K is the least radius of gyration of the section) in the above equation,

$$P_E = \frac{\pi^2 E(Ak^2)}{L_e^2} = \frac{\pi^2 EA}{\left(\frac{L_e}{k}\right)^2}$$

where  $\frac{L_e}{k}$  is known as slenderness ratio. Thus slenderness ratio is defined as ratio of equivalent (or unsupported) length of column to the least radius of gyration of the section. slenderness ratio does not have any units.

**Note :** It may be noted that the formula for crippling load, in the previous articles, have been derived on the assumption the slenderness ratio  $\frac{L_e}{k}$  is so large, that the failure of the column occurs only due to bending, the effect of direct stress (i.e.,  $\frac{P}{A}$ ) being negligible.

#### 4.2.1. AXIALLY LOADED SHORT COLUMN

If the line of action of load coincides with the axis of the column, the column is called an **axially loaded column**. The load passes through the Centroid of the column section. They are also known as centrally loaded columns or concentrically loaded columns.

Consider a short column subjected to axial compression P.

Compressive stress,  $\sigma_c = \text{Load/Area} = P/A$

If the compression is increased, the column fails by crushing. The load corresponding to this crushing is called **crushing load**. All short columns fail by crushing.

Crushing load,  $P_c = \sigma_c * A$

Where  $\sigma_c =$  Ultimate crushing stress in  $\text{N/mm}^2$

A = Area of cross section of the column in  $\text{mm}^2$

#### 4.2.2. AXIALLY LOADED LONG COLUMN

Consider a long slender column, perfectly straight, subject to axial compression (P) as shown in fig 4.1.1. For small values of P, the column remains straight. When the axial load P is gradually increased the column starts deflecting laterally (Buckle). The column will be under stable equilibrium upto a particular stage and lateral deflection disappear on the removal of load (P). Further increase in load beyond this stage affect the stability of the column and lead to failure by lateral buckling.

The axial load just sufficient to keep the column in stable equilibrium with slight deflected shape is called **BUCKLING LOAD or CRIPPLING LOAD or CRITICAL LOAD**. The lateral deflection of the column is known as **BUCKLING** or (lateral bending)

At buckling load the stress in the column material will be well within the proportional limit. Depending upon the flexural rigidity (EI), the column will buckle about a plane of least moment of inertia of the section in a direction perpendicular to the axis. Hence stability is more important than strength in the design of columns.

#### 4.2.3. COMPARISONS BETWEEN AXIALLY LOADED SHORT COLUMN AND LONG COLUMN

S.No.	Axially loaded short column	Axially loaded long column
1	Short column has slenderness ratio less than 12	Long column has slenderness ratio greater than 12
2	Failure is due to crushing	Failure is due to buckling
3	The cross section of short column is more	The cross section of long column is less compared to short column

#### 4.2.4. FORMULAE FOR FINDING BUCKLING LOAD IN COLUMNS

The following formulae are used to find out buckling load in columns:

- (a) Euler's formula
- (b) Rankine Gordon formula
- (c) Johnson's parabolic formula
- (d) IS formula
- (e) Straight line formula.

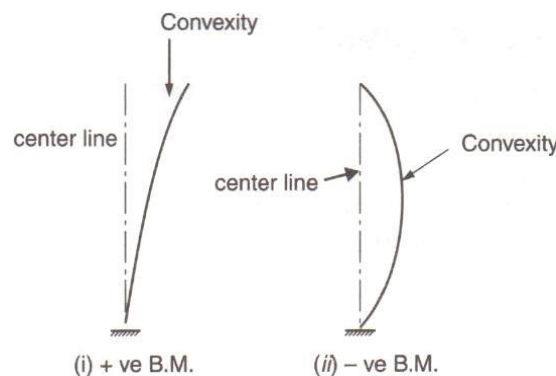
#### 4.2.5. ASSUMPTIONS MADE IN THE EULER'S THEORY

Euler's formula for crippling load is based on the following assumptions:

- (e) The section of the column is uniform throughout its length.
- (f) The column is initially perfectly straight and axially loaded.
- (g) The column material is homogeneous and isotropic.
- (h) The column material is perfectly elastic and obeys Hooke's law.
- (i) The length of the column is very large as compared to the lateral dimensions.
- (j) The self-weight of the column is neglected.
- (k) The direct stress is very small as compared to bending stress.
- (l) The column will fail by buckling alone.

**Sign Convention for Bending Moment:** A bending moment is taken as positive if it bends the column with its convexity towards the actual centre line as shown in figure 4.3(i).

A bending moment is taken as negative if it bends the column with its concavity towards the actual centre line, as shown in Fig. 4.3(ii).



**Fig.4.4**

#### 4.2.6. COLUMN WITH BOTH ENDS HINGED OR PINNED

Consider a column AB of length 'l' hinged at both its ends A and B and carries an axial crippling load i.e., load at which the column just buckles, as shown in fig. 4.4.

Consider a section X-X at a distance x from B.

Let the deflection at XX be y.

Bending moment at XX due to p,

$$M = -Py$$

[BM is -ve as per the sign convention]

We know,

$$EI \frac{d^2 y}{dx^2} = M = -py$$

$$EI \frac{d^2 y}{dx^2} = -py$$

$$\frac{d^2 y}{dx^2} = -\frac{py}{EI} = -K^2 y$$

Where

$$K^2 = \frac{P}{EI}$$

$$\frac{d^2 y}{dx^2} + K^2 y = 0$$

Solution of this differential equation is given by

$$y = A \cos Kx + B \sin Kx$$

where

A and B are constants

or

$$y = A \cos \left( \sqrt{\frac{P}{EI}} x \right) + B \sin \left( x \sqrt{\frac{P}{EI}} \right)$$

At B,

$$y = 0, x = 0$$

$$\therefore A = 0$$

At A,

$$y = 0, x = l$$

$$\therefore 0 = B \sin l \sqrt{\frac{P}{EI}} \quad A = \pi r^2$$

Or

$$\sin \left( l \sqrt{\frac{P}{EI}} \right) = 0$$

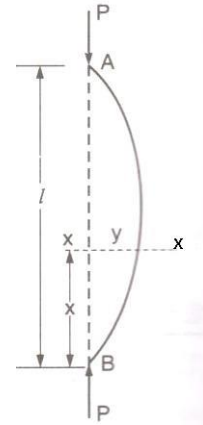
$$\therefore l \sqrt{\frac{P}{EI}} = 0, \pi, 2\pi, 3\pi \dots$$

Considering the least significant value, we get

$$l \sqrt{\frac{P}{EI}} = \pi$$

Or

$$\sqrt{\frac{P}{EI}} = \frac{\pi}{l}$$



**Fig.4.5**



Squaring both sides we get,

$$\frac{P}{EI} = \frac{\pi^2}{l^2}$$

$$P = \frac{\pi^2 EI}{l^2}.$$

#### 4.2.7. LIMITATION OF EULER'S FORMULA

we have discussed in Art. 32.12 that the Euler's formula for the crippling load,

$$P_E = \frac{\pi^2 EA}{\left(\frac{L_e}{k}\right)^2}$$

Euler's crippling stress,

$$\sigma_E = \frac{P}{A} = \frac{\pi^2 E}{\left(\frac{L_e}{k}\right)^2}$$

A little consideration will show that the crippling stress will be high, when the slenderness ratio is small. We know that the crippling stress for a column cannot be more than the crushing stress of the column material. It is thus obvious that the Euler's formula will give the value of crippling stress of the column (equal to the crushing stress of the column material) corresponding to the slenderness ratio. Now consider a mild steel column. We know that the crushing stress for the mild steel is 320 MPa or 320 N/mm<sup>2</sup> and young's modulus for the mild steel is 200 GPa or 200x10<sup>3</sup> N/mm<sup>2</sup>.

Now equating the crippling stress to the crushing stress,

$$320 = \frac{\pi^2 E}{\left(\frac{L_e}{k}\right)^2} = \frac{\pi^2 \times (200 \times 10^3)}{\left(\frac{L_e}{k}\right)^2}$$

$$\left(\frac{L_e}{k}\right)^2 = \frac{\pi^2 \times (200 \times 10^3)}{320}$$

$$\frac{L_e}{k} = 78.5 \text{ say } 80$$

Thus if the slenderness ratio is less than 80 the Euler's formula for a mild steel column is not valid.

Sometimes, the column, whose slenderness ratio is more than 80 are known as long columns and those whose slenderness ratio is less than 80 are known as short column. It is thus obvious that the Euler's formula holds good only for long columns.

Note: In the Euler's formula for crippling load, we have not taken into account the direct stresses induced in the material due to the load, (which increases gradually from zero to its crippling load). As a matter of fact, the combined stress, due to direct load and slight bending reaches its allowable value at a load, lower than that required for buckling; and therefore this will be the limiting value of the safe load.

**EXAMPLE 4.1.** A mild steel tube 4 m long, 30 mm internal diameter and 4 mm thick is used as a strut. Determine the safe compressive loads when this strut is used with the following end conditions :

(i) Both ends are hinged

(ii) Both ends are fixed

Take the factor of safety = 3 and  $E = 2 \times 10^5 \text{ N/mm}^2$ .

**Solution:**

**Given:**

Actual length,  $l = 4 \text{ m} = 4000 \text{ mm}$

Internal diameter,  $d_i = 30 \text{ mm}$

Thickness,  $t = 4 \text{ mm}$

$\therefore$  Outer diameter,  $d_o = \text{Internal diameter} + 2t$   
 $= 30 + 2 \times 4 = 38 \text{ mm}$

Moment of inertia,

$$\begin{aligned} I &= \frac{\pi}{64} (d_o^4 - d_i^4) \\ &= \frac{\pi}{64} (38^4 - 30^4) \\ &= \frac{\pi}{64} (2085136 - 810000) \\ &= 62593.09 \text{ mm}^4 \end{aligned}$$

Let the crippling load be  $P$ .

**(i) When both ends are hinged**

Effective length,

$$L = l = 4000 \text{ m}$$

Crippling load,

$$\begin{aligned} P &= \frac{\pi^2 EI}{L^2} \\ &= \frac{\pi^2 \times 2 \times 10^5 \times 62593.09}{(4000)^2} = 7722.11 \text{ N} \end{aligned}$$

$$\text{Safe load} = \frac{\text{Crippling load}}{\text{Factor of safety}} = \frac{7722.11}{3}$$

$$= 2574.04 \text{ N} \quad \text{Ans.}$$

**(ii) When both ends are fixed**

Effective length,

$$L = \frac{l}{2} = \frac{4000}{2} = 2000 \text{ mm}$$

Crippling load,

$$\begin{aligned} P &= \frac{\pi^2 EI}{L^2}, \\ P &= \frac{\pi^2 \times 2 \times 10^5 \times 62593.09}{(2000)^2} = \frac{1.235 \times 10^{11}}{4 \times 10^6} \\ &= 30875 \text{ N} \end{aligned}$$

$$\text{Safe load} = \frac{\text{Crippling load}}{\text{FOS}} = \frac{30875}{3}$$

$$= 10291.67 \text{ N} \quad \text{Ans.}$$

**EXAMPLE 4.2.** Find the maximum length of a solid mild steel rod having diameter 40 mm used as a column with both ends fixed to carry a load of 20 kN. Allow factor of safety = 3. Take  $E = 2 \times 10^5 \text{ N/mm}^2$ .

**Solution:**

**Given :**

$$\begin{aligned} \text{Diameter, } d &= 40 \text{ mm} \\ \text{Safe load} &= 20 \text{ kN} \\ \text{FOS} &= 3 \\ E &= 2 \times 10^5 \text{ N/mm}^2 \end{aligned}$$

Moment of inertia,

$$I = \frac{\pi}{64} d^4 = \frac{\pi}{64} (40)^4$$

$$= 125663.71 \text{ mm}^4$$

Crippling load,

$$\begin{aligned} P &= \text{Safe load} \times \text{FOS} \\ &= 20 \times 3 = 60 \text{ kN} = 60000 \text{ N} \end{aligned}$$

Let the effective length be  $L$  and actual length be  $l$

$$P = \frac{\pi^2 EI}{L^2}$$

$$60000 = \frac{\pi^2 \times 2 \times 10^5 \times 125663.71}{L^2}$$

$$L^2 = \frac{\pi^2 \times 2 \times 10^5 \times 125663.71}{60000}$$

$$L^2 = 4134170.35$$

$$\therefore L = \sqrt{4134170.2} = 2033.27 \text{ mm}$$

For a column with both end fixed

$$\begin{aligned} L &= \frac{l}{2} \text{ or } l = \text{Actual length} = 2L \\ &= 2 \times 2033.26 = 4066.54 \text{ mm} \\ \therefore l &= 4.1 \text{ m} \quad \text{Ans.} \end{aligned}$$

**EXAMPLE 4.3.** A solid round bar 4 m long and 50 mm in diameter was found to extend 4.6 mm under a tensile load of 50 kN. This bar is used as a strut with both ends hinged. Determine the buckling load for the bar and also the safe load taking factor of safety as 4.

**Solution.**

**Given:**

$$\text{Actual length of bar, } l = 4 \text{ m} = 4000 \text{ mm}$$

Change in length,  $\delta l = 4.6 \text{ mm}$   
Tensile load,  $P = 50 \text{ kN} = 50000 \text{ N}$   
FOS = 4  
Diameter of bar,  $d = 50 \text{ mm}$

Area of cross-section of bar,

$$A = \frac{\pi}{4} \times (50)^2 = 1963.5 \text{ mm}^2$$

$$\text{Stress} = \frac{P}{A} = \frac{50000}{1963.5} = 25.46 \text{ N/mm}^2$$

$$\text{Strain} = \frac{\delta l}{l} = \frac{4.6}{4000} = 0.00115$$

Modulus of elasticity,

$$E = \frac{\text{Stress}}{\text{Strain}} = \frac{25.46}{0.00115} = 2.2 \times 10^4 \text{ N/mm}^2$$

Moment of inertia,

$$I = \frac{\pi}{64} d^4 = \frac{\pi}{64} (50)^4$$

$$= 306796.16 \text{ mm}^4$$

Effective length,

$$L = l = 4000 \text{ mm}$$

Let  $P_c$  be the buckling load

We know,

$$P_c = \frac{\pi^2 EI}{L^2} = \frac{\pi^2 \times 2.2 \times 10^4 \times 306796.16}{(4000)^2}$$

$$= \frac{6.66 \times 10^{10}}{16 \times 10^6} = 4162.5 \text{ N} \quad \text{Ans.}$$

$$= \frac{\text{Buckling load}}{\text{FOS}}$$

$$= \frac{4162.5}{4} = 1040.63 \text{ N} \quad \text{Ans.}$$

**EXAMPLE 4.4.** Find the safe load for an elastic column made of a solid steel rod of dia 20 mm and length 1.5 m. It is fixed at both ends. The factor of safety is 2.5 and modulus of elasticity for the rod is 210 GPa.

**Solution.**

**Given:**

Diameter,  $d = 20 \text{ mm}$   
Length,  $l = 1.5 \text{ m} = 1500 \text{ mm}$   
FOS = 2.5

$$E = 210 \text{ GPa} = 210 \times 10^9 \text{ Pa} = 210 \times 10^9 \text{ N/m}^2$$

$$= \frac{210 \times 10^9}{10^6} = 210 \times 10^3 \text{ N/mm}^2$$

Moment of inertia,

$$I = \frac{\pi d^4}{64} = \frac{\pi (20)^4}{64} = 7853.98 \text{ mm}^4$$

Column is fixed at both the ends

∴ Effective length,

$$L = \frac{l}{2} = \frac{1500}{2} = 750 \text{ mm}$$

Let P be the crippling load,

We know by Euler's formula

Crippling load

$$P = \frac{\pi^2 EI}{L^2} = \frac{\pi^2 \times 210 \times 10^3 \times 7853.98}{(750)^2} = 28939.19 \text{ N}$$

$$\text{Safe load} = \frac{\text{Crippling load}}{FOS} = \frac{28939.19}{2.5}$$

$$= 11575.68 \text{ N} \quad \text{Ans.}$$

**EXAMPLE 4.5.** A column of timber section 150 mm x 200 mm is 6 m long both ends being fixed. Find the safe load for the column. Use Euler's formula and allow a factor of safety of 3. Take  $E = 17500 \text{ N/mm}^2$ .

**Solution:**

**Given:**

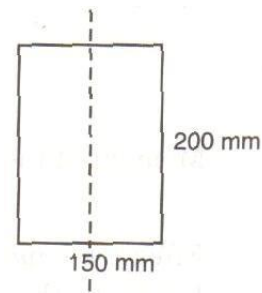
Width,  $b = 150 \text{ mm}$

Depth,  $d = 200 \text{ mm}$

Length,  $l = 6 \text{ m} = 6000 \text{ mm}$

FOS = 3

$E = 17500 \text{ N/mm}^2$



**Fig.4.6**

Least Moment of inertia,

$$I = \frac{db^3}{12} = \frac{200 \times 150^3}{12}$$

$$= 5.625 \times 10^7 \text{ mm}^4$$

Effective length of column when both ends are fixed,

$$L = \frac{l}{2} = \frac{6000}{2} = 3000 \text{ mm}$$

Let P be the crippling load.

By Euler's formula

Crippling load,

$$P = \frac{\pi^2 EI}{L^2} = \frac{\pi^2 \times 17500 \times 5.625 \times 10^7}{(3000)^2}$$

$$= 1079488 \text{ N}$$

$$\text{Safe load} = \frac{\text{Crippling load}}{FOS} = \frac{1079488}{3} = 359829.33 \text{ N}$$

$$= 360 \text{ kN} \quad \text{Ans.}$$

**EXAMPLE. 4.6.** Compare the ratio of the strength of a solid steel column to that of a hollow of the same cross-sectional area. The internal diameter of the hollow column is  $\frac{3}{4}$  of the external diameter. Both the columns have the same length and are pinned at the ends.

**Solution.**

**Hollow circular column:**

Let  $D$  and  $d$  be the external and internal diameter of hollow column respectively.

$$d = \frac{3}{4} D$$

Moment of inertia,

$$\begin{aligned} I_h &= \frac{\pi}{64} (D^4 - d^4) \\ &= \frac{\pi}{64} \left\{ D^4 - \left( \frac{3}{4} D \right)^4 \right\} = \frac{\pi}{64} \times D^4 \left( 1 - \frac{81}{256} \right) \\ &= \frac{175\pi \times D^4}{64 \times 256} \end{aligned}$$

Cross sectional area,

$$\begin{aligned} A_h &= \frac{\pi}{4} (D^2 - d^2) = \frac{\pi}{4} \left\{ D^2 - \left( \frac{3}{4} D \right)^2 \right\} \\ &= \frac{\pi}{4} \times D^2 \left( 1 - \frac{9}{16} \right) = \frac{\pi}{4} \times D^2 \times \frac{7}{16} \\ &= \frac{7\pi D^2}{64} \end{aligned}$$

Crippling load,

$$P_h = \frac{\pi^2 EI}{L^2} = \frac{\pi^2 \times E \times \frac{175\pi D^4}{64 \times 256}}{L^2}$$

**Solid Column:**

Let  $d_1$  be the diameter of the solid column

Cross-sectional area,

$$A_s = \frac{\pi}{4} d_1^2$$

According to question  $A_s = A_h$

$$\begin{aligned} \frac{\pi}{4} d_1^2 &= \frac{7\pi D^2}{64} \\ d_1^2 &= \frac{7\pi D^2}{64} \times \frac{4}{\pi} = \frac{7}{16} D^2 \\ d_1 &= \frac{\sqrt{7}}{4} D \end{aligned}$$

Moment of inertia,

$$I_s = \frac{\pi}{64} d_1^4 = \frac{\pi}{64} \times \left( \frac{\sqrt{7}}{4} D \right)^4 = \frac{\pi}{64} \times \frac{49}{16} D^4$$

Crippling load,

$$P_s = \frac{\pi^2 EI}{L^2} = \frac{\pi^2 \times E \times \frac{49\pi D^4}{64 \times 16}}{L^2}$$

Dividing (i) and (ii), we get

$$\frac{P_s}{P_h} = \frac{\pi^2 X E \pi X 49 D^4}{L^2 X 64 X 16} \times \frac{64 X 256 L^2}{\pi^2 X E X 175 \pi D^4} = \frac{49 X 16}{175} = 4.48$$

**EXAMPLE 4.7.** A steel rod 5m long and of 40 mm diameter is used as a column, with one end fixed and the other free. Determine the crippling load by Euler's formula. Take E as 200 GPa

**Solution.**

Given:

Length( $l$ ) = 5m =  $5 \times 10^3$  mm;

Diameter of column ( $d$ ) = 40 mm

modulus of elasticity ( $E$ ) = 200 GPa =  $200 \times 10^3$  N/mm<sup>2</sup>.

We know that moment of inertia of the column section,

$$I = \frac{\pi}{64} \times (d)^4 = \frac{\pi}{64} \times (40)^4 = 40,000\pi \text{ mm}^4$$

Since the column is fixed at one end and free at the other, therefore equivalent length of the column,

$$L_e = 2l = 2 \times (5 \times 10^3) = 10 \times 10^3 \text{ mm}$$

Euler's crippling load,

$$P_E = \frac{\pi^2 EI}{L_e^2} = \frac{\pi^2 \times (200 \times 10^3) \times (40,000\pi)}{(10 \times 10^3)^2} = 2480 \text{ N}$$

$$= 2.48 \text{ kN}$$

**Ans.**

**EXAMPLE 4.8.** A hollow alloy tube 4m long with external and internal diameter of 40mm and 25mm respectively was found to extend 4.8mm under a tensile load of 60kN. Find the buckling load for the tube with both ends pinned. Also find the safe load on the tube, taking a factor of safety as 5

**Solution:**

Given :

length $l$	= 4m,
External diameter of column ( $D$ )	= 40mm ;
Internal diameter of column ( $d$ )	= 25mm;
Deflection ( $\delta l$ )	= 4.8mm;
Tensile load	= 60kN
Factor of safety	= 5

**Buckling load for the tube,**

We know that area of the tube,

$$A = \frac{\pi}{4} \times (D^2 - d^2) = \frac{\pi}{4} ((40)^2 - (25)^2) = 765.8 \text{ mm}^2$$

And moment of inertia of the tube,

$$I = \frac{\pi}{64} \times (D^4 - d^4) = \frac{\pi}{64} \times ((40)^4 - (25)^4) = 106488.95 \text{ mm}^4$$

We also know that the strain in the alloy tube,

$$e = \frac{\delta l}{l} = \frac{4.8}{4 \times 10^3} = 0.0012$$

and modulus of elasticity for the alloy,

$$E = \frac{\text{Load}}{\text{Area} \times \text{Strain}} = \frac{60 \times 10^3}{765.8 \times 0.0012} = 65291.20 \text{ N/mm}^2$$

since the column is pinned at its both ends, therefore equivalent length of the column,

$$L_e = l = 4 \times 10^3$$

Euler's buckling load,

$$P_E = \frac{\pi^2 EI}{L_e^2} = \frac{\pi^2 \times 65291.20 \times 106488.95}{(4 \times 10^3)^2} = 4288.83 \text{ N}$$

$$= 4.29 \text{ KN} \quad \text{Ans.}$$

### Safe load for the tube

We also know that safe load for the tube

$$= \frac{\text{Buckling load}}{\text{Factor of safety}} = \frac{4.29}{5} = 0.858 \text{ KN} \quad \text{Ans.}$$

**EXAMPLE 4.9. Compare the ratio of the strength of a solid steel column to that of a hollow of the same cross-sectional area. The internal diameter of the hollow column is  $\frac{3}{4}$  of the external diameter. Both the columns have the same length and are pinned at both ends.**

**Solution.**

Area of solid steel column  $A_s = A_H$  (where  $A_H$  = Area of hollow column );

internal diameter of hollow column ( $d$ ) =  $\frac{3}{4} D$  ( where  $D$  = External diameter )

length of solid column ( $l_s$ ) =  $l_H$  = (where  $l_H$  = Length of hollow column).

Let  $D_1$  = Diameter of the solid column,

$k_H$  = Radius of gyration for hollow column and

$k_s$  = Radius of gyration for solid column.

Since both the columns are pinned at there both ends, therefore equivalent length of the solid column,

$$L_s = l_s = l_H = l_H = L$$

We know that Euler's crippling load for the solid column,

$$P_s = \frac{\pi^2 EI}{L_H^2} = \frac{\pi^2 E A_s k_s^2}{L^2} D_1$$

Dividing equation (ii) by (i),

$$\frac{P_H}{P_s} = \left( \frac{k_H}{k_s} \right)^2 = \frac{\frac{D^2 + d^2}{16}}{\frac{D_1^2}{16}} = \frac{D^2 + d^2}{D_1^2} = \frac{D^2 + \left( \frac{3D}{4} \right)^2}{D_1^2}$$

$$= \frac{25 D^2}{16 D_1^2}$$

Since the cross-sectional areas of the both the columns is equal, therefore



$$\frac{\pi}{4} \times D^2 = \frac{\pi}{4} (D^2 - d^2) = \frac{\pi}{4} \left[ D^2 - \left( \frac{3D}{4} \right)^2 \right] = \frac{\pi}{4} \times \frac{7D^2}{16}$$

$$D_1^2 = \frac{7D^2}{16}$$

Now substituting the value of  $D_1^2$  in equation (iii),

$$\frac{P_H}{P_S} = \frac{25 D^2}{16 \times \frac{7 D^2}{16}} = \frac{25}{7} \quad \text{Ans.}$$

**EXAMPLE 4.10.** An I section joist 400mm x 200mm x 20mm and 6m long is used as a strut with both ends fixed. What is Euler's crippling load for the column? Take young's modulus for the joist as 200 GPa.

**Solution.**

Given :

Outer depth (D) = 400 mm;

Outer width (B) = 200 mm;

Length (l) = 6m =  $6 \times 10^3$  mm

modulus of elasticity (E) = 200 GPa =  $200 \times 10^3$  N/mm<sup>2</sup>.

From the geometry of the figure, we find that inner depth,

$$d = 400 - (2 \times 20) = 360 \text{ mm}$$

And inner width,

$$b = 200 - 20 = 180 \text{ mm}$$

We know that moment of inertia of the joist section about X-X axis,

$$I_{xx} = \frac{1}{12} [BD^3 - ba^3]$$

$$= \frac{1}{12} [200 \times (400)^3 - 180 \times (360)^3] \text{ mm}^4$$

$$= 366.8 \times 10^6 \text{ mm}^4$$

Similarly,

$$I_{yy} = \left[ 2 \times \frac{2 \times (200)^3}{12} \right] + \frac{360 \times (20)^3}{12} \text{ mm}^4$$

$$= 2.91 \times 10^6 \text{ mm}^4$$

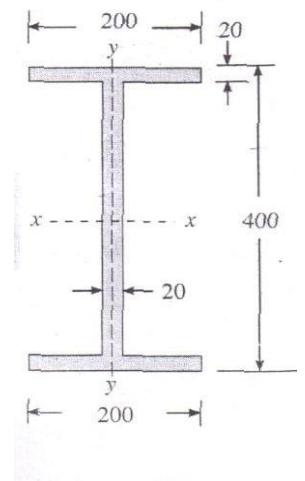
Since  $I_{yy}$  is less than  $I_{xx}$ , therefore the joist will tend to buckle in Y-Y direction. Thus, we shall take the value of  $I_{yy} = 2.91 \times 10^6 \text{ mm}^4$ . Moreover, as the column is fixed at its both ends, therefore equivalent length of the column.

$$L_e = \frac{l}{2} = \frac{(6 \times 10^3)}{2} = 3 \times 10^3 \text{ mm}$$

Euler's crippling load for the column,

$$P_E = \frac{\pi^2 EI}{L_e^2} = \frac{\pi^2 \times (200 \times 10^3) \times (2.91 \times 10^6)}{(3 \times 10^3)^2} = 638.2 \times 10^3 \text{ N}$$

$$= 638.2 \text{ KN} \quad \text{Ans.}$$



**EXAMPLE 4.11.** A T-section 150 mm x 120 mm x 20 mm is used as a strut of 4 m long with hinged at its both ends. Calculate the crippling load, If Young's modulus for the material be 200 GPa.

**Solution.**

Given:

Size of T-section = 150 mm x 120 mm x 20 mm;

Length ( $l$ ) = 4 m =  $4 \times 10^3$  mm

Young's modulus ( $E$ ) = 200 GPa

=  $200 \times 10^3$  N/mm.

First of all, let us find the centre of the T-section; Let bottom of the web be the axis of reference.

**Web**

$$a_1 = 100 \times 20 = 2000 \text{ mm}^2$$

$$y_1 = \frac{100}{2} = 50 \text{ mm}$$

**Flange**

$$a_2 = 150 \times 20 = 3000 \text{ mm}^2$$

$$y_2 = 100 + \left(\frac{20}{2}\right) = 110 \text{ mm}$$

We know that distance between the centre of gravity of the T-section and bottom of the web

$$\bar{y} = \frac{a_1 y_1 + a_2 y_2}{a_1 + a_2} = \frac{(2000 \times 50) + (3000 \times 110)}{2000 + 3000} = 86 \text{ mm}$$

We also know that moment of inertia of the T-section about X-X axis, **Fig.4.8**

$$I_{xx} = \left( \frac{20 \times (100)^3}{12} + 2000 \times (36)^2 \right) + \left( \frac{150 \times (20)^3}{12} + 3000 \times (24)^2 \right) \text{ mm}^4$$

$$= (4.26 \times 10^6) + (1.83 \times 10^6) = 6.09 \times 10^6 \text{ mm}^4$$

Similarly,

$$I_{yy} = \frac{100 \times (20)^3}{12} + \frac{20 \times (150)^3}{12} = 5.692 \times 10^6 \text{ mm}^4$$

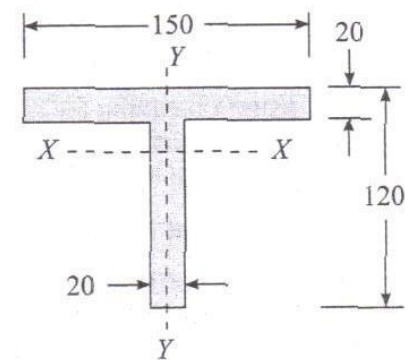
Since  $I_{yy}$  is less than  $I_{xx}$ , therefore the column will tend to buckle in Y-Y direction. Thus, we shall take the value of  $I$  as  $I_{yy} = 5.69 \times 10^6 \text{ mm}^4$ . Moreover, as the column is hinged at its both ends, therefore length of the column,

$$L_e = l = 4 \times 10^3 \text{ mm}$$

Euler's crippling load,

$$P_E = \frac{\pi^2 EI}{L_e^2} = \frac{\pi^2 \times (200 \times 10^3) \times (5.69 \times 10^6)}{(4 \times 10^3)^2} = 702 \times 10^3 \text{ N}$$

$$= 702 \text{ kN} \quad \text{Ans.}$$



#### 4.2.8. RANKINE'S FORMULA

Euler's formula gives correct result only for very long column which fails by buckling. Short column fails by crushing. In practice we come across struts and columns which are neither too short nor long. The failure of the column will be due to the combined effect of crushing and buckling. Rankine devised an empirical formula based on experiments for the collapse load which is applicable for both short and long columns.

Let  $P$  = Crippling load by Rankine's formula

$P_c$  = Crushing load or compressive load

$P_e$  = Crippling load by Euler's formula.

Then the Rankine's formula is given by

$$\frac{1}{P} = \frac{1}{P_c} + \frac{1}{P_e}$$

Where  $P_c = \sigma_c \times A$

= Compressive stress (yield stress)

And

$$P_e = \frac{\pi^2 EI}{L^2}$$

$A$  = cross-sectional area of column

We have,

$$\frac{1}{P} = \frac{1}{P_c} + \frac{1}{P_e}$$

$$\frac{1}{P} = \frac{P_e + P_c}{P_c P_e}$$

Dividing numerator and denominator of RHS by  $P_e$

$$P = \frac{P_c}{1 + \frac{P_c}{P_e}} = \frac{\sigma_c A}{1 + \frac{\sigma_c A L^2}{\pi^2 EI}} \therefore P_c = \sigma_c A \text{ and } P_e = \frac{\pi^2 EI}{L^2}$$

$$= \frac{\sigma_c A}{1 + \frac{\sigma_c A L^2}{\pi^2 E \times A K^2}} = \frac{\sigma_c A}{1 + \frac{\sigma_c}{\pi^2 E} \times \left(\frac{L}{K}\right)^2} \therefore I = A K^2$$

$$= \frac{\sigma_c A}{1 + \alpha \left(\frac{L}{K}\right)^2}$$

where  $\frac{L}{K}$  = Slenderness ratio

$\alpha$  = Rankine's constant =  $\frac{\sigma_c}{\pi^2 E}$

#### 4.2.9. Applicability

(i) In case of short column,  $P_e$  will be large as  $L$  is small. As  $P_e$  is large,  $\frac{1}{P_e}$  will be small enough compared to  $\frac{1}{P_c}$ . Hence  $\frac{1}{P_e}$  may be neglected and equation (i) becomes

$$\frac{1}{P} = \frac{1}{P_c}$$

Or

$$P = P_c$$

Hence, crippling load by Rankine's formulae, for a short column is approximately equal to crushing load.

**(ii) In case of long column,**  $P_e$  will be small as  $L$  is large. As  $P_e$  is small,  $\frac{1}{P_e}$  will be large enough as compared to  $\frac{1}{P_c}$ . Hence  $\frac{1}{P_c}$  may be neglected and equation (i) becomes

$$\frac{1}{P} = \frac{1}{P_e}$$

$$\therefore P = P_e$$

Hence, crippling load by Rankine's formula for a long column is approximately equal to crippling load by Euler's formula.

So Rankine's formula give satisfactory result for both long and short columns.

**Table 4.2. Rankine's constants ( $\alpha$ )**

S.No	Material	$\sigma_c \text{ N/mm}^2$	$\alpha = \frac{\sigma_c}{\pi^2 E}$
1.	Mild steel	320	$\frac{1}{7500}$
2.	Cast iron	550	$\frac{1}{1600}$
3.	Wrought iron	250	$\frac{1}{9000}$
4.	Timber	50	$\frac{1}{750}$

**Table 8.3 Rankine's Critical stress for Mild Steel columns**

For  $\sigma_c = 320 \text{ N/mm}^2$  and  $\sigma = \frac{1}{7500}$

S.No	Slenderness	Rankine's critical $\text{N/mm}^2$
1.	10	316
2.	20	304
3.	30	286
4.	40	264
5.	50	240
6.	60	216
7.	70	193
8.	80	173
9.	90	153
10.	100	137
11.	110	122

12.	120	110
13.	130	98
14.	140	89
15.	150	80
16.	160	72
17.	170	66
18.	180	60
19.	190	55
20.	200	50
21.	210	47
22.	220	43
23.	230	40
24.	240	37
25.	250	34

#### 4.3.0. FACTOR OF SAFETY

Factor of safety is defined as the ratio between crippling load and safe load.

$$\text{Factor of safety} = \frac{\text{Crippling load}}{\text{Safe load}}$$

The values of factor of safety in engineering design varies from 3 and 12.

#### 4.3.1.SAFE LOAD

Factor of safety is defined as the ratio between crippling load and safe load.

$$\text{Safe load} = \frac{\text{Crippling load}}{\text{Factor of safety}}$$

**EXAMPLE .4.12.** An ISMB 250 Rolled steel joist is to be used as a column 4.0 m long with both ends fixed. Find the safe load on the column allowing a factor of safety of 3. Take  $\sigma_c = 320 \text{ N/mm}^2$  and  $\alpha = \frac{1}{7500}$ .

Properties of column section are:

$$A = 4755 \text{ mm}^2$$

$$I_{xx} = 5.1316 \times 10^7 \text{ mm}^4$$

$$I_{yy} = 3.345 \times 10^6 \text{ mm}^4$$

**Solution:**

Given :

Actual length of column,

$$= 4.0 \text{ m} = 4000 \text{ mm}$$

$$\text{FOS} = 3$$

$$\sigma_c = 320 \text{ N/mm}^2$$

$$\alpha = \frac{1}{7500}$$

$$A = 4755 \text{ mm}^2$$

Least moment of inertia,

$$I = 3.345 \times 10^6 \text{ mm}^4$$

Effective length of column,

$$L = \frac{l}{2} = \frac{4000}{2} = 2000 \text{ mm}$$

$$I = AK^2$$

$$\therefore K = \sqrt{\frac{I}{A}} = \sqrt{\frac{3.345 \times 10^6}{4755}} = 26.52$$

Rankine's crippling load is given by

$$P = \frac{\sigma_c A}{1 + \alpha \left(\frac{L}{K}\right)^2} = \frac{320 \times 4755}{1 + \frac{1}{7500} \times \left(\frac{2000}{26.52}\right)^2}$$

$$= \frac{320 \times 4755}{1.76} = 864545.45 \text{ N}$$

$$\text{Safe load} = \frac{\text{Crippling load}}{FOS} = \frac{864545.45}{3}$$

$$= 288181.82 \text{ N} \approx 288.18 \text{ kN} \quad \text{Ans.}$$

**EXAMPLE.4.13.** A hollow cast iron column of external diameter 250 mm and internal diameter 200 mm is 8 m long with one end fixed and the other end hinged. Find the safe load with a factor of safety of 5. Take  $\sigma_c = 550 \text{ N/mm}^2$  and  $\alpha = \frac{1}{1600}$ .

**Solution.**

Given :

Actual length of column,

$$= 8 \text{ m} = 8000 \text{ mm}$$

Outer diameter,  $D = 250 \text{ mm}$

Inner diameter,  $d = 200 \text{ mm}$

FOS  $= 5$

Compressive stress,

$$\sigma_c = 550 \text{ N/mm}^2$$

Rankine's constant,

$$\alpha = \frac{1}{1600}$$

When one end fixed and other end hinged

Effective length of column,

$$L = \frac{l}{\sqrt{2}} = \frac{8000}{\sqrt{2}} = 5656.85 \text{ mm}$$

Least moment of inertia,

$$I = \frac{\pi}{64} (D^4 - d^4) = \frac{\pi}{64} (250^4 - 200^4)$$

$$= \frac{\pi}{64} \times 2.306 \times 10^9 = 1.132 \times 10^8 \text{ mm}^4$$

Cross-sectional area,

$$A = \frac{\pi}{64} (D^2 - d^2) = \frac{\pi}{64} (250^2 - 200^2)$$

$$= \frac{\pi}{64} \times 22500 = 17671.46 \text{ mm}^2$$

$$I = AK^2$$

$$K = \sqrt{\frac{I}{A}} = \sqrt{\frac{1.132 \times 10^8}{17671.46}} = \sqrt{6405.81} = 80.04$$

Rankine's crippling load is given by

$$P = \frac{\sigma_c A}{1 + a \left(\frac{L}{K}\right)^2} = \frac{550 \times 17671.46}{1 + \frac{1}{1600} \left(\frac{5656.85}{80.04}\right)^2}$$

$$= \frac{9719303}{4.12} = 2359054.1 \text{ N}$$

$$\text{Safe load} = \frac{\text{cripling load}}{FOS} = \frac{2359054.1}{5}$$

$$= 471810.83 \text{ N}$$

$$= 471.81 \text{ kN} \quad \text{Ans.}$$

**EXAMPLE.4.14.** Find the Euler's crippling load for a hollow cylindrical steel column of 38mm external diameter and 2.5mm thick. Take length of the column as 2.3m and hinged at its both ends. Take  $E=205 \text{ GPa}$ . Also determine crippling load by Rankine's formula using constants as 335MPa and  $\frac{1}{7500}$

**Solution.**

**Given:**

External diameter	$D = 38\text{mm}$
Thickness,	$= 2.5 \text{ mm}$
Internal diameter	$d = 33 \text{ mm } (38-2 \times 2.5)$
Length of the column	$l = 2.3\text{m}$
Yield stress	$\sigma_c = 335 \text{ MPa} = 335 \text{ N/mm}^2$
Rankine's Constant	$(a) = \frac{1}{7500}$

**Euler's Crippling load**

$$I = \frac{\pi}{64} (D^4 - d^4)$$

$$I = \frac{\pi}{64} (38^4 - 33^4)$$

$$= 14.05 \times 10^3 \pi \text{ mm}^4$$

$$L_e = l = 2.3 \times 10^3 \text{ mm}$$

Euler's Crippling load,

$$P_E = \frac{\pi^2 EI}{L_e^2}$$

$$P_E = \frac{\pi^2 (205 \times 10^3) \times (14.05 \times 10^3 \pi)}{(2.3 \times 10^3)^2} = 16880 \text{ N} = 16.88 \text{ kN}$$

**Rankine's Crippling load**

$$A = \frac{\pi}{4} (D^2 - d^2)$$

$$A = \frac{\pi}{4} (38^2 - 33^2)$$

$$= 88.75\pi \text{ mm}^2$$

$$k = \sqrt{\frac{I}{A}}$$

$$k = \sqrt{\frac{(14.05 \times 10^3 \pi)}{88.75\pi}}$$

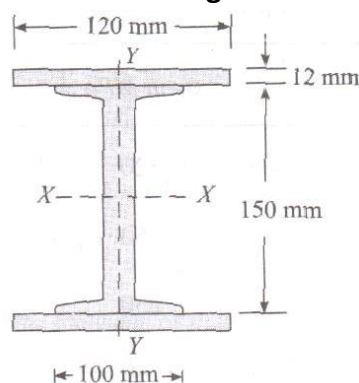
$$= 12.6 \text{ mm}$$

$$P_R = \frac{\sigma_{cs} A}{1 + \alpha \left( \frac{Le}{K} \right)^2}$$

$$P_R = \frac{335 \times 88.75\pi}{1 + \frac{1}{7500} \left( \frac{2.3 \times 10^3}{K 12.6} \right)^2}$$

$$= 17169 \text{ N} = 17.17 \text{ kN}$$

**EXAMPLE 4.15.** Figure 4.9 shows a built-up column consisting of 150 mm x 100 mm R.S.J. with 120 mm x 12 mm plate riveted to each flange.



**Fig.4.9**

Calculate the safe load, the column can carry, if it is 4 m long having one end fixed and the other hinged with a factor of safety 3.5. Take the properties of the joist as Area = 2167 mm<sup>2</sup>,  $I_{xx} = 8.391 \times 10^6 \text{ mm}^4$ ,  $I_{yy} = 0.948 \times 10^6 \text{ mm}^4$ . Assume the yield stress as 315 MPa and Rankine's constant (a) =  $\frac{1}{7500}$ .

**Solution.**

Given :

Length of the column ( $l$ )	= 4 m = $4 \times 10^3 \text{ mm}$ ;
Factor of safety	= 3.5 ;
Yield stress ( $\sigma_c$ )	= 315 MPa = 315 N/mm <sup>2</sup> ;
Area of joist	= 2167 mm <sup>2</sup> ;
Moment of inertia, about X-X axis ( $I_{xx}$ )	= $8.391 \times 10^6$ ;
about Y-Y axis $I_{yy}$	= $0.948 \times 10^6 \text{ mm}^4$



$$\text{Rankine's constant (a)} = \frac{1}{7500}.$$

From the geometry of the figure, we find that the area of the column section,

$$A = 2167 + (2 \times 120 \times 12) = 5047 \text{ mm}^2$$

And moment of inertia of the column section about X-X axis,

$$I_{xx} = (8.391 \times 10^6) + 2 \left[ \frac{120 \times (12)^3}{12} + 120 \times 12 \times (81)^2 \right] \text{ mm}^4$$

$$= (8.391 \times 10^6) + (18.93 \times 10^6) = 27.32 \times 10^6 \text{ mm}^4$$

Similarly,

$$I_{yy} = (0.948 \times 10^6) + 2 \left[ \frac{12 \times (120)^3}{12} \right] \text{ mm}^4$$

$$= (0.948 \times 10^6) + (3,456 \times 10^6) = 4.404 \times 10^6 \text{ mm}^4$$

Since  $I_{yy}$  is less than  $I_{xx}$ , therefore the column will tend to buckle in Y-Y direction. Thus we shall take  $I$  equal to  $I_{yy} = 4.404 \times 10^6 \text{ mm}^4$  (i.e., least of two). Moreover as the column is fixed at one end and hinged at the other, therefore equivalent length of the column.

$$L_e = \frac{l}{\sqrt{2}} = \frac{4 \times 10^3}{\sqrt{2}} = 2.83 \times 10^3 \text{ mm}$$

We know that least radius of gyration,

$$K = \sqrt{\frac{I}{A}} = \sqrt{\frac{4.404 \times 10^6}{5047}} = 29.4 \text{ mm}$$

∴ Rankine's crippling load on the column

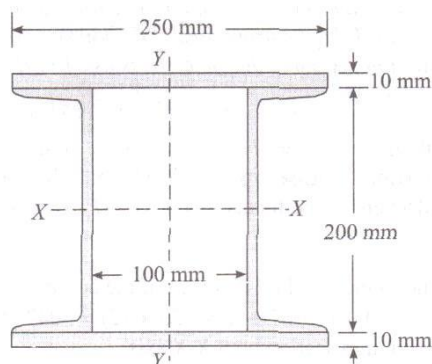
$$P_R = \frac{\sigma_c \cdot A}{1 + a \left( \frac{L_e}{K} \right)^2} = \frac{315 \times 5047}{1 + \frac{1}{7500} \left( \frac{2.83 \times 10^3}{29.5} \right)^2}$$

$$= 716 \times 10^3 \text{ N} = 716 \text{ kN}$$

And safe load on the column

$$= \frac{\text{Crippling load}}{\text{Factor of safety}} = \frac{716}{3.5} = 204 \text{ kN} \quad \text{Ans.}$$

**EXAMPLE 4.16.** A column is made up of two channels. ISJC 200 and two 250mm x 10 mm flange plates as show in Fig. 4.10.



**Fig.4.10**

Determine by Rankine's formula the safe load, the column of 6 m length, with both ends fixed, can carry with a factor of safety 4. The properties of one channel are Area = 1777 mm<sup>2</sup>,  $I_{xx} = 11.612 \times 10^6 \text{ mm}^4$  and  $I_{yy} = 0.842 \times 10^6 \text{ mm}^4$ . Distance of centroid from back to web = 22.7 mm. Take  $\sigma_c = 320 \text{ MPa}$  and Rankine's constant =  $\frac{1}{7500}$

**Solution.**

Given :

$$\begin{aligned}\text{Length of the column (} l \text{)} &= 6 \text{ m} = 6 \times 10^3 \text{ mm} ; \\ \text{Factor of safety} &= 4 ; \\ \text{Area of channel} &= 1777 \text{ mm}^2 ; \\ \text{Moment of inertia, about X-X axis (} I_{xx} \text{)} &= 11.612 \times 10^6 \text{ mm}^4 ; \\ \text{Moment of inertia, about Y-Y axis } I_{yy} &= 0.842 \times 10^6 \text{ mm}^4 ; \\ \text{Distant of centroid from} \\ \text{the back of web} &= 22.7 \text{ mm} ; \\ \text{crushing stress (} \sigma_c \text{)} &= 320 \text{ MPa} = 320 \text{ N/mm}^2 \\ \text{Rankine's constant (a)} &= \frac{1}{7500}.\end{aligned}$$

From the geometry of the figure, we find that area of the column section,

$$A = 2[1777 + (250 \times 10)] = 8554 \text{ mm}^2$$

And moment of inertia of the column section about X-X Axis.

$$\begin{aligned}I_{xx} &= (2 \times 11.612 \times 10^6) + 2 \left[ \frac{250 \times 10^2}{12} + (250 \times 10) \times (105)^2 \right] \text{ mm}^4 \\ &= (23.224 \times 10^6) + (55.167 \times 10^6) \text{ mm}^4 \\ &= 78.391 \times 10^6 \text{ mm}^4\end{aligned}$$

$$\begin{aligned}\text{Similarly, } I_{yy} &= 2 \left[ \frac{10 \times 250^3}{12} \right] = (0.842 \times 10^6) + 1777 \times (50 + 19.7)^2 \\ &= 2[(13.021 \times 10^6) + (9.475 \times 10^6)] = 44.992 \times 10^6 \text{ mm}^4\end{aligned}$$

Since  $I_{yy}$  is less than  $I_{xx}$ , therefore the column will tend to buckle in Y-Y direction. Thus we shall take  $I$  equal to  $I_{yy} = 44.992 \times 10^6 \text{ mm}^4$  (i.e., least of the two). Moreover as the column is fixed at its both ends, therefore equivalent length of the column.

$$L_e = \frac{l}{2} = \frac{6 \times 10^3}{2} = 3 \times 10^3 \text{ mm}$$

We know that least radius of gyration

$$k = \sqrt{\frac{I}{A}} = \frac{44.992 \times 10^6}{8554} = 72.5 \text{ mm}$$

$\therefore$  Rankine's crippling load on the column

$$\begin{aligned}P_R &= \frac{\sigma_c A}{1 + a \left( \frac{L_e}{k} \right)^2} = \frac{320 \times 8554}{1 + \frac{1}{7500} \times \left( \frac{3 \times 10^3}{72.5} \right)^2} \\ &= 2228.5 \times 10^3 \text{ N} = 2228.5 \text{ kN}\end{aligned}$$

$$\text{and safe load on the column} = \frac{\text{Crippling load}}{\text{Factor of safety}} = \frac{2228.5}{4} = 557.1 \text{ kN Ans.}$$

**4.2. COMBINED BENDING AND DIRECT STRESS**

Direct and Indirect stresses – combination of stresses – Eccentric loads on Columns – Effects of Eccentric loads / Moments on Short columns – Combined direct and bending stresses – maximum and minimum stresses in sections – problems – Conditions for no tensions – limit of eccentricity – middle third rule – core or kern for square, rectangular and circular sections – chimneys subjected to uniform wind pressure – combined stresses in Chimneys due to self weight and Wind load – chimneys of hollow square and hollow circular cross sections only - problems

---

**4.2. DIRECT STRESS**

If a column is loaded with axial load  $P$ , then the column is subjected to direct stress and is given by

$\sigma_d = \frac{P}{A}$ , where  $A$  is the cross-sectional area of the column. Figure 4.11 shows a direct stress.

**4.2.1. COMBINED DIRECT AND BENDING STRESS**

Figure 4.12 shows a column subjected to a load  $P$  whose line of action is at a distance ' $e$ ' from the axis of the column. Apply two equal and opposite forces along the axis of the column as shown in Fig. 4.12(ii). Now the three forces acting on the column can be converted into two systems.

(i) An axial force  $P$  which will produce direct stress in the column, as shown in Fig. 4.12 (iii)

(ii) Two equal and opposite forces forming a couple. The arm of the couple is ' $e$ '. The moment of the couple will be  $P \times e$  and will produce bending stress ( $\sigma_b$ ) in the column [Fig. 4.12 (iv)].

So a column Subjected to eccentric loading, is subjected to both direct and bending stress.

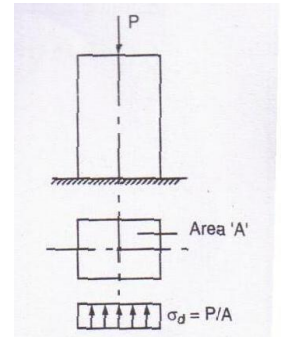


Fig4.11

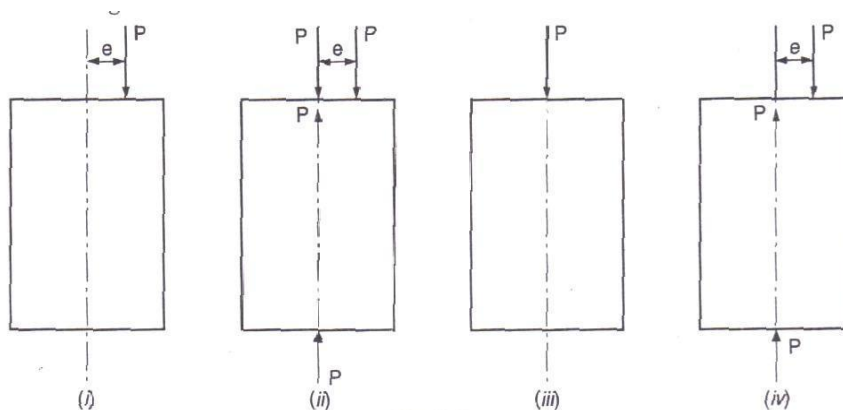


Fig4.12

Considered a column of width 'b' and depth 'd' subjected to an eccentric load P as shown in Fig.4.13.

Cross-sectional area,  $A = b \times d$ .

$$\text{Direct stress, } \sigma_d = \frac{P}{A} = \frac{P}{bd}$$

Due to eccentricity of load, the column is subjected to B.M = P x e. this B.M. will produce bending stress in the column.

$$\text{Bending stress, } \sigma_b = \frac{M}{Z}$$

Where

$$Z = \text{section modulus} = \frac{I}{Y}$$

$$= \frac{db^2 / 12}{b/2} = \frac{db^2}{6}$$

(As the eccentricity of the load is from Y-Y axis,  $I = \frac{db^3}{12}$ )

$$\sigma_b = \frac{P \times e}{\frac{db^2}{6}}$$

The resultant stress at any point is the sum of direct and bending stress at that point.

$$\text{Total stress} = \sigma_d \pm \sigma_b = \frac{P}{A} \pm \frac{M}{Z}$$

Fig4.13

The +ve and -ve sign depends upon the position of the load. The stress will be maximum at the face BC as the load is near to BC. The stress will be minimum at the face AD as the load is away from AD.

$$\sigma_{\max} = \frac{P}{A} + \frac{M}{Z} = \frac{P}{A} + \frac{6Pe}{Ab} = \frac{P}{A} \left[ 1 + \frac{6e}{b} \right]$$

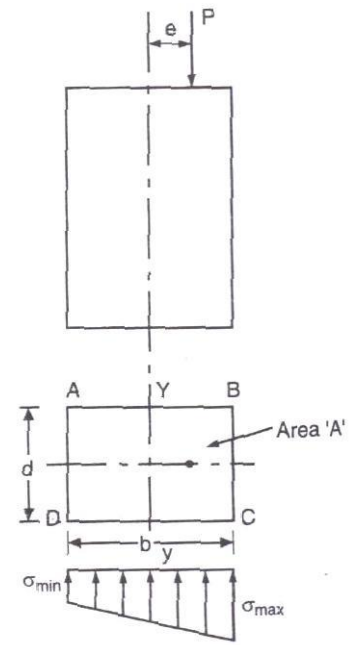
$$\text{and } \sigma_{\min} = \frac{P}{A} + \frac{M}{Z} = \frac{P}{A} - \frac{6Pe}{Ab} = \frac{P}{A} \left[ 1 - \frac{6e}{b} \right]$$

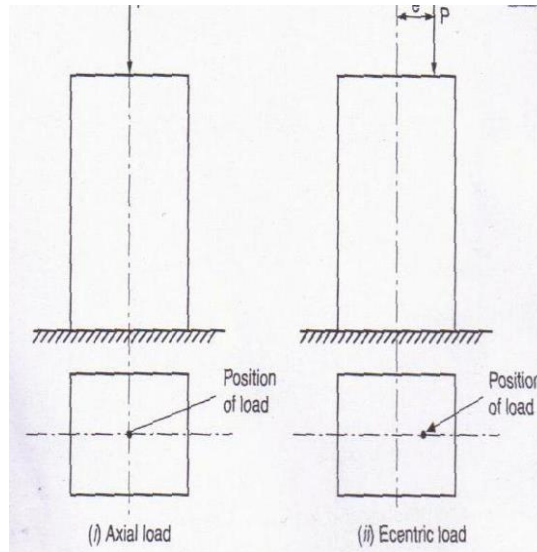
$\sigma_{\max}$  is always compressive. If  $\sigma_{\min}$  is +ve then it is compressive and if the value of  $\sigma_{\min}$  is -ve, then it is tensile.

#### 4.2.2. ECCENTRIC LOAD

A load whose line of action passes through the center of gravity of the section, then the load is said to be axial load. A load whose line of action does not pass through the center of gravity of the section, then the load is called eccentric load.

Figure 4.14 (i) shows a section of column loaded with axial load P and Fig. 4.14 (ii) shows a section of column loaded with eccentric load. The distance between the line of action of load and axis of the column (passing through C.G.) is the eccentricity 'e' of the load. The eccentricity of a load may be about one axis or about both the axes.





#### **4.2.3. LIMIT OF ECCENTRICITY**

If a column is eccentrically loaded, then both direct and bending stress is simultaneously developed. If the direct stress ( $\sigma_d$ ) is more than bending stress ( $\sigma_b$ ), the stress in the section all through will be compressive. If the bending stress is more than direct stress, then there will be tensile stress. As the concrete columns are weak in tension, load should be applied in such a way that there is no tensile stress in the column. To avoid tensile stress, the bending stress ( $\sigma_b$ ) should be less than or equal to direct stress ( $\sigma_d$ ).

Hence,

$$\sigma_b \leq \sigma_d$$

$$\frac{M}{Z} \leq \frac{P}{A}$$

$$\frac{Pe}{Z} \leq \frac{P}{A}$$

$$e \leq \frac{Z}{A}$$

This shows that for tension in the column, eccentricity should be less than or equal to  $\frac{Z}{A}$

#### **4.2.4. LIMIT OF ECCENTRICITY FOR A RECTANGULAR SECTION**

Figure 4.15 shows a rectangular section of width 'b' and depth 'd'. Let the section be subjected to a load at a distance 'e', along x - x axis, from y - y axis. The bending will take place along y-y-axis.

$$I_{xx} = \frac{db^3}{12} \text{ and } y = b/2$$

$$\text{Section modulus, } Z = \frac{I_{yy}}{Y}$$

$$= \frac{db^3}{12} \times \frac{2}{b} = \frac{db^2}{6}$$

Area of cross section,  $A = bd$ .

For no tension,  $e \leq \frac{Z}{A}$

$$e \leq \frac{db^2}{6bd}$$

$$e \leq \frac{b}{6}$$

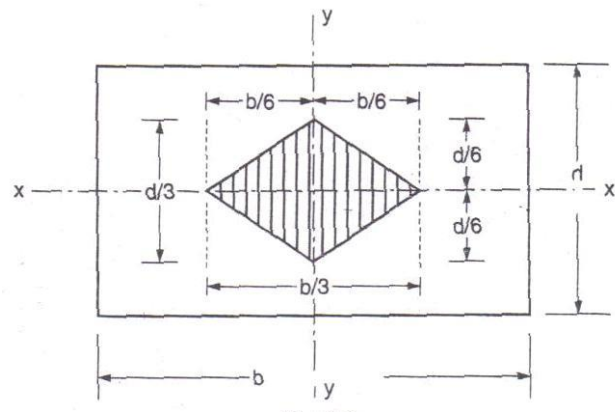


Fig4.15

This means that for no tension, load can be applied on both sides of y-y at a distance  $b/6$  on x-x axis as shown in Fig. 4.15.

Therefore, for no tension, the load must be placed within  $\frac{b}{6} + \frac{b}{6} = \frac{b}{3}$  i.e., middle third of the width of section.

Similarly, for no tension, the load can be placed on y-y axis, on both sides of x-x axis, within middle third of depth i.e.,  $d/3$ .

If we join the four points on x-x and y-y axis, we get a rhombus. This rhombus is known as core or kernel as shown in Fig. 4.15. Thus, core or Kernel of the section is the area in which any eccentric load, if placed, will not produce any tension in the section.

## (ii) Limit of eccentricity for a circular section

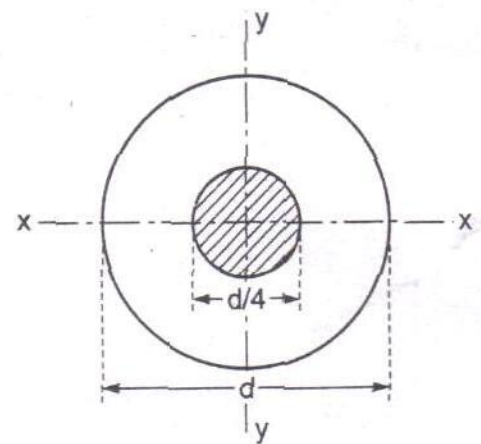
Figure 4.16 shows a circular section of diameter 'd'.

Let the section be subjected to a load at a distance 'e' from centroid on x-x-axis

$$I_{xx} = I_{yy} = \frac{\pi d^4}{64}$$

$$Y = d/2$$

$$\text{Section modulus, } Z = \frac{I_{yy}}{Y}$$



$$= \frac{\pi d^4}{64} \times \frac{2}{d} = \frac{\pi d^3}{32}$$

Area of cross-section,  $A = \frac{\pi d^2}{4}$

For no tension

$$e \leq \frac{Z}{A}$$

Fig4.16

$$e \leq \frac{\pi d^3}{32} \times \frac{4}{\pi d^2}$$

$$e \leq \frac{d}{8}$$

This means that for no tension, the load can be eccentric, on either sides of centroid  $d/8$  distance.

$$\therefore \text{Diameter of core} = 2 \times \frac{d}{8} = d/4$$

Thus, for no tension in a circular section, the load must be placed within middle fourth of the section.

#### 4.2.5. EFFECT OF ECCENTRIC LOADING

Consider a column subjected to an eccentric load 'w' at an eccentricity 'e' as shown that in fig.4.17 (a). the effect of eccentric load is equal to the effect of an axial load and a moment bending stress.

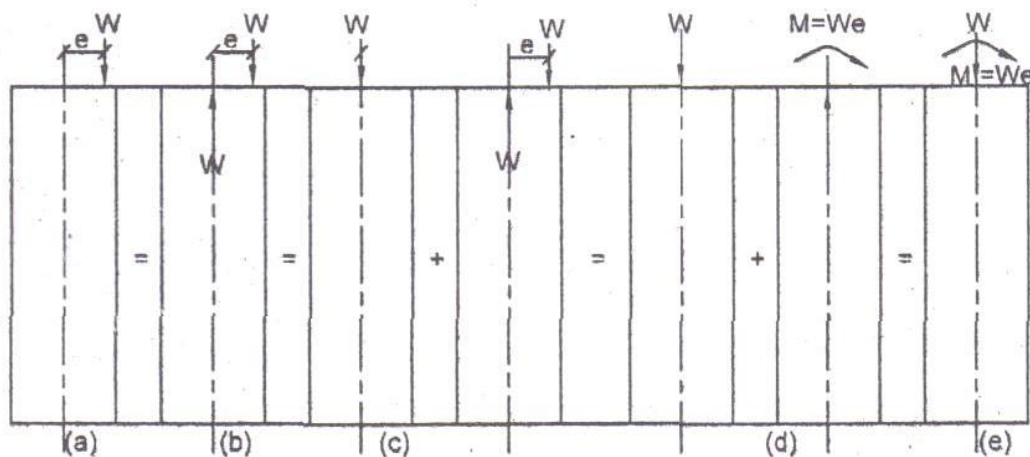


Fig4.17

The know the effect of eccentric load, W

- (i) Introduce two equal and opposite loads, each of value W, along the axis of the 4.17 column.

- (ii) Now, treat the whole system of loading as consisting of a statically equivalent algebraic system of loads as shown in fig.(c).

That is

- A direct compressive force  $W$  along the longitudinal axis which produce direct compressive stress plus.
  - A couple due to eccentric load  $W$  and the other upward load  $W$  along the axis which produce the couple causes a BM,  $M = We$  which produce bending stresses.
- (iii) Finally, the effect of eccentric load is reduced to consist of statically Equivalent centrally applied load or producing direct stress ( $\sigma_a$ ) and a couple  $M=We$  producing bending stress ( $\sigma_b$ ).

#### **4.2.6. EFFECT OF ECCENTRIC LOADING ON SHORT COLUMN**

Consider a short column of uniform cross section  $b \times d$  subjected to an eccentric load 'P' acting on XX axis at an eccentricity 'e' from the Centroid of the section shown in fig 4.18

The axial load produces uniform direct compressive stress throughout the cross section. The moment due to couple produces bending stress.

Fig4.18

Direct compressive stress,  $\sigma_d = \text{Load/Area}$

$$= P/A$$

Bending moment,

$$M = \text{load} * \text{eccentricity}$$

$$M = p * e$$

Bending stress,

$$\sigma_b = \pm M/I * y$$

Where,  $I = \text{moment of inertia about yy axis} = db^3/12$

$Y = \text{distance of the fibre YY axis, } y_{\max} = b/2$

$$\therefore \sigma_b = \pm 12 * Pe/db^3 * b/2 = \pm 6Pe/db^2$$

#### **Combined direct and bending stress**

The total stress or resultant stress due to eccentric loading at any section is the algebraic sum of direct stress and bending stress.

$$\sigma = \sigma_d + \sigma_b = P/A \pm M*y/I$$

#### **Maximum and minimum stresses**

The maximum and minimum stresses are in the extreme fibres

$$\sigma_{\max} = \sigma_d + \sigma_b = P/A \pm M*y/I$$

$$\sigma_{\min} = \sigma_d - \sigma_b = P/A - M*y/I$$

for a rectangular column section,

$$A = b*d \text{ and } m = P * e$$

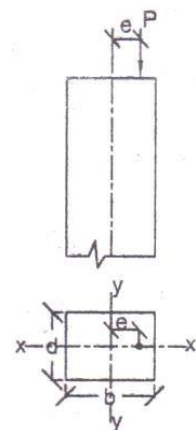
$$\begin{aligned} \sigma_{\max} &= \sigma_d + \sigma_b = P/A + 6M/db^2 = P/A + 6Pe/db^2 \\ &= P/A + 6 Pe/A*b = P/A [1 + 6e/b] \end{aligned}$$

$$\sigma_{\max} = P/A [1 + 6e/b]$$

$$\sigma_{\min} = \sigma_d - \sigma_b = P/A - 6 Pe/A * b = P/A[1 - 6e/b]$$

$$\sigma_{\min} = P/A[1 - 6e/b]$$

Maximum and minimum stress for a rectangular section,





$$\sigma_{\max} = P/A[1 + 6e/b]$$

$$\sigma_{\min} = P/A[1 - 6e/b]$$

When  $\sigma_{\min}$  value is positive, there is compressive stress.

When  $\sigma_{\min}$  value is negative, there is tensile stress.

When  $\sigma_{\min}$  value is zero, there is no tension.

#### **4.2.7. MIDDLE THIRD RULE**

To avoid tension, the limiting value of eccentricity on either side of the geometric axis is  $b/6$  and  $d/6$  for rectangular sections and  $a/6$  for square sections. This means if the load lies in the middle third portion, the section will be completely in compression.

The middle third rule states that, “when the point of application of the load lies within the middle third of the section, then the stress will be of compressive in nature throughout the section and there will be no tension anywhere in the section.

#### **4.2.8. CHIMNEYS SUBJECTED TO UNIFORM WIND PRESSURE**

Tall structures like chimneys, water tanks, towers are subjected to horizontal wind pressure on one side. It causes bending moment at the base. The bending moment reduces bending stress. Also the chimney has self-weighted and it produces direct or axial compressive stress at the base. The resultant stress at any section at the base of the chimney is the algebraic sum of bending stress due to wind pressure and axial stress due to self-weight.

Chimney may be square or circular in cross section. Sometimes the chimney may be tapered from large section at the bottom to a small section at the top.

The direct stress or axial stress,  $\sigma_d = W/A$

The bending stress,  $\sigma_b = M/I \cdot y$  (or)  $M/Z$

Where,

W is the weight of chimney

A is the area of cross section

M is the bending moment due to horizontal wind pressure

I is the moment of inertia about YY axis

Y is the extreme fibre distance

Z is the section modulus,  $Z = I/y$

The horizontal wind force on a unit area of a vertical plane is known as wind pressure. If the area exposed to wind pressure is curved, the magnitude of the force will be less than, when the area is a flat surface. The reduction factor ‘k’ is called as coefficient of wind resistance. Its value varies from 0.5 to 0.75. For cylindrical shafts  $k = 2/3$ , unless stated otherwise for square and rectangular chimney  $k = 1$ .

The total horizontal wind pressure,  $P = k \cdot P_0 \cdot A_p$

Where,

P = Total horizontal wind pressure

K = Coefficient of wind pressure

$P_0$  = Horizontal intensity of wind pressure

$A_p$  = Projected area on which wind acts.

### Maximum and minimum stress in square chimney

Consider a hollow square chimney of outer dimension  $B \times B$  and inner dimensions  $b \times b$  subjected to a horizontal wind pressure of intensity  $P_0 \text{ KN/m}^2$ .

Let  $h$  be the height of the chimney.

$\gamma$  be the unit weight of masonry.

Cross sectional area of chimney,  $= A_{\text{ext}} - A_{\text{int}}$

$$A = (B \times B) - (b \times b)$$

Self-weight of chimney,

$$W = \text{unit weight of masonry} \times \text{Area} \times \text{Height}$$

$$W = \gamma Ah$$

$$\therefore \text{Direct stress, } \sigma_d = W/A$$

Moment of inertia,  $I = 1/12 [B^4 - b^4]$

Extreme fibre density,  $y = B/2$

Projected area,  $A_p = Bh$

Total wind pressure,  $P = \text{Coefficient of wind resistance}$

$\times \text{Intensity} \times \text{wind pressure} \times \text{projected area}$

$$\text{i.e., } P = k \cdot P_0 \cdot A_p$$

This pressure acts at  $h/2$  from the base.

$$\therefore \text{Bending moment, } M = P \cdot h/2$$

$$\therefore \text{Bending stress, } \sigma_b = M/I \cdot y$$

Total stress  $\sigma = \sigma_d + \sigma_b$

Maximum stress,  $\sigma_{\text{max}} = \sigma_d \pm \sigma_b$

Minimum stress,  $\sigma_{\text{min}} = \sigma_d - \sigma_b$

If the total stress is positive, it is compressive.

If the total stress is negative, it is tensile.

### Maximum and minimum stress in circular chimney

Consider a hollow circular chimney of outer diameter ' $D$ ' and inner diameter ' $d$ ' subjected to a horizontal wind pressure of intensity  $P_0 \text{ KN/m}^2$ .

Let  $h$  be the height of the chimney.

$\gamma$  be the unit weight of masonry.

Cross sectional area of chimney,

$$\begin{aligned} A &= A_{\text{ext}} - A_{\text{int}} \\ &= \pi/4 [D^2 - d^2] \end{aligned}$$

Self-weight of chimney,

$$W = \text{Unit weight of masonry} \times \text{area} \times \text{Height}$$

$$W = \gamma Ah$$

$\therefore$  Direct stress,

$$\sigma_d = w/A$$

Moment of inertia,

$$I = \pi/64 [D^4 - d^4]$$

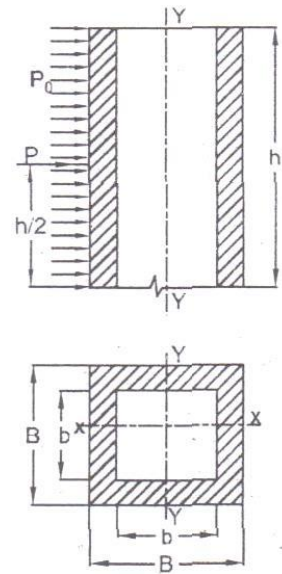
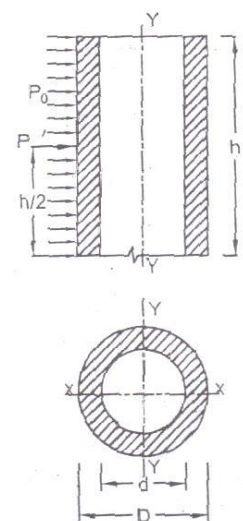


Fig4.19



Extreme fibre distance,

$$y = D/2$$

Projected Area,

$$A_p = Dh$$

Total wind pressure,  $P = \text{Coefficient of wind resistance} \times \text{intensity of wind pressure} \times \text{Projected area}$

$$\text{i.e., } P = k \cdot P_0 \cdot A_p$$

Fig4.20

This pressure acts at  $h/2$  distance from the base.

$$K = 2/3 \text{ for circular sections.}$$

Bending moment,  $M = P \times h/2$

$$\therefore \text{Bending stress, } \sigma_b = M/I \times y$$

Total stress,  $\sigma = \sigma_d \pm \sigma_b$

Maximum stress,  $\sigma_{\max} = \sigma_d + \sigma_b$

Maximum stress,  $\sigma_{\min} = \sigma_d - \sigma_b$

### SOLVED EXAMPLES

**EXAMPLE.4.17.** A rectangular column of width 200 mm and of thickness 150 mm carries a point load of 240 kN at an eccentricity of 10 mm in a plane bisecting the thickness. Find the maximum and minimum stresses in the section.

**Solution:**

**Given:**

Point load,	$P = 240 \text{ kN} = 240000 \text{ N}$
Eccentricity,	$e = 10 \text{ mm}$
Width,	$b = 200 \text{ mm}$
Thickness,	$d = 150 \text{ mm}$
Area	$A = bd = 200 \times 150 = 30000 \text{ mm}^2$

Let  $\sigma_{\max}$  and  $\sigma_{\min}$  use the maximum and minimum stress in the section

Using the relation

$$\begin{aligned} \sigma_{\max} &= \frac{P}{A} \left( 1 + \frac{6e}{b} \right) = \frac{240000}{30000} \left( 1 + \frac{6 \times 10}{200} \right) \\ &= 8(1+0.3) = 10.4 \text{ N/mm}^2 \text{ (comp)} \end{aligned}$$

$$\sigma_{\min} = \frac{P}{A} \left( 1 - \frac{6e}{b} \right) = \frac{240000}{30000} \left( 1 - \frac{6 \times 10}{200} \right)$$

$$= 8(1-0.3)$$

$$= 5.6 \text{ N/mm}^2 \text{ (comp) Ans}$$

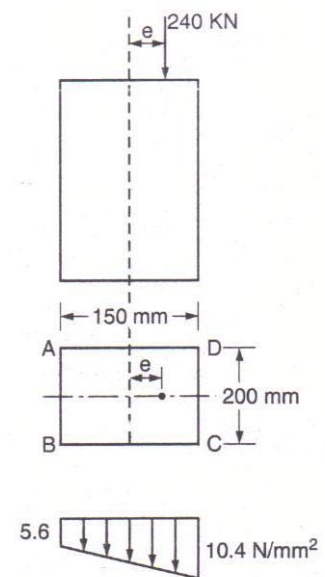


Fig4.21

**EXAMPLE 4.18.** A short column of hollow cylindrical section 250mm outside diameter and 150 mm inside diameter carries a vertical load of 400 kN along one of the planes 100 mm away from the axis of the column. Find the extreme stress intensities and state their nature.

**Solution: Given**

Inner diameter,  $d_i = 150 \text{ mm}$   
 Outer diameter,  $d_o = 250 \text{ mm}$   
 Point load,  $P = 400 \text{ kN} = 400000 \text{ N}$   
 Eccentricity,  $e = 100 \text{ mm}$

Distance of extreme fiber,

$$Y = \frac{250}{2} = 125 \text{ mm}$$

$$\text{Area, } A = \frac{\pi}{4} (d_o^2 - d_i^2) = \frac{\pi}{4} (250^2 - 150^2)$$

$$= 31415.93 \text{ mm}^2$$

$$\text{Moment of inertia, } I = \frac{\pi}{64} (250^4 - 150^4)$$

$$= 1.67 \times 10^8 \text{ mm}^4$$

Moment about the axis of the column,

$$= 4 \times 10^7 \text{ N-mm}$$

$$\text{Section modules, } Z = \frac{I}{Y} = \frac{1.67 \times 10^8}{125} = 1336000 \text{ mm}^3$$

Using relation

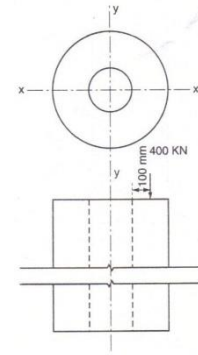
$$\sigma_{\max} = \frac{P}{A} + \frac{M}{Z} = \frac{400000}{31415.93} + \frac{4 \times 10^7}{1336000} = 12.73 + 29.94$$

$$= 42.67 \text{ N/mm}^2 \text{ (compressive)} \quad \text{Ans.}$$

$$\sigma_{\max} = \frac{P}{A} - \frac{M}{Z} = \frac{400000}{31415.93} - \frac{4 \times 10^7}{1336000} = 12.73 - 29.94$$

$$= 17.21 \text{ N/mm}^2 \text{ (Tensile)} \quad \text{Ans.}$$

Fig4.22



**EXAMPLE 4.19.** A short column of external diameter 400 mm and internal diameter 200 mm carries an eccentric load of 80 kN. Find the greatest eccentricity which the load can have without producing tension on the cross-section.

**Solution:**

**Given**

Inner diameter,  $d_i = 200 \text{ mm}$   
 Outer diameter,  $d_o = 400 \text{ mm}$   
 Point load,  $W = 80 \text{ kN} = 8 \times 1000 = 8000 \text{ N}$

Let the greatest eccentricity be  $x$  mm which the load can have without producing tension.

$$\text{Area, } A = \frac{\pi}{4} (d_o^2 - d_i^2) = \frac{\pi}{4} (400^2 - 200^2)$$

Fig 4.23

$$= 94247.78 \text{ mm}^2$$

Moment of inertia,

$$I = \frac{\pi}{64} (d_o^4 - d_i^4) = \frac{\pi}{64} (400^4 - 200^4)$$

$$= \frac{\pi}{64} \times 2.4 \times 10^{10} = 1.18 \times 10^9 \text{ mm}^4$$

$$y = \frac{d_o}{2} = \frac{400}{2} = 200 \text{ mm}$$

Section Modulus,

$$Z = \frac{I}{y} = \frac{1.18 \times 10^9}{200} = 5.9 \times 10^6 \text{ mm}^3$$

Moment about the axis of the column,

$$M = P \times e = 80000x \text{ N-mm}$$

For no tension

$$\sigma_{\max} = \frac{P}{A} - \frac{M}{Z} = 0$$

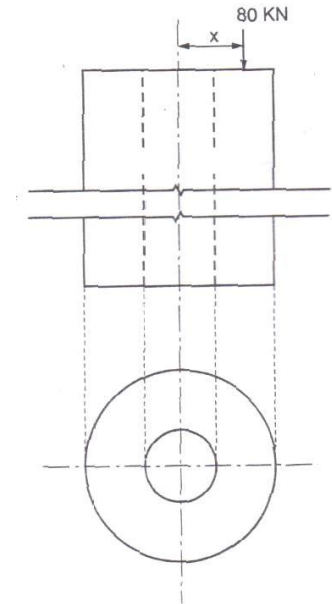
$$\therefore \frac{P}{A} = \frac{M}{Z}$$

$$\text{or, } \frac{80000}{94247.78} = \frac{80000x}{5.9 \times 10^6}$$

$$\text{or, } \frac{80000 \times 5.9 \times 10^6}{94247.78 \times 80000} = x$$

$$x = \frac{5.9 \times 10^6}{94247.78} = 62.6 \text{ mm}$$

**Ans.**



**EXAMPLE 4.20.** In a compression testing specimen 13 mm is diameter the line of thrust is parallel to the axis of the specimen but it displace from it. Determine the distance of the line of thrust from the axis, when the maximum stress is 15 % greater than the mean stress on a section normal to the axis.

**Solution:**

**Given:**

Diameter of specimen,

$$d = 13 \text{ mm}$$

$\sigma_{\max}$  = 15 % greater than mean stress

$$\text{Area, } A = \frac{\pi d^2}{4} = \frac{\pi (13)^2}{4} = 132.79 \text{ mm}^2$$

$$\text{Moment of inertia, } I = \frac{\pi d^4}{64} = \frac{\pi (13)^4}{64} = 1401.98 \text{ mm}^4$$

$$\text{Section modulus, } Z = \frac{I}{y} = \frac{1401.98}{6.5} = 215.69 \text{ mm}^3$$

Let the eccentricity be  $x$  mm.

$$\therefore \text{Moment, } M = Px$$

$$\text{Mean stress} = \frac{P}{A} = \frac{P}{132.73} \text{ N/mm}^2$$

$$\text{Maximum stress} = \text{Mean stress} + 15\% \text{ of mean stress}$$

$$\sigma_{\max} = \frac{115}{100} \times \text{Mean stress}$$

$$\sigma_{\max} = \frac{115}{100} \times \frac{P}{132.73} \text{ N/mm}^2 \dots (i)$$

Using relation

$$\sigma_{\max} = \frac{P}{A} + \frac{M}{Z}$$

$$\frac{115}{100 \times 132.73} = \frac{P}{132.73} + \frac{Px}{215.69}$$

[from(i)]

$$\text{or, } \frac{115}{100} = \frac{1}{132.73} + \frac{x}{215.69}$$

$$\text{or, } \frac{115}{100} - \frac{1}{132.73} = \frac{x}{215.69}$$

$$\text{or, } 0.0087 - 0.0075 = \frac{x}{215.69}$$

$$0.0012 \times 215.69 = x$$

$$x = 0.2588 \approx 0.26 \text{ mm}$$

**EXAMPLE 4.21.** A hollow rectangular masonry pier is 1.2 m x 0.80 m, overall, the wall thickness being 0.15m. a Vertical load of 100 kN is transmitted in the vertical plane bisecting 1.2m side at an eccentricity of 0.1 m from the geometric axis of the section. Calculate the maximum and minimum stress intensities are the section.

**Solution:**

**Given:**

$$\text{Point load, } P = 100 \text{ kN} = 100000 \text{ N}$$

$$\text{Eccentricity, } e = 0.1 \text{ m} = 100 \text{ mm}$$

$$b_o = 1200 \text{ mm}$$

$$\text{Outer diameter, } d_o = 800 \text{ mm}$$

$$b_i = 1200 - 150 - 150 = 900 \text{ mm}$$

$$\text{Inner diameter, } d_i = 800 - 150 - 150 = 500 \text{ mm}$$

Cross-sectional Area,

$$A = 1200 \times 800 - 900 \times 500$$

$$= 960000 - 450000$$

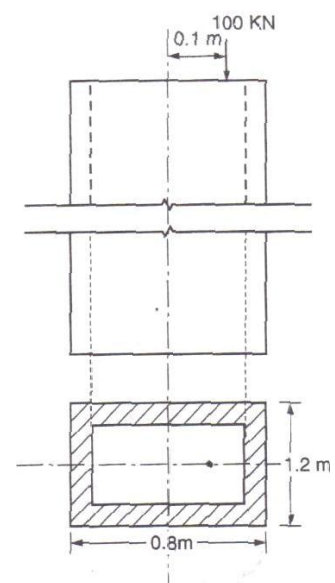


Fig4.24

$$= 510000 \text{ mm}^2$$

Moment of inert

$$\begin{aligned} I &= \frac{1}{12} \times 1200 \times 800^3 - \frac{1}{12} \times 900 \times 500^3 \\ &= 5.12 \times 10^{10} - 9.37 \times 10^9 \\ &= 4.18 \times 10^{10} \text{ mm}^4 \end{aligned}$$

Moment,

$$\begin{aligned} M &= P \times e = 100000 \times 100 \\ &= 10 \times 10^6 \text{ N-mm} \end{aligned}$$

Section modulus,

$$Z = \frac{I}{y} = \frac{4.18 \times 10^{10}}{400} = 10.45 \times 10^7 \text{ mm}^3$$

Using relation

$$\begin{aligned} \sigma_{\max} &= \frac{P}{A} + \frac{M}{Z} = \frac{100000}{510000} + \frac{10 \times 10^6}{10.45 \times 10^7} \\ 0.196 + 0.096 &= 0.292 \text{ N/mm}^2 \quad \text{Ans.} \end{aligned}$$

$$\begin{aligned} \sigma_{\max} &= \frac{P}{A} - \frac{M}{Z} = \frac{100000}{510000} - \frac{10 \times 10^6}{10.45 \times 10^7} \\ &= 0.196 - 0.096 = 0.1 \text{ N/mm}^2 \quad \text{Ans.} \end{aligned}$$

**EXAMPLE 4.21.** A short hollow pier 1.5m square outside and 1 m square inside, supports a vertical point load of 7 kN located on a diagonal 0.8 m from the vertical axis of the pier. Neglecting the self weight of the pier. Calculate the normal stresses at the four outside corners on a horizontal section of the pier

**Solution: Given:**

$$\begin{aligned} \text{Outer area, } A_0 &= 1.5 \times 1.5 \\ &= 2.25 \text{ m}^2 \end{aligned}$$

$$\text{Inner area, } A_i = 1 \times 1 = 1 \text{ m}^2$$

$$\text{Point load, } P = 7 \text{ kN}$$

$$\text{Eccentricity, } e = 0.8 \text{ m}$$

$$\begin{aligned} \text{Area of cross section of pier} &= A - A_i \\ &= 2.25 - 1 = 1.25 \text{ m}^2 \end{aligned}$$

Moment of inertia about the diagonal

$$\begin{aligned} I &= 2 \times \frac{1}{12} (2.12 \times 1.06^3 - 1.41 \times 0.70^3) \\ &= \frac{1}{6} (2.52 - 0.48) = 0.34 \text{ m}^4 \\ y &= \frac{2.12}{2} = 1.06 \text{ m} \end{aligned}$$

Section modulus,

$$z = \frac{I}{y} = \frac{0.34}{1.06} = 0.32 \text{ m}^3$$

Moment,

$$\begin{aligned} M &= p \times e \\ &= 7 \times 0.8 = 5.6 \text{ KN-m} \end{aligned}$$

Direct stress,

$$\sigma_d = \frac{P}{A} = \frac{7}{1.25} = 5.6 \text{ KN/m}^2$$

Bending stress,

$$\sigma_b = \frac{M}{z} = \frac{5.6}{0.32} = 17.5 \text{ KN/m}^2$$

At the corners 2 and 4 there will be no bending stress

$$\begin{aligned} \therefore \text{Stress at corner 1} &= \sigma_d + \sigma_b = 5.6 + 17.5 \\ &= 23.1 \text{ KN/m}^2 \text{ (Compressive)} \end{aligned}$$

Stress at corner 2 =  $\sigma_d = 5.6 \text{ KN/m}^2$  (Comp.)

$$\begin{aligned} \text{Stress at corner 3} &= \sigma_d - \sigma_b = 5.6 - 17.5 \\ &= -11.9 \text{ KN/m}^2 \\ &= 11.9 \text{ KN/m}^2 \text{ (Tensile)} \end{aligned}$$

Stress at corner 4 =  $\sigma_d = 5.6 \text{ KN/m}^2$  (Comp.)

**EXAMPLE 4.22.** A masonry pier of 3 m × 4 m supports a vertical load of 80 kN as shown in Figure 9.12.

(a) Find the stress developed at each corner of the pier.

(b) What additional load should be placed at the center of the pier, so that there is no tension anywhere in the pier section?

(c) What are the stresses at the corners with the additional load in the center?

**Solution. Given:**

$$\begin{aligned} \text{Width,} & \quad b = 4 \text{ m} \\ \text{Depth,} & \quad d = 3 \text{ m} \\ \text{Point load,} & \quad p = 80 \text{ kN} \\ \text{Eccentricity from x-x axis} & \\ e_x &= 0.5 \text{ m} \\ \text{Eccentricity from y-y axis is} & \\ e_y &= 1 \text{ m} \end{aligned}$$

Area,

$$A = 4 \times 3 = 12 \text{ m}^2$$

Moment of inertia about x-x,



$$I_{xx} = \frac{1}{12} \times 4 \times 3^3 = 9 \text{ m}^4$$

Moment of inert about y-y,

$$I_{yy} = \frac{1}{12} \times 3 \times 4^3 = 16 \text{ m}^4$$

Moment about xx axis,

$$M_x = 80 \times 0.5 = 40 \text{ KN-m}$$

Moment about yyaxis,

$$M_y = 80 \times 1 = 80 \text{ KN-m}$$

Direct stress,

$$\sigma_d = \frac{P}{A} = \frac{80}{12} = 6.67 \text{ KN/m}^2$$

Bending stress due to  $e_x$ ,

$$\sigma_{bx} = \frac{M_x \times y}{I_{xx}} = \frac{40 \times 1.5}{9} = 6.67 \text{ KN/m}^2$$

Bending stress due to  $e_y$ ,

$$\sigma_{by} = \frac{M_y \times x}{I_{yy}} = \frac{80 \times 2}{16} = 10 \text{ KN/m}^2$$

(a)

(i) Resultant stress at point A,

$$\sigma_A = \sigma_d - \sigma_{bx} + \sigma_{by} \text{ [... Point A is in 2<sup>nd</sup> quadrant]}$$

$$\sigma_A = 6.67 - 6.67 + 10 = 10 \text{ KN/m}^2$$

(ii) Resultant stress at point B,

$$\sigma_B = \sigma_d + \sigma_{bx} + \sigma_{by} = 6.67 + 6.67 + 10$$

$$= 23.34 \text{ KN/m}^2 \text{ (Compressive)}$$

(iii) Resultant stress at point C,

$$\sigma_C = \sigma_d + \sigma_{bx} - \sigma_{by} = 6.67 + 6.67 - 10$$

$$= 3.34 \text{ KN/m}^2 \text{ (Compressive)}$$

(iv) Resultant stress at point D,

$$\sigma_D = \sigma_d - \sigma_{bx} - \sigma_{by} = 6.67 - 6.67 - 10$$

$$= -10 \text{ KN/m}^2 \text{ (Compressive)}$$

(b) Let  $P$ , be the additional load that should be placed in the pier section for no tension.

For no tension,

Compressive stress = Tensile stress

$$\frac{P_1}{A} = 10$$

$$P_1 = 10 \times A = 10 \times 10 = 120 \text{ KN}$$

(c) stress due to additional load of 120 kN at the center

$$= \frac{120}{12} = 10 \text{ kN/m}^2$$

(i) Stress at point A =  $10 + 10 = 20 \text{ kN/m}^2$

(ii) Stress at point B =  $23.34 + 10 = 33.34 \text{ kN/m}^2$

(iii) Stress at point C =  $3.34 + 10 = 13.34 \text{ kN/m}^2$

(iv) Stress at point D =  $-10 + 10 = 0$ .

**EXAMPLE 4.23.** A short column of rectangular cross-section 80mm × 60mm carries a load of 40 kN at a point 20 mm from the longer side and 35 mm from the shorter side. Determine the maximum compressive and Tensile stresses in the section.

**Solution. Given:**

Width,  $b = 80 \text{ mm}$

Depth,  $d = 60 \text{ mm}$

Point load,  $P = 40 \text{ kN} = 40000 \text{ N}$

$e_x = 10 \text{ mm}$

$e_y = 5 \text{ mm}$

Area,

$$A = b \times d = 80 \times 60$$

$$= 4800 \text{ mm}^2$$

Moment of inertia about x-x,

$$I_{xx} = \frac{1}{12} b d^3$$

$$= \frac{1}{12} \times 80 \times (60)^3 = 1.44 \times 10^6 \text{ mm}^4$$

Moment of inertia about y-y,

$$I_{yy} = \frac{1}{12} b d^3 = \frac{1}{12} \times 60 \times (80)^3 = 2.56 \times 10^6 \text{ mm}^4$$

$$y = \frac{60}{2} = 30 \text{ mm}$$

$$x = \frac{80}{2} = 40 \text{ mm}$$

Moment about x-x axis,

$$M_x = P \times e_x = 40000 \times 10 = 400000 \text{ N-mm}$$

Moment about y-y axis,

$$M_y = P \times e_y = 40000 \times 5 = 200000 \text{ N-mm}$$

$$\text{Direct stress, } \sigma_d = \frac{P}{A} = \frac{40000}{4800} = 8.33 \text{ N/mm}^2$$

$$\text{Bending stress due to } e_x, \sigma_{bx} = \frac{M_x \times y}{I_{xx}} = \frac{400000 \times 30}{1.44 \times 10^6}$$

$$= 8.33 \text{ N/mm}^2$$

Bending stress due to  $c_y$ ,

$$\sigma_{by} = \frac{My \times x}{I_{yy}} = \frac{200000 \times 40}{2.56 \times 10^6}$$

$$= 3.125 \text{ N/mm}^2$$

$$\text{Maximum stress} = \sigma_d + \sigma_{bx} + \sigma_{by} = 8.33 + 8.33 + 3.125$$

$$= 19.78 \text{ N/mm}^2$$

$$\text{Maximum stress} = \sigma_d - \sigma_{bx} - \sigma_{by} = 8.33 - 8.33 - 3.125$$

$$= -3.125 \text{ N/mm}^2$$

$$= 3.125 \text{ N/mm}^2 (\text{Tensile})$$

**EXAMPLE 4.24.** A short column of diameter 'D' and internal diameter 'd' carries eccentric load 'W' find the greatest eccentricity which the load can have without producing tension on the cross-section of the column.

**Solution: Given :**

Outer diameter = D

Inner diameter = d

Point load,  $p = w$

Let the greatest eccentricity for no tension be  $e$ .

$$\text{Cross-sectional area, } A = \frac{\pi}{4} (D^2 - d^2)$$

$$\text{Moment of inertia, } I = \frac{\pi}{64} (D^4 - d^4)$$

$$\text{Moment, } M = W \times e$$

$$Y = \frac{D}{2}$$

$$\text{Direct stress, } \sigma_d = \frac{P}{A} = \frac{W}{\frac{\pi}{4} (D^2 - d^2)}$$

$$\text{Bending stress, } \sigma_b = \frac{My}{I} = \frac{W \times e \times D/2}{\frac{\pi}{64} (D^4 - d^4)}$$

For no tension

Direct stress = Bending stress

$$\frac{W}{\frac{\pi}{4} (D^2 - d^2)} = \frac{W \times e \times D/2}{\frac{\pi}{64} (D^4 - d^4) \times 2}$$

$$\frac{4W}{\pi (D^2 - d^2)} = \frac{32We \times D}{\pi (D^2 + d^2)(D^2 - D^2)}$$

$$\text{Dividing both sides by } \frac{4W}{\pi (D^2 - d^2)}, \text{ we get } 1 = \frac{8eD}{D^2 + d^2}$$

$$\text{Or, } \frac{D^2 + d^2}{8D} = e$$

...Greatest eccentricity,

$$e = \frac{D^2 + d^2}{8D}$$

**Ans.**

**EXAMPLE 4.25.** A column section 300 mm external diameter and 150 mm internal diameter support an axial load of 2600 kN and an eccentric load of  $P$  kN at an eccentricity of 400 mm. if the compressive and tensile stresses are not to exceed  $149 \text{ N/mm}^2$  and  $60 \text{ N/mm}^2$  respectively, find the magnitude of the load  $P$ .

**Solution: Given :**

Outer diameter,  $d_o = 300 \text{ mm}$

Inner diameter,  $d_i = 150 \text{ mm}$

Axial load  $W = 2600 \text{ kN} = 2600 \times 1000 \text{ N}$

Eccentric load  $= 400 \text{ mm}$

Cross-sectional area,

$$A = \frac{\pi}{4} (d_o^2 - d_i^2) = \frac{\pi}{4} (300^2 - 150^2)$$

$$= 53014.38 \text{ mm}^2$$

Moment of inertia,

$$I = \frac{\pi}{64} (d_o^4 - d_i^4) = \frac{\pi}{64} (300^4 - 150^4)$$

$$= \frac{\pi}{64} \times 7.59 \times 10^9 = 37.26 \times 10^7 \text{ mm}^4.$$

$$Y = \frac{300}{2} = 150 \text{ mm}$$

Sectional modulus,  $Z = \frac{I}{Y} = \frac{37.26 \times 10^7}{150}$

$$= 2484666.67 \text{ mm}^3$$

Moment,

$$M = P \times e = P \times 400$$

$$= 400P \text{ kN-mm}$$

$$= 400000 P \text{ N-mm}$$

Direct stress,

$$\sigma_d = \frac{(2600 + P) \times 1000}{53014.38} = 0.019 (2600 + P)$$

Bending stress,

$$\sigma_b = \frac{400000P}{2484666.67} = 0.16 P \text{ N/mm}^2$$

$$\sigma_{\max} = \sigma_d + \sigma_b$$

Or

$$140 = 0.019 (2600 + P) + 0.16 P$$

$$140 = 49.4 + 0.019P + 0.16P$$

$$140 - 49.4 = 0.179 P$$

$$\dots \quad 90.6 = 0.179P$$

$$\dots \quad p = \frac{90.6}{0.179} = 506.15 \text{ KN} \quad \dots (i)$$

$$\sigma_{\min} = \sigma_b - \sigma_d$$

$$60 = 0.16P - 0.019 (2600 + p)$$

$$= 0.16P - 49.4 - 0.019P$$

$$60 + 49.4 = 0.141 P$$

$$90.6 = 0.179P$$

$$\dots \quad p = 775.89 \text{ KN}$$

The magnitude of  $P$  will be minimum of (i) and (ii)

i.e.,  $P = 506.14 \text{ KN}$  Ans.

**EXAMPLE 4.26.** A square chimney 24 m high has an opening of 1 m  $\times$  1 m and wall thickness 0.25 m, calculate the maximum stress in the masonry if the horizontal wind pressure is 2000 N/m<sup>2</sup> and masonry weight 20000 N/m<sup>3</sup>

**Solution: Given :**

Area of opening = 1 m  $\times$  1 m

Wall thickness = 0.25 m

Wind pressure,  $P = 2000 \text{ N/m}$

Unit weight of masonry,

$$\gamma = 20000 \text{ N/m}^3$$

Height of chimney,  $h = 24 \text{ m}$

Cross-sectional area of chimney,

$$A = (1.5 \times 1.5) - (1 \times 1)$$

$$= 1.25 \text{ m}^2$$

Weight of chimney,  $W = \gamma Ah$

Direct stress,

$$\sigma_d = \frac{W}{A} = \frac{\gamma Ah}{A}$$

$$= \gamma h = 20000 \times 24$$

$$= 480000 \text{ N/m}^2$$

Wind load,

$$P = p \times 1.5 \times 24$$

$$= 2000 \times 1.5 \times 24$$

$$= 72000 \text{ N}$$

Moment about the base of the chimney  $= P \times \frac{h}{2}$

$$= 72000 \times 12 = 864000 \text{ N-m}$$

Moment of inertia,  $I = \frac{1}{12} (1.5^4 - 1^4) = \frac{1}{12} \times 4.06 = 0.338 \text{ m}^4$  .

$$Y = \frac{1.5}{2} = 0.75 \text{ m}$$

$$\text{Bending stress, } \sigma_b = \frac{My}{I} = \frac{864000 \times 0.75}{0.338}$$

$$= 1917159.8 \text{ N/m}^2$$

$$\sigma_{\max} = \sigma_b + \sigma_d = 480000 + 1917159.8$$

$$= 2397159.8 \text{ N/m}^2 \text{ (Compressive)}$$

Ans.

**EXAMPLE 4.27.** A masonry chimney of a hollow circular section has external and internal diameters of 2.5 m and 2 m respectively. It is subjected to uniform horizontal wind pressure of  $1800 \text{ N/m}^2$ . Determine the maximum height of chimney for developing no tension at the base. Density of masonry is  $20000 \text{ N/m}^3$ .

**Solution : Given :**

$$d_o = 2.5 \text{ m}$$

$$d_i = 2.0 \text{ m}$$

$$p = 1800 \text{ N/m}^2$$

$$\gamma = 20000 \text{ N/m}^3$$

Let the height of chimney be  $h \text{ m}$ .

Weight of chimney =  $\gamma Ah$

Direct stress,

$$\sigma_d = \frac{\gamma Ah}{A} = \gamma h = 20000 h \text{ N/m}^2$$

Wind load,

$$P = p \times 2.5 \times h$$

$$= 1800 \times 2.5 \times h = 4500 h \text{ N}$$

Moment due to  $P$  about the base

$$M = P \times e = 4500 h \times \frac{h}{2}$$

$$= 2250 h^2 \text{ N-m}$$

$$\text{Moment of inertia, } I = \frac{\pi}{64} \times (2.5^4 - 2^4) = 1.132 \text{ m}^4$$

$$Y = \frac{2.5}{2} = 1.25 \text{ m}$$

$$\text{Section modulus, } Z = \frac{I}{y} = \frac{1.132}{1.25} = 0.906$$

$$\text{Bending stress, } \sigma_b = \frac{M}{Z} = \frac{2250 h^2}{0.906}$$

$$= 2483.44 h^2 \text{ N/m}^2$$

For no tension  $\sigma_d = \sigma_b$

$$20000 h = 2483.4 h^2$$

$$\frac{20000}{2483.4} = h = 8.05 \text{ m}$$

Ans.

## 5. DAMS AND RETAINING WALL

### 5.1 MASONRY DAMS

Gravity Dams – Derivation of Expression for maximum and minimum stresses at Base – Stress distribution diagrams – Problems – Factors affecting Stability of masonry dams – Factor of safety- Problems on Stability of Dams– Minimum base width and maximum height of dam for no tension at base – Elementary profile of a dam – Minimum base width of elementary profile for no tension.

### 5.1. MASONRY DAMS

#### 5.1.1. Introduction

Dam is a Massive structure constructed by concrete or masonry to retain water. A massive wall constructed across the river to store the water is also called Dam or Masonry dam.

1. Rectangular section dam.
2. Trapezoidal section with water face vertical.
3. Trapezoidal section with water face inclined.

The water stored on the u/s side of the dam exerts the horizontal water pressure.

**The following forces are acting on the gravity dam.**

1. Selfweight of dam (W).
2. Horizontal water pressure (P).
3. Uplift pressure at the base.
4. Due to horizontal water thrust and self weight of dam, the resultant thrust (R) will hit the base.

#### 5.1.2. Derivation for maximum and minimum stresses

Consider a trapezoidal section masonry dam as shown in fig.

Let

- a = Top width  
 b = bottom width  
 H = Height of dam  
 h = Depth of water  
 $\gamma$  = Specific weight of masonry  
 $\omega$  = Specific weight of water

Consider 1m length of dam

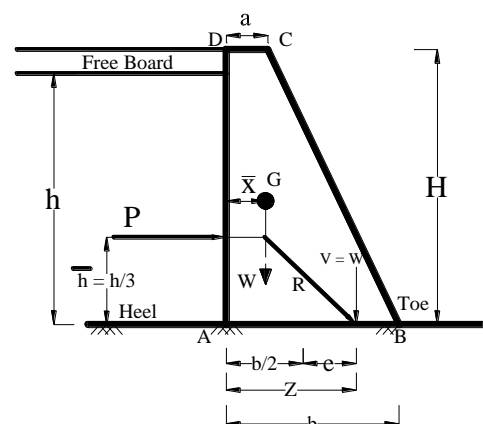
#### i. Weight of dam/m (W)

$$W = \gamma \times \text{volume} = \gamma \times A \times \ell$$

$$W = \gamma \frac{(a+b)}{2} \times H \times 1 = \gamma \frac{(a+b)}{2} H$$

$$W = \gamma \frac{(a+b)}{2} H$$

kN
.....
→ (1)



This will act at a distance of  $\bar{x}$  from vertical face

$$\bar{x} = \frac{a^2 + ab + b^2}{3(a+b)}$$

## ii. Horizontal water pressure/m (P)

The intensity of pressure at the top is zero, and at bottom is ' $\omega h$ '.

Draw pressure distribution diagram as shown in fig.

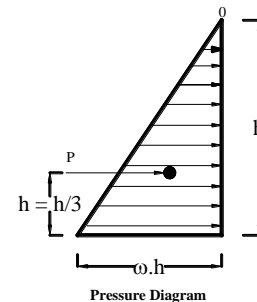
Total water pressure = area of pressure diagram

$$P = \frac{1}{2} \times (\omega h) \times h = \frac{\omega h^2}{2}$$

$$P = \frac{\omega h^2}{2} \text{ kN}$$

.....

→ (2)



This will act at the c.g. of pressure diagram.

$$\text{ie } \bar{h} = \frac{h}{3} \text{ from base}$$

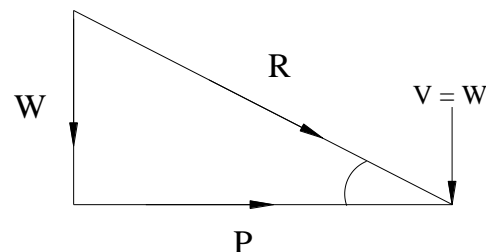
Total vertical force at the base (V) = (W)

## Resultant thrust (R)

The combined effect of water pressure and self weight of dam produces the resultant thrust 'R'

$$R = \sqrt{V^2 + P^2} = \sqrt{W^2 + P^2}$$

This resultant thrust cuts the base at a distance 'Z' from vertical face (A).



## Position of resultant thrust (Z)

Taking moment about A

$$(V \times Z) = W \bar{x} + P \bar{h}$$

$$W \times Z = W \bar{x} + P \bar{h}$$

$$\therefore Z = \bar{x} + \frac{P}{W} \bar{h}$$

$$(V = W)$$

## Eccentricity (e)

The eccentricity of resultant thrust is 'e'

$$e = (Z - b/2)$$

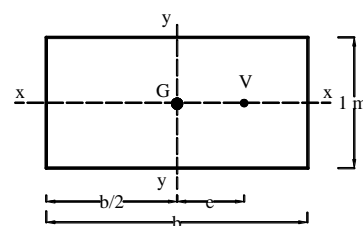
## Stresses at the base of dam

Consider in one meter length of wall.

$$\text{Area } A = b \times 1 = b \times 1$$

Z = Section modulus about yy axis

$$\therefore Z = Z_y = \frac{db^2}{6} = \frac{1 \times b^2}{6} = \frac{b^2}{6}$$





M = Moment due to eccentric load

$$M = W \times e$$

$$\sigma_c = \frac{W}{A} \text{ direct compressive stress}$$

$$\sigma_b = \frac{M}{Z} = \frac{W \times e}{Z} = \text{Bending stress}$$

Total stress at the base ( $\sigma$ )

$$\sigma = \sigma_c \pm \sigma_b$$

$$\sigma = \left( \frac{W}{A} \pm \frac{We}{Z} \right) = W \left[ \frac{1}{b \times 1} \pm \frac{e}{b^2/6} \right]$$

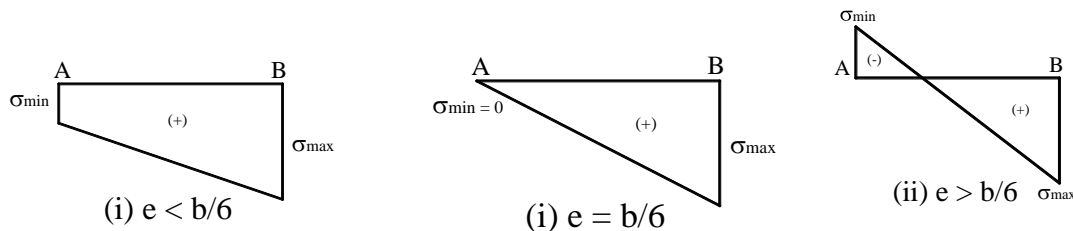
$$\sigma = \frac{W}{b} \left( 1 \pm \frac{6e}{b} \right)$$

$$\sigma_{\max} = \frac{W}{b} \left( 1 + \frac{6e}{b} \right) \text{ at toe}$$

$$\sigma_{\min} = \frac{W}{b} \left( 1 - \frac{6e}{b} \right) \text{ at heel}$$

### 5.1.3. Stress diagram at the base

The stress distribution diagram is drawn according to the maximum and minimum stresses as given below.



### 5.1.4. Factors affecting the stability of masonry dams

The following are the causes of failures of masonry dam.

1. Tension at the base
2. Sliding along the base
3. Overturning about the toe
4. Crushing of masonry at the base.
5. Uplift pressure

#### 5.1.4.1. Conditions for stability of masonry dams

1. To avoid tension at the base
2. To avoid sliding of the wall along the base
3. To avoid overturning of dam
4. To avoid crushing of masonry at the base.
5. To avoid uplift pressure at the base.

### 1. Conditions to avoid tension at the base

To avoid tension at any where, in the dam, the minimum stress ( $\sigma_{\min}$ ) should be greater than or equal to zero.

$$\begin{aligned} \text{ie } \sigma_{\min} &\geq 0 \\ \frac{W}{b} \left(1 - \frac{6e}{b}\right) &\geq 0 \quad ; \quad \left(1 - \frac{6e}{b}\right) \geq 0 ; 1 \geq \frac{6e}{b} \\ \frac{6e}{b} &\leq 1 \quad \boxed{e \leq \frac{b}{6}} \end{aligned}$$

ie To avoid tension the resultant force must cut the base within the middle third of the base.

**Note:** We know,

The position of resultant thrust from heel is 'Z'.

$$Z = \frac{b}{2} + e = \frac{b}{2} + \frac{b}{6} = \frac{2}{3}b$$

$$Z \leq \frac{2}{3}b$$

ie To avoid tension

$$e \leq \frac{b}{6} \text{ (or) } Z \leq \frac{2}{3}b$$

### 2. Conditions to avoid sliding

To prevent sliding of the wall along the base, the total frictional force ( $\mu \times W$ ) should be greater than total horizontal water pressure (P).

$$\therefore (\mu \times W) > P$$

$$\left. \begin{array}{l} \text{Factor of safety} \\ \text{against sliding} \end{array} \right\} = \frac{\text{Total frictional force}}{\text{Total horizontal water pressure}}$$

$$\text{F.S. (Sliding)} = \frac{\mu \times W}{P} \geq 1.00$$

Where

$\mu$  = Coefficient of friction

For design purpose the F.S. (Sliding) is considered as 1.5.

### 3. Conditions to prevent overturning

The horizontal water pressure (P) may tend to overturn about the toe.

$$\left[ \bar{h} = \frac{h}{3} \right]$$

To prevent overturning of dam, the stabilizing moment should be greater than the overturning.

$$\left. \begin{array}{l} \text{Factor of safety} \\ \text{against overturning} \end{array} \right\} = \frac{\text{Balancing moment}}{\text{Overturning moment}} \geq 1.0$$

$$\text{F.S. (overturning)} = \frac{W(b - \bar{x})}{P\bar{h}} \geq 1.0$$

For design purpose, the factor of safety against overturning is taken as 1.5 to 2.0.

#### 4. Conditions to prevent crushing at the base

The maximum compressive at the base  $\sigma_{\max} = \frac{W}{b} \left( 1 + \frac{6e}{b} \right)$

To avoid crushing at the base

Maximum compressive stress should be less than the safe bearing capacity of soil (or) allowable compressive stress.

$$\text{ie } \sigma_{\max} \leq \text{SBC of soil (or) allowable compressive stress}$$

#### 5. Condition to avoid uplift pressure

To avoid uplift pressure at the base of the dam, the weight of dam should be greater than uplift pressure  $W > \omega \cdot b \cdot h$

Where

$W$  = Total weight of dam at base

$(\omega \times h) (b \times 1) = \omega \cdot b \cdot h$  = Total uplift pressure.

##### 5.1.5. Minimum base width for no tension

The bottom width ( $b$ ) of a dam is calculated using the conditions of stability of dam.

##### (i) To avoid tension at the base

The eccentricity should be within the middle third.

$$\text{ie } e \leq \frac{b}{6} ; \quad z \leq \frac{2}{3}b$$
$$b \geq 6e,$$

##### (ii) To avoid sliding of dam

$$\text{Factor of safety (sliding)} = \frac{\text{Frictional force}}{\text{Horizontal water pressure}} \geq 1.5$$

$$\text{F.S. (Sliding)} = \frac{\mu \times W}{P} \geq 1.5$$

##### (iii) To avoid overturning of dam

$$\text{Factor of safety overturning} = \frac{\text{Balancing moment}}{\text{Overturning moment}} \geq 1.5$$

$$\text{F.S. (overturning)} = \frac{W(\bar{b} - \bar{x})}{P\bar{h}} \geq 1.5 \text{ (or) } 2$$

##### (iv) To avoid crushing at the base

The allowable compressive stress should be greater than maximum compressive stress.

$$\text{SBC of soil or } \sigma_{\text{allowable}} \geq \sigma_{\max}$$

The minimum base width required is the maximum value of base width for the above conditions.

### 5.1.6. Maximum height of dam for no tension

The height dam is calculated for the stability conditions.

The maximum height of the dam is the minimum height value for the stability conditions.

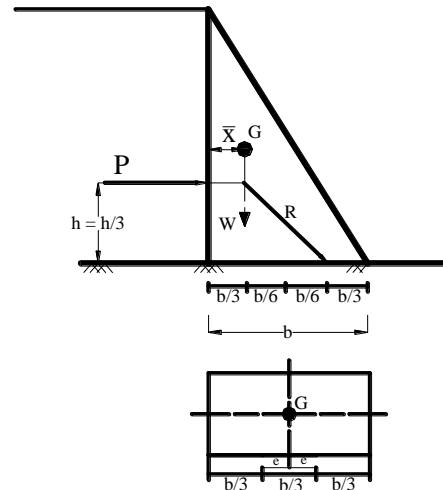
### 5.1.7. Elementary profile of a dam

To avoid tension, the resultant force (R) must cut the base with in the middle third.

$$e = \frac{b}{6} \text{ on either side of geometrical axis.}$$

This must be satisfied for both dam full and dam empty.

The right angled triangle cross section of a dam will be satisfied the middle third rule when the dam is full or empty, and is called elementary profile of a dam.



### 5.1.8. Minimum base width of elementary profile for no tension

Consider a triangular section masonry dam of bottom width 'b' and height 'H'. Retains water on its vertical face to full depth ( $h = H$ ) as shown in fig.

Let

$\gamma$  = Specific weight of masonry

$\omega$  = Specific weight of water

$S = \left( \frac{\gamma}{\omega} \right)$  = Relative density.

Consider 1m length of wall.

$$W = \gamma \times \left( \frac{1}{2} \times b \times H \right) \times 1 = \frac{\gamma b H}{2}$$

$$\bar{x} = \frac{b}{3}$$

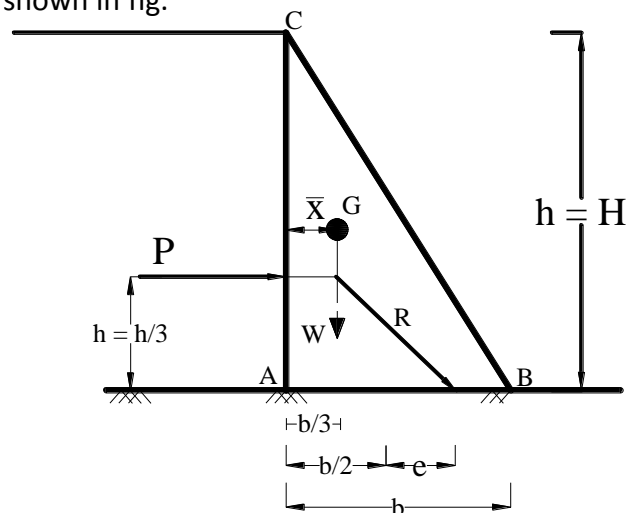
$$P = \omega \frac{h^2}{2} = \frac{\omega H^2}{2}, \quad \bar{h} = \frac{H}{3}$$

Taking moment about A

$$W \times Z = W \bar{x} + P \bar{h}$$

$$Z = \left( \bar{x} + \frac{P}{W} \bar{h} \right)$$

$$Z = \left( \frac{b}{3} + \frac{\omega H^2 / 2}{\left( \frac{\gamma b H}{2} \right)} \times \frac{H}{3} \right) = \left( \frac{b}{3} + \frac{\omega H^2}{3 \gamma b} \right)$$



To avoid tension

$$z = \frac{2}{3} b$$

$$\therefore \frac{2}{3} b = \left( \frac{b}{3} + \frac{\omega H^2}{3 \gamma b} \right) = \frac{1}{3} \left( b + \frac{\omega H^2}{\gamma b} \right)$$

$$2b = b + \frac{\omega H^2}{\gamma b}$$

$$(2b - b) = \frac{\omega H^2}{\gamma b} = \frac{H^2}{\left( \frac{\gamma}{\omega} \right) b} = \frac{H^2}{S \times b}$$

$$b^2 = \frac{H^2}{S}$$

$$(\therefore S = \frac{\gamma}{\omega})$$

$$b = \sqrt{\frac{H^2}{S}} = \frac{H}{\sqrt{S}}$$

$$(b) = \frac{H}{\sqrt{S}}$$

The minimum base width for a right angled triangular section

$$b = \frac{H}{\sqrt{S}}$$

**Note:** Practically the trapezoidal cross section is provided.

### Problem 5.1

A trapezoidal section masonry dam 8m height, 1.5m wide at top and 3.5m wide at base, retains water on its vertical face to height of 7.5m if the relative density of masonry is 2.4. determine the stress intensities at base and draw stress distribution diagram.

**Given**

Top width  $a = 1.5\text{m}$

Bottom width  $b = 3.5\text{m}$

Height of dam  $H = 8\text{m}$

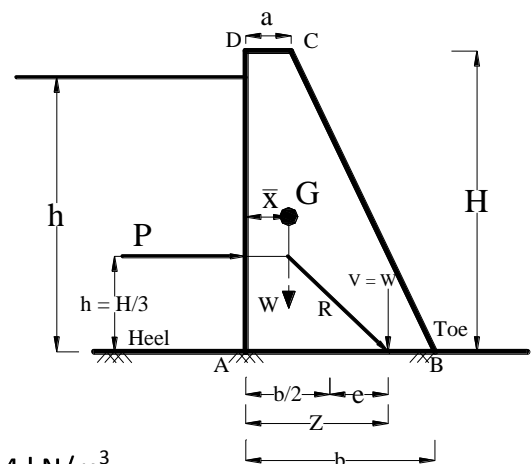
Depth of water  $h = 7.5\text{m}$

Specific gravity  $S = 2.4$  ;

Assume unit wt. of water  $\omega = 9.81 \text{ kN/m}^3$

Unit weight of masonry,  $\gamma = S \times \omega$

$$\gamma = 2.41 \times 9.81 = 23.544 \text{ kN/m}^3$$



**Required**

$$\sigma = \frac{W}{b} \left( 1 \pm \frac{6e}{b} \right) = ?$$

**Solution**

**Consider 1 m length of dam**

**i. Weight of dam 1m (W)**

$$W = \gamma \frac{(a+b)}{2} H$$

$$W = 23.544 \left( \frac{1.5+3.5}{2} \right) 8$$

$$W = 470.88 \text{ kN}$$

This will act at  $\bar{x}$  from vertical face

$$\bar{x} = \frac{a^2 + ab + b^2}{3(a+b)}$$

$$\bar{x} = \frac{1.5^2 + 1.5 \times 3.5 + 3.5^2}{3(1.5+3.5)}$$

$$\bar{x} = 1.316 \text{ m}$$

**ii. Total horizontal water pressure / m (P)**

$$P = \frac{\omega h^2}{2} = \frac{9.81 \times 7.5^2}{2} = 275.90 \text{ kN}$$

This will act at  $\bar{h}$  from base.

$$\bar{h} = h/3 = \frac{7.5}{3} = 2.5 \text{ m}$$

**iii. Position of resultant pressure (Z)**

$$Z = \bar{x} + \frac{P}{W} \bar{h}$$

$$Z = 1.316 + \left( \frac{275.9}{470.88} \times 2.5 \right) = 2.78 \text{ m}$$

$Z = 2.780 \text{ m}$
-----------------------

**iv. Eccentricity (e)**

$$e = (Z - b/2) = \left( 2.78 - \frac{3.5}{2} \right) = 1.038 \text{ m}$$

### v. Stresses at the base of dam ( $\sigma$ )

$$\sigma = \frac{w}{b} \left( 1 \pm \frac{6e}{b} \right)$$

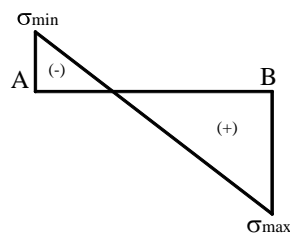
$$\sigma_{\max} = \frac{w}{b} \left( 1 + \frac{6e}{b} \right) \text{ at toe (B)}$$

$$\sigma_{\max} = \frac{470.88}{3.5} \left( 1 + \frac{6 \times 1.03}{3.5} \right) = 372.09 \text{ kN/m}^2 \text{ (Comp.)}$$

$$\sigma_{\min} = \frac{w}{b} \left( 1 - \frac{6e}{b} \right) \text{ at heel (A)}$$

$$\sigma_{\min} = \frac{470.88}{3.5} \left( 1 - \frac{6 \times 1.03}{3.5} \right) = -103.017 \text{ kN/m}^2 \text{ (Tension)}$$

### Stress diagram



### Problem 5.2

A masonry dam of trapezoidal section 2m wide at top 6m wide at base and 12m height retains water on its vertical face, unit weight of masonry and water are  $23 \text{ kN/m}^3$  and  $9.81 \text{ kN/m}^3$  respectively. Determine the stresses at the base of dam.

- When the dam is full
- When the dam is empty

### Given

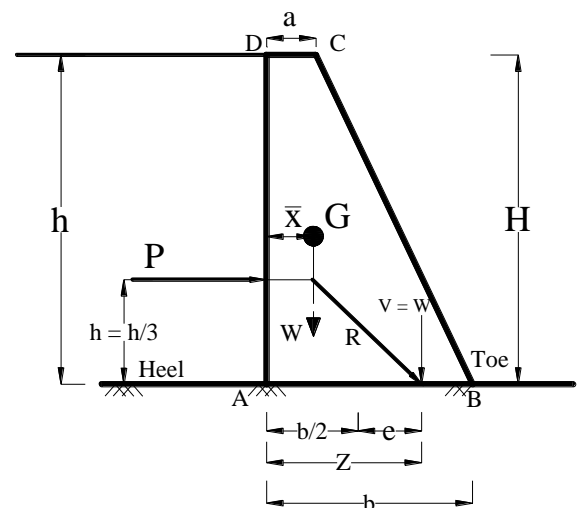
Top width  $a = 2 \text{ m}$

Bottom width  $b = 6 \text{ m}$

Height  $H = 12 \text{ m}$

Unit weight of water  $\omega = 9.81 \text{ kN/m}^3$

Unit weight of masonry  $\gamma = 23 \text{ kN/m}^3$



### Required

$$\sigma = \frac{w}{b} \left( 1 \pm \frac{6e}{b} \right) = ?$$

## Solution

### i. Weight of dam 1m (W)

$$W = \gamma \frac{(a+b)}{2} H = 23 \left( \frac{2+6}{2} \right) \times 12 = 1104 \text{ kN}$$

This will act at  $\bar{x}$  distance from vertical face

$$\bar{x} = \frac{a^2 + ab + b^2}{3(a+b)} = \frac{2^2 + (2 \times 6) + 6^2}{3(2+6)} = 2.16\text{m}$$

### a) When the dam is full (h = H = 15 m)

$$P = \frac{\omega h^2}{2} = \frac{9.81 \times 12^2}{2} = 706.32 \text{ kN}$$

This will act at  $\bar{h}$  from base.

$$\bar{h} = \frac{h}{3} = \frac{15}{3} = 4 \text{ m}$$

### iii. Position of resultant thrust (Z)

$$Z = \bar{x} + \frac{P}{W} \bar{h} = 2.16 + \frac{706.32}{1104} \times 4 = 4.72 \text{ m}$$

### iv. Eccentricity

$$e = (Z - b/2) = (4.72 - 6/2) = 1.72 \text{ m}$$

### v. Stress at the ( $\sigma$ )

$$\sigma = \frac{w}{b} \left( 1 \pm \frac{6e}{b} \right)$$

$$\sigma_{\max} = \frac{w}{b} \left( 1 + \frac{6e}{b} \right) = \frac{1104}{6} \left( 1 + \frac{6 \times 1.72}{6} \right) \text{ at toe (B)}$$

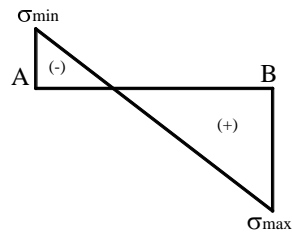
$$\sigma_{\max} = 500.48 \text{ kN/m}^2 \text{ (Comp.)}$$

$$\sigma_{\min} = \frac{w}{b} \left( 1 - \frac{6e}{b} \right) \text{ at heel (A)} = \frac{1104}{6} \left( 1 - \frac{6 \times 1.72}{6} \right)$$

$$\sigma_{\min} = -132.48 \text{ kN/m}^2 \text{ (Tension)}$$



**Stress diagram**



**b. When the dam is empty ( $h = 0$ )**

**Horizontal water thrust/m (P)**

$$P = \frac{\omega h^2}{2} = \frac{9.81 \times 0^2}{2} = 0$$

$$Z = \bar{x} + \frac{P}{W} \bar{h} \quad [P = 0]$$

$$Z = \bar{x} = 2.16 \text{ m}$$

**Eccentricity(e)**

$$e = Z - b/2 = (2.16 - 6/2) = -0.84 \text{ m}$$

**Stress at the base ( $\sigma$ )**

$$\sigma = \frac{w}{b} \left( 1 \pm \frac{6e}{b} \right)$$

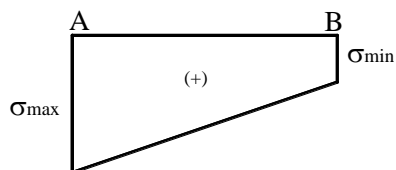
$$\sigma_{\max} = \frac{w}{b} \left( 1 + \frac{6e}{b} \right) = \frac{1104}{6} \left( 1 + \frac{6 \times (-0.84)}{6} \right)$$

$$\sigma_{\max} = 29.44 \text{ kN/m}^2 \text{ (Comp.)}$$

$$\sigma_{\min} = \frac{w}{b} \left( 1 - \frac{6e}{b} \right) = \frac{1104}{6} \left( 1 - \frac{6 \times (-0.84)}{6} \right)$$

$$\sigma_{\min} = 338.56 \text{ kN/m}^2 \text{ (Comp.)}$$

**Stress diagram**



### Problem 5.3

A trapezoidal dam 1.5m wide at top 3.5m wide at base and 8m height retains water on its vertical face with free board of 0.5m. Specific gravity of masonry is 2.4. Check the stability of dam coefficient of friction 0.6 Max. allowable stress = 300 kN/m<sup>2</sup>.

**Given**

Top width      a      = 1.5m

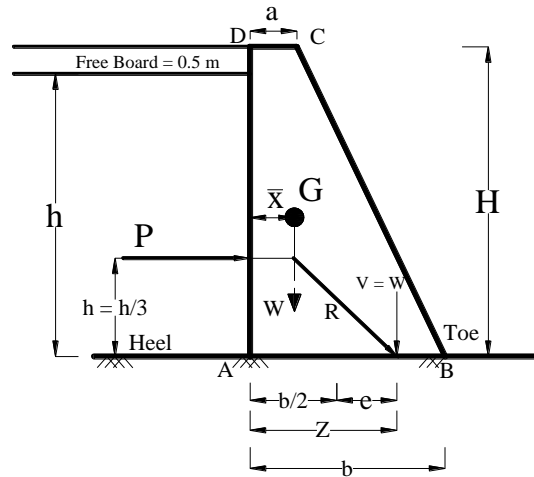
Bottom with    b      = 3.5m

Height  $H = 8 \text{ m}$   
 Free board  $= 0.5 \text{ m}$   
 Depth of water  $h = 8 - 0.5 = 7.5 \text{ m}$

$$\frac{\gamma}{\omega} = S = 2.4$$

$$\gamma = 2.4 \times 9.81 = 23.54 \text{ kN/m}^3$$

$$\omega = 9.81 \text{ kN/m}^3$$



### Solution

#### i. Weight of dam 1m (W)

$$W = \gamma \frac{(a+b)}{2} H = 23.54 \left( \frac{1.5+3.5}{2} \right) \times 8$$

$$W = 470.88 \text{ kN}$$

This will act at  $\bar{x}$  from vertical face

$$\bar{x} = \frac{a^2 + ab + b^2}{3(a+b)} = \frac{1.5^2 + (1.5 \times 3.5) + 3.5^2}{3(1.5+3.5)}$$

$$\bar{x} = 1.316 \text{ m}$$

#### ii. Total horizontal pressure / 1m (p)

$$P = \frac{\omega h^2}{2} = \frac{9.81 \times 7.5^2}{2} = 275.90 \text{ kN/m}$$

This will act at  $\bar{h}$  from base.

$$\bar{h} = h/3 = \frac{7.5}{3} = 2.5 \text{ m}$$

#### iii. Position of resultant pressure (Z)

$$Z = \bar{x} + \frac{P}{W} \bar{h} = 1.316 + \frac{275.9}{470.88} \times 2.5$$

$$Z = 2.78 \text{ m}$$

#### iv. Eccentricity (e)

$$e = (Z - b/2) = (2.78 - 3.5/2) = 1.03 \text{ m}$$

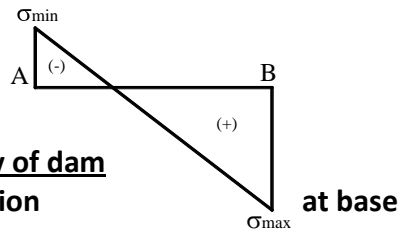
#### v. Stress at the base ( $\sigma$ )

$$\sigma = \frac{w}{b} \left( 1 \pm \frac{6e}{b} \right)$$

$$\sigma_{\max} = \frac{w}{b} \left( 1 + \frac{6e}{b} \right) = \frac{470.58}{3.5} \left( 1 + \frac{6 \times 1.03}{3.5} \right) = 372.09 \text{ kN/m}^2 \text{ (Comp.)}$$

$$\sigma_{\min} = \frac{w}{b} \left( 1 - \frac{6e}{b} \right) = \frac{470.88}{3.5} \left( 1 - \frac{6 \times 1.03}{3.5} \right) = -103.017 \text{ (Tension) kN/m}^2$$

**Stress diagram**



**Check for stability of dam**

**i. To avoid tension**

$$\sigma_{\min} \geq 0$$

$$e \leq b/6 \text{ (or) } Z \leq 2/3 b$$

$$e = 1.03\text{m}$$

$$b/6 = 3.5/6 = 0.58$$

$e > b/6$  Hence tension will develop at base.

**ii. To avoid sliding**

$$\text{F.S.} = \frac{\mu w}{P} = 1.0, \quad = \frac{0.6 \times 470.38}{275.9} = 1.02 > 1.00$$

F.S. = 1.02 > 1.0 Hence safe against sliding

**iii. To avoid failure from over turning**

$$\text{F.S.} = \frac{w(b-\bar{x})}{P\bar{h}} = 1.0, \quad = \frac{470.88(3.5-1.30)}{275.9 \times 2.5} = 1.48 > 1.00$$

1.48 > 1.0 (Safe)

Hence safe against overturning.

**iv. To avoid from crushing**

$$\text{SBC} > \sigma_{\max}$$

$$\text{SBC} = 300 \text{ kN/m}^2$$

$$\sigma_{\max} = 372.06 \text{ kN/m}^2$$

$$\text{SBC} < \sigma_{\max}$$

Hence not safe.

#### Problem 5.4

A trapezoidal dam 4m high has top width of 1m, with vertical face exposed of water it retain water up to its top level. Find the min. base width required. To avoid tension and sliding. Take unit wt. masonry as 22 kN/m<sup>3</sup> and that of water as 9.81 kN/m<sup>3</sup>. Take  $\mu = 0.6$  and F.S. = 1.5

**Given**

Top width  $a = 1\text{m}$

Height of dam  $H = 4\text{m}$

Depth of water  $h = H = 4 \text{ m}$   
 $\gamma = 22 \text{ kN/m}^3$   
 $\omega = 9.8 \text{ kN/m}^3$

**Condition : No tension at base**

**Required**

$b = ?$

**Solution**

**i. Weight of dam / m (W)**

$$W = \gamma \frac{(a+b)}{2} H = 22 \left( \frac{1+b}{2} \right) \times 4$$

$$\boxed{W = 44(1+b)} \quad \dots\dots\dots (1)$$

$$\bar{x} = \frac{a^2 + ab + b^2}{3(a+b)} = \frac{1^2 + 1 \times b + b^2}{3(1+b)}$$

$$\boxed{\bar{x} = \frac{b^2 + b + 1}{3(1+b)}} \quad \dots\dots\dots (2)$$

**ii. Total horizontal water thrust / 1m (p)**

$$P = \frac{\omega h^2}{2} = \frac{9.81 \times 4^2}{2} = 78.48 \text{ kN}$$

$$\bar{h} = h/3 = (4/3)$$

**iii. Position of resultant pressure**

$$Z = \bar{x} + \frac{P}{W} \bar{h} = \left[ \frac{b^2 + b + 1}{3(1+b)} \right] + \left[ \frac{78.48}{44(1+b)} \times \frac{4}{3} \right]$$

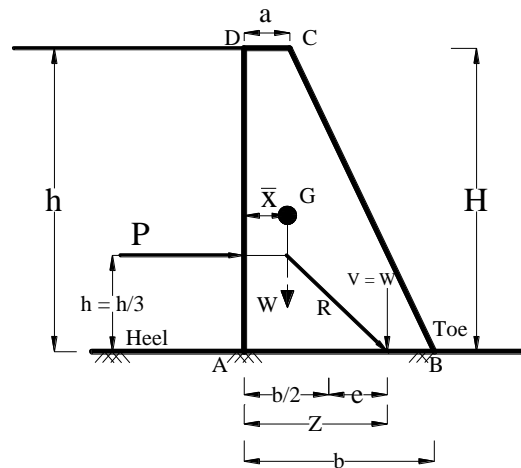
$$Z = \frac{b^2 + b + 1}{3(1+b)} + \frac{7.13}{3(1+b)}$$

$$Z = \frac{b^2 + b + 8.13}{3(1+b)} \quad \dots\dots\dots (3)$$

**Bottom width required**

a) To avoid tension at base

$$e \leq b/6 \text{ (or) } Z \leq 2/3 b$$



$$\frac{2}{3} b = \frac{b^2 + b + 8.13}{3(1+b)}$$

$$2b(1+b) = b^2 + b + 8.13$$

$$2b + 2b^2 = b^2 + b + 8.13$$

$$b^2 + b - 8.13 = 0 \quad \dots\dots\dots (4)$$

$$b = \frac{-1 \pm \sqrt{1^2 - 4 \times 1 \times 8.13}}{2 \times 1} = 2.4 \text{ m}$$

$b_1 = 2.40 \text{ m}$
------------------------

**b) To avoid sliding**

$$\text{F. S. (sliding)} = \frac{\mu \times W}{P} \geq 1.50$$

$$= \frac{0.6 \times 44(1+b)}{78.48}$$

$$= 1.5$$

$$0.6 \times 44(1+b) = (1.5 \times 78.48)$$

$$26.40(1+b) = 117.72$$

$$1+b = \frac{117.72}{26.40} = 4.46$$

$$b = 4.46 - 1 = 3.46 \text{ m}$$

$b_2 = 3.46 \text{ m}$
------------------------

Minimum bottom width required (b) = Maximum of  $b_1$  and  $b_2$

**Result:**

$$b = 3.46 \text{ m}$$

**Problem 5.5**

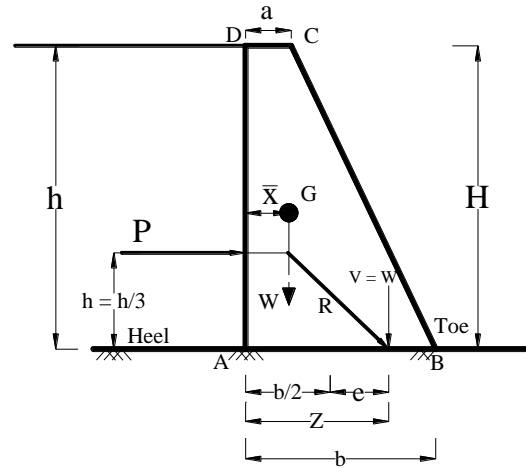
**A masonry dam 1m wide at top 3m wide at base retains water on its vertical face, the dam is full. Determine the max height of dam required.**

- i. For no tension at base
- ii. To avoid sliding, F.S. against sliding = 1.5
- iii. To avoid overturning, F.S. over turning = 2.0

Take  $\mu = 0.60$  Unit weight of masonry =  $23 \text{ kN/m}^3$  and Unit weight of water =  $9.81 \text{ kN/m}^3$

### Given

$$\begin{aligned} a &= 1\text{m} \\ b &= 3\text{m} \\ \mu &= 0.6 \\ \omega &= 9.81 \text{ kN/m}^3 \\ \gamma &= 23 \text{ kN/m}^3 \\ \text{F.S (Sliding)} &= 1.5 \\ \text{F.S. (Overturning)} &= 2 \end{aligned}$$



### Required

$$H = h = ?$$

### Solution

#### i. Weight of dam 1m (w)

$$W = \gamma \frac{(a+b)}{2} H = 23 \frac{(1+3)}{2} H = 46 H \quad \text{..... (1)}$$

$$\bar{x} = \frac{a^2 + ab + b^2}{3(a+b)} = \frac{1^2 + (1+3) + 3^2}{3(1+3)} = 1.16\text{m}$$

#### ii. Total horizontal thrust / 1m (P)

$$P = \frac{\omega h^2}{2} = \frac{9.81 \times H^2}{2} =$$

$$P = 4.905 H^2 \text{ kN} \quad \text{..... (2)}$$

$$\bar{h} = H/3$$

#### iii. Position of resultant thrust (Z)

$$Z = \bar{x} + \frac{P}{W} \bar{h}$$

$$Z = 1.16 + \frac{4.905 H^2}{46 H} \times H/3 = (1.16 + 0.0355 H^2) \quad \text{..... (3)}$$

### Maximum height

#### i. To avoid tension

$$Z \leq \frac{2}{3} b = \frac{2}{3} \times 3$$

$$Z = (\frac{2}{3}) \times 3 \text{ m} = 2 \text{ m}$$

$$(1.08 + 0.0355 H^2) = 2$$

$$0.0355 H^2 = 2 - 1.16 = 0.84$$

$$H = \sqrt{\frac{0.84}{0.0355}} = 4.86 \text{ m} \quad \boxed{H_1 = 4.86\text{m}}$$

**ii. To avoid sliding**

$$\text{F.S. (sliding)} = 1.5$$

$$\text{F.S.} = \frac{\mu w}{P} = \frac{0.6 \times 46.4}{4.905 H^2} = 1.5$$

$$H = \frac{0.6 \times 46}{4.905 \times 1.5} = 3.75 \text{ m}$$

$$H_2 = 3.75 \text{ m}$$

**iii. To avoid overturning**

$$\text{F.S (overturning)} = 2.0$$

$$\text{F.S} = \frac{W(b-\bar{x})}{P\bar{h}} = 2.0 \text{ m}$$

$$= \frac{(46xH)(3-1.08)}{4.905 H^2 \times (H/3)} = 2.0$$

$$= \frac{46(3-1.08)3}{4.905 \times H^2} = 2.0$$

$$H^2 = \frac{46(3-1.08)3}{4.905 \times 2} = 27 ; H = \sqrt{27} = 5.19 \text{ m}$$

$$H_3 = 5.19 \text{ m}$$

Maximum height required = min of  $H_1$ ,  $H_2$  &  $H_3$

**Result:**

$$H = 3.75 \text{ m}$$

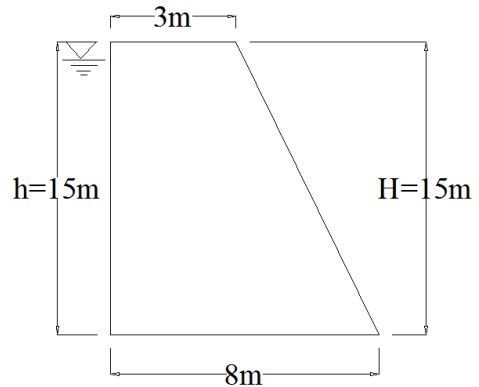
## Additional Problems

### Problem:1

A concrete dam trapezoidal section of 15m height retains water on its vertical face to its full height. The top width of the dam is 3m and the bottom is 8m, weight of concrete is  $24\text{KN/m}^3$ . Find i) the resultant thrust on the base per meter length of dam .ii) the point where the resultant cuts the base. iii) intensities of maximum and minimum stresses at the base.

#### Given data:

Height of the dam ,  $H=15\text{m}$   
 Height of water,  $h=15\text{m}$   
 Top width,  $a=3\text{m}$   
 Bottom width,  $b=8\text{m}$   
 Weight of concrete,  $\gamma_m=24\text{KN/m}^3$   
 Specific weight of water,  $\gamma_w=9.81\text{KN/m}^3$



#### Solution:

$$\text{Maximum stress, } \sigma_{\max} = \frac{w}{b} \left( 1 + \frac{6e}{b} \right)$$

consider 1m length of dam

$$\begin{aligned} \text{Width of dam } w &= \left( \frac{a+b}{2} \right) \times \gamma_m \times H \\ &= \left( \frac{3+8}{2} \right) \times 24 \times 15 = 1980 \text{ kN} \end{aligned}$$

$w=1980 \text{ KN}$  acting at  $\bar{x}$  from the vertical face.

#### Eccentricity :

$$\begin{aligned} e &= z - \frac{b}{2} \\ Z &= \bar{x} + \left( \frac{p \times h}{w \times 3} \right) \\ \bar{x} &= \frac{a^2 + ab + b^2}{3(a+b)} \\ &= \frac{3^2 + (3 \times 8) + 8^2}{3(3+8)} \\ \bar{x} &= 2.94\text{m} \end{aligned}$$

#### Water pressure ,

$$\begin{aligned} P &= \frac{\gamma_m \times h^2}{2} \\ &= \frac{24 \times 15^2}{2} \\ P &= 2700 \text{ kN} \\ Z &= 2.94 + \left( \frac{2700 \times 15}{1980 \times 3} \right) \\ Z &= 9.76\text{m}. \end{aligned}$$



**Eccentricity :**

$$e = z - \frac{b}{2}$$

$$= 9.76 - \frac{8}{2}$$

$$e = 5.76\text{m.}$$

**Maximum stress ,**

$$\sigma_{\max} = \frac{w}{b} \left( 1 + \frac{6e}{b} \right)$$

$$= \frac{1980}{8} \left( 1 + \frac{6(5.76)}{8} \right)$$

$$\sigma_{\max} = 1316.7 \text{ kN/m}^2 \text{ (compression)}$$

**Minimum stress ,**

$$\sigma_{\min} = \frac{w}{b} \left( 1 - \frac{6e}{b} \right)$$

$$= \frac{1980}{8} \left( 1 - \frac{6(5.76)}{8} \right)$$

$$\sigma_{\min} = 821.7 \text{ kN/m}^2 \text{ (compression)}$$

**Resultant thrust**

$$R = \sqrt{P^2 + w^2}$$

$$= \sqrt{2700^2 + 1980^2}$$

$$R = 3348.2 \text{ kN}$$

**Problem:2**

A trapezoidal masonry dam 2m wide at top and 6m wide at base has to retain water on its vertical face up to top. Calculate maximum height of dam to ensure that no tension is developed at the base. take weight of masonry as 20 kN/m<sup>3</sup> and weight of water as 9.81 kN/m<sup>3</sup>.

**Given data:**

Top width,  $a=2\text{m}$   
 Bottom width,  $b=6\text{m}$   
 Height of dam,  $H=$  height of water,  $h$   
 Specific weight of masonry,  $\gamma_m= 20 \text{ kN/m}^3$   
 Weight of water,  $\gamma_w =9.81 \text{ kN/m}^3$

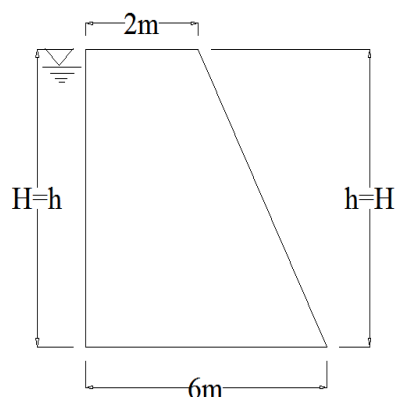
**To find:**

Maximum height of the dam

**Solution:**

Consider 1m length of wall

Lateral water pressure ,



$$P = \frac{\gamma_m \times H^2}{2}$$

$$P = \frac{9.81 \times H^2}{2} = 4.905 H^2$$

Weight of dam ,

$$w = \left( \frac{a+b}{2} \right) \times \gamma_m \times H$$

$$= \left( \frac{2+6}{2} \right) \times 20 \times H$$

$$w = 80H$$

$$\bar{X} = \frac{a^2 + ab + b^2}{3(a+b)}$$

$$= \frac{2^2 + (2 \times 6) + 6^2}{3(2+6)}$$

$$\bar{X} = 2.17 \text{ m}$$

$$Z = \bar{X} + \left( \frac{Pxh}{wx^3} \right)$$

$$Z = 2.17 + \left( \frac{4.905 H^2 \times H}{80H \times 3} \right)$$

$$Z = 2.17 + 0.02H^2 \text{ -----(1)}$$

For no tension condition

$$e = \left( \frac{b}{6} \right)$$

$$e = z - \left( \frac{b}{2} \right)$$

$$Z = e + \left( \frac{b}{2} \right)$$

$$Z = \left( \frac{b}{6} \right) + \left( \frac{b}{2} \right)$$

$$Z = \left( \frac{2b}{3} \right)$$

$$Z = \left( \frac{2(6)}{3} \right)$$

$$Z = 4 \text{ m -----(2)}$$

Equating (1) & (2)

$$Z = 2.17 + 0.02 H^2$$

$$4 = 2.17 + 0.02 H^2$$

$$H^2 = \left( \frac{1.87}{0.02} \right) = 91.5 \text{ m}$$

$$H = 9.56 \text{ m.}$$

### Problem :3

A masonry dam 8m high retains water to a depth 7m. The top width of the dam is 1.5m and bottom width 5m. The relative density of masonry is 2.4. Calculate the normal stress intensities at base of dam. Sketch the distribution.

Given data:

Height of dam,  $H=8\text{m}$

Height of water,  $h=7\text{m}$

Top width of dam,  $a=1.5\text{ m}$

Bottom width of dam,  $b=5\text{m}$

Relative density of masonry,  $\rho = 2.4$

To find:

Normal intensities at the base

i.e.,  $\sigma_{\max}$  and  $\sigma_{\min}$

Solution:

Relative density of masonry  $= \frac{\text{sp.wt of masonry}}{\text{sp.wt of water}}$

$$\text{i.e., } \rho = \frac{\gamma_m}{\gamma_w}$$

Take  $\gamma_m = 9.81 \text{ kN/m}^3$

$$2.4 = \frac{\gamma_m}{9.81}$$

$$\gamma_m = 23.54 \text{ kN/m}^3$$

Consider 1m length of wall

Lateral water pressure ,

$$P = \frac{\gamma_w \times h^2}{2}$$

$$P = \frac{9.81 \times 7^2}{2}$$

$$P = 240.35 \text{ kN}$$

Weight of dam,

$$W = \left( \frac{a+b}{2} \right) \times \gamma_m \times H$$

$$= \left( \frac{1.5+5}{2} \right) \times 23.54 \times 8$$

$$W = 612.04 \text{ kN}$$

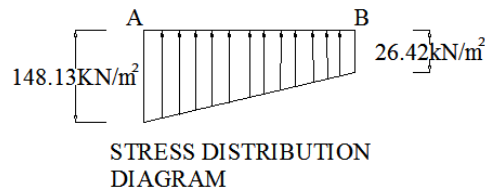
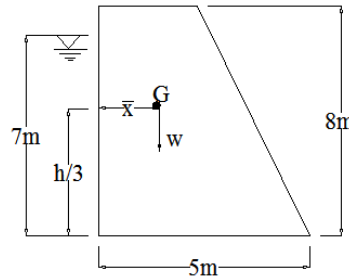
$$\bar{X} = \frac{a^2 + ab + b^2}{3(a+b)}$$

$$= \frac{1.5^2 + (1.5 \times 5) + 5^2}{3(1.5+5)}$$

$$\bar{X} = 1.78\text{m.}$$

$$Z = \bar{X} + \left( \frac{P \times h}{W \times 3} \right)$$

$$Z = 1.78 + \left( \frac{240.35 \times 7}{612.04 \times 3} \right)$$



$$Z=2.69 \text{ m.}$$

**Eccentricity (e),**

$$e = z - \left(\frac{b}{2}\right)$$

$$= 2.69 - \left(\frac{7}{2}\right)$$

$$e = -0.81 \text{ m. (hogging)}$$

**Maximum stress**

$$\sigma_{\max} = \frac{w}{b} \left( 1 + \frac{6e}{b} \right)$$

$$= \frac{612.04}{7} \left( 1 + \frac{6(0.81)}{7} \right)$$

$$\sigma_{\max} = 148.13 \text{ kN/m}^2$$

**Minimum stress**

$$\sigma_{\min} = \frac{w}{b} \left( 1 - \frac{6e}{b} \right)$$

$$= \frac{612.04}{7} \left( 1 - \frac{6(0.81)}{7} \right)$$

$$\sigma_{\min} = 26.72 \text{ kN/m}^2.$$

**problem :4**

A masonry dam 1m wide at the top, 4m wide at the base and 6m height with the water side is vertical. The water stored up to the top of wall. Find the maximum and minimum normal intensities at the base, it's the specific weight of masonry is  $22 \text{ kN/m}^3$ . Calculate also the normal stress intensities when reservoir empty.

**Given data:**

Top width,  $a=1\text{m}$

Bottom width,  $b=4\text{m}$

Height of dam,  $H=6\text{m}$

Height of water,  $h=6\text{m}$

Specific weight of masonry,  $\gamma_m=22 \text{ kN/m}^3$

Specific weight of water,  $\gamma_w=9.81 \text{ kN/m}^3$

**To find :**

1. Maximum stress,  $\sigma_{\max}$

2. Minimum stress,  $\sigma_{\min}$

3. Normal stress intensity when reservoir empty

**Solution:**

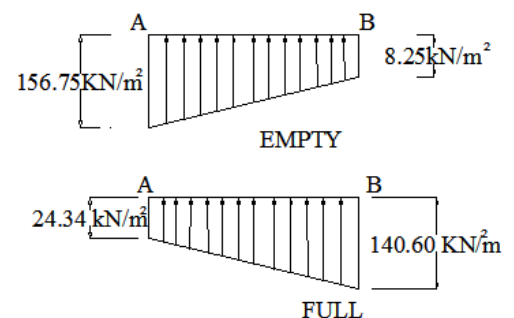
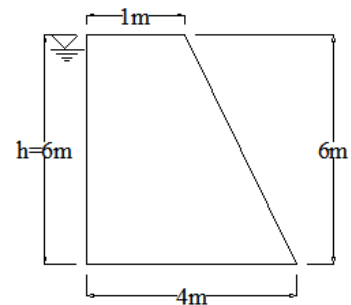
Consider 1m length of wall

Weight of dam,

$$w = \left( \frac{a+b}{2} \right) \times \gamma_m \times H$$

$$= \left( \frac{1+4}{2} \right) \times 22 \times 6$$

$$= 330 \text{ kN}$$



$$\bar{x} = \frac{a^2 + ab + b^2}{3(a+b)}$$

$$= \frac{1^2 + (1 \times 4) + 4^2}{3(1+4)}$$

$$\bar{x} = 1.4 \text{ m}$$

**Lateral water pressure ,**

$$P = \frac{\gamma_m \times h^2}{2}$$

$$= \frac{9.8 \times 6^2}{2}$$

$$= 176.58 \text{ kN}$$

$$Z = \bar{x} + \left( \frac{P \times h}{w \times 3} \right)$$

$$Z = 1.40 + \left( \frac{176.58 \times 6}{330 \times 3} \right)$$

$$Z = 2.47 \text{ m}$$

**Eccentricity(e) ,**

$$e = z - \left( \frac{b}{2} \right)$$

$$= 2.47 - \left( \frac{4}{2} \right)$$

$$e = 0.47 \text{ m.}$$

**(i) When the reservoir is full:**

**Maximum stress**

$$\sigma_{\max} = \frac{w}{b} \left( 1 + \frac{6e}{b} \right)$$

$$= \frac{330}{4} \left( 1 + \frac{6(0.47)}{4} \right)$$

$$\sigma_{\max} = 140.66 \text{ kN/m}^2$$

**Minimum stress**

$$\sigma_{\min} = \frac{w}{b} \left( 1 - \frac{6e}{b} \right)$$

$$= \frac{330}{4} \left( 1 - \frac{6(0.47)}{4} \right)$$

$$\sigma_{\min} = 24.34 \text{ kN/m}^2$$

**(ii) When the reservoir is empty**

Lateral water pressure,

$$P = 0$$

Weight of dam ,

$$w = 330 \text{ kN}$$

$$\bar{x} = 1.40 \text{ m}$$

$$z = \bar{x} = 1.40 \text{ m}$$

$$e = z - \left( \frac{b}{2} \right)$$

$$e = 1.40 - \left( \frac{4}{2} \right)$$

$$= -0.6 \text{ m}$$

**Maximum stress**

$$\sigma_{\max} = \frac{w}{b} \left( 1 + \frac{6e}{b} \right)$$

$$= \frac{330}{4} \left( 1 + \frac{6(0.6)}{4} \right)$$

$$\sigma_{\max} = 156.75 \text{ kN/m}^2 \text{ (compression)}$$

#### Minimum stress

$$\sigma_{\min} = \frac{w}{b} \left( 1 - \frac{6e}{b} \right)$$

$$= \frac{330}{4} \left( 1 - \frac{6(0.6)}{4} \right)$$

$$\sigma_{\min} = 8.25 \text{ kN/m}^2 \text{ (compression)}$$

answer:

i) When the reservoir is full:

$$\sigma_{\max} = 140.66 \text{ kN/m}^2 \text{ (compressive)}$$

$$\sigma_{\min} = 24.34 \text{ kN/m}^2 \text{ (compressive)}$$

ii) When the reservoir is empty

$$\sigma_{\max} = 156.75 \text{ kN/m}^2 \text{ (compressive) @A}$$

$$\sigma_{\min} = 8.25 \text{ kN/m}^2 \text{ (compressive) @B}$$

#### Problem:5

A trapezoidal masonry dam 1.5m width at top and 5m wide at the base .it is 8.0m height with a vertical water face and retains water face and retains water to a depth of 7.5m. find the maximum and minimum stress intensities at the base. take weight masonry as 22 kN/m<sup>3</sup> and weight of water as 9.81 kN /m<sup>3</sup>.

#### Given data

Top width ,      a = 1.5m  
 Bottom width,    b = 5m  
 Height of dam,   H = 8m  
 Height of dam,   h = 7.5m  
 Specific weight of masonry,  $\gamma_m = 22 \text{ kN/m}^3$   
 Specific weight of water,     $\gamma_w = 9.81 \text{ kN/m}^3$

#### To Find

Max. and min. stresses at the base.

#### Solution

Consider 1m length of wall.

Lateral water pressure,

$$P = \frac{\gamma_w \cdot h^2}{2}$$

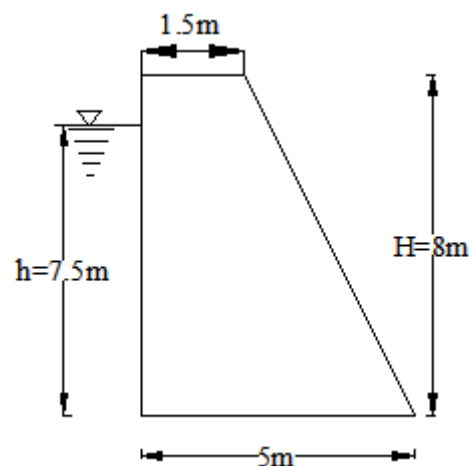
$$= \frac{9.81 \times 7.5^2}{2} = 275.91 \text{ kN}$$

Weight of dam,

$$W = \frac{(a+b)}{2} \times \gamma_m \times H$$

$$= \frac{(1.5+5)}{2} \times 22 \times 8 = 572.00 \text{ kN}$$

$$\bar{x} = \frac{a^2 + ab + b^2}{3(a+b)}$$



$$= \frac{1.5^2 + (1.5 \times 5) + 5^2}{3(1.5 + 5)} = 1.782 \text{ m}$$

$$Z = \bar{x} + \left( \frac{P}{W} \times \frac{h}{3} \right)$$

$$= 1.782 + \left( \frac{275.91}{572} \times \frac{7.5}{3} \right)$$

$$Z = 2.99 \text{ m}$$

$$e = Z - \frac{b}{2}$$

$$= 2.99 - \frac{5}{2} = 0.49 \text{ m}$$

Max stress,

$$\sigma_{\max} = \frac{W}{b} \left( 1 + \frac{6e}{b} \right)$$

$$= \frac{572}{5} \left( 1 + \frac{6(0.49)}{5} \right) = 181.67 \text{ kN/m}^2 (\text{comp})$$

Min stress,

$$\sigma_{\min} = \frac{W}{b} \left( 1 - \frac{6e}{b} \right)$$

$$= \frac{572}{5} \left( 1 - \frac{6(0.49)}{5} \right) = 47.13 \text{ kN/m}^2 (\text{comp})$$

**Result:**

(i) Max. stress,  $\sigma_{\max} = 181.67 \text{ kN/m}^2 (\text{comp})$

(ii) Min stress,  $\sigma_{\min} = 47.13 \text{ kN/m}^2 (\text{comp})$

**Problem: 6**

A masonry dam 20 m high retains water to a depth of 18m. The top width of the dam is 5m and bottom width is 15m. The relative density of masonry is 2.4. Calculate the normal stress intensities at the base. Sketch the stress distribution.

**Given data**

Height of dam,  $H = 20 \text{ m}$

Height of water,  $h = 18 \text{ m}$

Top width of dam,  $a = 5 \text{ m}$

Bottom width of dam,  $b = 15 \text{ m}$

Relative density of masonry,  $\rho = 2.4$

**To Find:**

Normal stress intensities at the base.

i.e.,  $\sigma_{\max}$  and  $\sigma_{\min}$

**Solution**

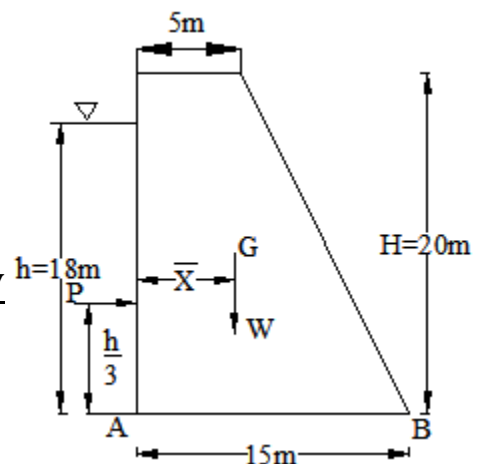
$$\text{Relative density of masonry} = \frac{\text{specific weight of masonry}}{\text{specific weight of water}}$$

$$\text{i.e., } \rho = \frac{\lambda}{\gamma_w}$$

$$\text{Take } \gamma_w = 9.81 \text{ kN/m}^3$$

$$\text{i.e., } 2.4 = \frac{\lambda}{9.81}$$

$$\therefore \lambda = 2.4 \times 9.81 = 23.54 \text{ kN/m}^3$$



Consider 1m length wall

Lateral water pressure,

$$p = \frac{\gamma_w h^2}{2}$$

$$= \frac{9.81 \times 18^2}{2} = 1589.22 \text{ kN}$$

Weight of dam,

$$W = \frac{(a+b)}{2} \times \gamma_m \times H$$

$$= \frac{(5+15)}{2} \times 23.54 \times 20 = 4708 \text{ kN}$$

$$\bar{X} = \frac{a^2 + ab + b^2}{3(a+b)}$$

$$= \frac{5^2 + (5 \times 15) + 15^2}{3(5+15)} = 5.42 \text{ m}$$

$$Z = \bar{X} + \left( \frac{P}{W} \times \frac{h}{3} \right)$$

$$= 5.42 + \left( \frac{1589.22}{4708} \times \frac{18}{3} \right) = 7.45 \text{ m}$$

Eccentricity,

$$e = z - \frac{b}{2}$$

$$= 7.45 - \frac{15}{2} = -0.05 \text{ m}$$

Max stress,

$$\sigma_{\max} = \frac{W}{b} \left( 1 + \frac{6e}{b} \right)$$

$$= \frac{4708}{15} \left( 1 + \frac{6(0.05)}{15} \right) = 320.144 \text{ kN/m}^2 \text{ at (A)}$$

Min stress,

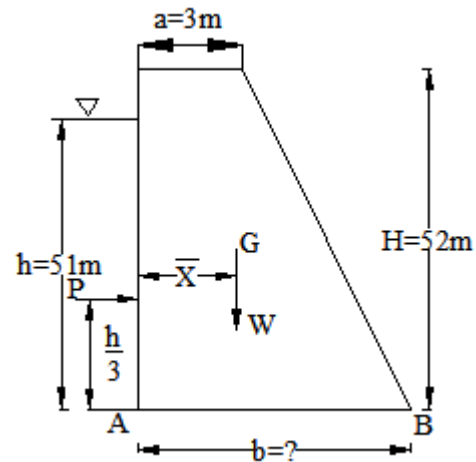
$$\sigma_{\min} = \frac{W}{b} \left( 1 - \frac{6e}{b} \right)$$

$$= \frac{4708}{15} \left( 1 - \frac{6(0.05)}{15} \right) = 307.59 \text{ kN/m}^2 \text{ (B)}$$

**Result:**

i) Max. stress,  $\sigma_{\max} = 320.144 \text{ kN/m}^2$  (comp) at (A)

ii) Min .stress,  $\sigma_{\min} = 307.59 \text{ kN/m}^2$  (comp) at (B)



### Problem: 7

A trapezoidal masonry dam is 3m wide at top. It is 52m high with a vertical water face retains water to a depth of 51m. Calculate the necessary minimum base width of the dam to ensure no tension is developed at the base. Weight of masonry is  $24 \text{ kN/m}^3$  and weight of water is  $10 \text{ kN/m}^3$ .

**Given data**

Top width,  $a = 3 \text{ m}$

Height of dam,  $H = 52 \text{ m}$

Height of water  $h = 51 \text{ m}$

Specific weight of masonry,  $\gamma_m = 24 \text{ kN/m}^3$

Specific weight of water,  $\gamma_w = 10 \text{ kN/m}^3$

**To Find:**

Minimum base width,  $b = ?$

**Solution**



Consider 1m length of wall

Lateral water pressure,

$$p = \frac{\gamma_w h^2}{2}$$

$$= \frac{10 \times 15^2}{2} = 1125 \text{ kN}$$

Weight of dam,

$$W = \frac{(a+b)}{2} \times \gamma_m \times H$$

$$= \frac{(3+b)}{2} \times 24 \times 52 = 624 (3+b)$$

$$\bar{x} = \frac{a^2 + ab + b^2}{3(a+b)}$$

$$= \frac{3^2 + (3b) + b^2}{3(3+b)} = \frac{9 + (3b) + b^2}{3(3+b)}$$

$$Z = \bar{x} + \frac{P}{W} \times \frac{h}{3}$$

$$= \frac{9 + (3b) + b^2}{3(3+b)} + \frac{1125}{624(3+b)} \times \frac{51}{3}$$

$$= \frac{9 + (3b) + b^2}{3(3+b)} + \frac{91.94}{3(3+b)}$$

$$Z = \frac{b^2 + (3b) + 91.94}{3(3+b)} \text{ -----(1)}$$

For no tension condition,

$$e = \frac{b}{6}$$

$$z = \frac{b}{2} + e$$

$$= \frac{b}{2} + \frac{b}{6} = \frac{3b+b}{6}$$

$$z = \frac{2b}{3} \text{ -----(2)}$$

equating (1) and (2)

$$\frac{2b}{3} = \frac{b^2 + (3b) + 91.94}{3(3+b)}$$

$$\text{i.e., } 2b(3+b) = b^2 + 3b + 91.94$$

$$\text{i.e., } 6b + 2b^2 - b^2 - 3b - 91.94 = 0$$

$$\text{i.e., } b^2 + 3b - 91.94 = 0$$

$$a = 1, b = 3, c = -91.94$$

$$b = \frac{-3 \pm \sqrt{3^2 - 4 \times 1 \times (-91.94)}}{2 \times 1}$$

$$= 8.205 \text{ m (or) } -11.205 \text{ m}$$

Adopt  $b = 8.205 \text{ m}$

**Result:**

Min. base width of dam to ensure no tension = **8.205 m**

### Problem:8

Calculate the minimum bottom width required for a dam of height 7m. Maximum depth of water to be impounded is 6m. The top width of section is 1.25 m. The specific weight of masonry is  $22.5 \text{ kN/m}^3$ . Take Co-efficient of friction between masonry and earth is 0.6.

#### Given data

Height of dam,  $H = 7\text{m}$

Height of water,  $h = 6\text{m}$

Top width,  $a = 1.25\text{m}$

Specific weight of masonry,  $\gamma_m = 22.5 \text{ kN/m}^3$

Take Specific weight of water,  $\gamma_w = 9.81 \text{ kN/m}^3$

Co-efficient of friction between

Masonry and earth,  $\mu = 0.6$

#### To find:

Minimum base width of the dam

i) To avoid tension at the base

ii) To avoid sliding

#### Solution

Consider 1m length of wall

Lateral water pressure,

$$P = \frac{\gamma_w \cdot h^2}{2}$$
$$= \frac{9.81 \times 6^2}{2} = 176.58 \text{ kN}$$

Weight of dam,

$$W = \frac{(a+b)}{2} \times \gamma_m \times H$$
$$= \frac{(1.25+b)}{2} \times 22.5 \times 7 = 78.75 (1.25+b) \text{ kN}$$

$$\bar{X} = \frac{a^2 + ab + b^2}{3(a+b)}$$
$$= \frac{1.25^2 + (1.25b) + b^2}{3(1.25+b)} = \frac{1.563 + (1.25b) + b^2}{3(1.25+b)}$$

$$Z = \bar{X} + \frac{P}{W} \times \frac{h}{3}$$
$$= \frac{1.563 + (1.25b) + b^2}{3(1.25+b)} + \left( \frac{176.58}{78.75(1.25+b)} \times \frac{6}{3} \right)$$

$$= \frac{1.563 + (1.25b) + b^2}{3(1.25+b)} + \frac{13.454}{3(1.25+b)}$$

$$Z = \frac{b^2 + (1.25b) + 15.017}{3(1.25+b)} \text{ -----(1)}$$

#### (i) To avoid tension at the base

We know,

$$e = \frac{b}{6}$$

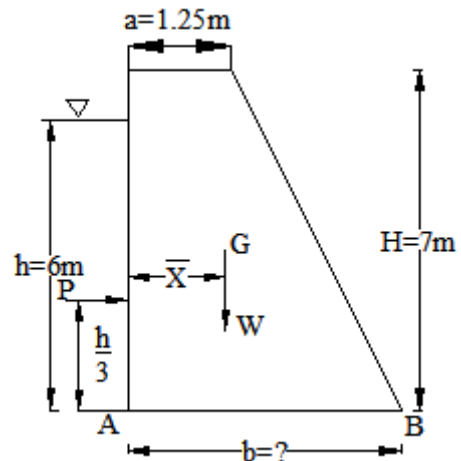
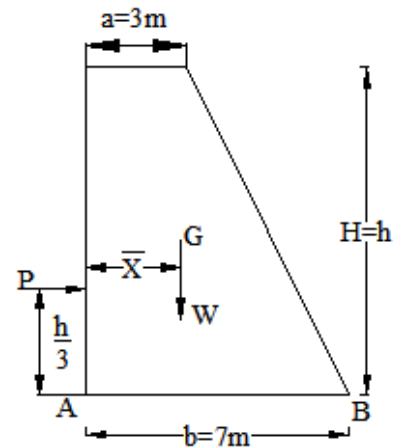
$$z = \frac{b}{2} + e$$

$$= \frac{b}{2} + \frac{b}{6} = \frac{2b}{3}$$

$$z = \frac{2b}{3} \text{ -----(2)}$$

equating (1) and (2)

$$\frac{2b}{3} = \frac{b^2 + (1.25b) + 15.017}{3(1.25+b)}$$

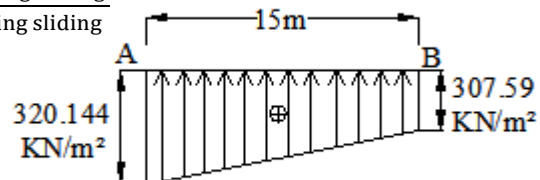


$$\begin{aligned}
 \text{i.e., } 2b(1.25+b) &= b^2 + 1.25b + 15.017 \\
 \text{i.e., } 2.5b + 2b^2 - b^2 - 1.25b - 15.017 &= 0 \\
 \text{i.e., } b^2 + 1.25b - 15.017 &= 0 \\
 a = 1, \quad b = 1.25, \quad c = -15.017 \\
 b &= \frac{-1.25 \pm \sqrt{1.25^2 - 4 \times 1 \times (-15.017)}}{2 \times 1} \\
 &= 3.3 \text{ m (or) } -4.55 \text{ m} \\
 \text{Adopt } b &= 3.3 \text{ m}
 \end{aligned}$$

**(ii) To avoid sliding**

$$\text{Force of safety against sliding} = \frac{\text{force resisting sliding}}{\text{force causing sliding}}$$

$$\begin{aligned}
 \text{i.e., } \frac{\mu \cdot W}{P} &= 1.5 \\
 \frac{0.6 \times 78.75(1.25+b)}{176.58} &= 1.5 \\
 \text{i.e., } 1.25 + b &= 5.606 \\
 \therefore b &= 4.356 \text{ m}
 \end{aligned}$$



Stress distribution diagram

**Result:** Minimum base width = max. of all values of  $b = 4.356 \text{ m}$

**Problem: 10**

A trapezoidal masonry dam 3m wide at the top and 7m wide at base has to retain water on its vertical face up to the top. Calculate maximum height of the dam to ensure no tension at the base. Take weight of masonry as  $20 \text{ kN/m}^3$  and weight as  $9.81 \text{ kN/m}^3$ .

**Given data**

- Top width,  $a = 3 \text{ m}$
- Bottom width,  $b = 7 \text{ m}$
- Height of dam  $H =$  height of water  $h$
- Specific weight of masonry,  $\gamma_m = 20 \text{ kN/m}^3$
- Specific weight of water,  $\gamma_w = 9.81 \text{ kN/m}^3$

**To Find:**

Height of dam,  $H$  to avoid tension at the base

**Solution**

Consider 1m length of wall

Lateral water pressure,

$$\begin{aligned}
 P &= \frac{\gamma_w \cdot h^2}{2} \quad (\because h = H) \\
 &= \frac{9.81 \times H^2}{2} = 4.905 H^2
 \end{aligned}$$

Weight of dam,

$$\begin{aligned}
 W &= \frac{(a+b)}{2} \times \gamma_m \times H \\
 &= \frac{(3+7)}{2} \times 20 \times H = 100 H \\
 \bar{x} &= \frac{a^2 + ab + b^2}{3(a+b)}
 \end{aligned}$$

$$= \frac{3^2 + (3 \times 7) + 7^2}{3(3+7)} = 2.633 \text{ m}$$

$$Z = \bar{x} + \frac{P}{W} \times \frac{h}{3}$$

$$= 2.633 + \frac{4.905H^2}{100H} \times \frac{H}{3}$$

$$Z = 2.633 + 0.0164 H^2 \text{ -----(1)}$$

**For no tension condition**

$$e = \frac{b}{6}$$

$$z = \frac{b}{2} + e$$

$$= \frac{b}{2} + \frac{b}{6} = \frac{2b}{3}$$

$$z = \frac{2 \times 7}{3} = 4.667 \text{ m -----(2)}$$

equating (1) and (2)

$$2.633 + 0.0164 H^2 = 4.667$$

$$\therefore H = 11.136 \text{ m}$$

**Result**

Height of dam required to avoid tension,  $H = 11.136 \text{ m}$

## REVIEW QUESTIONS

### Two mark questions

1. What are the failure of Dams?
2. Define middle third rule.
3. State the shape of the elementary profile of a masonry dam.
4. State the conditions to avoid tension at the base.
5. Draw the elementary profile of a Masonry dam.
6. What is minimum base width of elementary profile of masonry dam?
7. Which are the main factors affecting the stability of a masonry dam?
8. When tension is developed at the base of a dam?
9. On what basis the base width of a masonry dam is determined?

### Three mark questions

1. What are the causes of failure of masonry dams? State the conditions to check the stability of dams.
2. What is an elementary profile of a dam? Sketch the same.
3. A trapezoidal masonry dam having 12m height retains water to a height of 10m on its vertical face. Find the horizontal water pressure if  $\gamma = 9.81 \text{ kN/m}^3$ .
4. State and explain middle third rule for no tension at the base of dam.
5. Derive the condition for no tension at the base of masonry dam.
6. State the procedure to find the minimum base width of a masonry dam for no tension.

### Ten mark questions

1. A trapezoidal masonry dam  $m$  wide at top, 5m wide at the base is 8m high. It retains water to a depth of 7.5m on its vertical face. Calculate the maximum and minimum stress intensities at the base. Take weight of masonry as  $22 \text{ kN/m}^3$  and that of water as  $9.81 \text{ kN/m}^3$ .
2. explain in details how the various checks are being done for ensuring the safety and stability of a gravity type masonry dam.

3. A trapezoidal masonry dam 1m wide at top, 4m wide at its bottom and 6m high is retaining water on its vertical face to a height equal to the top of the dam. Determine the maximum and minimum intensities of stress at the base. Take weight of masonry as  $\text{kN/m}^3$  and that of water as  $9.81 \text{ kN/m}^3$ .
4. A trapezoidal dam 3m wide at top, 8m wide at the base is 12 m high. It retains water up to a depth of 11m on the upstream vertical face. Take the weight of masonry as  $24 \text{ kN/m}^3$  and that of water as  $9.81 \text{ kN/m}^3$ . Check the stability of the dam for overturning and sliding if  $\mu =$  and  $\text{F.O.S} = 1.5$ .
5. A trapezoidal masonry dam having 3m top width, 8m bottom width and 12m high retains water to a height of 11m on its vertical face. Check the stability of the dam, if the masonry weighs  $20 \text{ kN/m}^3$  and co-efficient of friction between the bottom of masonry and soil is 0.6. Take allowable compressive stress as  $400 \text{ kN/m}^3$  and weight of water as  $9.81 \text{ kN/m}^3$ .
6. A trapezoidal masonry dam 2.5m wide at top 5.5m wide at the base is 15m high. It retains water to a depth of 12m on its vertical face. Check the stability of the dam for overturning and sliding if  $\mu = 0.60$  and  $\text{F.O.S} = 1.5$ . Take weight of masonry as  $25 \text{ kN/m}^3$  and that of water as  $9.81 \text{ kN/m}^3$ .
7. A masonry dam of 11m height retains water on its vertical face for a height of 9m. The width of the dam is 2m in the top 2m height and varies gradually to 5m at bottom, with slope on one side only. Find the factor of safety of the dam against overturning if unit weights of masonry and water are  $20 \text{ kN/m}^3$  and  $10 \text{ kN/m}^3$  respectively.
8. A gravity dam of trapezoidal cross section of 20m height stores water on its vertical face for 18m height, with 2m free board. The top and bottom widths of dam are 4m and 10m respectively. Draw the pressure distribution diagram at base. Specific weight of masonry and water are  $20 \text{ kN/m}^3$  and  $10 \text{ kN/m}^3$  respectively.
9. A trapezoidal masonry dam 3m wide at top, 12m wide at the base is 18m high. It retains water up to a depth of 17m on its vertical face. Check the stability of the dam for tension, sliding and crushing if  $\mu = 0.6$  and  $\text{F.O.S} = 1.5$ . Take the weight of masonry as  $20 \text{ kN/m}^3$  and that of water as  $10 \text{ kN/m}^3$ . Allowable compressive stress =  $400 \text{ kN/m}^3$ .
10. A trapezoidal masonry dam 3m wide at top, 7m wide at the base has retains water on its vertical face. Calculate the maximum height of the dam to ensure no tension at the base. Take weight of masonry as  $22 \text{ kN/m}^3$  and that of water as  $9.81 \text{ kN/m}^3$ .
11. A masonry retaining wall 1m wide at top, 3m wide at base retains earth on its vertical face level with top. Determine the max height of dam required.
  - i) For no tension at base.
  - ii) To avoid sliding,  $\text{F.S. against sliding} = 1.5$
  - iii) To avoid over turning,  $\text{F.S. against overturning} = 2.0$
 Take Unit weight of masonry =  $23 \text{ kN/m}^3$  and Unit weight of earth =  $18 \text{ kN/m}^3$ .  
 Angle of repose of soil =  $30^\circ$ ,  $\mu = 0.60$ .
12. A trapezoidal masonry dam 2m wide at top and 6m wide at base has to retain water on its vertical face up to the top. Calculate the maximum height of the dam to ensure that no tension is developed at the base. Take weight of masonry as  $20 \text{ kN/m}^3$  and weight of water as  $9.81 \text{ kN/m}^3$ .

## 5. DAMS AND RETAINING WALL

### 5.2 EARTH PRESSURE AND RETAINING WALLS

Definition – Angle of repose /Angle of Internal friction of soil– State of equilibrium of soil – Active and Passive earth pressures – Rankine's theory of earth pressure – Assumptions – Lateral earth pressure with level back fill / level surcharge (Angular Surcharge not required)– Earth pressure due to Submerged soils – (Soil retained on vertical back of wall only) – Maximum and minimum stresses at base of Trapezoidal Gravity walls – Stress distribution diagrams – Problems – Stability of earth retaining walls – Problems to check the stability of walls- Minimum base width for no tension.

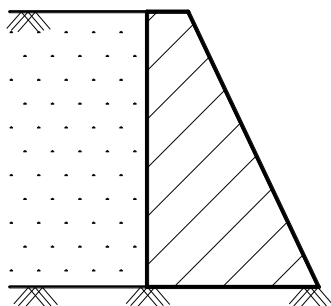
### 5.2. EARTH PRESSURE AND RETAINING WALL

#### 5.2.1. Definition

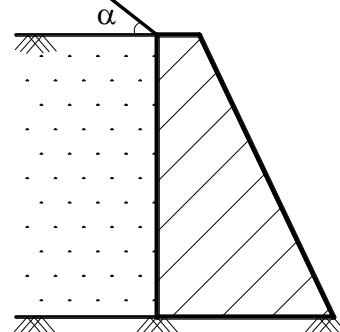
A masonry structure constructed to retain the earth is called retaining wall. The retained earth exerts pressure on the retaining wall is called earth pressure.

#### Types of retaining wall

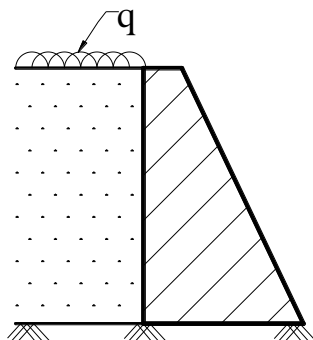
- a. Based on the cross section
  1. Rectangular section
  2. Trapezoidal section with vertical (or) inclined back.
- b. Based on the forms of back fill
  1. Retaining wall, earth level with top.
  2. Retaining wall, retaining earth surcharged soil.
  3. Retaining wall, retaining earth with surcharged load.
  4. Retaining wall retaining submerged soil.



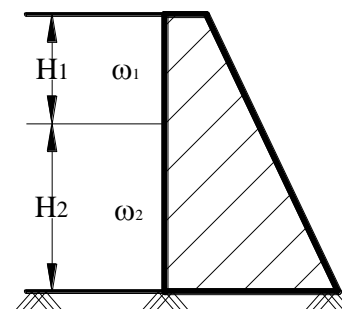
1) Retaining earth level with top



2) Retaining earth with surcharged soil



3) Retaining wall with surcharged load



4) Retaining earth with submerged soil

### 5.2.2. Angle of repose of soil ( $\phi$ )

Earth cannot be retained at a steeper slope, as it tends to slide and slip. The maximum natural slope at which the soil particles will rest permanently due to internal friction, without further slipping (or) sliding is called angle of repose of soil. It is denoted by  $\phi$ .

### 5.2.3. State of equilibrium of soil

#### 1. Elastic equilibrium of soil

A soil mass in the natural state of rest is said to be in the state of elastic equilibrium.

Let

$p_v$  = Vertical intensity of pressure.

$$p_v = \omega h$$

$p_H$  = Intensity of lateral earth pressure.

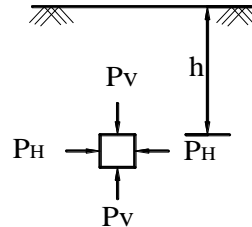
$$p_H = K_a \times p_v = K_a \times \omega h$$

Where

$K_a$  = Coefficient of earth pressure

$\omega$  = Specific weight of soil

$h$  = Depth of soil mass from free surface of earth.



#### 2. Plastic equilibrium of soil

When the soil mass is allowed to retained or contract laterally, until failure takes place, the soil is said to be in plastic equilibrium of soil. The failure will be shear failure and exert the pressure may active earth pressure or passive earth pressure.

### 5.2.4.1 Active earth pressure

The pressure exerted by the retained earth on the retaining wall is called active earth pressure. Due to this pressure retaining wall tend to move away from earth.

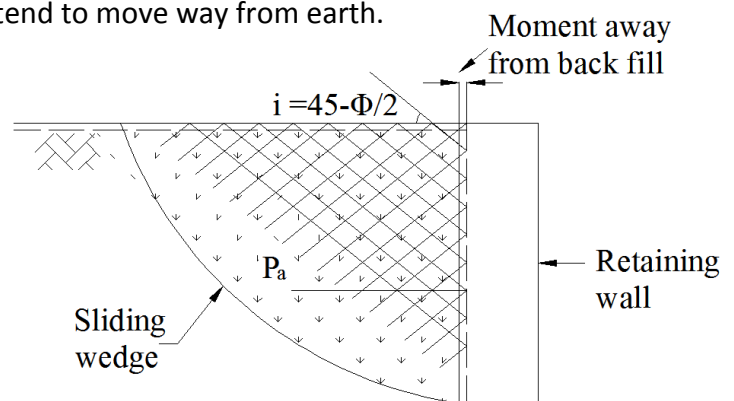
$p_a$  = Intensity of active earth pressure

$$p_a = K_a \times \omega \times H$$

Where

$$K_a = \left( \frac{1 - \sin \phi}{1 + \sin \phi} \right) = \tan^2 \left( 45 - \frac{\phi}{2} \right)$$

= coefficient of active earth pressure



### 5.2.4.1 Passive earth pressure.

The pressure exerted by the retaining wall (or) contract soil on the retained earth is called passive earth pressure. Due to this pressure retaining wall tend to move towards the earth. But it will happen rarely.

$P_p$  = The intensity of passive earth pressure

$$P_p = K_p \times \omega \times H$$

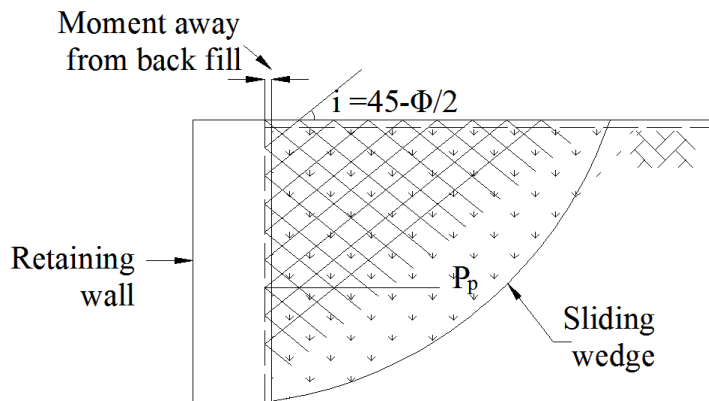
Where

$$K_p = \left( \frac{1 + \sin \phi}{1 - \sin \phi} \right) = \tan^2 \left( 45 + \frac{\phi}{2} \right)$$

= Coefficient of passive earth pressure

$\omega$  = Unit weight of earth

$H$  = Height of retaining walls



### 5.2.5. Rankine's theory of earth pressure.

Rankine's theory and Coulomb's theory of earth are available to determine the earth pressure on retaining walls.

British Engineer Prof. W.J. Rankine was given the theory of earth pressure in 1857.

### 5.2.6. Assumption made in theory of Rankine's earth pressure.

1. The retained soil mass is in the state of plastic equilibrium.
2. The retained soil mass is homogeneous, cohesionless.
3. The back of wall is smooth so that the frictional resistance between the wall and retained earth is negligible.
4. The retained soil surface is a straight line.
5. The failure of retained earth is by shear along a plane called rupture plane.

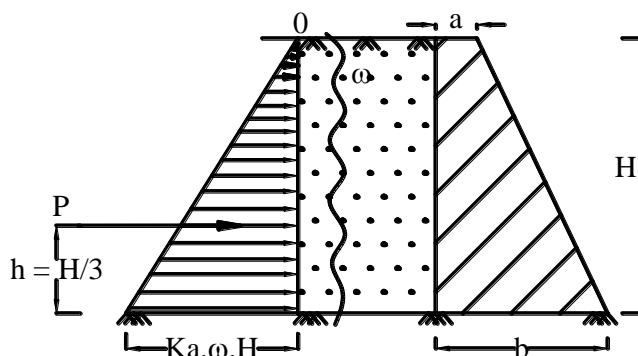
### 5.2.7. Rankine's lateral earth pressure on retaining wall

#### Case 1:

Retaining wall back fill level with top.

$P$  = Rankine's lateral earth pressure

$$P = K_a \frac{\omega H^2}{2}$$



i) Pressure Diagram

ii) Section

Where

$$K_a = \left( \frac{1 - \sin \phi}{1 + \sin \phi} \right) = \tan^2 \left( 45 - \frac{\phi}{2} \right)$$



= coefficient of active earth pressure

$\omega$  = specific weight of earth

$H$  = Height of retaining wall

$\phi$  = Angle of repose of soil

Total earth pressure  $P$  = Area of pressure diagram

$$P = \frac{1}{2} \times (K_a \cdot \omega \cdot H) \times H = \frac{K_a \omega H^2}{2}$$

$$P = K_a \omega H^2 / 2$$

This pressure will act at centre of gravity of pressure diagram.

ie at  $\bar{h}$  from base

$$\bar{h} = H/3$$

### Case 2:

#### Retaining wall back fill with surcharged soil

$\alpha$  = Angle of surcharge of soil

$\phi$  = Angle of repose of soil

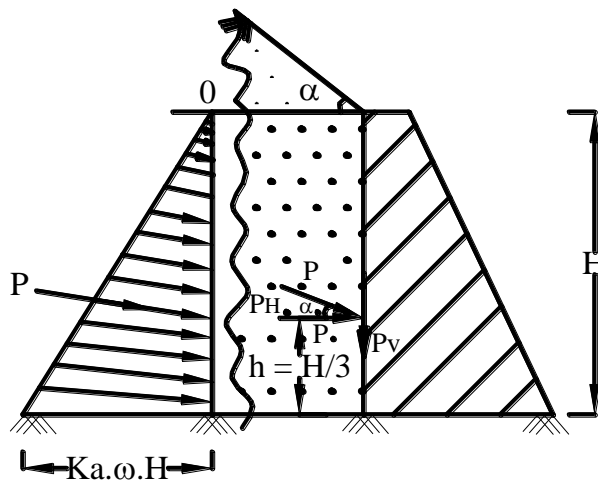
$\omega$  = Unit weight of earth

$H$  = Height of retaining wall

$$K_a = \cos \alpha \frac{\cos \alpha - \sqrt{\cos^2 \alpha - \cos^2 \phi}}{\cos \alpha + \sqrt{\cos^2 \alpha - \cos^2 \phi}}$$

= coefficient of active earth pressure

The lateral pressure will be parallel to the inclined earth surface.



i) Pressure Diagram

ii) Section

$$\text{Rankine's earth pressure } P = K_a \frac{\omega H^2}{2}$$

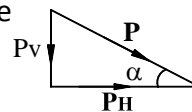
This pressure will act parallel to the inclined earth surface.

$P_H$  = Horizontal component of earth pressure

$P_H = P \times \cos \alpha$

This will act at  $\bar{h} = H/3$  from base.

$P_V$  = Vertical component of earth pressure



$$P_V = P \times \sin \alpha$$

This will act along the vertical face of the wall.

### Case 3:

#### Retaining wall with surcharged load

Let

$q$  = Intensity of uniform surcharged load (or) superimposed load over the retained earth.

$P$  = Total lateral earth pressure

$P = P_1 + P_2$

$P_1$  = Pressure due to surcharged load

$P_1$  = Area of pressure diagram of rectangle BCDE

$P_1 = (K_a \times q) \times H$

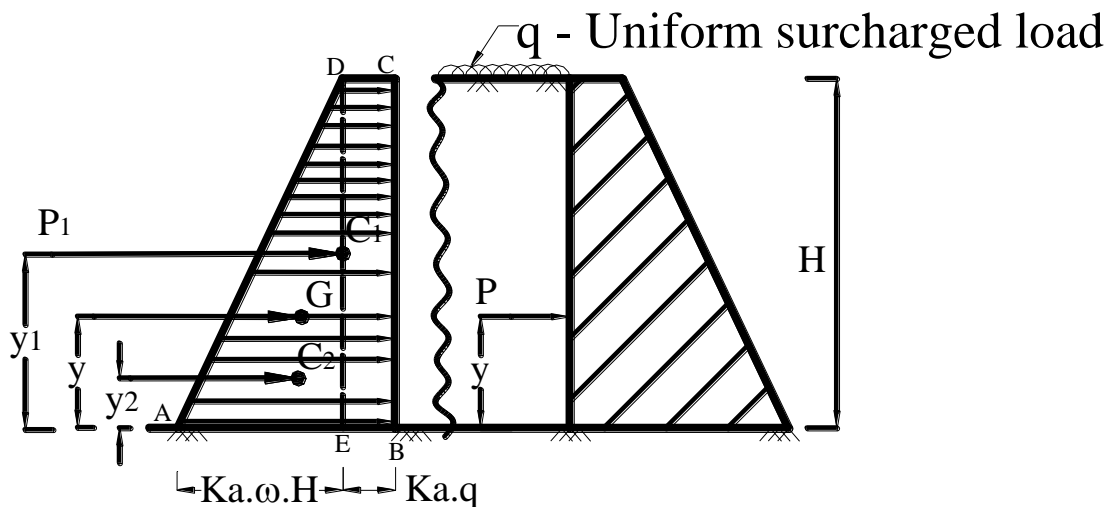
This will act at ' $y_1$ ' distance from base.

$$y_1 = \frac{H}{2}$$

$P_2$  = Pressure due to retained earth

$P_2$  = Area of pressure diagram of triangle ADE

$$P_2 = \frac{1}{2} \times (K_a \times \omega \cdot H) \times H = K_a \frac{\omega H^2}{2}$$



#### Pressure Diagram

#### Section

This pressure will act at  $y_2$  distance from base

$$y_2 = \frac{H}{3} \text{ distance from base.}$$

$P = (P_1 + P_2) = \text{resultant pressure}$

This will act at  $\bar{y}$  distance from base.

Taking moment about bottom of wall.

$$P \times \bar{y} = P_1 \times y_1 + P_2 \times y_2$$

$$\bar{y} = \frac{1}{P} (P_1 y_1 + P_2 y_2)$$

**Case 4:****Retaining wall with sub merged soil.**

When a part or entire depth of retained earth is submerged, the lateral pressure on the retaining wall is due to (i) Hydro static pressure (ii) Pressure due to dry earth (iii) Pressure due to the submerged weight of soil.

Let

$\omega_1$  = Specific weight of dry soil to a depth  $H_1$  from top.

$\omega_2$  = Specific weight of saturated soil to a depth  $H_2$  from bottom.

$\omega$  = 9.81 = Specific weight of water  $\text{kN/m}^3$ .

$\omega_{(\text{sub})}$  =  $(\omega_2 - \omega)$  = Specific weight of submerged soil (or buoyant weight)

$K_a$  =  $\left( \frac{1 - \sin \phi}{1 + \sin \phi} \right)$  = coefficient of active earth pressure

$P_1$  = Pressure due to top soil to a depth  $H_1$

$P_1$  = Area of pressure diagram of  $\Delta^{\text{le}}$  section

$P_1 = K_a \omega_1 H_1^2$

This will act at  $y_1$  distance from base  $y_1 = \left( H_2 + \frac{H_1}{3} \right)$

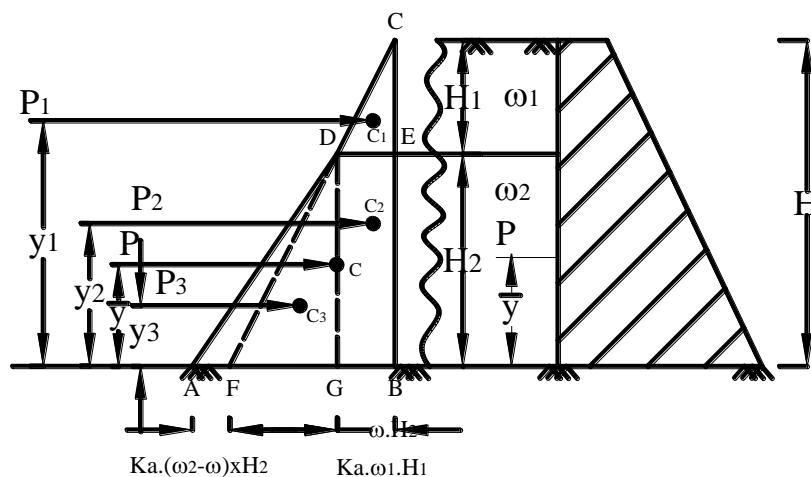
$P_2$  = Pressure due to top soil to a depth  $H_2$

$P_2$  = Area of pressure diagram of rectangular section

$P_2 = (K_a \omega_1 \times H_1) H_2$

This will act at ' $y_2$ ' distance from bottom.  $y_2 = \frac{H_2}{2}$

$P_3$  = Pressure due to hydrostatic fore (water) and submerged soil.



**Pressure Diagram**

**Section**

$$P_3 = \frac{1}{2} \times (\omega_{\text{water}} H_2 + K_a \omega_{\text{sub}} H_2) H$$

This pressure will act at ' $y_3$ ' distance from base.

$P = P_1 + P_2 + P_3$  (Total earth pressure)

This will act at  $\bar{y}$  distance from base.

Taking moment about base

$$P \times \bar{y} = (P_1 \cdot y_1 + P_2 \cdot y_2 + P_3 \cdot y_3)$$

$$\bar{y} = \frac{1}{P} (P_1 y_1 + P_2 y_2 + P_3 y_3)$$

### 5.2.8. Maximum and Minimum stress

Consider a trapezoidal section masonry retaining wall, retaining earth on its vertical face level with top as shown in fig.

Let

- a = Top width of wall
- b = Bottom width of wall
- H = Height of retaining wall
- $\gamma$  = Unit weight of masonry
- $\omega$  = Unit weight of soil
- $\phi$  = Angle of repose of soil

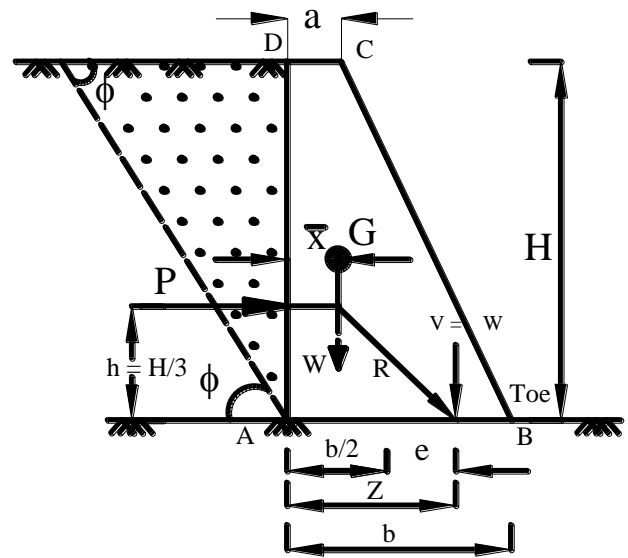
#### i. Weight of wall/m run (W)

$$W = \gamma \text{ volume} = \gamma \times \left( \frac{a+b}{2} \right) \times H \times 1$$

$$W = \gamma \times \left( \frac{a+b}{2} \right) \times H \quad \text{kN}$$

This will act at  $\bar{x}$  from vertical face.

$$\bar{x} = \frac{a^2 + ab + b^2}{3(a+b)}$$



#### Rankine's earth pressure/m (P)

$$P = K_a \frac{\omega H^2}{2}$$

Where

$$K_a = \left( \frac{1 - \sin \phi}{1 + \sin \phi} \right) = \tan^2 \left( 45 - \frac{\phi}{2} \right)$$

= coefficient of active earth pressure

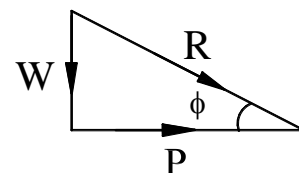
This will act at  $\bar{h}$  from base  $\bar{h} = \frac{H}{3}$

V = Total vertical force at the base

V = W.

R = Resultant thrust

$$R = \sqrt{V^2 + P^2} = \sqrt{W^2 + P^2}$$



$$[\therefore V = W]$$

#### Position of resultant thrust (Z)

Taking moment about Heel (A)

$$W \times Z = W \cdot \bar{x} + P \times \bar{h}$$

$$Z = \bar{x} + \left( \frac{P}{W} \right) \bar{h}$$

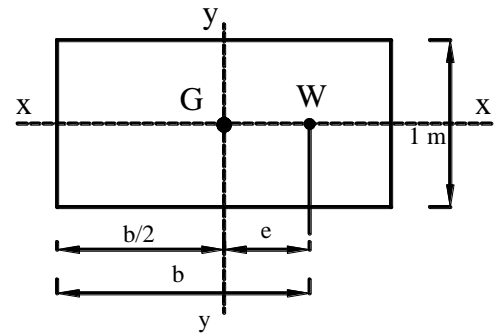
$e = (Z - \frac{b}{2}) = \text{eccentricity of resultant thrust}$

$M = (W \times e) = \text{moment due to eccentric force}$

Area  $A = b \times 1$

$$Z_y = \frac{I_{yy}}{x} = \frac{\left(\frac{db^3}{12}\right)}{\left(\frac{b}{2}\right)} = \frac{\left(1 \times \frac{b^3}{2}\right)}{b/2}$$

$$Z_y = \frac{b^2}{6}$$



### Stresses at base ( $\sigma$ )

$$\sigma_c = \frac{W}{A} = \text{Direct compressive stress due to weight of wall}$$

$$\sigma_b = \frac{M}{Z} = \frac{W \times e}{\frac{b^2}{6}} = \frac{6W \cdot e}{b^2} = \text{Bending}$$

$$\sigma = \sigma_c \pm \sigma_b = \text{Total stress at base}$$

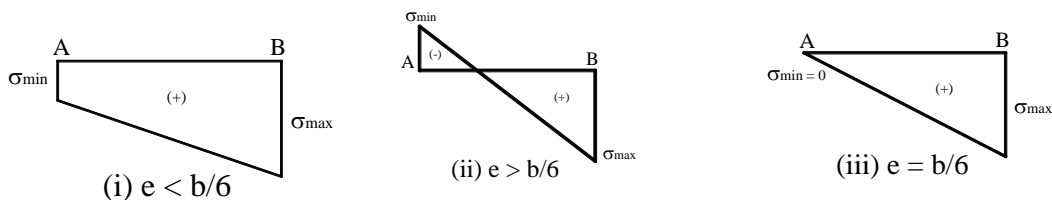
$$\sigma = \left( \frac{W}{(b \times 1)} \pm \frac{6W \cdot e}{b^2} \right) = \frac{W}{b} \left( 1 \pm \frac{6e}{b} \right)$$

$$\sigma_{\max} = \frac{W}{b} \left( 1 + \frac{6e}{b} \right) = \text{maximum stress at toe (B)}$$

$$\sigma_{\min} = \frac{W}{b} \left( 1 - \frac{6e}{b} \right) = \text{minimum stress at heel (A)}$$

### Stress distribution diagram

The value of maximum and minimum stresses are based on the eccentricity ( $e$ ) of vertical force at base as given below.



### 5.2.9. Stability of retaining wall

Causes of failures of retaining wall.

1. Tension at the base of wall
2. Sliding of wall along the base
3. Overturning of wall about toe.
4. Crushing of masonry at the base of wall.

### Stability of retaining wall

Following are the conditions of stability of wall.

#### i. To avoid tension at base

$$e < \frac{b}{6} \quad (\text{or}) \quad Z \leq \frac{2}{3} b$$

$$\sigma_{\min} \geq \left(1 - \frac{6e}{b}\right) \geq 0$$

ii. **To avoid sliding**

$$\text{F.S. (Sliding)} = \frac{\text{Total frictional force}}{\text{Horizontal force}} \geq 1.0$$

$$\text{F.S. (Sliding)} = \frac{\mu \times W}{P} \geq 1.0$$

for design purpose F.S.  $\geq 1.5$

iii. **To avoid overturning**

$$\text{F.S. (Overturning)} = \frac{\text{Balancing moment}}{\text{Overturning moment}} \geq 1.0$$

$$\text{F.S. (Overturning)} = \frac{W(b - \bar{x})}{P \times h} \geq 1.0$$

Design purpose FS = 1.5 to 2.00

iv. **To avoid crushing**

Maximum compressive stress should be less than allowable compressive stress. (Safe bearing capacity of soil)

$$\sigma_{\max} < \text{SBC of soil.}$$

## RETAINING WALL

### Problem 1

A trapezoidal masonry retaining wall 1m wide at top, 3m wide at its bottom is 8m high. It retaining earth having level with the top of the wall on its vertical face. Find the max. min stress intensities at the base of the wall. If wt. of masonry is  $24 \text{ kN/m}^3$  and earth is  $18 \text{ kN/m}^3$  the angle of repose of earth is  $40^\circ$ .

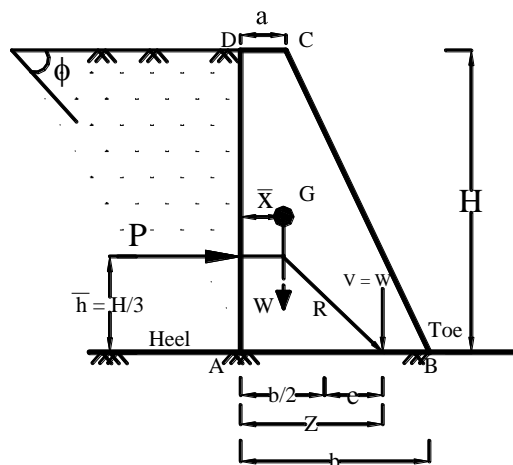
Given

$$\begin{aligned} a &= 1\text{m} \\ b &= 3\text{m} \\ H &= 8\text{m} \\ \gamma &= 24 \text{ kN/m}^3 \\ \omega &= 18 \text{ kN/m}^3 \\ \phi &= 40^\circ \end{aligned}$$

Required

$$\sigma = \frac{W}{b} \left(1 \pm \frac{6e}{b}\right) = ?$$

Solution



i. **Weight of wall per metre (W)**

$$W = \gamma \left( \frac{a+b}{2} \right) \times H = 24 \left( \frac{1+3}{2} \right) \times 8 = \boxed{W = 384 \text{ kN}}$$

This will act at  $\bar{x}$  distance from vertical face

$$\bar{x} = \frac{a^2 + ab + b^2}{3(a+b)} = \frac{1^2 + (1 \times 3) + 3^2}{3(1+3)} = \boxed{x = 1.08\text{m}}$$

## ii. Rankine's earth pressure per metre run (P)

$$P = Ka \cdot \left( \frac{\omega H^2}{2} \right)$$

$$Ka = \left( \frac{1 - \sin \phi}{1 + \sin \phi} \right) = \left( \frac{1 - \sin 40^\circ}{1 + \sin 40^\circ} \right) = 0.2174$$

$$P = 0.2174 \times \frac{18 \times 8^2}{2}$$

$$P = 125.25 \text{ kN}$$

This will act at a distance  $\bar{h}$  from base

$$\bar{h} = H/3 = 8/3$$

$$\bar{h} = 2.67 \text{ m}$$

## iii. Position of resultant thrust (R)

$$Z = \bar{x} + \frac{P}{W} \bar{h}$$

$$Z = 1.08 + \left[ \frac{125.25}{384} \times 2.67 \right] = Z = 1.95 \text{ m}$$

## Eccentricity (e)

$$e = Z - b/2 = (1.95 - 3/2) = e = 0.45$$

## Stress at base ( $\sigma$ )

$$\sigma = \frac{W}{b} \left( 1 \pm \frac{6e}{b} \right)$$

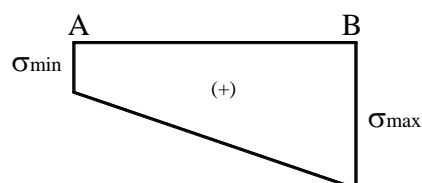
$$\sigma_{\max} = \frac{W}{b} \left( 1 + \frac{6e}{b} \right) \text{ at toe} = \frac{384}{3} \left( 1 + \frac{6 \times 0.45}{3} \right)$$

$$(\text{Compression}) = 243.2 \text{ kN/m}^2$$

$$\sigma_{\min} = \frac{w}{b} \left( 1 - \frac{6e}{b} \right) = \frac{384}{3} \left( 1 - \frac{6 \times 0.45}{3} \right) (\text{Compression})$$

$$\sigma_{\min} = 12.8 \text{ kN/m}^2$$

## Stress diagram



## Problem 2

A retaining wall 1m wide at top 3m wide at base 6m high retains earth on its vertical face leveled with top unit wt. of masonry and earth are  $23 \text{ kN/m}^3$  and  $18 \text{ kN/m}^3$  respectively. Determine

- Rankine's earth pressure 1m run
- Resultant thrust
- Stresses at the base
- Check the stability of wall

Take  $\mu = 0.6$ , max allowable stress =  $300 \text{ kN/m}^2$  the angle of repose of soil is  $30^\circ$ .

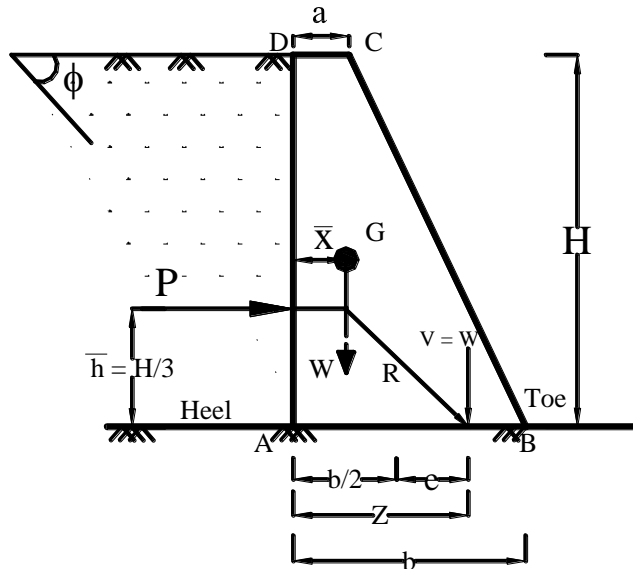
### Given

$$\begin{aligned} a &= 1\text{m} \\ b &= 3\text{m} \\ H &= 6\text{m} \\ \gamma &= 23 \text{ kN/m}^3 \\ \omega &= 18 \text{ kN/m}^3 \\ \phi &= 30^\circ \\ \mu &= 0.6 \\ \text{SBC} &= 300 \text{ kN/m}^2 \end{aligned}$$

### Required

$$\sigma = \frac{w}{b} \left( 1 \pm \frac{6e}{b} \right)$$

### Solution



#### i. Weight of wall 1m (w)

$$W = \gamma \left( \frac{a+b}{2} \right) H = 23 \times \left( \frac{1+3}{2} \right) \times 6$$

$$W = 276 \text{ kN}$$

$$\bar{x} = \frac{a^2 + ab + b^2}{3(a+b)} = \frac{1^2 + (1 \times 3) + 3^2}{3(1+3)}$$

$$\bar{x} = 1.08\text{m}$$

#### ii. Rankine's earth pressure per metre (P)

$$P = K_a \cdot \left( \frac{\omega H^2}{2} \right)$$

$$K_a = \left( \frac{1 - \sin \phi}{1 + \sin \phi} \right) = \left( \frac{1 - \sin 30^\circ}{1 + \sin 30^\circ} \right) = 0.333$$

$$P = 0.333 \times \frac{18 \times 6^2}{2}$$

$$P = 108 \text{ kN}$$

This will act at a distance  $\bar{h}$  from base

$$\bar{h} = H/3 = 6/3$$

$$\bar{h} = 2\text{m}$$



**Resultant earth pressure (R)**

$$R = \sqrt{W^2 + P^2} = \sqrt{276^2 + 108^2}$$

$$R = 296.38 \text{ kN}$$

**Position of Resultant pressure (Z)**

$$Z = \bar{x} + \frac{P}{W} \bar{h} = 1.08 + \frac{108}{276} \times 2$$

$$Z = 1.86 \text{ m}$$

**Eccentricity (e)**

$$e = Z - b/2 = 1.86 - 3/2$$

$$e = 0.36 \text{ m}$$

**Stress at base**

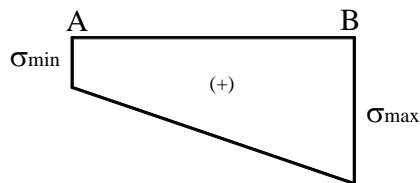
$$\sigma = \frac{W}{b} \left( 1 \pm \frac{6e}{b} \right)$$

$$\sigma_{\max} = \frac{W}{b} \left( 1 + \frac{6e}{b} \right) = \frac{276}{3} \left( 1 + \frac{6 \times 0.36}{3} \right) \text{ at toe}$$

$$\sigma_{\max} = 158.24 \text{ kN/m}^2 \quad (\text{Compression})$$

$$\sigma_{\min} = \frac{W}{b} \left( 1 - \frac{6e}{b} \right) = \frac{276}{3} \left( 1 - \frac{6 \times 0.36}{3} \right) \text{ at heel}$$

$$\sigma_{\min} = 25.76 \text{ kN/m}^2 \quad (\text{Compression})$$

**Stress diagram****Check the stability of wall****i. To avoid tension**

$$\sigma_{\min} \geq 0 \quad (\text{or}) \quad e \leq b/6 \quad (\text{or}) \quad z \leq 2/3 b$$

$$e = 0.36 \text{ m}$$

$$b/6 = 3/6 = 0.5 \text{ m}$$

$$e < b/6 \quad (\text{Safe})$$

Hence tension will not be developed at base

**iii. To avoid sliding**

$$\text{F.S.} = \frac{\mu W}{P} \geq 1.0$$

$$\text{F.S. (Sliding)} = \frac{0.6 \times 276}{108} = 1.53$$

$1.53 \geq 1.0$  ; Hence safe against sliding.

**iii. To avoid failure from crushing**

$$\text{SBC} > \sigma_{\max}$$

$$\text{SBC} = 300 \text{ kN/m}^2$$

$$\sigma_{\max} = 158.24 \text{ kN/m}^2$$

$$\text{SBC} > \sigma_{\max} \quad (\text{Hence safe})$$

**iv. To avoid over turning**

$$\text{F.S.} = \frac{W(b - \bar{x})}{Ph} = 1.0$$

$$\text{F.S.} = \frac{276(3 - 1.08)}{108 \times 2} = 2.45 > 1.0 \text{ (Hence Safe)}$$

Hence safe against over turning.

**Problem 3**

A retaining wall 1m wide at top 6m high retains earth on its vertical face level with top. The unit wt. of masonry and earth are 23 kN/m<sup>3</sup> and 16 kN/m<sup>3</sup> respectively. Determine the min. base width required to avoid.

i) Tension and ii) Sliding F.S. against sliding = 1.5

The angle of repose of soil is 30°, Take  $\mu = 0.6$

**Given**

$$\begin{aligned} a &= 1\text{m} \\ H &= 6\text{m} \\ \mu &= 0.6 \\ \gamma &= 23\text{ kN/m}^3 \\ \omega &= 16\text{ kN/m}^3 \\ \phi &= 30^\circ \end{aligned}$$

**Required**

$$b = ?$$

**Solution**

**i. Weight of wall per metre (W)**

$$W = \gamma \left( \frac{a+b}{2} \right) H = 23 \left( \frac{1+b}{2} \right) \times 6$$

$$\boxed{w = 69(1+b) \text{ kN}} \quad \dots\dots\dots (1)$$

$$\bar{x} = \frac{a^2 + ab + b^2}{3(a+b)} = \frac{1^2 + 1 \times b + b^2}{3(1+b)}$$

$$\dots\dots\dots \bar{x} = \frac{1+b+b^2}{3(1+b)} \quad \boxed{(2)}$$

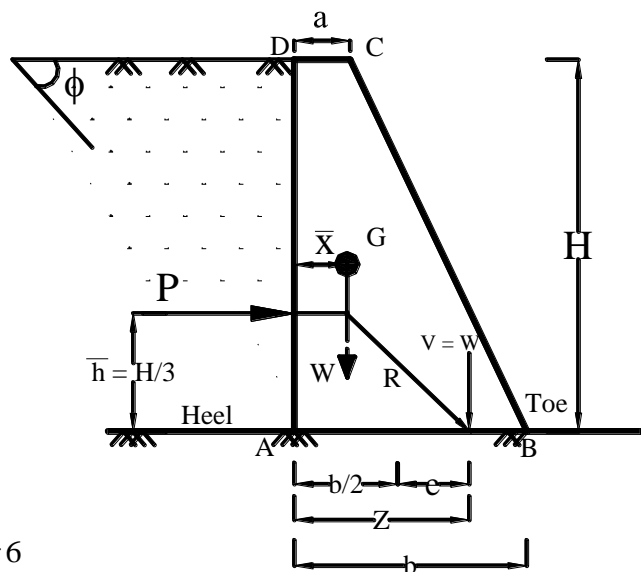
**ii. Rankine's earth pressure (P)**

$$P = Ka \cdot \left( \frac{\omega H^2}{2} \right)$$

$$Ka = \left( \frac{1 - \sin \phi}{1 + \sin \phi} \right) = \left( \frac{1 - \sin 30^\circ}{1 + \sin 30^\circ} \right) = 0.333$$

$$P = 0.333 \times \frac{16 \times 6^2}{2}$$

$$\boxed{P = 96 \text{ kN}}$$



### iii. Position of Resultant pressure (Z)

$$\begin{aligned}
 Z &= \bar{x} + \frac{P}{W} \bar{h} = \frac{1+b+b^2}{3(1+b)} + \frac{96}{69(1+b)} \times \frac{6}{3} \\
 &= \frac{1+b+b^2}{3(1+b)} + \frac{0.348}{3(1+b)} = \frac{b^2+b^1+1+8.348}{3(1+b)}
 \end{aligned}$$

$$Z = \frac{b^2+b^1+9.348}{3(1+b)}$$

### Maximum base width required (b)

#### a) To avoid tension

$$Z \leq \frac{2}{3} b$$

$$\frac{2}{3} b = \frac{b^2+b+9.348}{3(1+b)}$$

$$2b(1+b) = b^2+b+9.348$$

$$2b+2b^2 = b^2+b+9.348$$

$$b^2+b-9.348=0$$

$$b = \frac{-1 \pm \sqrt{1^2 - 4 \times 1 \times (-9.348)}}{2}$$

$$b_1 = 2.6\text{m}$$

#### b) To avoid sliding

$$\text{F.S} = \frac{\mu W}{P} \geq 1.5$$

$$\frac{0.6 \times 69(1+b)}{96} = 1.5$$

$$1+b = \frac{96}{0.6 \times 69} \times 1.5 = 3.48$$

$$b = 3.48 - 1$$

$$b_2 = 2.48 \text{ m}$$

Minimum base width = Maximum of  $b_1$  &  $b_2$

### Result

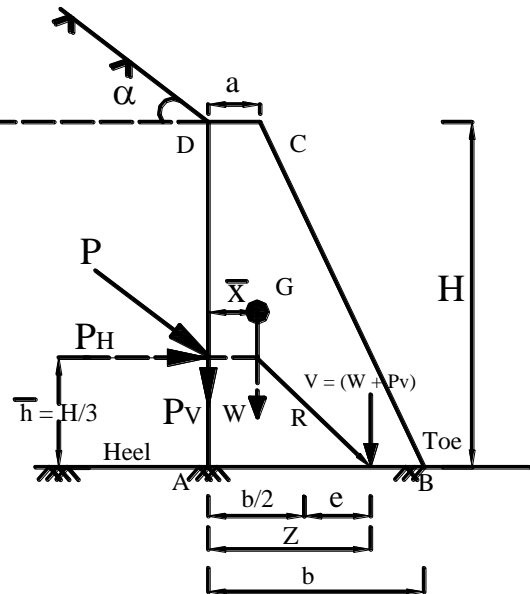
Minimum base width required (b) = 2.6m

### Problem 4

A masonry retaining wall of trapezoidal section with a vertical face of 1m wide at top and 3m wide at bottom with a height of 6m. It retains sand over the entire height with an angle of surcharge  $20^\circ$ . Determine the stress intensities at the base of the wall. The sand wt. is  $18\text{kN/m}^3$  and an angle of repose of soil is  $30^\circ$ . The masonry wt. of  $24\text{kN/m}^3$ .

**Given**

Top width	a	= 1m
Bottom width	b	= 3m
Height	H	= 6m
Angle of surcharge	$\alpha$	= 20°
Angle of repose of soil	$\phi$	= 30°
Weight of masonry	$\gamma$	= 24 kN/m <sup>3</sup>
Weight of soil	$\omega$	= 18 kN/m <sup>3</sup>

**Required**

$$\sigma = \frac{V}{b} \left( 1 \pm \frac{6e}{b} \right)$$

**Solution****i. Weight of wall run per metre run (W)**

$$W = \gamma \left( \frac{a+b}{2} \right) H = 24 \left( \frac{1+3}{2} \right) 6$$

$$W = 288 \text{ kN}$$

$$\bar{x} = \frac{a^2 + ab + b^2}{3(a+b)} = \frac{1^2 + (1 \times 3) + 3^2}{3(1+3)}$$

$$\bar{x} = 1.08 \text{ m}$$

**ii. Rankines earth pressure per metre run (P)**

$$P = K_a \times \left( \frac{\omega H^2}{2} \right)$$

$$K_a = \left( \frac{\cos \alpha - \sqrt{\cos^2 \alpha - \cos^2 \phi}}{\cos \alpha + \sqrt{\cos^2 \alpha - \cos^2 \phi}} \right)$$

$$K_a = \left( \frac{\cos 20^\circ - \sqrt{\cos^2 20^\circ - \cos^2 30^\circ}}{\cos 20^\circ + \sqrt{\cos^2 20^\circ - \cos^2 30^\circ}} \right)$$

$$K_a = 0.9397 \times \frac{0.9397 - \sqrt{0.9930 - 0.75}}{0.9397 + \sqrt{0.883 - 0.75}}$$

$$K_a = 0.9397 \times \left( \frac{0.9397 - 0.3647}{0.9397 + 0.3647} \right) = 0.9397 \times \frac{0.575}{1.3044}$$

$$K_a = 0.414$$

$$P = K_a \times \omega \frac{H^2}{2} = 0.414 \times 18 \times \frac{6^2}{2} = 134.14 \text{ kN}$$

$$P_v = \text{Vertical component of earth pressure}$$

$$P_v = P \times \sin \alpha = 134.14 \times \sin 20^\circ = 45.88 \text{ kN}$$

$$P_v = 45.88 \text{ kN}$$

**This will act along the vertical face of wall**

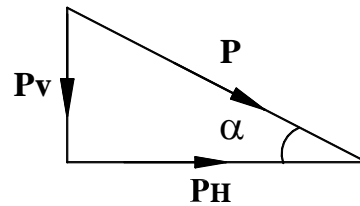
$P_H$  = Horizontal component of earth pressure

$P_H = P \times \cos \alpha$

This will act at  $\bar{h}$  distance from base.

$$\bar{h} = \frac{H}{3} = \frac{6}{3} = 2\text{m}$$

$$\boxed{\bar{h} = 2\text{m}}$$



**Total vertical force (V)**

$$V = W + P_V = (288 + 45.88) = 333.88 \text{ kN}$$

$$V = 333.88 \text{ kN}$$

**Resultant thrust per metre run (R)**

$$R = \sqrt{V^2 + P_H^2} = \sqrt{333.88^2 + 126^2}$$

$$R = 356.86 \text{ kN}$$

This resultant pressure will hit the base at 'Z' distance from vertical face.

**Position of resultant thrust (Z)**

Taking moment about A (heel)

$$V \times Z = (W \times \bar{x}) + (P_H \times \bar{h}) + (P_V \times 0)$$

$$Z = \frac{1}{V} (W \times \bar{x} + P_H \times \bar{h})$$

$$Z = \frac{1}{333.88} ((288 \times 1.08) + (126 \times 3))$$

$$Z = 1.60\text{m}$$

$$\text{Eccentricity } e = (Z - \frac{b}{2}) = \left(1.60 - \frac{3}{2}\right) = 0.1\text{m}$$

**Stress intensities at the base ( $\sigma$ )**

$$\sigma = \frac{V}{b} \left(1 \pm \frac{6e}{b}\right)$$

$$\sigma_{\max} = \frac{V}{b} \left(1 \pm \frac{6e}{b}\right) \text{ at toe (B)}$$

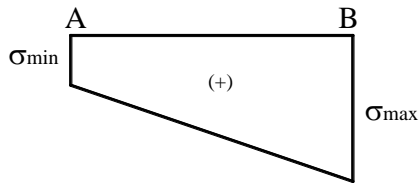
$$\sigma_{\max} = \frac{333.88}{3} \left(1 + \frac{6 \times 0.1}{3}\right) = 133.55 \text{ kN/m}^2 \text{ (Comp.)}$$

$$\sigma_{\min} = \frac{V}{b} \left(1 \pm \frac{6e}{b}\right) \text{ at heel (A)}$$

$$\sigma_{\min} = \frac{333.88}{3} \left(1 + \frac{6 \times 0.1}{3}\right)$$

$$\sigma_{\min} = 89.03 \text{ kN/m}^2 \text{ (Comp.)}$$

## Stress diagram



### Problem 5

A retaining wall 1.5m wide at top 4m wide at base and 8m high retains earth on its vertical face with surcharge of 15° and angle of repose of 30° unit wt. of masonry and earth are 23 kN/m<sup>3</sup> and 18 kN/m<sup>3</sup> of the respectively. Determine

- Rankine's earth pressure
- Stress intensities at base
- Check the stability of wall

for tension sliding, overturning and crushing,

Take  $\mu = 0.6$ , maximum allowable stress = 300 kN/m<sup>2</sup>

#### Given

Top width	a	= 1.5m
Bottom width	b	= 4m
Height	H	= 8m
Angle of repose of soil	$\phi$	= 30°
Weight of masonry	$\gamma$	= 23 kN/m <sup>3</sup>
Weight of soil	$\omega$	= 18 kN/m <sup>3</sup>
	$\mu$	= 0.6
Maximum allowable stress		= 300 kN/m <sup>2</sup>
Angle of repose	$\alpha$	= 15°

#### Required

$$i) \quad \sigma = \frac{V}{b} \left( 1 \pm \frac{6e}{b} \right)$$

- Check for the stability.

#### Solution

##### i. Weight of wall per metre run (W)

$$W = \gamma \left( \frac{a+b}{2} \right) H = 23 \left( \frac{1.5+4}{2} \right) 8$$

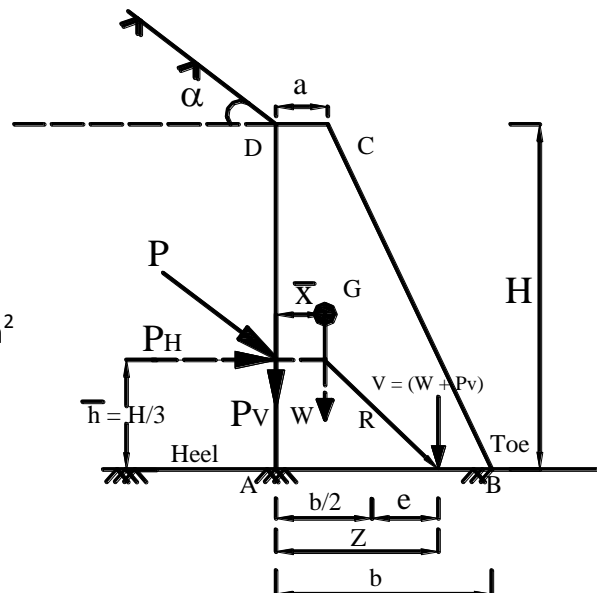
$$W = 506 \text{ kN}$$

$$\bar{x} = \frac{a^2 + ab + b^2}{3(a+b)} = \frac{1.5^2 + (1.5 \times 4) + 4^2}{3(1.5+4)}$$

$$\bar{x} = 1.47 \text{ m}$$

##### ii. Rankine's earth pressure per metre run (P)

$$K_a = (\cos \alpha) \left( \frac{\cos \alpha - \sqrt{\cos^2 \alpha - \cos^2 \phi}}{\cos \alpha + \sqrt{\cos^2 \alpha - \cos^2 \phi}} \right)$$



$$K_a = (\cos 15^\circ) \left( \frac{\cos 15^\circ - \sqrt{\cos^2 15^\circ - \cos^2 30^\circ}}{\cos 15^\circ + \sqrt{\cos^2 15^\circ - \cos^2 30^\circ}} \right)$$

$$K_a = 0.9659 \times \frac{0.9659 - \sqrt{0.933 - 0.75}}{0.9659 + \sqrt{0.933 - 0.75}}$$

$$K_a = 0.9659 \times \left( \frac{0.9659 - 0.4277}{0.9659 + 0.4277} \right) = 0.9659 \times \frac{0.5382}{1.3936}$$

$$K_a = 0.373$$

$$P = K_a \times \frac{\omega H^2}{2} = 0.373 \times \left( \frac{18 \times 8^2}{2} \right)$$

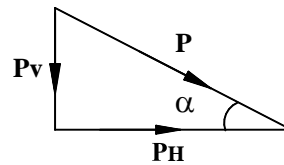
$$P = 214.86 \text{ kN}$$

$P_V$  = Vertical component of earth pressure

$$P_V = P \times \sin \alpha$$

$$= 214.86 \times \sin 15^\circ$$

$$\boxed{P_V = 55.60 \text{ kN}}$$



This will act along the vertical face of wall.

$P_H$  = Horizontal component of earth pressure

$$P_H = P \cos \alpha$$

$$P_V = 214.86 \times \cos 15^\circ$$

$$\boxed{P_H = 207.54 \text{ kN}}$$

This will act as  $\bar{h}$  from base.

$$\bar{h} = \frac{H}{3} = \frac{8}{3} = 2.67$$

$$\boxed{\bar{h} = 2.67}$$

**Total vertical force (V)**

$$V = W + P_V = 506 + 55.60$$

$$\boxed{V = 561.60 \text{ kN}}$$

**Resultant thrust (R)**

$$R = \sqrt{V^2 + P_H^2} = \sqrt{561.60^2 + P_H^2}$$

$$\boxed{R = 598.72 \text{ kN}}$$

**Position of resultant thrust (Z)**

Taking moment about A.

$$Z = \frac{1}{V} [W \bar{x} + (P_H \bar{h}) + (P_V \times 0)] = \frac{1}{V} [W \bar{x} + P_H \bar{h} + (P_V \times 0)]$$

$$Z = \frac{1}{561.60} (560 \times 1.47 + 207.54 \times 2.67)$$

$$\boxed{Z = 2.31 \text{ m}}$$

### Eccentricity (e)

$$e = Z - \frac{b}{2} = 2.45 - \frac{4}{2}$$

$$e = 0.45\text{m}$$

### Stresses at base ( $\sigma$ )

$$\sigma = \frac{V}{b} \left( 1 \pm \frac{6e}{b} \right)$$

$$\sigma_{\max} = \frac{V}{b} \left( 1 + \frac{6e}{b} \right) \text{ at toe (B)}$$

$$\sigma_{\max} = \frac{561.60}{4} \left( 1 + \frac{6 \times 0.45}{4} \right) \text{ at toe}$$

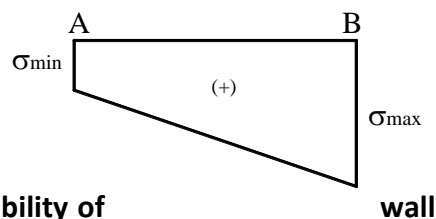
$$\sigma_{\max} = 235.08 \text{ kN/m}^2 \text{ (Comp.)}$$

$$\sigma_{\min} = \frac{V}{b} \left( 1 - \frac{6e}{b} \right) \text{ at heel (A)}$$

$$= \frac{561.60}{4} \left( 1 - \frac{6 \times 0.45}{4} \right)$$

$$\sigma_{\min} = 45.63 \text{ kN/m}^2 \text{ (Comp.)}$$

### Stress diagram



### Check the stability of

#### (i) To avoid tension at base

$$\sigma_{\min} \geq 0$$

$$e \leq \frac{b}{6} \quad (\text{or}) \quad Z \leq \frac{2}{3} b$$

$$e = 0.45 \text{ m}$$

$$\frac{b}{6} = \frac{4}{6} = 0.67 \text{ m}$$

$$e < \frac{b}{6}$$

Hence safe against tension.

#### (ii) F.S. against sliding

$$\text{F.S.} = \frac{\mu V}{P_H} \geq 1.0$$

$$= \frac{0.6 \times 561.60}{207.54}$$

$$= 1.62 > 1.0 \text{ (Safe)}$$

Hence safe against sliding.



**(iii) F.S. against overturning**

$$\text{F.S.} = \frac{V(b - \bar{x})}{P_H \bar{h}} = \frac{561.60(4 - 1.47)}{207.54 \times 2.67}$$

$$\text{F.S.} = 2.56 > 1.0 \text{ Safe.}$$

Hence safe against overturning.

**(iv) To avoid crushing**

$$\text{SBC} > \sigma_{\max}$$

$$360 > 235.08 \text{ kN/m}^2 \text{ (Safe)}$$

Hence safe against crushing.

**Problem 6**

A trapezoidal section retaining wall 2m wide at top, 4m wide at base and 6m high retains earth level with top. The retained earth which transmits a uniform surcharged load 60 kN/m<sup>2</sup>. The angle of repose of soil is 30°. The unit weight of masonry and earth are 24 kN/m<sup>3</sup> and 18 kN/m<sup>3</sup> respectively, calculate the magnitude and position of line of action and position of line of action of horizontal earth pressure per meter length of wall.

**Given**

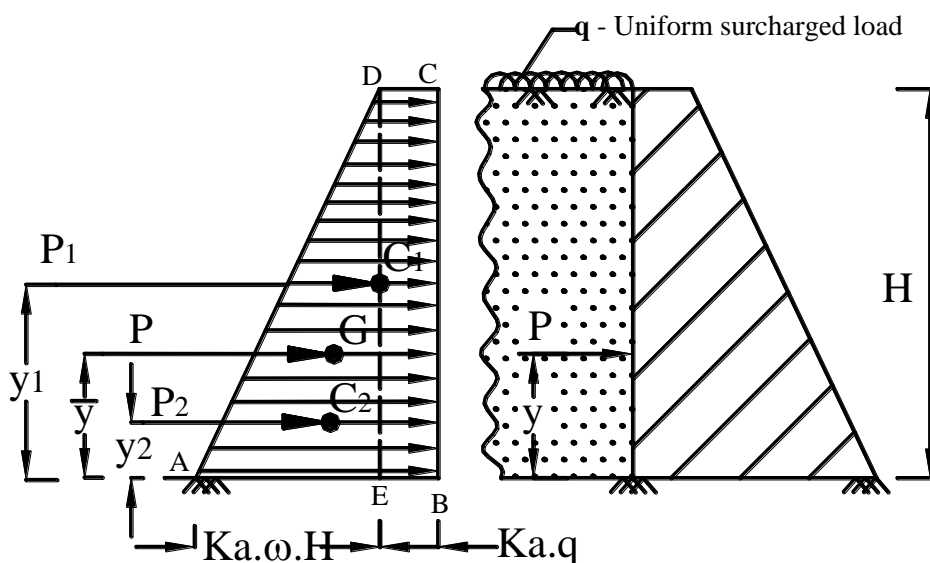
Top width	a	= 2m
Bottom width	b	= 4m
Height	H	= 6m
Uniform surcharged load	q	= 60 kN/m <sup>2</sup>
Angle of repose of soil	φ	= 30°
Specific weight of masonry	γ	= 24 kN/m <sup>3</sup>
Specific weight of earth	ω	= 18 kN/m <sup>3</sup>

**Required**

- Horizontal pressure  $P = ?$
- Position of horizontal pressure  $\bar{y} = ?$

**Solution**

Draw pressure diagram as shown in fig.



**i. Coefficient of active earth pressure ( $K_a$ )**

$$K_a = \frac{1 - \sin \phi}{1 + \sin \phi} = \left( \frac{1 - \sin 30}{1 + \sin 30} \right) = 0.333$$

**Horizontal earth pressure/m run ( $P$ )**

$$P = P_1 + P_2$$

$P_1$  = Pressure due to surcharged load

$P_1$  = Area of rectangle BCDE

$$P_1 = (K_a \times q) \times H = 0.333 \times 60 \times 6 = 120 \text{ kN}$$

This will act at  $y_1$  distance from base.

$$y_1 = \frac{H}{2} = \frac{6}{2} = 3\text{m}$$

$P_2$  = Pressure due to retained earth

$P_2$  = Area of triangle AED

$$P_2 = \frac{1}{2} \times (K_a \times \omega \times H) \times H = \frac{1}{2} (0.333 \times 18 \times 6) \times 6$$

$$P_2 = 108 \text{ kN}$$

This will act at  $y_2$  distance from base.

$$y_2 = \frac{H}{3} = \frac{6}{3} = 2\text{m}$$

$$\text{Total horizontal pressure } P = P_1 + P_2 = (120 + 108) = 228 \text{ kN.}$$

This pressure will act at  $\bar{y}$  distance from bottom.

**Position of horizontal earth pressure (from base  $\bar{y}$ )**

Taking moment about bottom of wall.

$$P \times \bar{y} = P_1 y_1 + P_2 y_2$$

$$\bar{y} = \frac{1}{P} (P_1 y_1 + P_2 y_2) = \frac{1}{228} (120 \times 3 + 108 \times 2)$$

$$\bar{y} = 2.52\text{m from base}$$

**Result**

$$P = 228 \text{ kN}$$

$$\bar{y} = 2.52\text{m}$$

**Problem 7**

A trapezoidal retaining wall of 6m height is 2 metre wide at top 4 m wide at its bottom. It retains earth on its vertical face to its full height. The bottom layer of soil of 1.5m height is fully submerged in water, check the stability of the wall against overturning. If the unit weights of dry soil, wet soil and masonry are  $16 \text{ kN/m}^3$ ,  $19 \text{ kN/m}^3$  and  $23 \text{ kN/m}^3$  respectively and angle of repose of soil is  $30^\circ$ . Take unit weight of water  $10 \text{ kN/m}^3$ . (Oct. 2009)

**Given**

$$\text{Top width } a = 2\text{m}$$

$$\text{Bottom width } b = 4\text{m}$$

$$\text{Height } H = 6\text{m}$$

$$H_2 = 1.5\text{m}$$

$$H_1 = (6 - 1.5) = 4.5\text{m}$$

$$\omega_1 = 16 \text{ kN/m}^3$$

$$\omega_2 = 19 \text{ kN/m}^3$$

$$\text{Weight of masonry } \gamma = 23 \text{ kN/m}^3$$

$$\omega_{(\text{water})} = 10 \text{ kN/m}^3$$

$$\phi = 30^\circ$$

$$\text{Unit weight of submerged soil } \omega_{(\text{sub})} = (\omega_2 - \omega_{\text{water}})$$

$$\omega_{(\text{sub})} = (19 - 10) = 9 \text{ kN/m}^3$$

### Required

Check the stability

### Solution

Consider one metre length of wall.

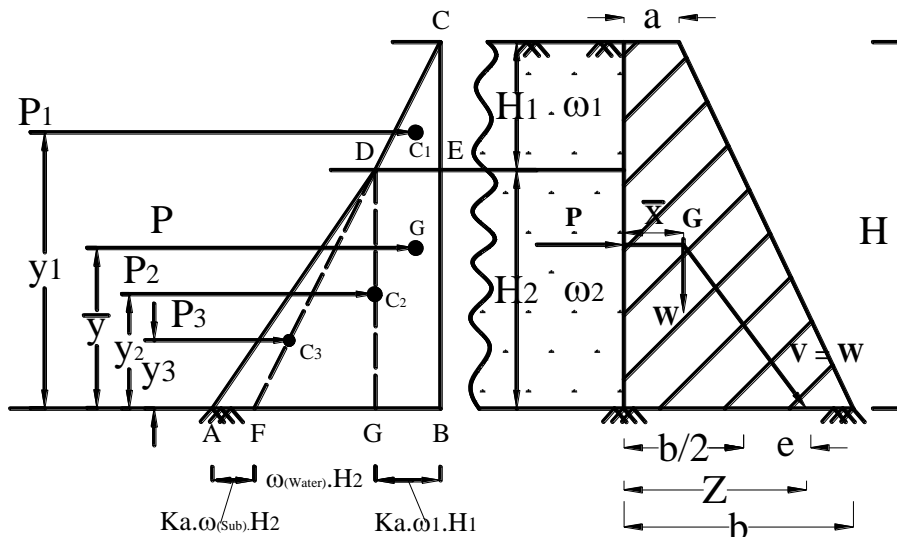
#### i. Weight of wall/m run (W)

$$W = \gamma \left( \frac{(a+b)}{2} \times H \right) = \frac{23(2+4)}{2} \times 6 = 414 \text{ kN}$$

This will act at a distance  $\bar{x}$  from Vertical face

$$\bar{x} = \frac{a^2 + ab + b^2}{3(a+b)} = \frac{2^2 + (2 \times 4) + 4^2}{3(2+4)} = 1.55 \text{ m}$$

Draw pressure diagram as shown in fig.



$$K_a = \frac{(1 - \sin \phi)}{(1 + \sin \phi)} = \frac{1 - \sin 30}{1 + \sin 30} = \frac{1/3}{1} = 0.333$$

Pressure Diagram

Section

$$\begin{aligned} \text{Intensity of pressure due to top soil to a depth of } (H_1) &= K_a \times \omega_1 H_1 \\ &= (0.333 \times 16 \times 4.5) = 24 \text{ kN/m}^2 \end{aligned}$$

$$\begin{aligned} \text{Intensity of pressure due to water to a depth of } (H_2) &= \omega_{\text{water}} \times H_2 \\ &= 10 \times 1.5 = 15 \text{ kN/m}^2 \end{aligned}$$

$$\begin{aligned} \text{Intensity of pressure due to submerged soil} &= K_a \times \omega_{(\text{sub})} \times H_2 \\ &= 0.33 \times 9 \times 1.5 = 4.5 \text{ kN/m}^2 \end{aligned}$$

#### i. Total horizontal pressure/m run (P)

$$P = P_1 + P_2 + P_3$$

$$P_1 = \text{Pressure due to top soil to a depth 'H}_1\text{'}$$

$$= \text{Area of } \Delta^{ce} \text{ CDE} = \frac{1}{2} \times (K_a \times \omega_1 H_1) H_1$$

$$P_1 = \left( \frac{1}{2} \times 24 \times 4.5 \right) = 54 \text{ kN}$$

This will act at  $y_1$  distance from base.

$$y_1 = \left( H_2 + \frac{H_1}{3} \right) = 1.5 + \left( \frac{4.5}{3} \right) = 3.0 \text{ m}$$

$$P_2 = \text{Pressure due to top soil to a depth } H_2$$

= Area of rectangle BCEF

$$= (K_a \omega_1 H_1) \times H_2 = 24 \times 1.5 = 36 \text{ kN}$$

This will act at a depth  $y_2$  from base

$$y_2 = \frac{H_2}{2} = \frac{4.5}{2} = 2.25 \text{ m}$$

$$P_3 = \text{Pressure due to water and due to submerged soil}$$

= Area of triangle AFE

$$= \frac{1}{2} \times (K_a \times \omega_{\text{sub}} \times H_2 + \omega_{\text{water}} \times H_2)$$

$$= \frac{1}{2} [(0.333 \times 9 \times 1.5) + (10 \times 1.5)] \times 1.5$$

$$P_3 = \frac{1}{2} (4.5 + 15) \times 1.5 = 14.625 \text{ kN}$$

This will act at ' $y_3$ ' distance from base

$$y_3 = \frac{H_2}{3} = \frac{1.5}{3} = 0.5 \text{ m}$$

$$\therefore P = P_1 + P_2 + P_3 = (54 + 36 + 14.625) = 104.625 \text{ kN}$$

This total horizontal pressure will act at  $\bar{y}$  from base.

Taking moment about bottom

$$P \times \bar{y} = (P_1 y_1 + P_2 y_2 + P_3 y_3)$$

$$104.625 \bar{y} = (54 \times 3) + (36 \times 2.25) + (14.625 \times 0.5) = 250.31$$

$$\bar{y} = \left( \frac{250.31}{104.62} \right) = 2.39 \text{ m}$$

### iii. Position of resultant thrust (Z)

$$Z = \bar{x} + \frac{P}{W} \times \bar{y}$$

$$Z = 1.55 + \left( \frac{104.625}{414} \right) \times 2.39 = 2.15 \text{ m}$$

$$\text{Eccentricity } e = \left( Z - \frac{b}{2} \right) = \left( 2.15 - \frac{4}{2} \right)$$

$$e = 0.15 \text{ m}$$

### iv. Stresses at the base

$$\sigma = \frac{W}{b} \left( 1 \pm \frac{6e}{b} \right)$$

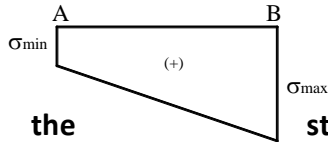
$$\sigma_{\text{max}} = \frac{W}{b} \left( 1 + \frac{6e}{b} \right) \text{ at base}$$

$$\sigma_{\max} = \frac{414}{4} \left( 1 + \frac{6 \times 0.15}{4} \right) = 126.78 \text{ kN/m}^2 \text{ (Comp.)}$$

$$\sigma_{\min} = \frac{W}{b} \left( 1 - \frac{6e}{b} \right) \text{ at heel}$$

$$\sigma_{\min} = \frac{414}{4} \left( 1 - \frac{6 \times 0.15}{4} \right) = 80.21 \text{ kN/m}^2 \text{ (Comp.)}$$

### Stress diagram



**Check the stability**  
**i. To avoid tension**

$$e \leq \frac{b}{6} = \frac{b}{6} = \frac{4}{6} = 0.6 \text{ mm}$$

$$e = 0.15 < \frac{b}{6} \text{ Hence no tension at base.}$$

**ii. To avoid overturning**

$$F.S = \frac{W(b-\bar{x})}{P \times \bar{h}} \geq 1.0 = \frac{414(4-1.55)}{104.625 \times 2.39} = 4.0 > 1.0$$

Hence safe against overturning.

**iii. To avoid sliding**

$$F.S = \frac{\mu \times W}{P} = \frac{0.6 \times 414}{104.625} = 2.37 > 1.00$$

Hence safe.

### Solved Problems:

#### Problem:1

A trapezoidal masonry retaining wall 1.2m wide at top, 3.6m wide at base is 6m high. The vertical face retains earth up to the top with an angle of repose of soil as  $30^\circ$ . Take weight of masonry as  $23 \text{ kN/m}^3$  and that of earth as  $16 \text{ kN/m}^3$ . Check the sliding of retaining wall for overturning and sliding. If  $\mu=0.60$  and F.O.S= 1.5

**Given data:**

Top width,  $a=1.2\text{m}$

Bottom width,  $b=3.6\text{m}$

Height,  $H=6\text{m}$

Angle of repose of soil  $\phi= 30^\circ$

Weight of masonry,  $\gamma_m=23 \text{ kN/m}^3$

Weight of soil,  $\gamma = 16 \text{ kN/m}^3$

**To Find :**

$$(i) \quad \sigma = \frac{V}{b} \left( 1 \pm \frac{6e}{b} \right)$$

(ii) Check the stability of retaining wall for overturning and sliding.

**Solution:**

**(i) weight of wall per meter run ( W )**

$$\begin{aligned} W &= \gamma_m \left( \frac{a+b}{2} \right) H \\ &= 23 \left( \frac{1.2+3.6}{2} \right) \times 6 \\ w &= 331.2 \text{ kN} \end{aligned}$$

This will act as  $\bar{x}$  distance from vertical face

$$\begin{aligned} \bar{x} &= \frac{a^2+ab+b^2}{3(a+b)} \\ &= \frac{1.2^2+(1.2 \times 3.6)+3.6^2}{3(1.2+3.6)} = 1.3 \text{ m} \end{aligned}$$

**(ii) rankine's earth pressure per meter run (P)**

$$\begin{aligned} P &= \frac{K_a \gamma H^2}{2} \\ k_a &= \frac{1-\sin \Phi}{1+\sin \Phi} \\ &= \frac{1-\sin 30^\circ}{1+\sin 30^\circ} = \left( \frac{1-0.5}{1+0.5} \right) \\ k_a &= \left( \frac{0.5}{1.5} \right) = 0.33 \\ P &= 0.33 \times \left( \frac{16 \times 6^2}{2} \right) \\ P &= 95.04 \text{ kN.} \end{aligned}$$

It will act at a distance  $\bar{h}$  from base

$$\bar{h} = \frac{H}{3} = \frac{6}{3} = 2 \text{ m}$$

**(iii) resultant thrust (R) per meter run**

$$R = \sqrt{W^2 + P^2} = \sqrt{331.2^2 + 95.04^2} = 344.56 \text{ kN}$$

**(iv) position of resultant thrust (R)**

$$\begin{aligned} z &= \bar{x} + \frac{P}{W} + \bar{h} \\ &= 1.3 + \left( \frac{95.04}{331.2} \times 2 \right) = 1.87 \text{ m} \\ z &= 1.87 \text{ m} \end{aligned}$$

**(v) eccentricity**

$$\begin{aligned} e &= z - \frac{b}{2} \\ &= 1.87 - \frac{3.6}{2} = 0.07 \text{ m} \\ e &= 0.07 \text{ m} \end{aligned}$$

**(vi) stress at base ( $\sigma$ )**

$$\begin{aligned} \sigma &= \frac{w}{b} \left( 1 \pm \frac{6e}{b} \right) \\ \sigma_{\max} &= \frac{w}{b} \left( 1 + \frac{6e}{b} \right) \\ &= \frac{331.2}{3.6} \left( 1 + \frac{6(0.07)}{3.6} \right) \\ &= 102.73 \text{ kN/m}^2 \\ \sigma_{\max} &= 102.73 \text{ kN/m}^2 \text{ (compression) } \\ \sigma_{\min} &= \frac{w}{b} \left( 1 - \frac{6e}{b} \right) \end{aligned}$$

$$= \frac{331.2}{3.6} \left( 1 - \frac{6(0.07)}{3.6} \right) = 81.267 \text{ kN/m}^2$$

$$\sigma_{\min} = 81.267 \text{ kN/m}^2 \text{ (compression)}$$

**Check the stability of wall**

**To avoid over turning**

$$F.S = \frac{W(b-\bar{x})}{P\bar{h}}$$

$$= \frac{331.2(3.6-1.3)}{95.04 \times 2} = 4 > 1.0 \text{ (Hence safe)}$$

Hence safe against overturning

**To avoid sliding**

$$F.S = \frac{\mu W}{P} = \geq 1.0$$

$$F.S(\text{sliding}) = \frac{0.6 \times 331.2}{95.04} = 2.07$$

$$2.07 \geq 1.0$$

Hence safe against sliding

**Problem:2**

A retaining wall 7.5m high a vertical face supports loose earth at a surcharged of  $20^\circ$  to the horizontal. If the earth has of repose of  $35^\circ$  and has an angle. Specific weight of  $16\text{KN/m}^3$ . Calculate the earth pressure per meter length of wall by rankine's formula. Also Calculate the horizontal and vertical components of the above earth pressure

**Given data:**

Height of wall  $h=7.5 \text{ m}$

Surcharge angle  $\alpha = 20^\circ$

Angle of repose  $\Phi = 35^\circ$

Specific weight of earth  $\gamma_e = 16\text{kN/m}^3$

**To Find**

- (i) earth pressure = ?
- (ii) Horizontal pressure = ?
- (iii) Vertical pressure = ?

**Solution:**

Co-efficient of active earth pressure

$$k_a = \cos \alpha \times \frac{\cos \alpha - \sqrt{\cos^2 \alpha - \cos^2 \Phi}}{\cos \alpha + \sqrt{\cos^2 \alpha - \cos^2 \Phi}}$$

$$= \cos 20^\circ \times \frac{\cos 20^\circ - \sqrt{\cos^2 20^\circ - \cos^2 35^\circ}}{\cos 20^\circ + \sqrt{\cos^2 20^\circ - \cos^2 35^\circ}}$$

$$= 0.9397 \times \frac{0.9397 - \sqrt{0.883 - 0.67}}{0.9397 + \sqrt{0.883 - 0.67}} = 0.57$$

$$= 0.32$$

Earth pressure per meter length oh wall

$$p = \frac{k_a \cdot \gamma_e \cdot h^2}{2}$$

$$= \frac{0.32 \times 16 \times 7.5^2}{2}$$

$$P = 144 \text{ kN}$$

Horizontal component,

$$P_H = P \cos \alpha$$

$$= 144 \times \cos 20^\circ$$

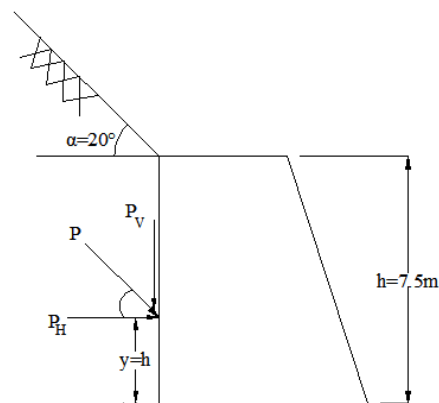
$$P_H = 135.32 \text{ kN}$$

Vertical pressure component,

$$P_V = P \sin \alpha$$

$$= 44 \times \sin 20^\circ$$

$$P_V = 49.25 \text{ kN}$$



**Result:**

- (i) Earth pressure per meter length of wall  $P=256.5 \text{ kN}$
- (ii) Horizontal component,  $P_H = 241.03 \text{ kN}$
- (iii) Vertical component,  $P_V = 87.7 \text{ kN}$

**Problem:3**

A masonry retaining wall of 1m wide at top and 3m wide at bottom retains earth on the vertical face up to the top. Calculate the maximum height of the wall to ensure safety against sliding. If the factor of safety against sliding is 1.5 co-efficient of friction is 0.6. specific weight of masonry is  $22\text{KN/m}^3$  and specific weight of soil is  $18\text{KN/m}^3$  angle of repose  $30^\circ$

**Given data:**

- Top width of wall,  $a=1\text{m}$
- Bottom width of wall,  $b= 3\text{m}$
- F.O.S against sliding  $= 1.5$
- Specific weight of masonry  $\gamma_m = 22 \text{ KN/m}^3$
- Co – efficient of friction,  $\mu = 0.6$
- Angle of repose,  $\Phi = 30^\circ$
- Specific weight of soil  $\gamma = 18 \text{ kN/m}^3$

**To Find:**

Maximum height of the wall to ensure safety against sliding

**Solution:**

Co-efficient of action earth pressure

$$k_a = \frac{1 - \sin \phi}{1 + \sin \phi}$$

$$= \frac{1 - \sin 30^\circ}{1 + \sin 30^\circ} = \left( \frac{1 - 0.5}{1 + 0.5} \right)$$

$$= \left( \frac{0.5}{1.5} \right) = 0.333$$

Lateral earth pressure

$$P = \frac{k_a \cdot \gamma \cdot h^2}{2}$$

$$= 0.333 \times \left( \frac{18 \cdot h^2}{2} \right)$$

$$P = 3h^2$$

Weight of retaining wall

$$W = \frac{\gamma_m \cdot h}{2} (a+b)$$

$$= \frac{22 \times h}{2} (1+3)$$

$$W = 44h$$

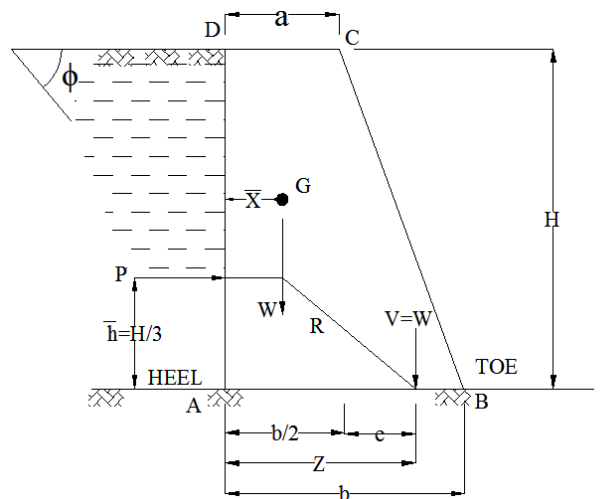
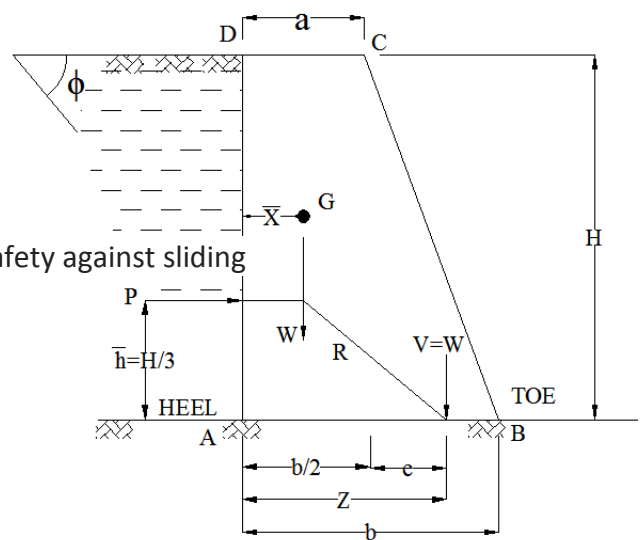
$$\text{To avoid sliding F.O.S} = \frac{\mu W}{P}$$

$$1.5 = \frac{0.6 \times 44h}{3h^2}$$

$$h = 5.87\text{m}$$

**Problem:4**

A retaining trapezoidal in section 10m high, 1m wide at top, 3.2 m wide at bottom with a vertical face retains earth level with the top of the wall. If the weight of the masonry is  $24 \text{ kN/m}^3$  and that of earth is  $18 \text{ kN/m}^3$  with an angle of repose of  $40^\circ$ . Calculate the maximum and minimum stresses at the base.





**Given data:**Height of wall,  $h = 10\text{m}$ Top width,  $a = 1\text{m}$ Bottom width,  $b = 3.2\text{m}$ Specific weight of earth,  $\gamma_e = 18 \text{ kN/m}^3$ Specific weight of masonry,  $\gamma_m = 24 \text{ kN/m}^3$ Angle of repose of soil,  $\Phi = 40^\circ$ **To Find:**

Maximum and minimum stresses at the base.

i.e.,  $\sigma_{\max}$  and  $\sigma_{\min}$ 

Co-efficient of active earth pressure

$$k_a = \frac{1 - \sin \phi}{1 + \sin \phi}$$

$$= \frac{1 - \sin 40^\circ}{1 + \sin 40^\circ} = 0.217$$

**Lateral earth pressure**

$$P = \frac{k_a \cdot \gamma \cdot h^2}{2}$$

$$= 0.217 \times \left( \frac{18 \times 10^2}{2} \right)$$

$$P = 195.30 \text{ kN}$$

**Weight of retaining wall**

$$W = \frac{\gamma_m \cdot h}{2} (a + b)$$

$$= \frac{24 \times 10}{2} (1 + 3.2)$$

$$W = 504 \text{ kN}$$

$$\bar{X} = \frac{a^2 + ab + b^2}{3(a + b)}$$

$$= \frac{1^2 + (1 \times 3.2) + 3.2^2}{3(1 + 3.2)}$$

$$= 1.146 \text{ m}$$

$$Z = \bar{X} + \left( \frac{P}{W} \times \frac{h}{3} \right)$$

$$= 1.146 + \left( \frac{195.30}{504} \times \frac{10}{3} \right) = 2.44 \text{ m}$$

$$Z = 2.44 \text{ m}$$

**eccentricity (e),**

$$e = Z - \frac{b}{2}$$

$$= 2.44 - \frac{3.2}{2} = 0.84 \text{ m}$$

$$e = 0.84 \text{ m}$$

**stress at base ( $\sigma$ )**

$$\sigma = \frac{W}{b} \left( 1 \pm \frac{6e}{b} \right)$$

$$= \frac{504}{3.2} \left( 1 + \frac{6(0.8)}{3.2} \right) = 393.75 \text{ kN/m}^2$$

$$\sigma_{\max} = 393.75 \text{ kN/m}^2 \text{ (compression)}$$

$$= \frac{504}{3.2} \left( 1 - \frac{6(0.8)}{3.2} \right) = -78.75 \text{ kN/m}^2$$

$$\sigma_{\min} = 78.75 \text{ kN/m}^2 \text{ (tension)}$$

$$\sigma_{\max} = \frac{W}{b} \left( 1 + \frac{6e}{b} \right)$$

$$\sigma_{\min} = \frac{W}{b} \left( 1 - \frac{6e}{b} \right)$$

**Result:**

$$\sigma_{\max} = 393.75 \text{ kN/m}^2 \text{ (compression)}$$

$$\sigma_{\min} = 78.75 \text{ kN/m}^2 \text{ (tension)}$$

**Problem:5**

A retaining wall trapezoidal in section is 8m high. 1m wide at top and 3m wide at the bottom with a vertical earth face retains earth level with the top of the wall. If the weight of masonry is 24 kN/m<sup>3</sup> and that of the earth is 18 kN/m<sup>3</sup> with an angle of repose of 30°. Calculate the maximum and minimum stress at base.

**Give data:**

$$\text{Height, } h = 8\text{m}$$

$$\text{Top width, } a = 1\text{m}$$

$$\text{Bottom width, } b = 3\text{m}$$

$$\text{Weight of masonry, } \gamma_m = 24 \text{ kN/m}^3$$

$$\text{Weight of earth, } \gamma_e = 18 \text{ kN/m}^3$$

$$\text{Angle of repose } \Phi = 30^\circ$$

**To Find:**

check the stability of wall

**Solution:**

Co-efficient of action earth pressure

$$k_a = \frac{1 - \sin \phi}{1 + \sin \phi}$$

$$= \frac{1 - \sin 30^\circ}{1 + \sin 30^\circ} = 0.333$$

$$k_a = 0.333$$

$$\text{Lateral earth pressure} = \frac{k_a \cdot \gamma_e \cdot h^2}{2}$$

$$= \frac{0.333 \times 18 \times 8^2}{2}$$

$$P = 191.808 \text{ kN}$$

Weight of retaining wall

$$W = \frac{\gamma_m \cdot h}{2} (a+b)$$

$$= \frac{24 \times 8}{2} (1+3)$$

$$W = 384 \text{ kN}$$

$$\bar{X} = \frac{a^2 + ab + b^2}{3(a+b)}$$

$$= \frac{1^2 + (1 \times 3) + 3^2}{3(1+3)}$$

$$\bar{X} = 1.08 \text{ m}$$

$$Z = \bar{X} + \frac{P}{W} \times \frac{h}{3}$$

$$= 1.08 + \left( \frac{191.808}{384} \times \frac{8}{3} \right) = 2.41 \text{ m}$$

$$Z = 2.41 \text{ m}$$

**eccentricity**

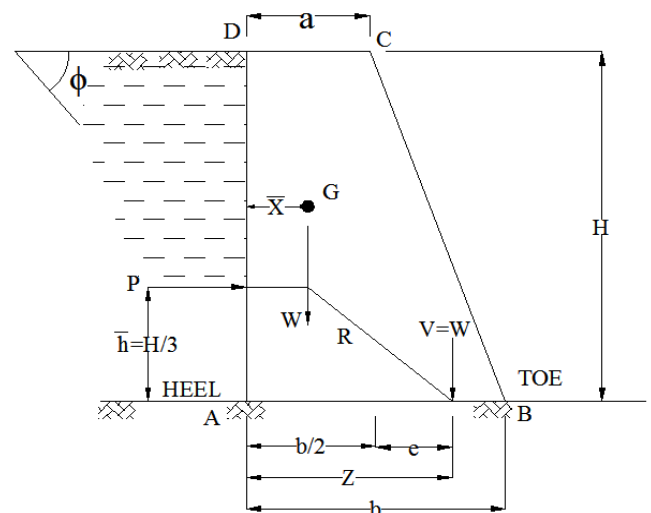
$$e = Z - \frac{b}{2}$$

$$= 2.41 - \frac{3}{2} = 0.91 \text{ m}$$

$$e = 0.91 \text{ m}$$

**check for stability****(i) Check for tension at the base**

$$e = 0.91 \text{ m}$$



$$\frac{b}{6} = \frac{3}{6} = 0.5\text{m}$$

$e > \frac{b}{6}$ , the retaining wall is not safe against tension.

**(ii) Check the overturning**

$$\text{Overturning moment} = P \times \frac{h}{3}$$

$$= 191.808 \times \frac{8}{3}$$

$$= 511.48 \text{ kN.m}$$

$$\text{Stabilizing moment} = W (b - \bar{x})$$

$$= 384 (3 - 1.08)$$

$$= 737.28 \text{ kN.m}$$

$$\text{Factor of safety} = \frac{\text{stabilizing moment}}{\text{overturning moment}}$$

$$= \frac{737.28}{511.48} = 1.44 < 1.5$$

The retaining wall is not safe

**(iii) Check for sliding**

$$\text{Force causing sliding } P = 191.808 \text{ KN}$$

$$\text{Force resisting sliding} = \mu \cdot W$$

$$= 0.6 \times 384$$

$$= 230.4 \text{ kN}$$

$$\text{Force of safety} = \frac{\mu \cdot W}{P}$$

$$= \frac{230.4}{384} = 0.6 < 1.5$$

The retaining wall is not safe against sliding

#### Problem:6

A retaining wall 2m wide at top, 4m wide at the base and 6m high retains earth to its full height on the vertical face. There is a road on the top of retaining earth which transmits uniform surcharged load of  $60 \text{ KN/m}^2$ . Take weight of masonry and earth are  $24 \text{ KN/m}^3$  and  $18 \text{ kN/m}^3$ . An angle of earth as  $40^\circ$ . Calculate the magnitude and the position of line of action of horizontal earth pressure per meter length of wall.

**To Find :**

- (i) Horizontal pressure  $P = ?$
- (ii) Position of horizontal pressure  $\bar{y} = ?$

**Solution :**

- (i) Co-efficient of active earth pressure ( $k_a$ )

$$k_a = \frac{1 - \sin \phi}{1 + \sin \phi} = \frac{1 - \sin 40^\circ}{1 + \sin 40^\circ} = 0.217$$

$$k_a = 0.217$$

**Given data:**Top width,  $a=2\text{m}$ Bottom width,  $b=4\text{m}$ Height,  $H=6\text{m}$ Uniform surcharged load,  $q=60\text{ kN/m}^2$ Angle of repose of soil,  $\Phi=40^\circ$ Specific weight of earth,  $\gamma_e=18\text{ kN/m}^3$ Specific weight of masonry,  $\gamma_m=24\text{ kN/m}^3$ **(ii) Pressure diagram**Intensity of pressure due to surcharged load at top  $= k_a \times q$ Intensity of pressure due to surcharged load at bottom  $= k_a \times q$ 

Draw pressure diagram of rectangle BCDB as shown in figure.

Intensity of pressure due to earth at top ( $h=0$ )  $= k_a \cdot h = 0$ Intensity of pressure due to earth at bottom ( $h=H$ )  $= k_a \cdot H$ 

Draw pressure diagram of triangle AED as shown in figure.

**(iii) Horizontal earth pressure per meter run (P)**

$$P=P_1+P_2$$

 $P_1$  = pressure due to surcharged load $P_2$  = area of triangle BCDE

$$P_1=0.218 \times 60 \times 6 = 78.48\text{ kN}$$

This will act at  $y_1$  distance from base

$$y_1 = \frac{H}{2} = \frac{6}{2} = 3\text{m}$$

 $P_2$  = pressure due to retained earth $P_2$  = area of triangle AED

$$P_2 = \frac{1}{2} \times (k_a \times \gamma_m \times H) \times H$$

$$P_2 = \frac{1}{2} (0.217 \times 18 \times 6) \times 6$$

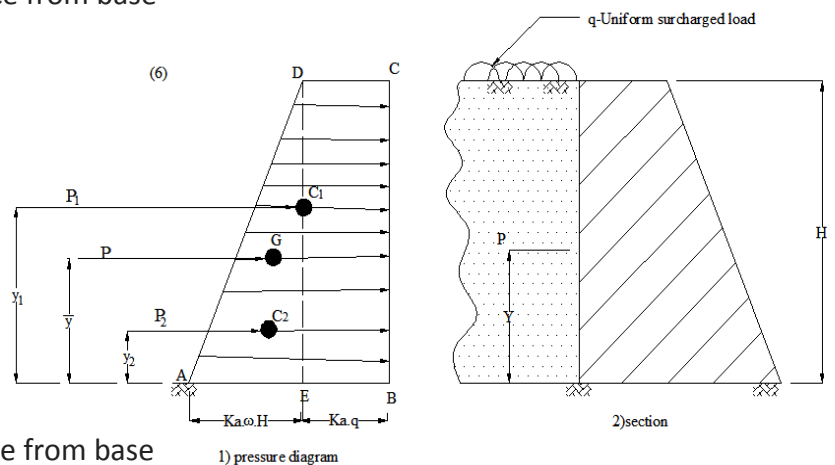
$$P_2 = 70.308\text{ kN}$$

This will act at  $y_2$  distance from base

$$y_2 = \frac{H}{3} = \frac{6}{3} = 2\text{m}$$

Total horizontal pressure  $P = P_1 + P_2$ 

$$= 78.12 + 70.308 = 148.428\text{ kN}$$

This pressure will act at  $\bar{y}$  distance from bottom

**(iv) Position of horizontal earth pressure ( from base  $\bar{y}$ )**

$$P_x \bar{y} = P_1 Y_1 + P_2 Y_2$$

$$\bar{y} = \frac{1}{P} (P_1 Y_1 + P_2 Y_2)$$

$$= \frac{1}{148.428} (78.12 \times 3 + 70.308 \times 2)$$

$$\bar{y} = 2.56 \text{ m from base}$$

**Result:**

$$P = 148.428 \text{ kN}$$

$$\bar{y} = 2.56 \text{ m}$$

**Problem: 7**

A retaining wall, 6m high with a smooth vertical back, retains earth level with the top of the wall. Determine the magnitude and line of action of the horizontal thrust per meter length of wall. The weight of sand is  $20 \text{ kN/m}^3$  and its angle of repose is  $40^\circ$ .

**Given data**

$$\text{Height, } h = 6 \text{ m}$$

$$\text{Unit weight of sand, } \gamma = 20 \text{ kN/m}^3$$

$$\text{Angle of repose, } \phi = 40^\circ$$

**To Find:**

$$\text{Horizontal thrust 'P' = ?}$$

$$\text{Line of action of P, } y = ?$$

**Solution**

Co-efficient of active earth pressure,

$$K_a = \frac{1 - \sin \phi}{1 + \sin \phi}$$

$$= \frac{1 - \sin 40^\circ}{1 + \sin 40^\circ} = 0.2174$$

Horizontal thrust per meter length of wall,

$$P = \frac{K_a \cdot \gamma \cdot h^2}{2}$$

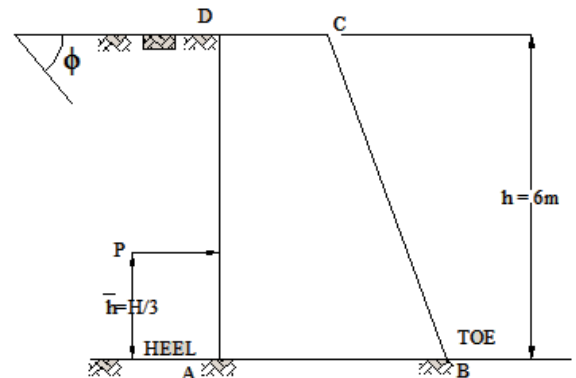
$$= 0.2174 \times \frac{20 \times 6^2}{2}$$

$$= 78.264 \text{ kN}$$

$$\text{Line of action } y = \frac{h}{3} = \frac{6}{3} = 2 \text{ m}$$

**Result**

Horizontal thrust  $P = 78.264 \text{ kN}$  acting of 2m above the base.



**Problem: 8**

A retaining wall of 5m high has a vertical earth face retains earth level with the top of the wall. In the top 3m, the weight of retained material is  $20 \text{ kN/m}^3$  while below this level it is  $24 \text{ kN/m}^3$ . The angle of repose of the two retained material is  $30^\circ$ . The wall also carries an uniform surcharge load of  $18 \text{ kN/m}^2$  at the top. Calculate the magnitude and position of lateral thrust on the wall.

**Given data**

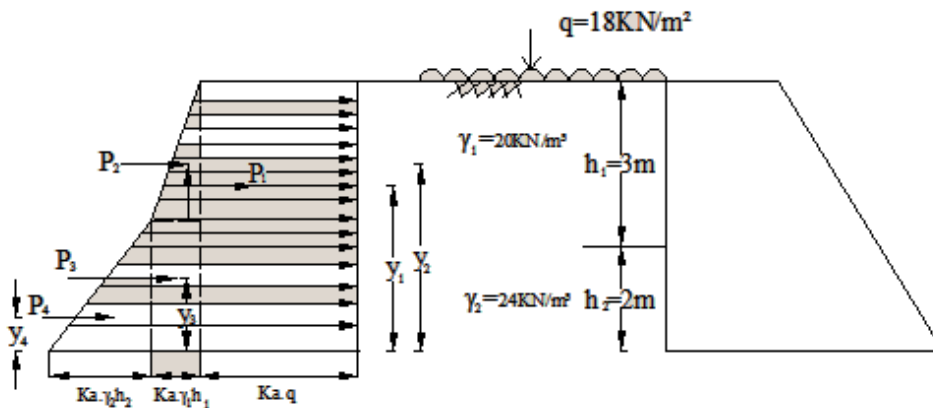
Height of wall,  $h = 5 \text{ m}$

Sp. Weight of soil for the top 3m  $\gamma_1 = 20 \text{ kN/m}^3$

Sp. weight of soil for the bottom 2m  $\gamma_2 = 24 \text{ kN/m}^3$

Surcharge load at top  $q = 18 \text{ kN/m}^2$

Angle of repose,  $\Phi = 30^\circ$

**To Find:**

Horizontal thrust  $P = ?$

Line of action of horizontal thrust,  $y = ?$

**Solution**

Co-efficient of action earth pressure,

$$k_a = \frac{1 - \sin \phi}{1 + \sin \phi}$$

$$= \frac{1 - \sin 30^\circ}{1 + \sin 30^\circ} = 0.333$$

$P_1$  = pressure due to surcharge load 'q'

$$= k_a \cdot q \cdot h = 0.333 \times 18 \times 5 = 29.97 \text{ kN}$$

$$Y_1 = \frac{h}{2} = \frac{5}{2} = 2.5 \text{ m above the base.}$$

Pressure due to the top soil of  $\gamma_1 = 20 \text{ kN/m}^3$

$$P_2 = \frac{k_a \cdot \gamma_1 \cdot h_1^2}{2} = 0.333 \times \frac{20 \times 3^2}{2} = 29.97 \text{ kN}$$

$$Y_2 = 2 + \frac{1}{3} \times 3 = 3 \text{ m above the base}$$

$$P_3 = k_a \cdot \gamma_1 \cdot h_1 \cdot h_2 = 0.333 \times 20 \times 3 \times 2 = 39.96 \text{ kN}$$

$$Y_3 = \frac{2}{2} = 1 \text{ m above the base}$$

Pressure due to the bottom soil of  $\gamma_2 = 24 \text{ kN/m}^3$

$$P_4 = \frac{k_a \cdot \gamma_2 \cdot h_2^2}{2} = 0.333 \times \frac{24 \times 2^2}{2} = 15.984 \text{ kN}$$

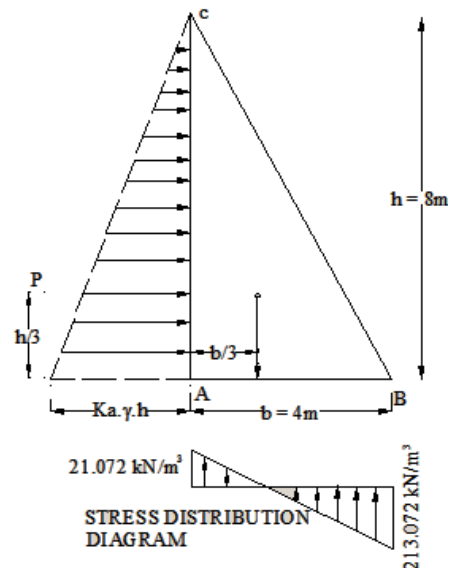
$$Y_4 = \frac{1}{3} \times 2 = 0.667 \text{ m above the base}$$

Total horizontal earth pressure,

$$\begin{aligned} P &= P_1 + P_2 + P_3 + P_4 \\ &= 29.97 + 29.97 + 39.96 + 15.984 \\ &= 115.884 \text{ kN} \end{aligned}$$

Line of acting of P ,

$$\begin{aligned} Y &= \frac{P_1 \cdot Y_1 + P_2 \cdot Y_2 + P_3 \cdot Y_3 + P_4 \cdot Y_4}{P_1 + P_2 + P_3 + P_4} \\ &= \frac{29.97 \times 2.5 + 29.97 \times 3 + 39.96 \times 1 + 15.984 \times 0.667}{115.884} \\ &= 1.776 \text{ m above the base} \end{aligned}$$



**Result:**

Total horizontal earth pressure,  $P = 115.884 \text{ kN}$  acting at  $y = 1.776 \text{ m}$  the base.

**Problem: 9**

A retaining wall triangular in section is 8m high and 4m wide at the base, with a vertical face retaining earth level with the top of the wall. Draw curves of variation of (1) intensity of earth pressure on the vertical face. (2) the nominal stress intensity on the base, if the specific weight of earth is  $20 \text{ kN/m}^3$  with an angle of repose of  $30^\circ$  and the specific weight of masonry is  $24 \text{ kN/m}^3$ .

**Given data:**

Height of wall,  $h = 8\text{m}$

Bottom of width,  $b = 4\text{m}$

Specific weight of earth,  $\gamma_e = 20 \text{ kN/m}^3$

Specific weight of masonry,  $\gamma_m = 24 \text{ kN/m}^3$

Angle of repose of soil,  $\Phi = 30^\circ$

**To Find:**

- (1) Intensity earth pressure on the vertical face.
- (2) Nominal stresses at the base

**Solution**

Co- efficient of action earth pressure,

$$\begin{aligned} k_a &= \frac{1 - \sin \phi}{1 + \sin \phi} \\ &= \frac{1 - \sin 30^\circ}{1 + \sin 30^\circ} = 0.333 \end{aligned}$$

(1) Intensity of earth pressure on the vertical face:

Intensity of earth pressure at top = 0

Intensity of earth pressure at the base =  $k_a \cdot \gamma_e \cdot h$

$$= 0.333 \times 20 \times 8$$

$$= 53.28 \text{ kN/m}^2$$

Lateral earth pressure,

$$\begin{aligned}
 P &= \frac{k_a \cdot \gamma \cdot h^2}{2} \\
 &= 0.333 \times \frac{20 \times 8^2}{2} \\
 &= 213.12 \text{ kN}
 \end{aligned}$$

Weight of retaining wall,

$$\begin{aligned}
 W &= \frac{\gamma_m \cdot h}{2} (a + b) \\
 &= \frac{24 \times 8}{2} (0 + 4) = 384 \text{ kN}
 \end{aligned}$$

$$\bar{X} = \frac{b}{3} = \frac{4}{3} = 1.333 \text{ m}$$

$$\begin{aligned}
 Z &= \bar{X} + \frac{P}{W} \times \frac{h}{3} \\
 &= 1.333 + \frac{213.12 \times 8}{384 \times 3} \\
 &= 2.813 \text{ m}
 \end{aligned}$$

$$e = z - \frac{b}{2} = 2.813 - \frac{4}{2} = 0.813 \text{ m}$$

2) Nominal stresses at the base:

$$\begin{aligned}
 \sigma_{\max} &= \frac{W}{b} \left( 1 + \frac{6e}{b} \right) \\
 &= \frac{384}{4} \left( 1 + \frac{6 \times 0.813}{4} \right) \\
 &= 213.072 \text{ kN/m}^2 \text{ (comp)}
 \end{aligned}$$

$$\begin{aligned}
 \sigma_{\min} &= \frac{W}{b} \left( 1 - \frac{6e}{b} \right) \\
 &= \frac{384}{4} \left( 1 - \frac{6 \times 0.813}{4} \right) \\
 &= -21.072 \text{ kN/m}^2 \text{ (tension)}
 \end{aligned}$$

**Result :**

1. Intensity of earth pressure at the base = 53.28 kN/m<sup>2</sup>

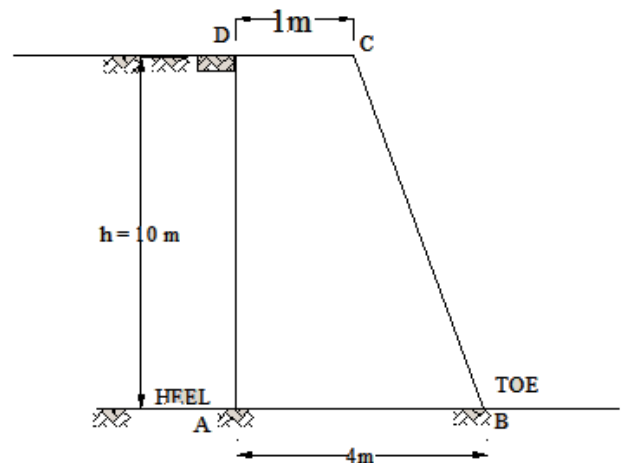
2. Nominal stress at the base,

$$\sigma_{\max} = 213.072 \text{ kN/m}^2 \text{ (comp)}$$

$$\sigma_{\min} = -21.072 \text{ kN/m}^2 \text{ (tension)}$$

**Problem: 10**

A masonry retaining wall is 10 m high and has a vertical face on the earth side. The top width of retaining wall is 1m and bottom width is 4m. The angle of repose is 30°. Weight of earth is 18 kN/m<sup>3</sup> and weight of masonry is 24 kN/m<sup>3</sup>. Check the stability of the retaining wall with respect to (i) No tension state, (ii) over turning and (iii) sliding if  $\mu = 0.6$  and F.O.S = 1.5.





**Given data:**

Height of wall  $h = 10\text{m}$

Top width  $a = 1\text{m}$

Bottom width  $b = 4\text{m}$

Angle of repose  $\Phi = 30^\circ$

Specific weight of earth  $\gamma_e = 18 \text{ kN/m}^3$

Specific weight of masonry  $\gamma_m = 24 \text{ kN/m}^3$

Co-efficient of friction,  $\mu = 0.6$

Factor of safety F.O.S = 1.5

**To Find:**

Check the stability of wall

**Solution**

Co-efficient of active earth pressure

$$k_a = \frac{1 - \sin \phi}{1 + \sin \phi}$$

$$= \frac{1 - \sin 30^\circ}{1 + \sin 30^\circ} = 0.333$$

Lateral earth pressure

$$P = \frac{k_a \cdot \gamma \cdot h^2}{2}$$

$$= 0.333 \times \frac{18 \times 10^2}{2}$$

$$= 299.97 \text{ kN}$$

Weight of retaining wall,

$$W = \frac{\gamma_m \cdot h}{2} (a+b)$$

$$= \frac{24 \times 10}{2} (1+4) = 600 \text{ kN}$$

$$\bar{X} = \frac{a^2 + ab + b^2}{3(a+b)}$$

$$= \frac{1^2 + (1 \times 4) + 4^2}{3(1+4)} = 1.4\text{m}$$

$$Z = \bar{X} + \frac{P}{W} \times \frac{h}{3}$$

$$= 1.4 + \frac{299.97}{600} \times \frac{10}{3}$$

$$= 3.07 \text{ m}$$

$$e = z - \frac{b}{2} = 3.07 - \frac{4}{2} = 1.07 \text{ m}$$

**Check for stability****(i) Check for tension at the base**

$$e = 1.07 \text{ m}$$

$$\frac{b}{6} = \frac{4}{6} = 0.667 \text{ m}$$

$e > \frac{b}{6}$ , the retaining wall is not safe against tension.

**(ii) Check for over turning**

$$\text{Over turning moment} = P \times \frac{h}{3} = 299.97 \times \frac{10}{3} = 999.9 \text{ kN.m}$$

$$\text{Stability moment} = W (b - \bar{X})$$

$$= 600 (4 - 1.4) = 1560 \text{ kN.m}$$

$$\text{Factor of safety} = \frac{\text{stabilizing moment}}{\text{over turning moment}}$$

$$= \frac{1560}{999.9} = 1.56 > 1.5$$

The retaining wall is safe against over turning

**(iii)Check for sliding**

For causing sliding =  $P = 299.97 \text{ kN}$

Force resisting sliding =  $\mu \cdot W$

=  $0.6 \times 600 = 360 \text{ kN}$

Force of safety =  $\frac{\mu \cdot W}{P}$

=  $\frac{360}{299.97} = 1.2 < 1.5$

The retaining wall is not safe against sliding.

## HIGHLIGHTS

### Difference between active and passive earth pressure

Sl No	Active earth pressure	Passive earth pressure
1	The lateral pressure exerted by the retained earth on the retaining wall is known as active earth pressure.	The lateral pressure exerted by the retaining wall on the retained soil is known as passive earth pressure.
2	The wall tends to move away from the soil.	The retaining wall tends to move against the soil.
3	It is due to the expansion of soil.	It is due to the contraction of soil.
4	The angle made by the failure plane with horizontal, $i = 45 + \frac{\phi}{2}$	The angle made by the failure plane with horizontal $i = 45 - \frac{\phi}{2}$
5	The intensity of active earth pressure is given by $P_a = k_a \cdot \gamma \cdot h$ . where $h$ = height of soil retained and $k_a$ = co-efficient active earth pressure. $= \frac{1 - \sin \phi}{1 + \sin \phi}$	The intensity of passive earth pressure is given by $P_p = k_p \cdot \gamma \cdot h$ . where $h$ = height of soil retained and $k_p$ = co-efficient passive earth pressure. $= \frac{1 + \sin \phi}{1 - \sin \phi}$
6	The active earth pressure is the practical pressure which acts on the retaining wall.	The passive earth pressure is the theoretical pressure which rarely comes into play.

## REVIEW QUESTIONS

### Two mark questions

1. Define angle of repose of soil.
2. Write the Rankine's total earth pressure formula for the retaining wall retaining earth with level back fill.
3. Write the Rankine's total earth pressure formula for the retaining wall retaining earth with angular surcharge.
4. What is an active earth pressure?
5. What is passive earth pressure?
6. What are state of equilibrium of soil?
7. What is meant by plastic equilibrium of soil?
8. What is an elastic equilibrium of soil?
9. At which point of the base, the bearing pressure will be maximum in a retaining wall?
10. What will be the co-efficient of passive earth pressure of soil having angle of repose  $30^\circ$ ?

### Three marks

1. Explain state of equilibrium of soil.
2. Explain active and passive earth pressure in retaining wall.
3. Explain the angle of repose of soil.
4. Distinguish between active and passive earth pressure.
5. What are the assumption made in Rankine's theory of earth pressure?
6. Explain the Rankine's theory of earth pressure.
7. What are the forces acting on the retaining wall to keep it in equilibrium? Draw the normal stress distribution diagram to avoid tension at the base.
8. State the conditions to check the stability of retaining wall.
9. Develop Rankine's total earth pressure formula for the retaining wall retaining earth with uniform surcharge.
10. Develop Rankine's total earth pressure formula for the retaining wall retaining earth with angular surcharge.

### Ten marks

1. A retaining wall trapezoidal in section is 9m high, 2m wide at top and 3m wide at the bottom with a vertical earth face retaining earth level with the top of wall. If the weight of masonry is  $24\text{kN/m}^3$  and that of the earth is  $18\text{kN/m}^3$  with an angle of repose of  $30^\circ$ . Calculate the maximum and minimum stress at the base.
2. A retaining wall 7.5m high with a vertical face supports loose earth at a surcharge of  $20^\circ$  to the horizontal, if the earth has an angle of repose of  $35^\circ$  and has a specific weight of  $20\text{kN/m}^3$ . Calculate the earth pressure per meter length of wall by Rankine's formula. Calculate the horizontal and vertical components of the above earth pressure.

3. A retaining wall 6m high with a smooth vertical back retains earth level with the top of the wall. Determine the magnitude and the line of action of the horizontal thrust per meter length of wall. The weight of sand is  $20 \text{ kN/m}^3$  and its angle of repose  $40^\circ$ .
4. A trapezoidal masonry retaining wall 1m wide at top, 2m wide at the base is 7.5m high. It retains earth on its vertical face with the top of the wall. The angle of repose of soil is  $30^\circ$ . Take weight of masonry as  $22 \text{ kN/m}^3$  and weight of earth as  $18 \text{ kN/m}^3$ . Check the stability of retaining wall, if the co-efficient of friction between masonry and soil as 0.60 and factor of safety as 1.50.
5. A retaining wall 2m wide at the top, 4m wide at the base and 6m high retains earth to its full height on the vertical face. There is road on the top of retained earth which transmits uniform surcharged load of  $50 \text{ kN/m}^2$ . Take weight of earth as  $18 \text{ kN/m}^3$  and angle of repose of earth as  $30^\circ$ . Calculate the magnitude and the position of line of action of horizontal earth pressure per meter length of wall.
6. A trapezoidal masonry retaining wall 1.5m wide at the top, 5m wide at the base and 9m high with a vertical face retains earth level with the top of the wall at 2m below the top level, the foundation of structures transmits a uniform surcharged load of  $120 \text{ kN/m}^2$ . Take weight of earth as  $20 \text{ kN/m}^3$  and angle of repose of earth as  $35^\circ$ . Calculate the magnitude and the position of the earth pressure on the retaining wall.